



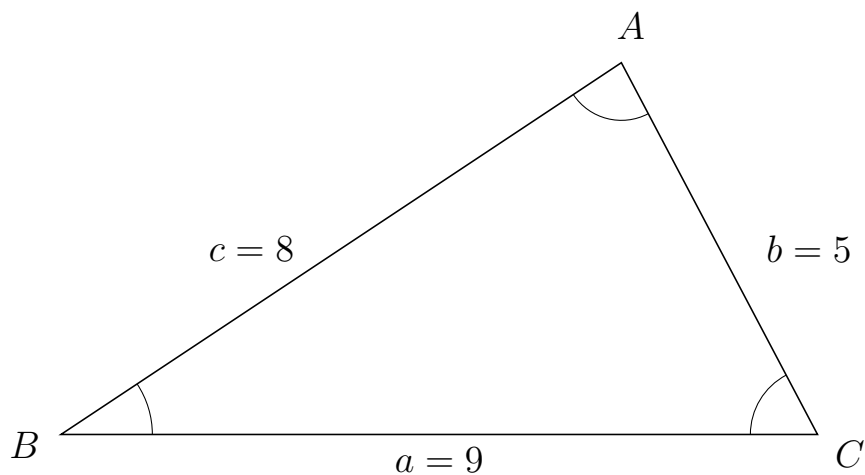
Trigonometri

Sider og vinkler abc

12. marts 2017



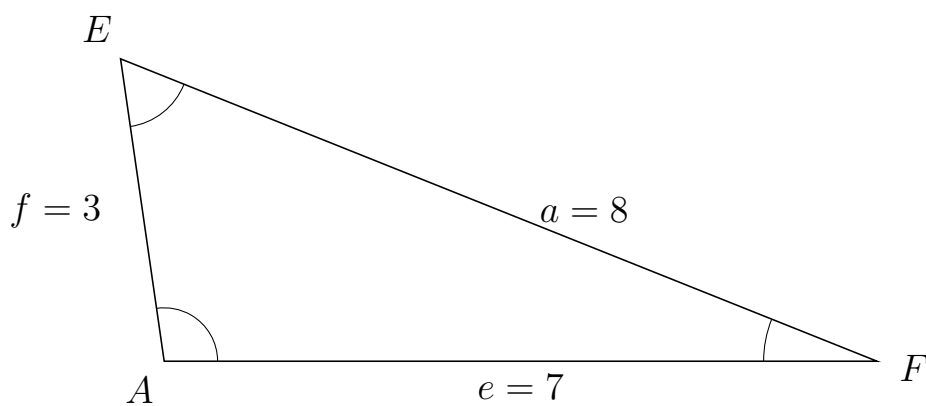
1 I trekant BAC er $b = 5$, $a = 9$ og $c = 8$.



a) Bestem vinkel A .

$A = 84.26$

2 I trekant AEF er $a = 8$, $e = 7$ og $f = 3$.



a) Bestem vinkel E .

$E = 60$



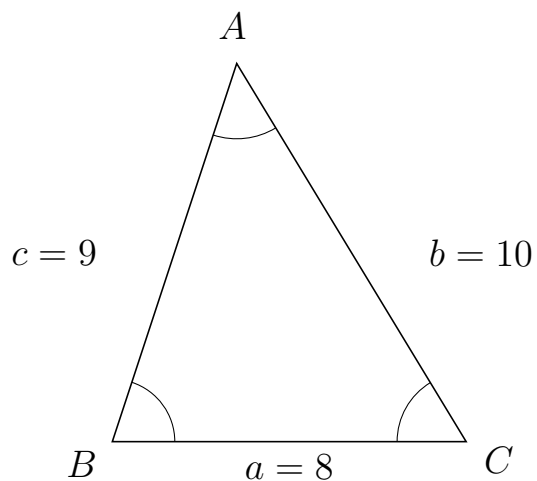
Trigonometri

Sider og vinkler abc

12. marts 2017



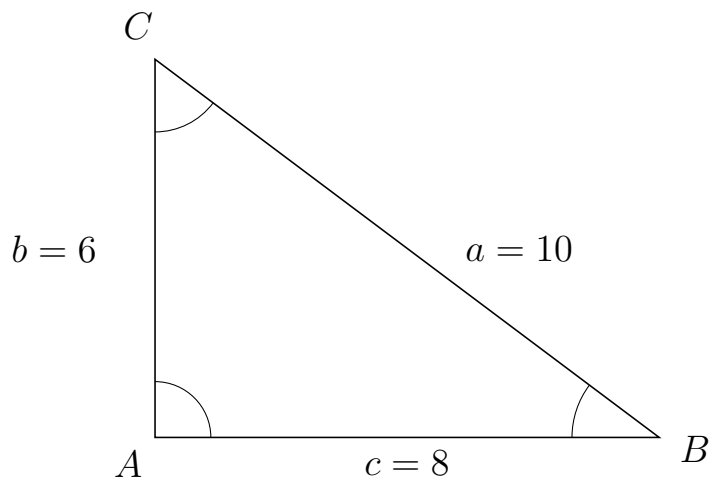
3 I trekant BAC er $b = 10$, $a = 8$ og $c = 9$.



a) Bestem vinkel A .

$A = 49.46$

4 I trekant ACB er $a = 10$, $c = 8$ og $b = 6$.



a) Bestem vinkel C .

$C = 53.13$

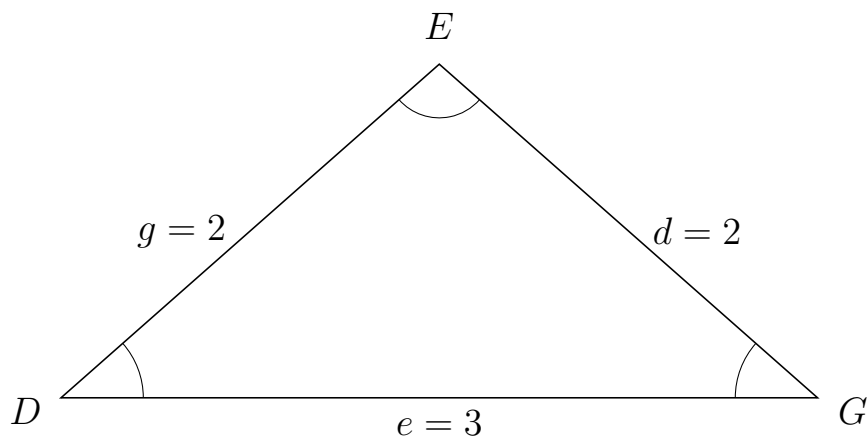


Trigonometri

Sider og vinkler abc

12. marts 2017

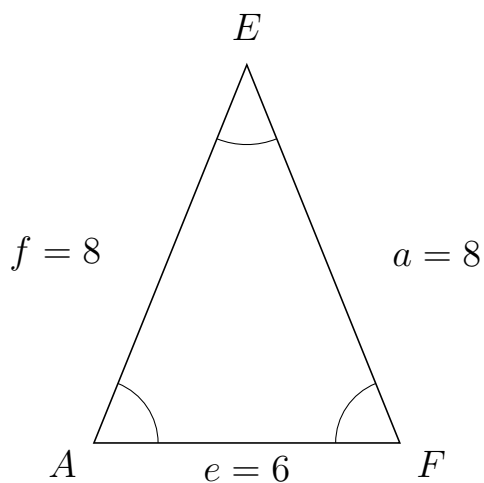
5 I trekant DEG er $d = 2$, $e = 3$ og $g = 2$.



a) Bestem vinkel E .

$E = 97.18$

6 I trekant AEF er $a = 8$, $e = 6$ og $f = 8$.



a) Bestem vinkel E .

$E = 44.05$



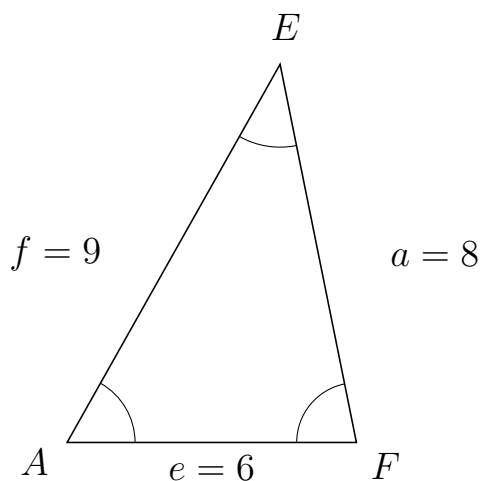
Trigonometri

Sider og vinkler abc

12. marts 2017



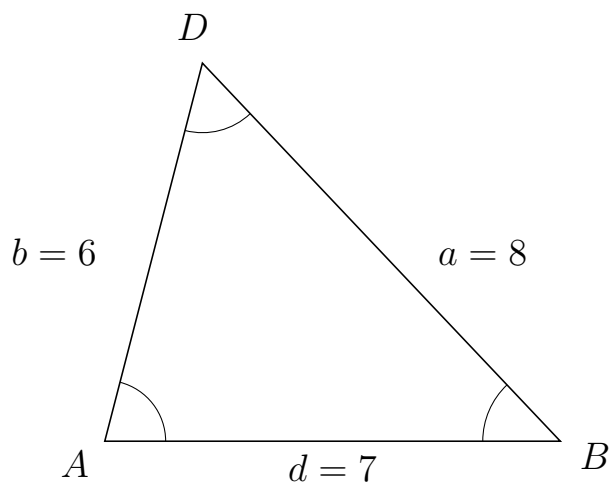
7 I trekant AEF er $a = 8$, $e = 6$ og $f = 9$.



a) Bestem vinkel E .


$E = 40.8$

8 I trekant ADB er $a = 8$, $d = 7$ og $b = 6$.



a) Bestem vinkel D .

$D = 57.91$



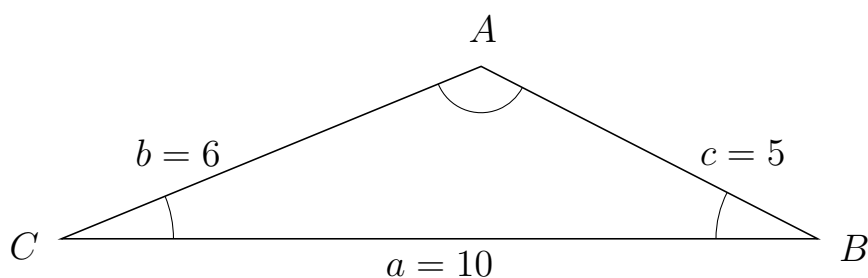
Trigonometri

Sider og vinkler abc

12. marts 2017



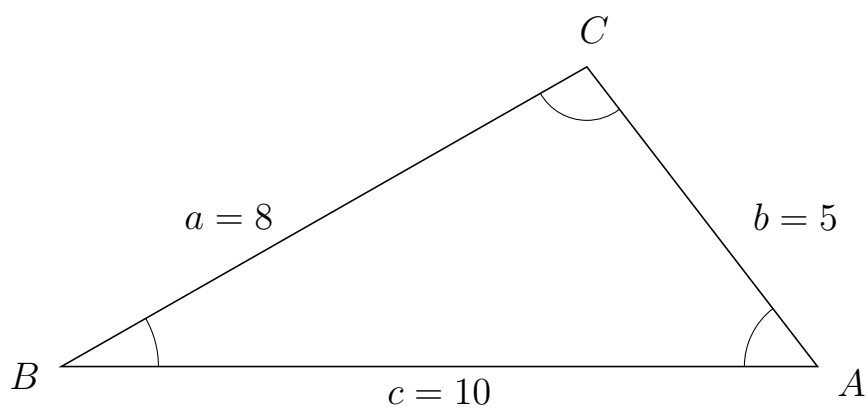
9 I trekant CAB er $c = 5$, $a = 10$ og $b = 6$.



a) Bestem vinkel A .

$A = 130.54$

10 I trekant BCA er $b = 5$, $c = 10$ og $a = 8$.



a) Bestem vinkel C .

$C = 97.9$

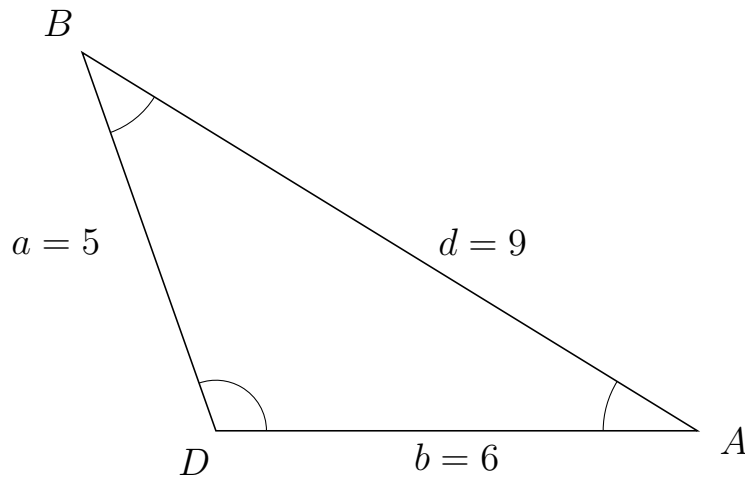


Trigonometri

Sider og vinkler abc

12. marts 2017

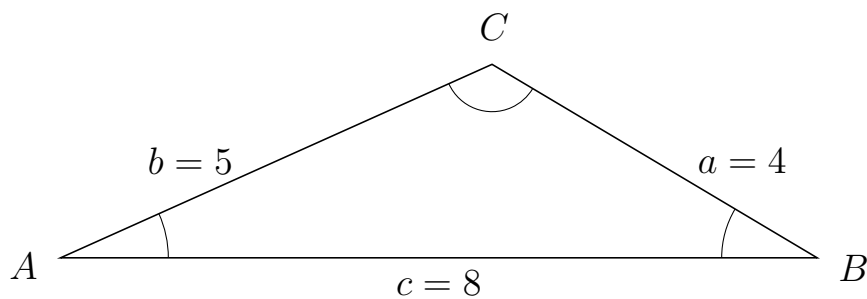
11 I trekant DBA er $d = 9$, $b = 6$ og $a = 5$.



a) Bestem vinkel B .

$B = 38.94$

12 I trekant ACB er $a = 4$, $c = 8$ og $b = 5$.



a) Bestem vinkel C .

$C = 125.1$



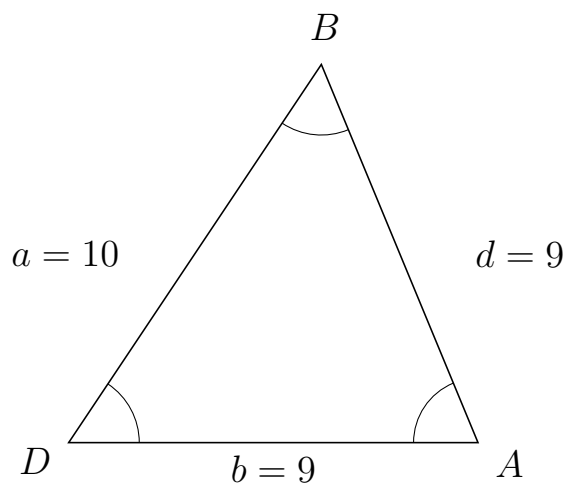
Trigonometri

Sider og vinkler abc

12. marts 2017



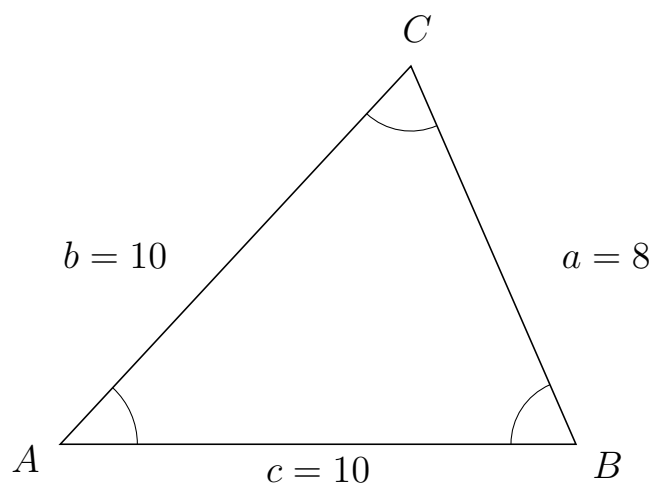
13 I trekant DBA er $d = 9$, $b = 9$ og $a = 10$.



a) Bestem vinkel B .

$B = 56.25$

14 I trekant ACB er $a = 8$, $c = 10$ og $b = 10$.



a) Bestem vinkel C .

$C = 66.42$



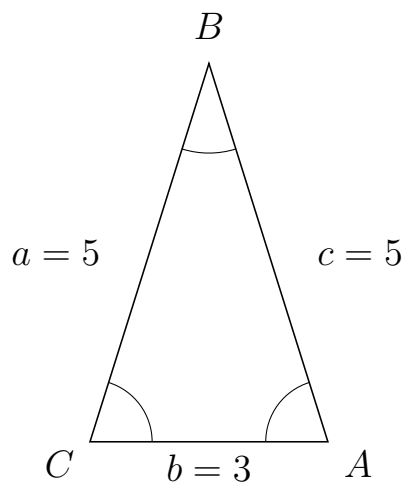
Trigonometri

Sider og vinkler abc

12. marts 2017



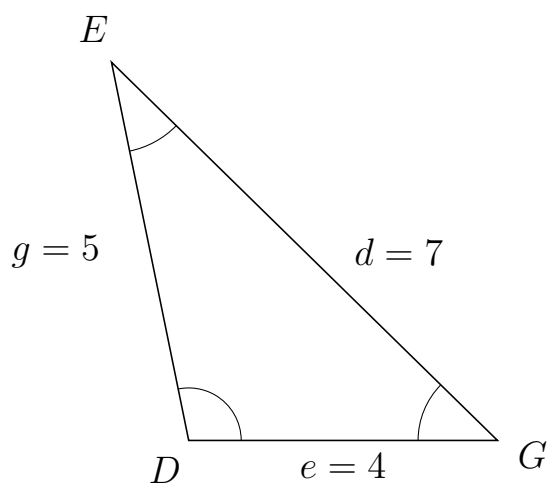
15 I trekant CBA er $c = 5$, $b = 3$ og $a = 5$.



a) Bestem vinkel B .

$B = 34.92$

16 I trekant DEG er $d = 7$, $e = 4$ og $g = 5$.



a) Bestem vinkel E .

$E = 34.05$



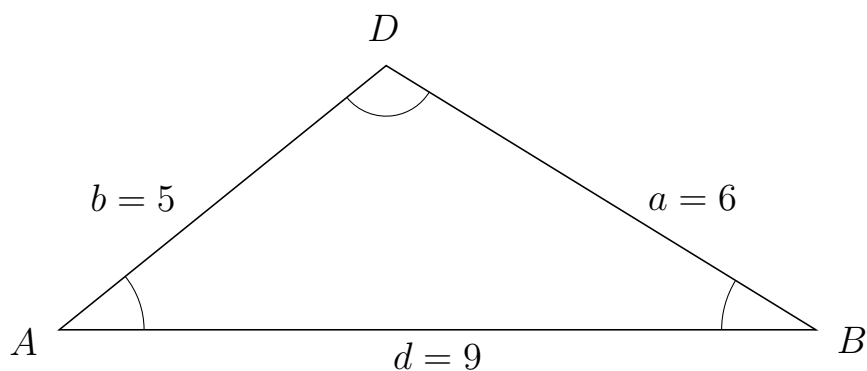
Trigonometri

Sider og vinkler abc

12. marts 2017



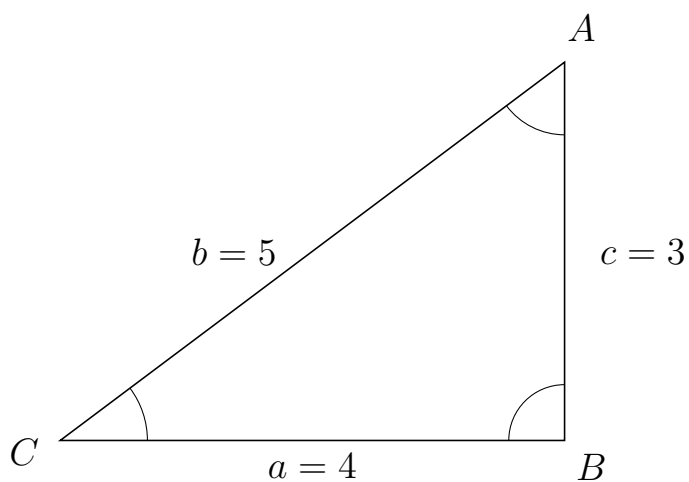
17 I trekant ADB er $a = 6$, $d = 9$ og $b = 5$.



a) Bestem vinkel D .

$D = 109.47$

18 I trekant CAB er $c = 3$, $a = 4$ og $b = 5$.



a) Bestem vinkel A .

$A = 53.13$

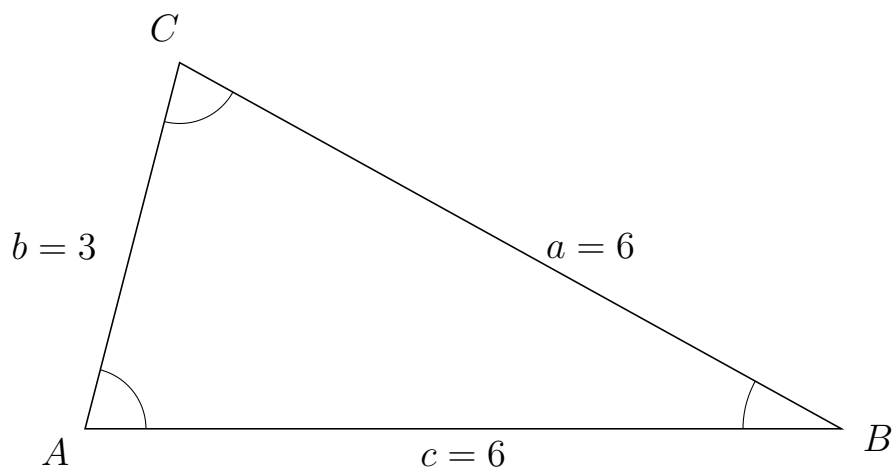


Trigonometri

Sider og vinkler abc

12. marts 2017

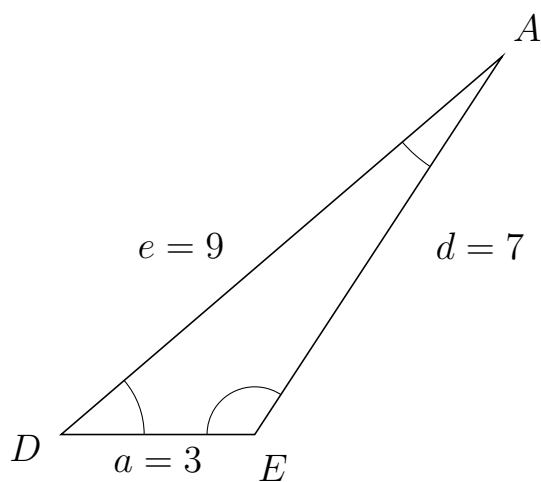
19 I trekant ACB er $a = 6$, $c = 6$ og $b = 3$.



a) Bestem vinkel C .

$C = 75.52$

20 I trekant DAE er $d = 7$, $a = 3$ og $e = 9$.



a) Bestem vinkel A .

$A = 16.2$

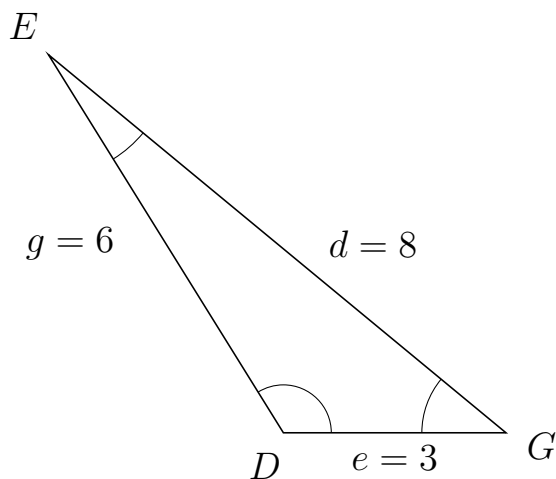


Trigonometri

Sider og vinkler abc

12. marts 2017

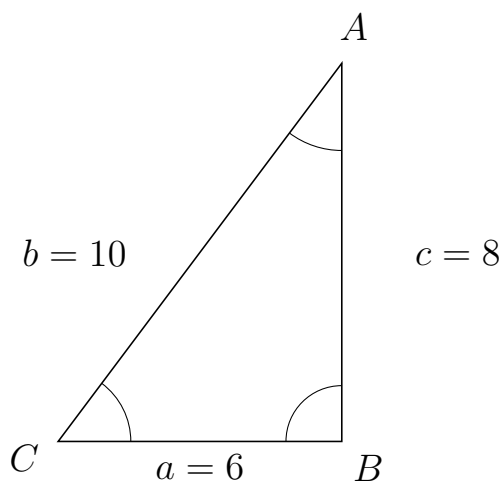
21 I trekant DEG er $d = 8$, $e = 3$ og $g = 6$.



a) Bestem vinkel E .

$E = 18.57$

22 I trekant CAB er $c = 8$, $a = 6$ og $b = 10$.



a) Bestem vinkel A .

$A = 36.87$



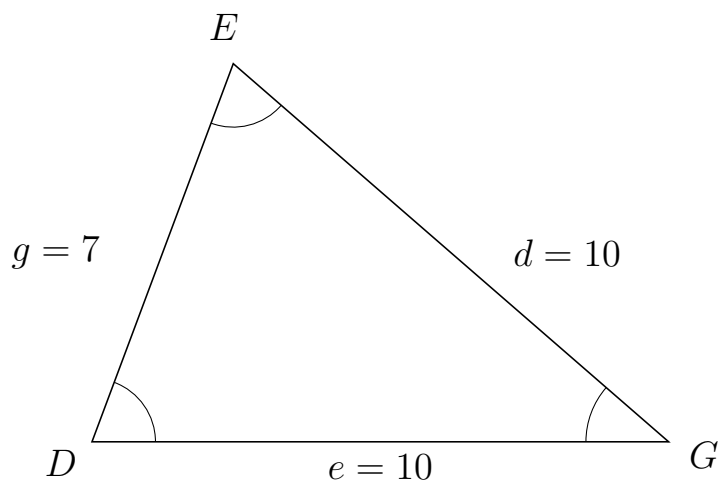
Trigonometri

Sider og vinkler abc

12. marts 2017



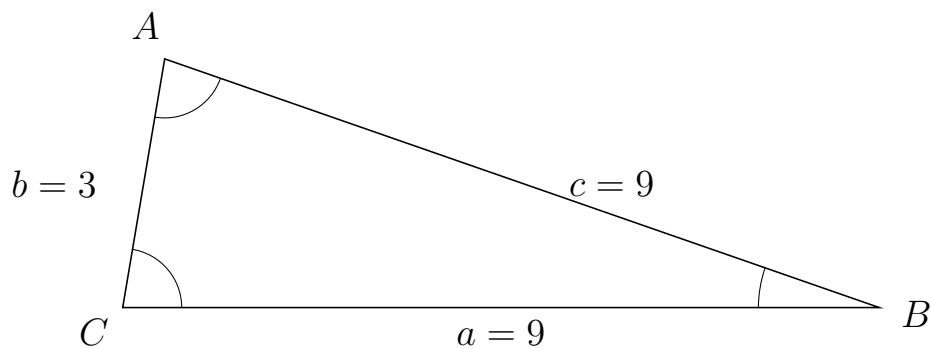
23 I trekant DEG er $d = 10$, $e = 10$ og $g = 7$.



a) Bestem vinkel E .

$E = 69.51$

24 I trekant CAB er $c = 9$, $a = 9$ og $b = 3$.



a) Bestem vinkel A .

$A = 80.41$



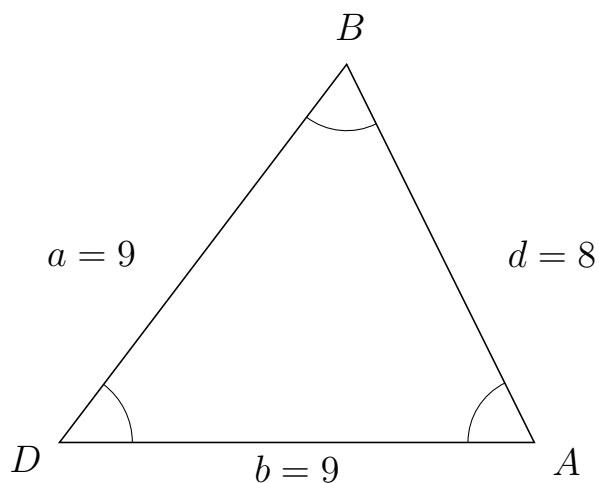
Trigonometri

Sider og vinkler abc

12. marts 2017



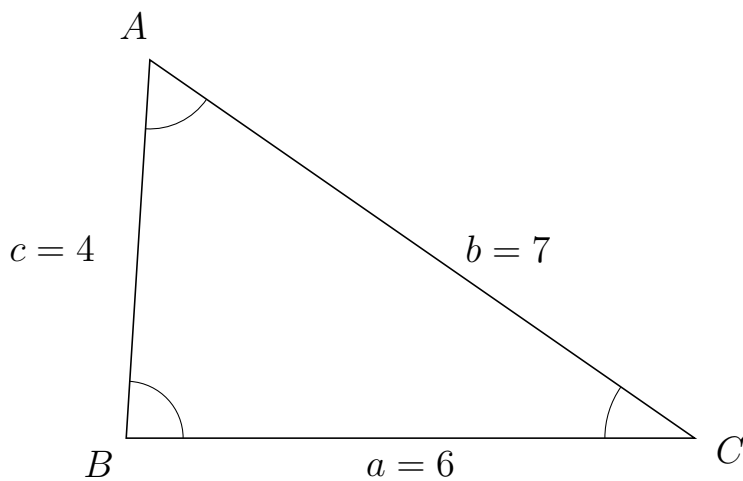
25 I trekant DBA er $d = 8$, $b = 9$ og $a = 9$.



a) Bestem vinkel B .

$B = 63.61$

26 I trekant BAC er $b = 7$, $a = 6$ og $c = 4$.



a) Bestem vinkel A .

$A = 58.81$



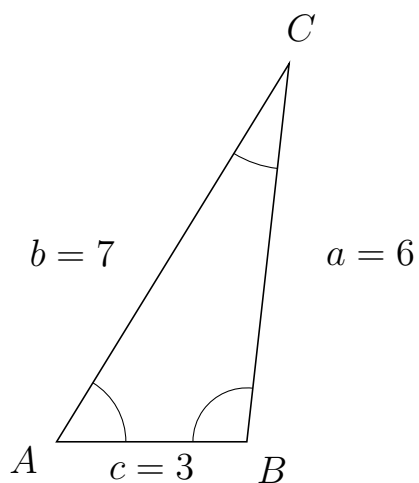
Trigonometri

Sider og vinkler abc

12. marts 2017



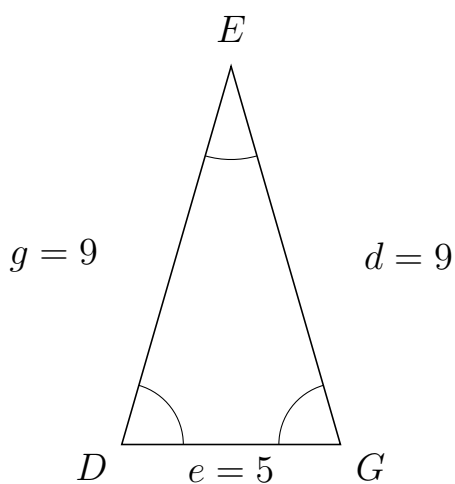
27 I trekant ACB er $a = 6$, $c = 3$ og $b = 7$.



a) Bestem vinkel C .


$C = 25.21$

28 I trekant DEG er $d = 9$, $e = 5$ og $g = 9$.



a) Bestem vinkel E .

$E = 32.26$



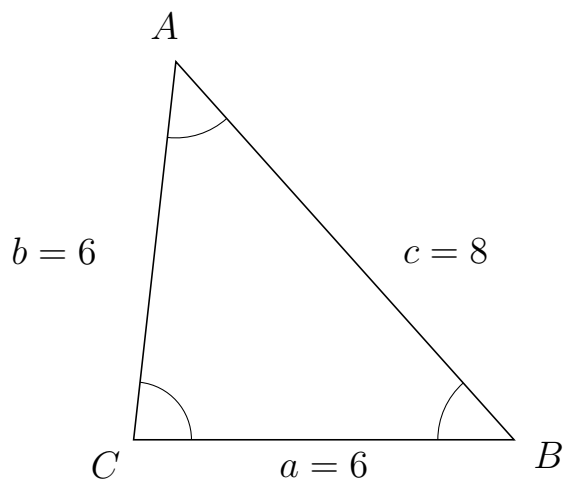
Trigonometri

Sider og vinkler abc

12. marts 2017



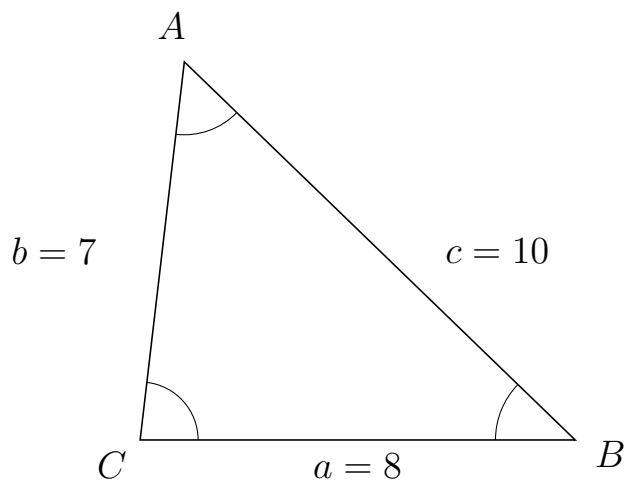
29 I trekant CAB er $c = 8$, $a = 6$ og $b = 6$.



a) Bestem vinkel A .

$A = 48.19$

30 I trekant CAB er $c = 10$, $a = 8$ og $b = 7$.



a) Bestem vinkel A .

$A = 52.62$



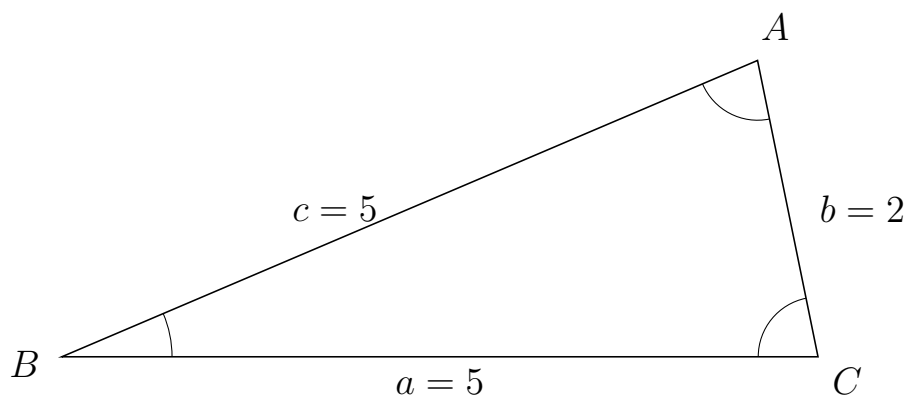
Trigonometri

Sider og vinkler abc

12. marts 2017



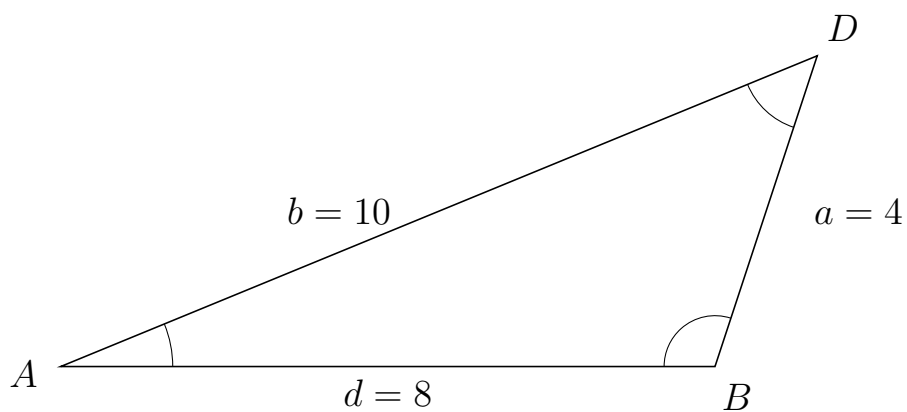
31 I trekant BAC er $b = 2$, $a = 5$ og $c = 5$.



a) Bestem vinkel A .


$A = 78.46$

32 I trekant ADB er $a = 4$, $d = 8$ og $b = 10$.



a) Bestem vinkel D .

$D = 49.46$



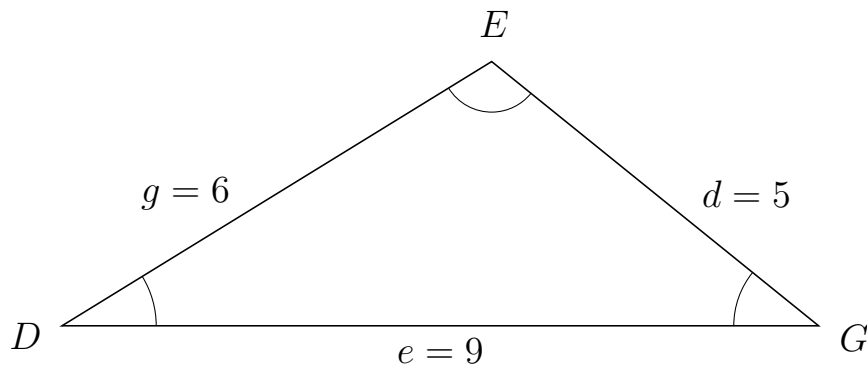
Trigonometri

Sider og vinkler abc

12. marts 2017



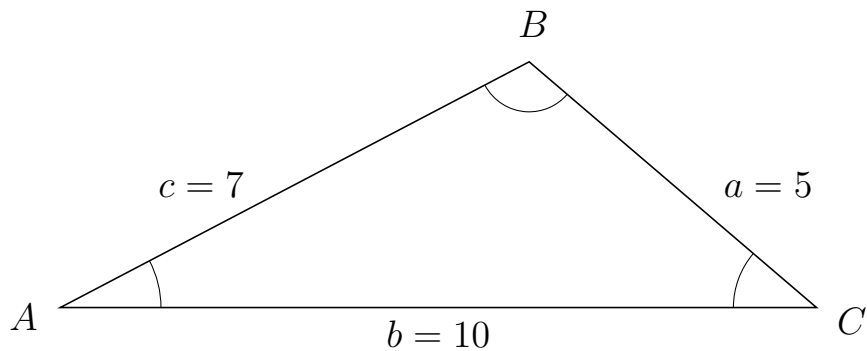
33 I trekant DEG er $d = 5$, $e = 9$ og $g = 6$.



a) Bestem vinkel E .

$E = 109.47$

34 I trekant ABC er $a = 5$, $b = 10$ og $c = 7$.



a) Bestem vinkel B .

$B = 111.8$

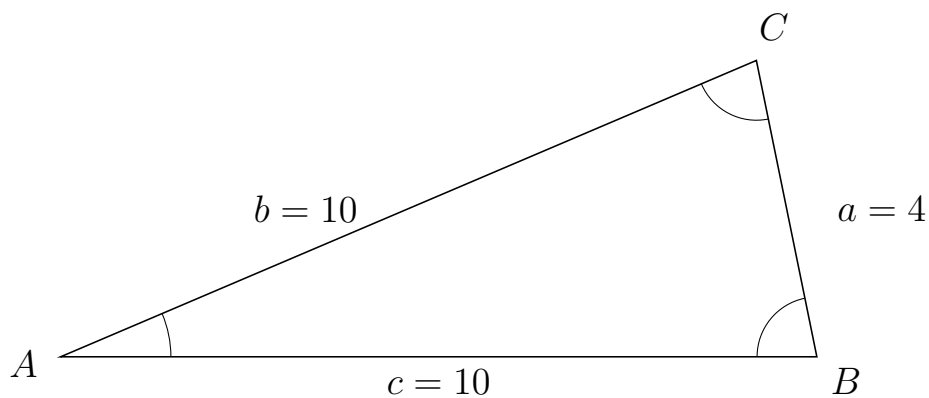


Trigonometri

Sider og vinkler abc

12. marts 2017

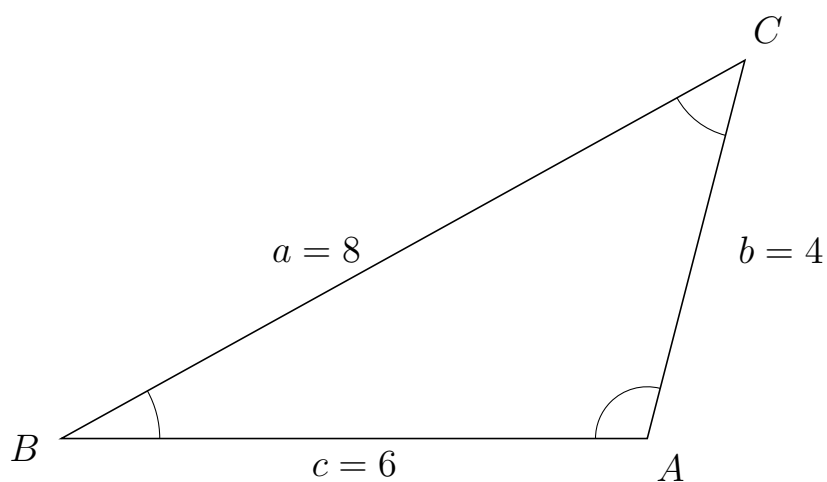
35 I trekant ACB er $a = 4$, $c = 10$ og $b = 10$.



a) Bestem vinkel C .


$C = 78.46$

36 I trekant BCA er $b = 4$, $c = 6$ og $a = 8$.



a) Bestem vinkel C .

$C = 46.57$



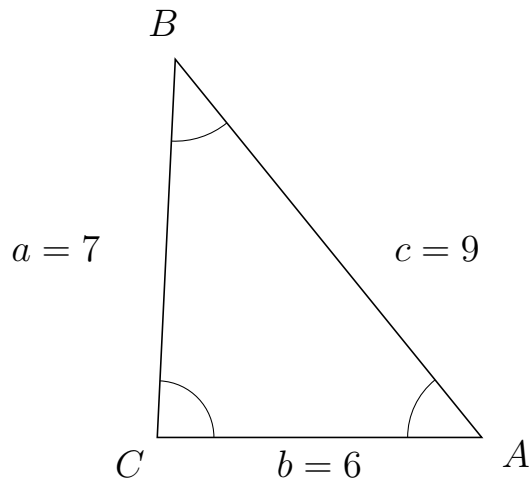
Trigonometri

Sider og vinkler abc

12. marts 2017



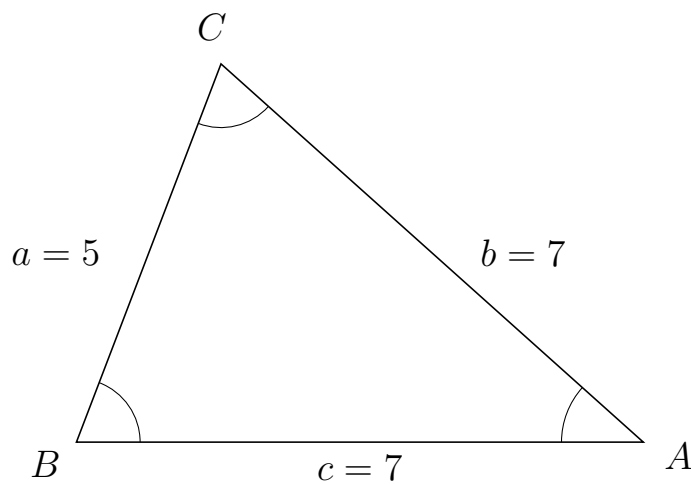
37 I trekant CBA er $c = 9$, $b = 6$ og $a = 7$.



a) Bestem vinkel B .

$B = 41.75$

38 I trekant BCA er $b = 7$, $c = 7$ og $a = 5$.



a) Bestem vinkel C .

$C = 69.08$



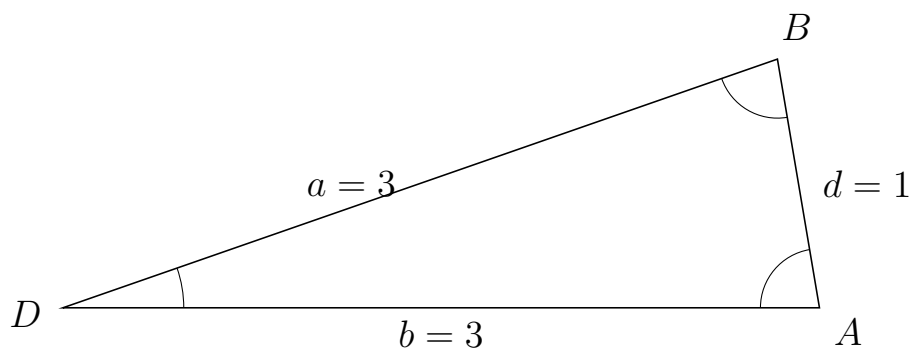
Trigonometri

Sider og vinkler abc

12. marts 2017



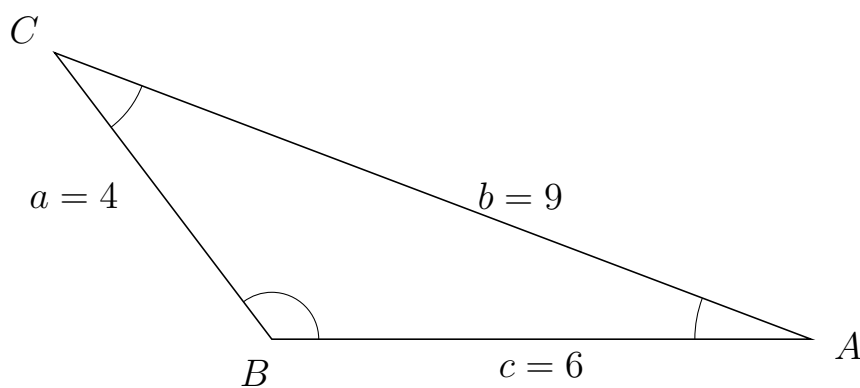
39 I trekant DBA er $d = 1$, $b = 3$ og $a = 3$.



a) Bestem vinkel B .

$B = 80.41$

40 I trekant BCA er $b = 9$, $c = 6$ og $a = 4$.



a) Bestem vinkel C .

$C = 32.09$



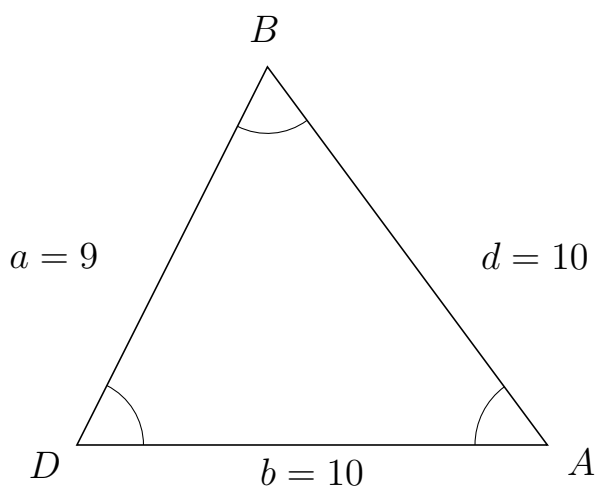
Trigonometri

Sider og vinkler abc

12. marts 2017



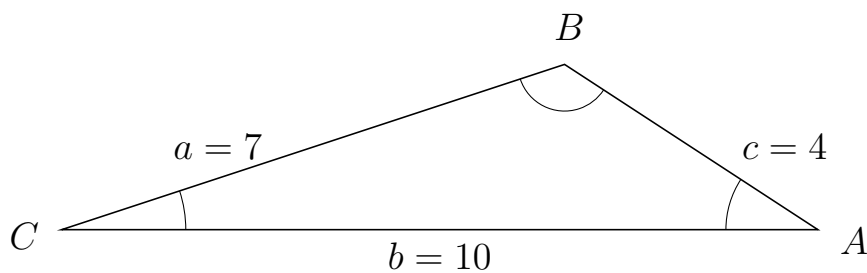
41 I trekant DBA er $d = 10$, $b = 10$ og $a = 9$.



a) Bestem vinkel B .

$B = 63.26$

42 I trekant CBA er $c = 4$, $b = 10$ og $a = 7$.



a) Bestem vinkel B .

$B = 128.68$



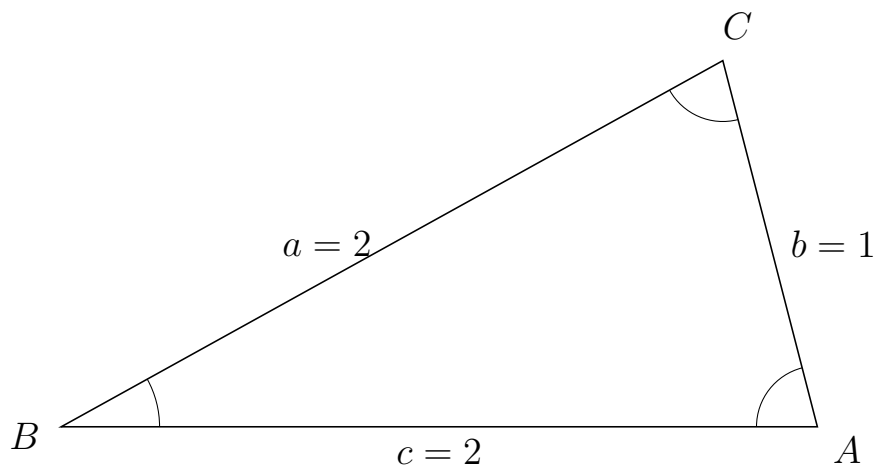
Trigonometri

Sider og vinkler abc

12. marts 2017



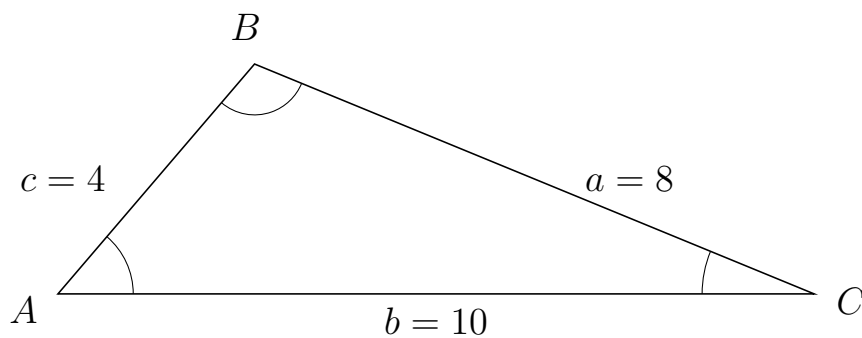
43 I trekant BCA er $b = 1$, $c = 2$ og $a = 2$.



a) Bestem vinkel C .

$C = 75.52$

44 I trekant ABC er $a = 8$, $b = 10$ og $c = 4$.



a) Bestem vinkel B .

$B = 108.21$



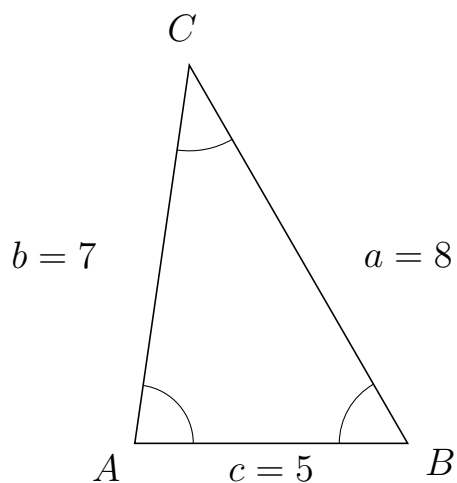
Trigonometri

Sider og vinkler abc

12. marts 2017



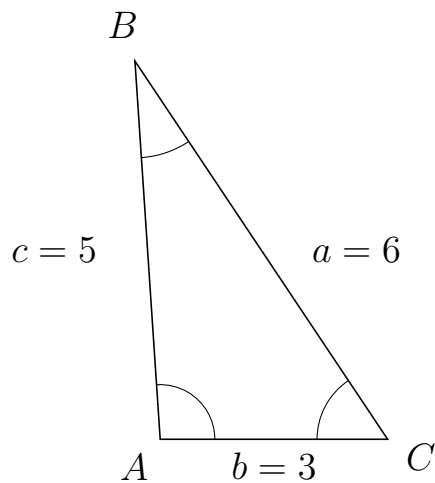
45 I trekant ACB er $a = 8$, $c = 5$ og $b = 7$.



a) Bestem vinkel C .

$C = 38.21$

46 I trekant ABC er $a = 6$, $b = 3$ og $c = 5$.



a) Bestem vinkel B .

$B = 29.93$



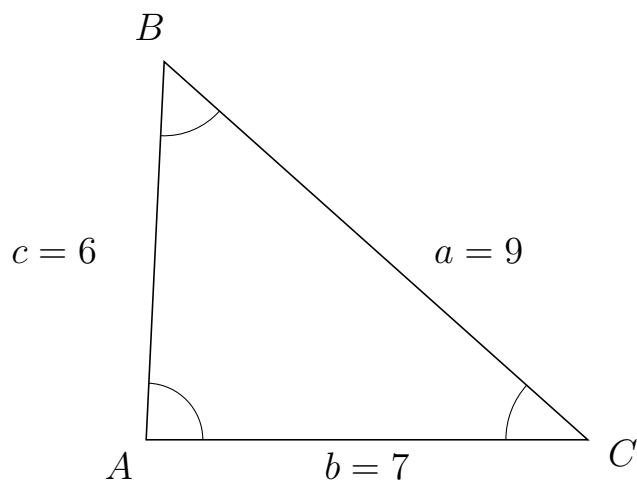
Trigonometri

Sider og vinkler abc

12. marts 2017



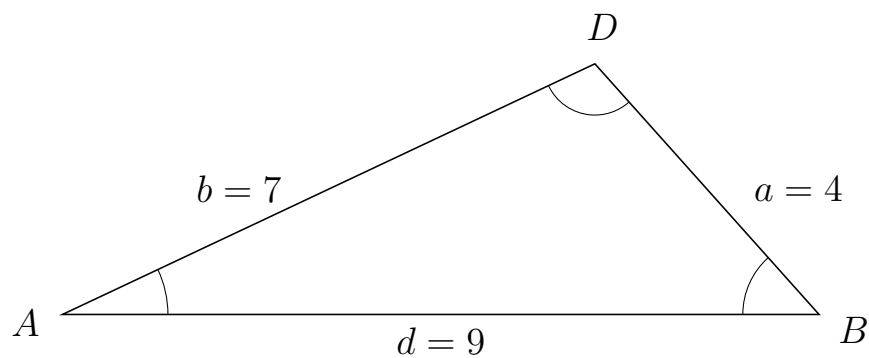
47 I trekant ABC er $a = 9$, $b = 7$ og $c = 6$.



a) Bestem vinkel B .

$B = 50.98$

48 I trekant ADB er $a = 4$, $d = 9$ og $b = 7$.



a) Bestem vinkel D .

$D = 106.6$



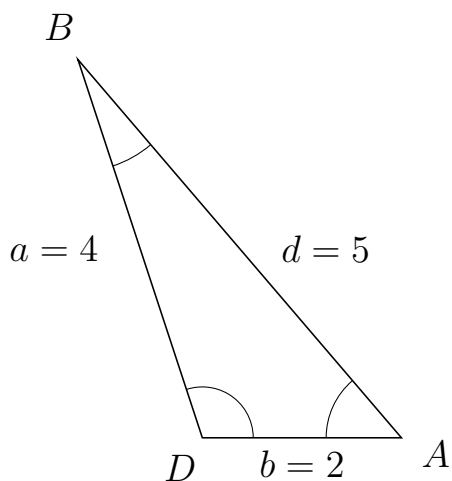
Trigonometri

Sider og vinkler abc

12. marts 2017



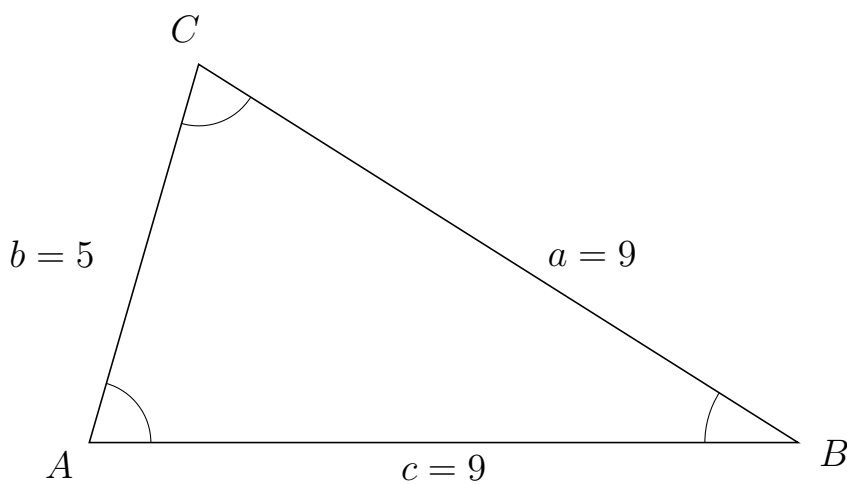
49 I trekant DBA er $d = 5$, $b = 2$ og $a = 4$.



a) Bestem vinkel B .

$B = 22.33$

50 I trekant ACB er $a = 9$, $c = 9$ og $b = 5$.



a) Bestem vinkel C .

$C = 73.87$

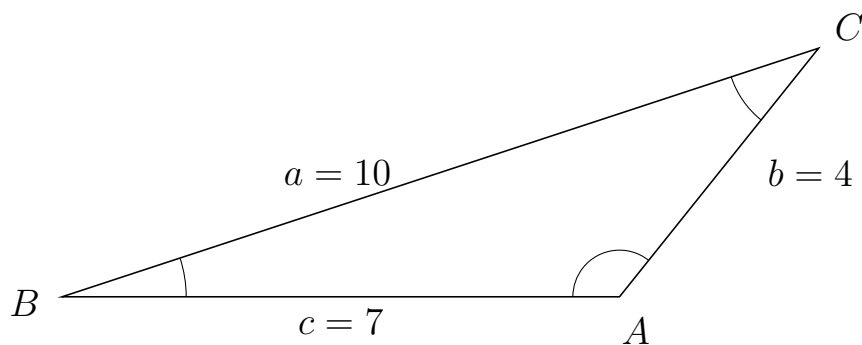


Trigonometri

Sider og vinkler abc

12. marts 2017

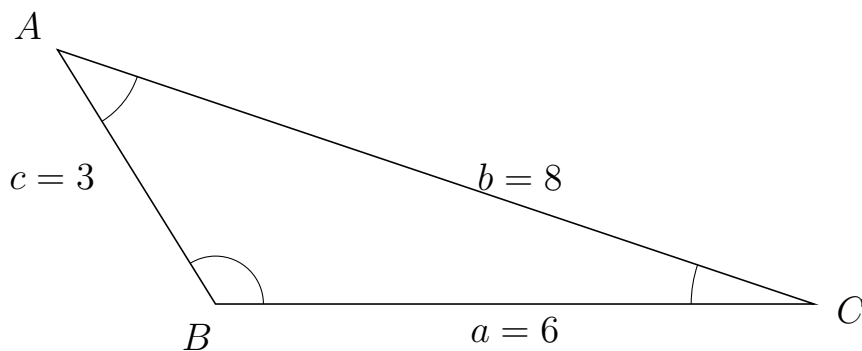
51 I trekant BCA er $b = 4$, $c = 7$ og $a = 10$.



a) Bestem vinkel C .

$C = 33.12$

52 I trekant BAC er $b = 8$, $a = 6$ og $c = 3$.



a) Bestem vinkel A .

$A = 39.57$



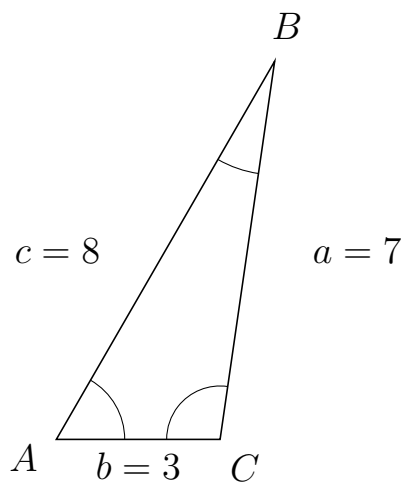
Trigonometri

Sider og vinkler abc

12. marts 2017



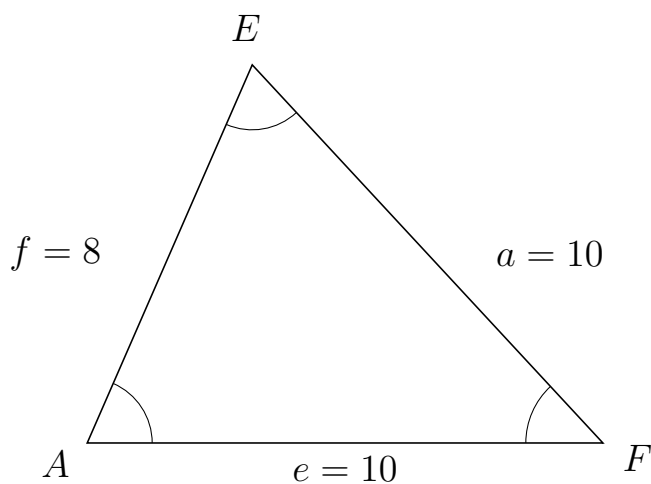
53 I trekant ABC er $a = 7$, $b = 3$ og $c = 8$.



a) Bestem vinkel B .

$B = 21.79$

54 I trekant AEF er $a = 10$, $e = 10$ og $f = 8$.



a) Bestem vinkel E .

$E = 66.42$



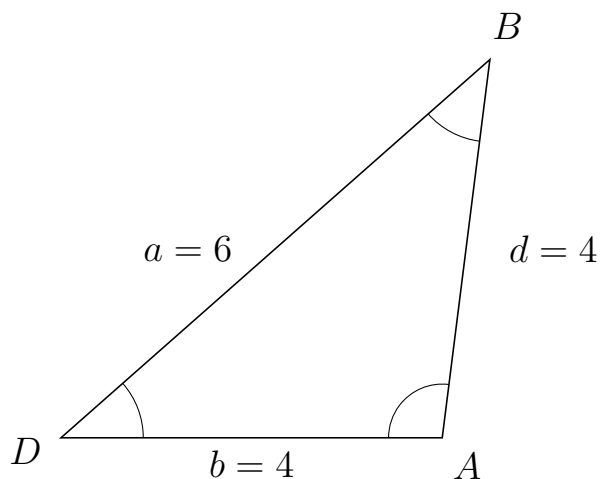
Trigonometri

Sider og vinkler abc

12. marts 2017



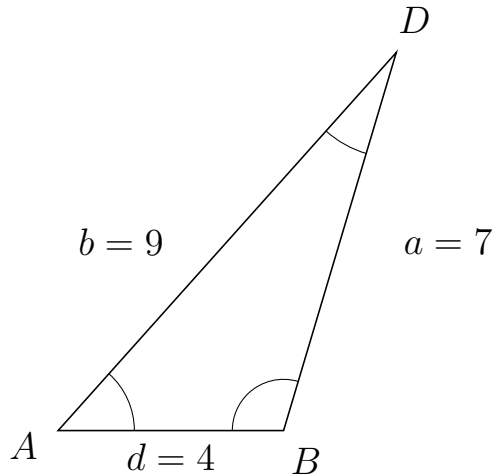
55 I trekant DBA er $d = 4$, $b = 4$ og $a = 6$.



a) Bestem vinkel B .


$B = 41.41$

56 I trekant ADB er $a = 7$, $d = 4$ og $b = 9$.



a) Bestem vinkel D .

$D = 25.21$

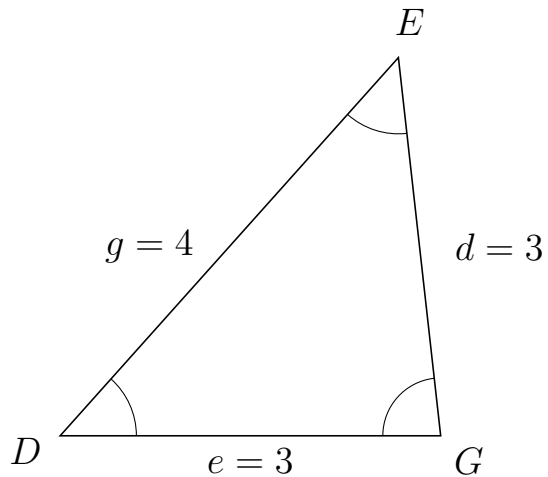


Trigonometri

Sider og vinkler abc

12. marts 2017

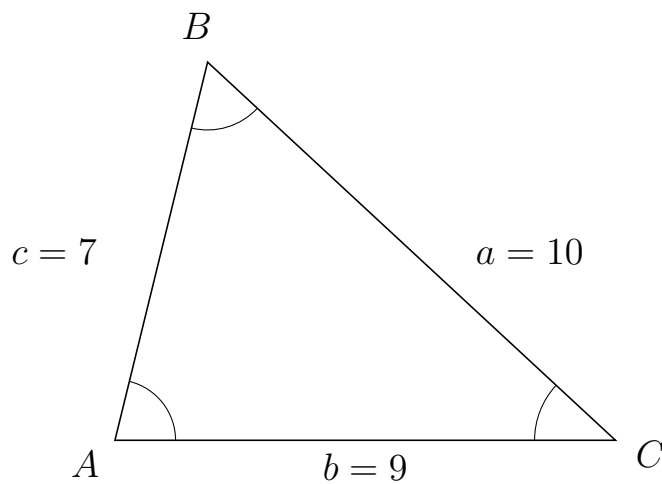
57 I trekant DEG er $d = 3$, $e = 3$ og $g = 4$.



a) Bestem vinkel E .

$E = 48.19$

58 I trekant ABC er $a = 10$, $b = 9$ og $c = 7$.



a) Bestem vinkel B .

$B = 60.94$



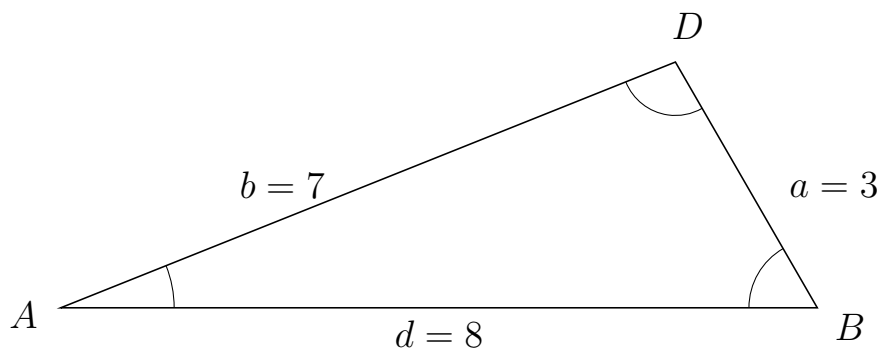
Trigonometri

Sider og vinkler abc

12. marts 2017



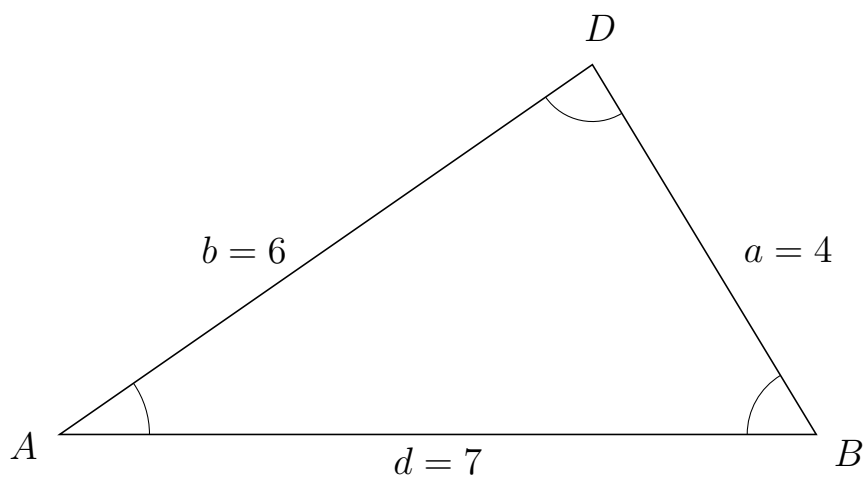
59 I trekant ADB er $a = 3$, $d = 8$ og $b = 7$.



a) Bestem vinkel D .

$D = 98.21$

60 I trekant ADB er $a = 4$, $d = 7$ og $b = 6$.



a) Bestem vinkel D .

$D = 86.42$

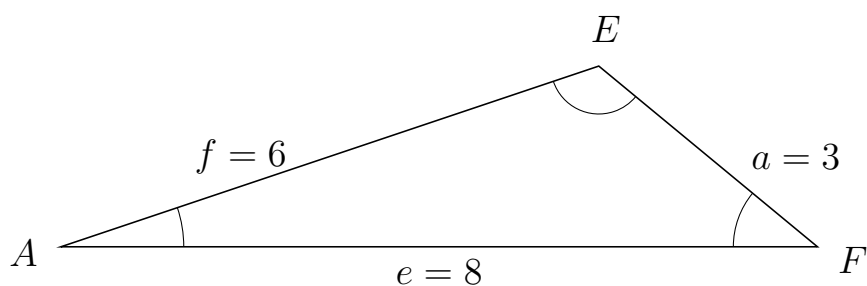


Trigonometri

Sider og vinkler abc

12. marts 2017

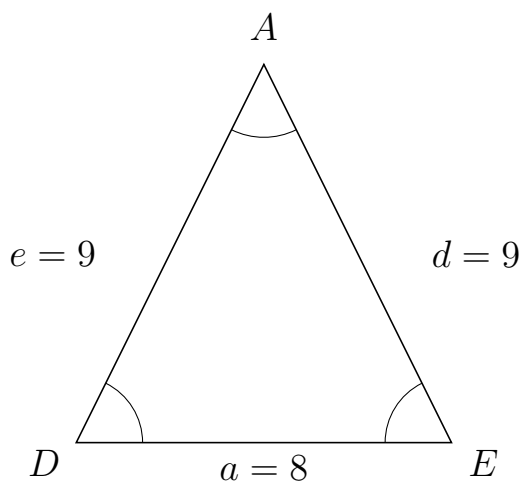
61 I trekant AEF er $a = 3$, $e = 8$ og $f = 6$.



a) Bestem vinkel E .

$E = 121.86$

62 I trekant DAE er $d = 9$, $a = 8$ og $e = 9$.



a) Bestem vinkel A .

$A = 52.78$



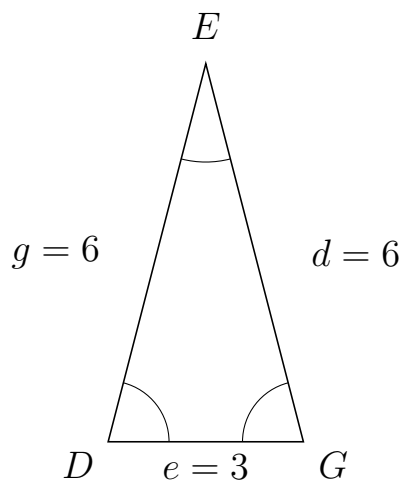
Trigonometri

Sider og vinkler abc

12. marts 2017



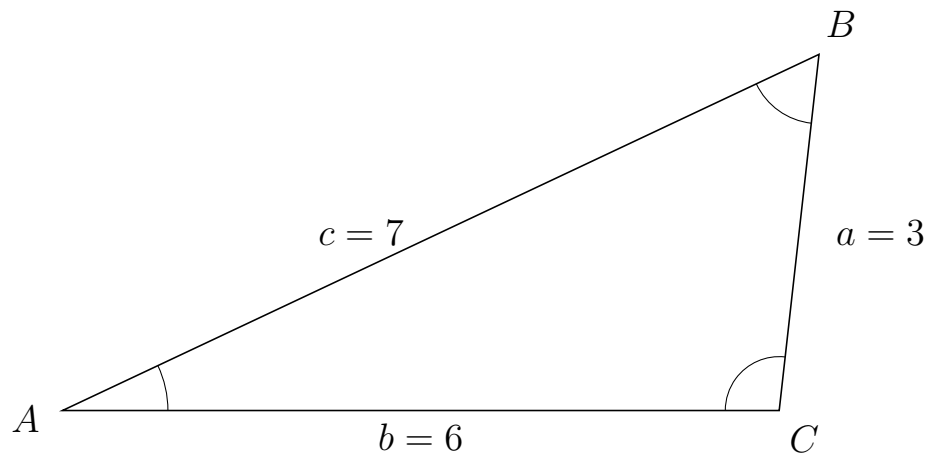
63 I trekant DEG er $d = 6$, $e = 3$ og $g = 6$.



a) Bestem vinkel E .

$E = 28.96$

64 I trekant ABC er $a = 3$, $b = 6$ og $c = 7$.



a) Bestem vinkel B .

$B = 58.41$



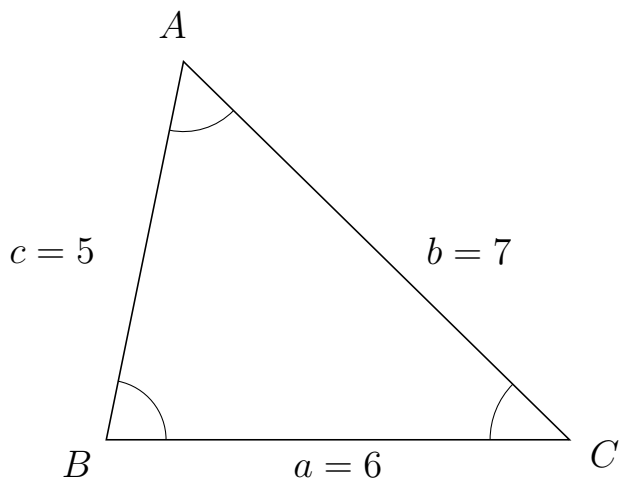
Trigonometri

Sider og vinkler abc

12. marts 2017



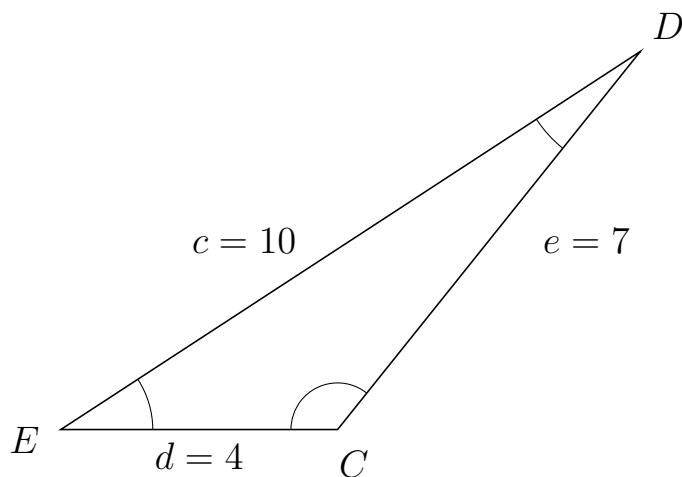
65 I trekant BAC er $b = 7$, $a = 6$ og $c = 5$.



a) Bestem vinkel A .

$A = 57.12$

66 I trekant EDC er $e = 7$, $d = 4$ og $c = 10$.



a) Bestem vinkel D .

$D = 18.19$

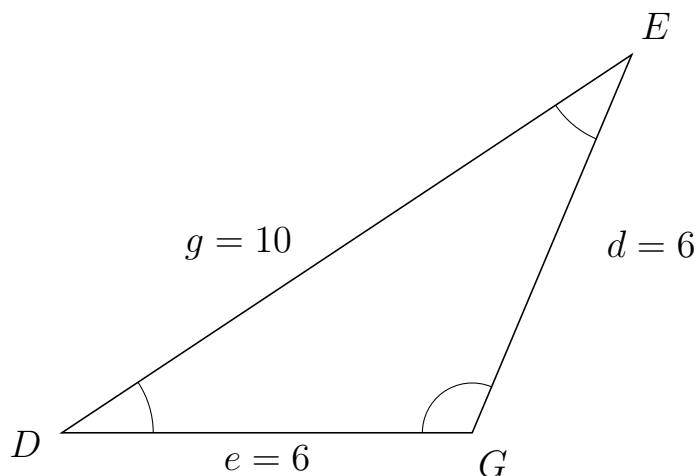


Trigonometri

Sider og vinkler abc

12. marts 2017

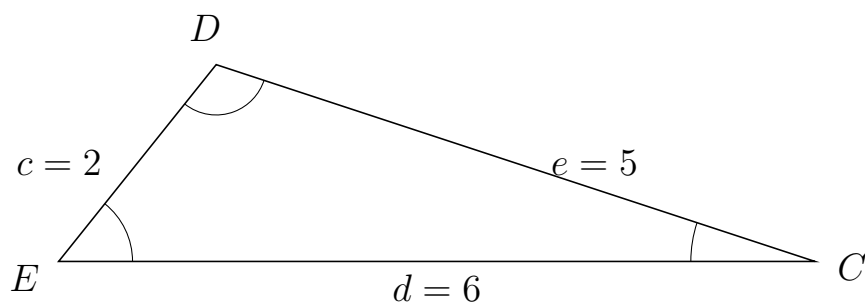
67 I trekant DEG er $d = 6$, $e = 6$ og $g = 10$.



a) Bestem vinkel E .


$E = 33.56$

68 I trekant EDC er $e = 5$, $d = 6$ og $c = 2$.



a) Bestem vinkel D .

$D = 110.49$

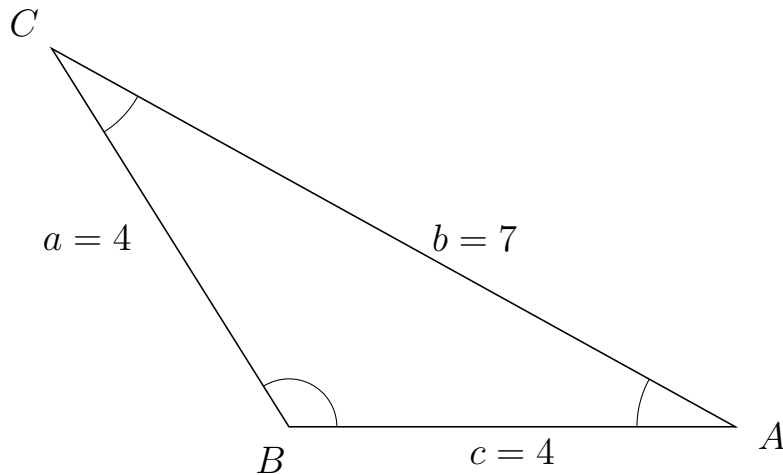


Trigonometri

Sider og vinkler abc

12. marts 2017

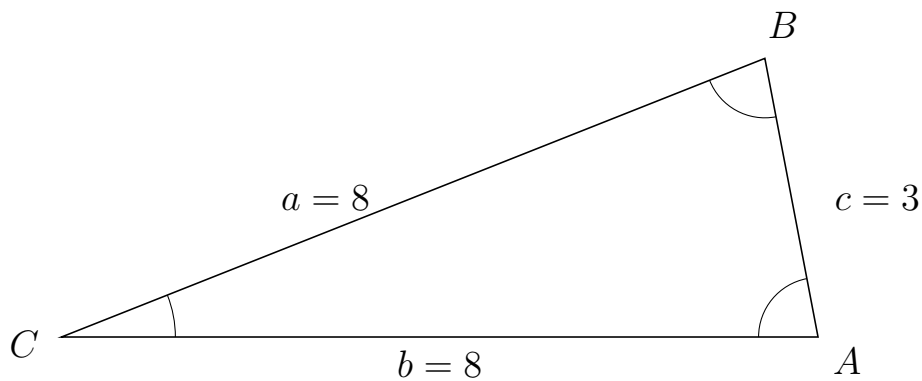
69 I trekant BCA er $b = 7$, $c = 4$ og $a = 4$.



a) Bestem vinkel C .


$C = 28.96$

70 I trekant CBA er $c = 3$, $b = 8$ og $a = 8$.



a) Bestem vinkel B .

$B = 79.19$



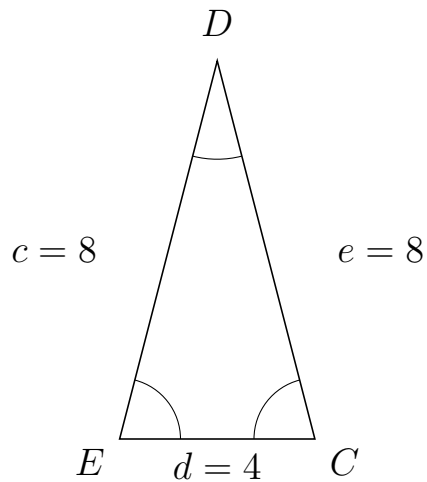
Trigonometri

Sider og vinkler abc

12. marts 2017



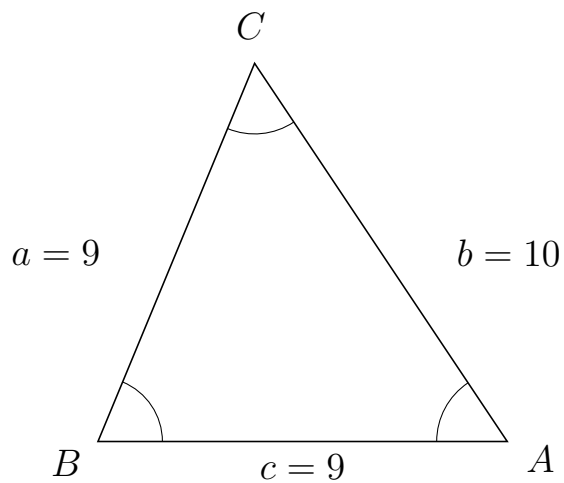
71 I trekant EDC er $e = 8$, $d = 4$ og $c = 8$.



a) Bestem vinkel D .

$D = 28.96$

72 I trekant BCA er $b = 10$, $c = 9$ og $a = 9$.



a) Bestem vinkel C .

$C = 56.25$



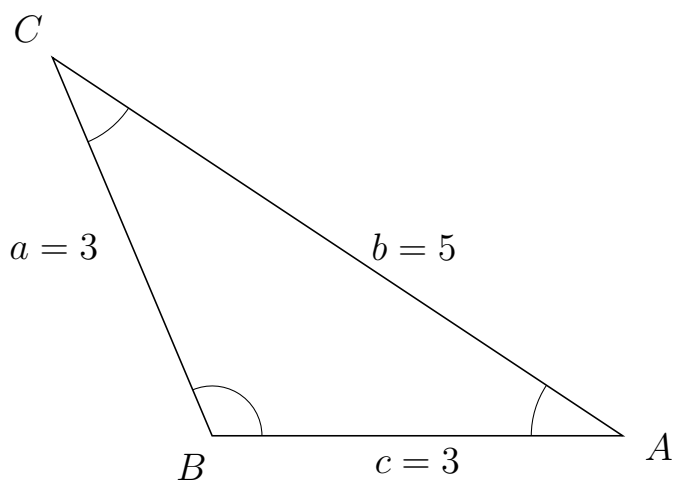
Trigonometri

Sider og vinkler abc

12. marts 2017



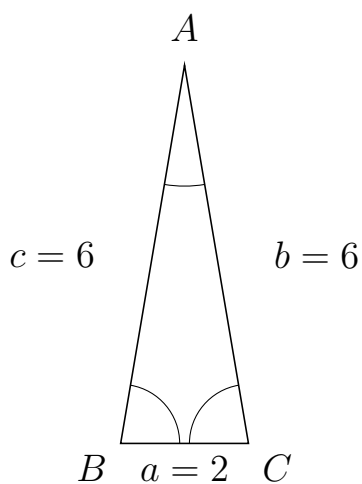
73 I trekant BCA er $b = 5$, $c = 3$ og $a = 3$.



a) Bestem vinkel C .

$C = 33.56$

74 I trekant BAC er $b = 6$, $a = 2$ og $c = 6$.



a) Bestem vinkel A .

$A = 19.19$



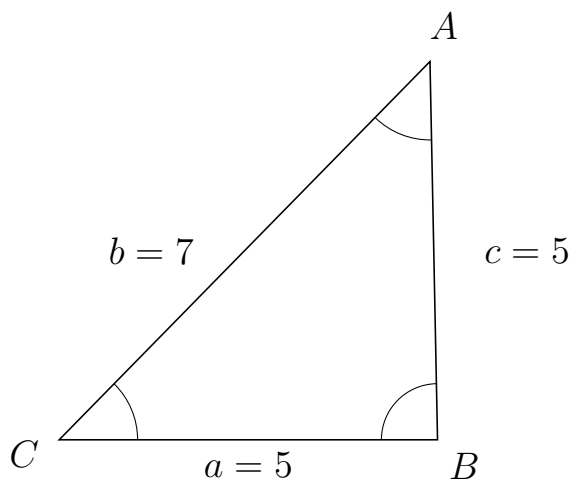
Trigonometri

Sider og vinkler abc

12. marts 2017



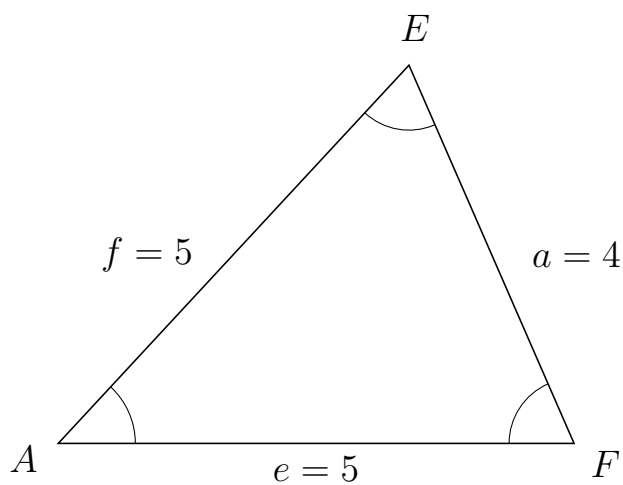
75 I trekant CAB er $c = 5$, $a = 5$ og $b = 7$.



a) Bestem vinkel A .

$A = 45.57$

76 I trekant AEF er $a = 4$, $e = 5$ og $f = 5$.



a) Bestem vinkel E .

$E = 66.42$

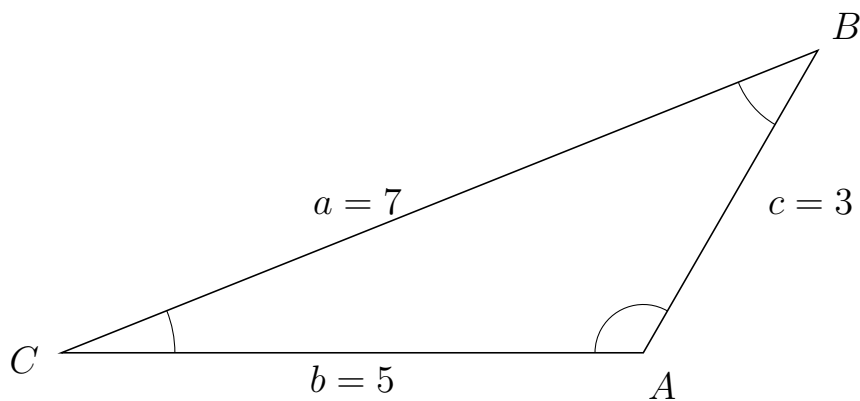


Trigonometri

Sider og vinkler abc

12. marts 2017

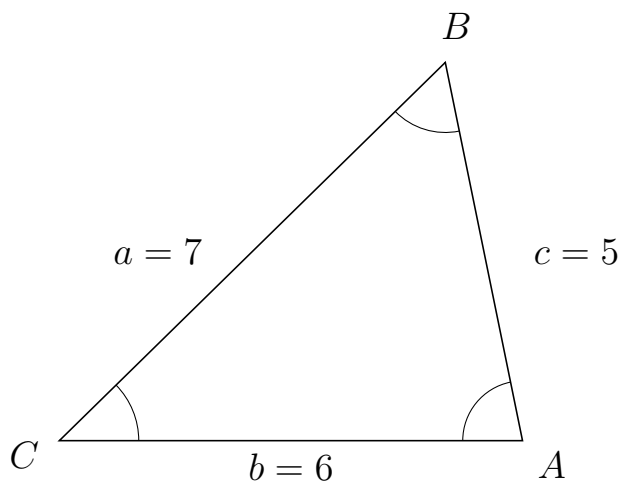
77 I trekant CBA er $c = 3$, $b = 5$ og $a = 7$.



a) Bestem vinkel B .

$B = 38.21$

78 I trekant CBA er $c = 5$, $b = 6$ og $a = 7$.



a) Bestem vinkel B .

$B = 57.12$

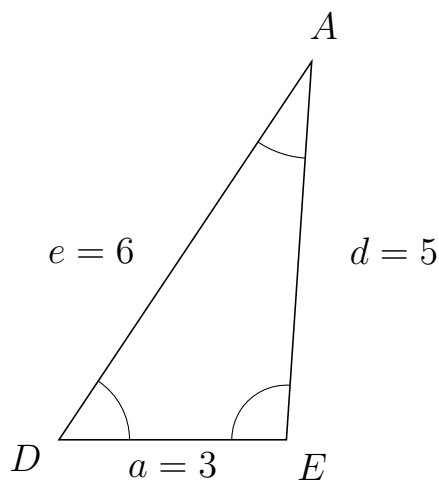


Trigonometri

Sider og vinkler abc

12. marts 2017

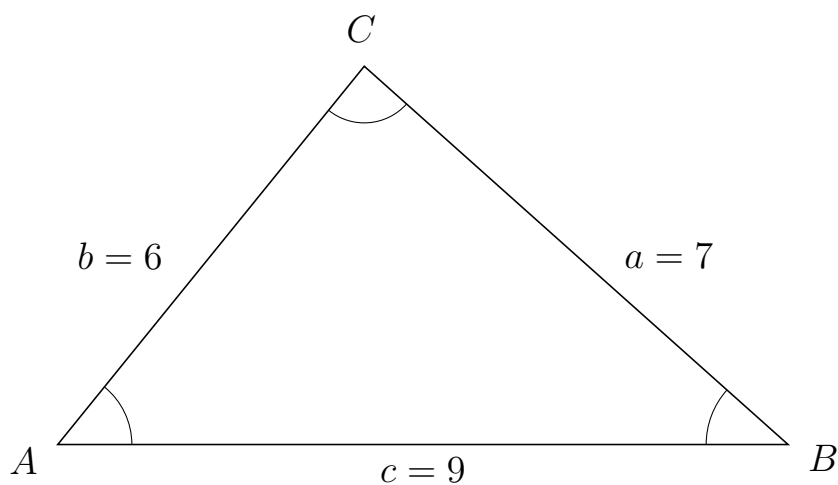
79 I trekant DAE er $d = 5$, $a = 3$ og $e = 6$.



a) Bestem vinkel A .

$A = 29.93$

80 I trekant ACB er $a = 7$, $c = 9$ og $b = 6$.



a) Bestem vinkel C .

$C = 87.27$



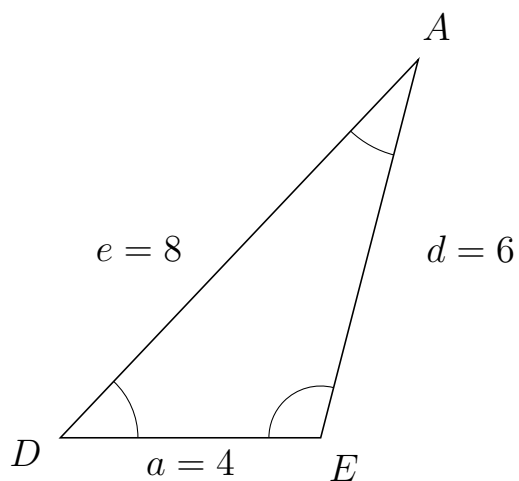
Trigonometri

Sider og vinkler abc

12. marts 2017



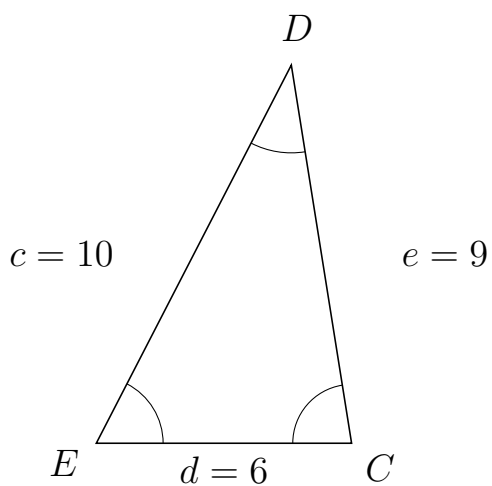
81 I trekant DAE er $d = 6$, $a = 4$ og $e = 8$.



a) Bestem vinkel A .

$A = 28.96$

82 I trekant EDC er $e = 9$, $d = 6$ og $c = 10$.



a) Bestem vinkel D .

$D = 36.34$

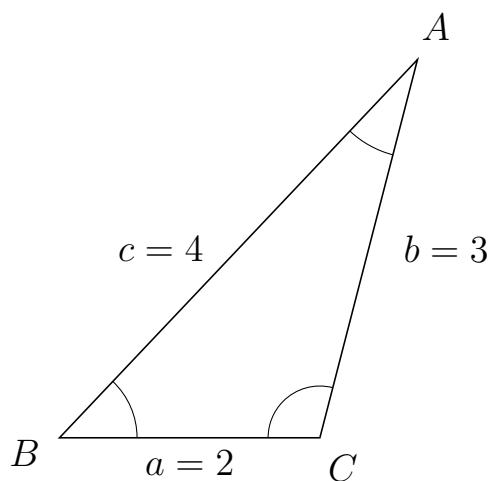


Trigonometri

Sider og vinkler abc

12. marts 2017

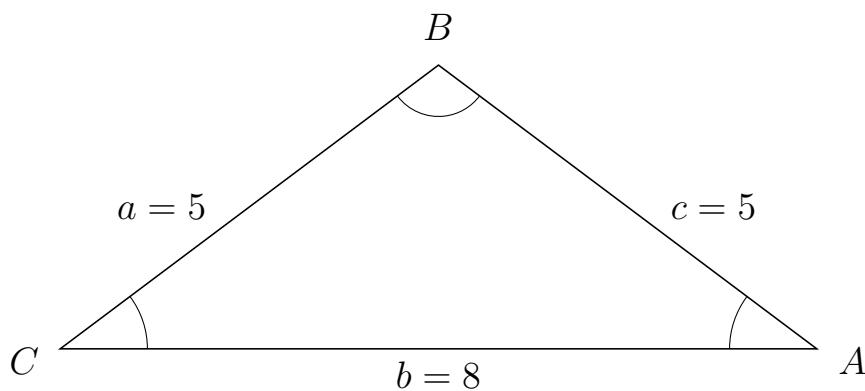
83 I trekant BAC er $b = 3$, $a = 2$ og $c = 4$.



a) Bestem vinkel A .

$A = 28.96$

84 I trekant CBA er $c = 5$, $b = 8$ og $a = 5$.



a) Bestem vinkel B .

$B = 106.26$



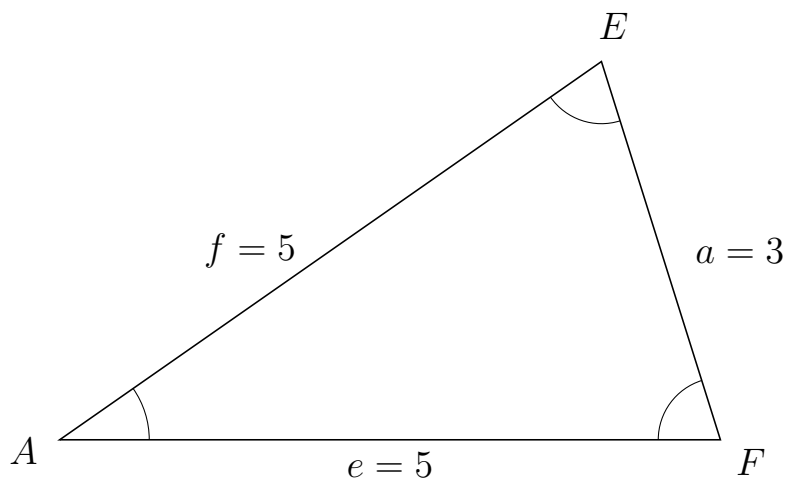
Trigonometri

Sider og vinkler abc

12. marts 2017



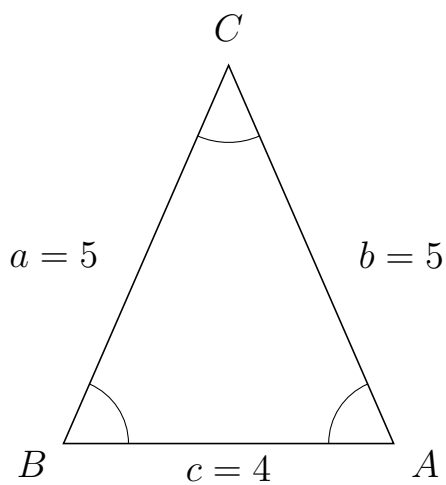
85 I trekant AEF er $a = 3$, $e = 5$ og $f = 5$.



a) Bestem vinkel E .

$E = 72.54$

86 I trekant BCA er $b = 5$, $c = 4$ og $a = 5$.



a) Bestem vinkel C .

$C = 47.16$



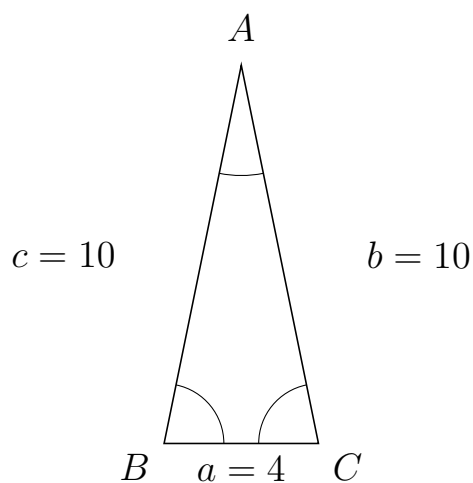
Trigonometri

Sider og vinkler abc

12. marts 2017



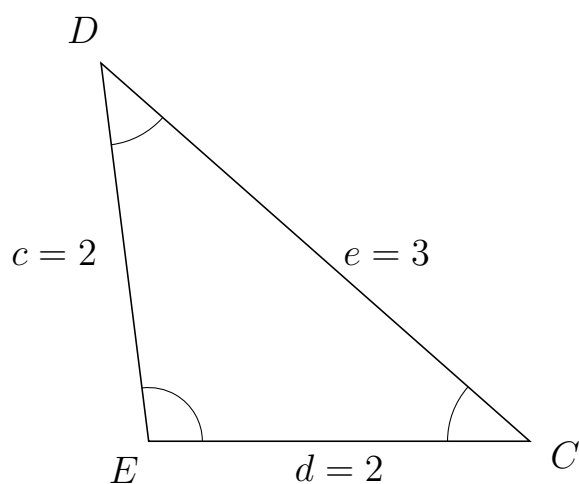
87 I trekant BAC er $b = 10$, $a = 4$ og $c = 10$.



a) Bestem vinkel A .

$A = 23.07$

88 I trekant EDC er $e = 3$, $d = 2$ og $c = 2$.



a) Bestem vinkel D .

$D = 41.41$



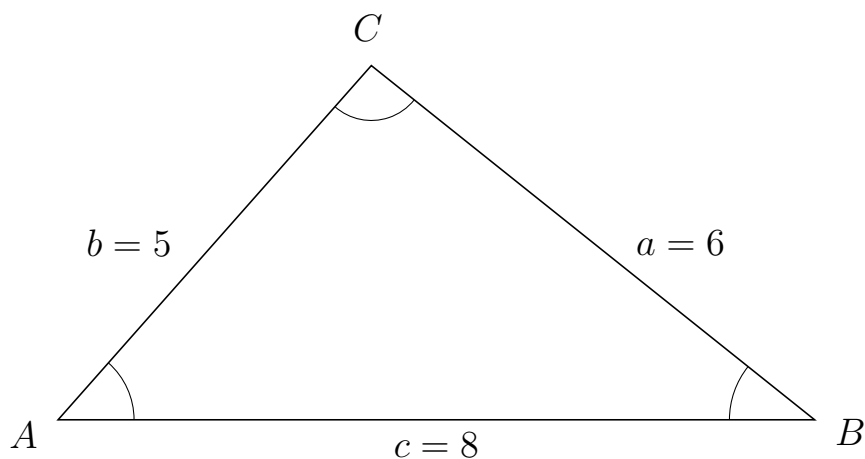
Trigonometri

Sider og vinkler abc

12. marts 2017



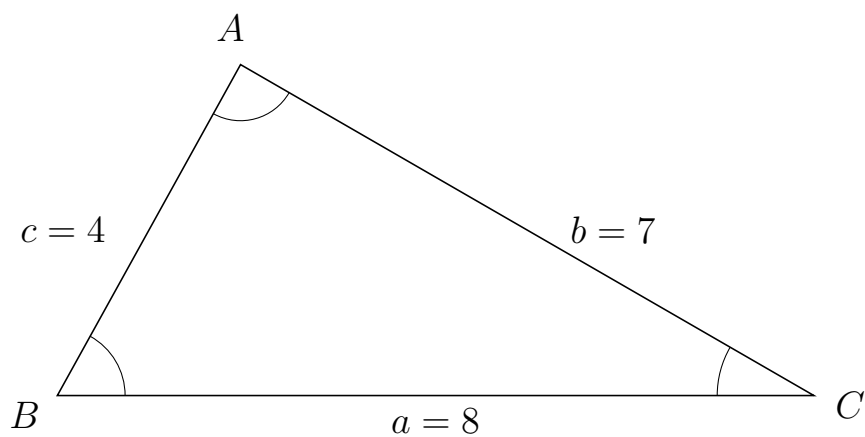
89 I trekant ACB er $a = 6$, $c = 8$ og $b = 5$.



a) Bestem vinkel C .

$C = 92.87$

90 I trekant BAC er $b = 7$, $a = 8$ og $c = 4$.



a) Bestem vinkel A .

$A = 88.98$



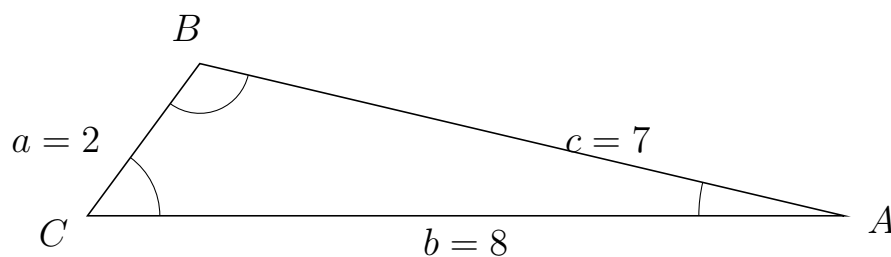
Trigonometri

Sider og vinkler abc

12. marts 2017



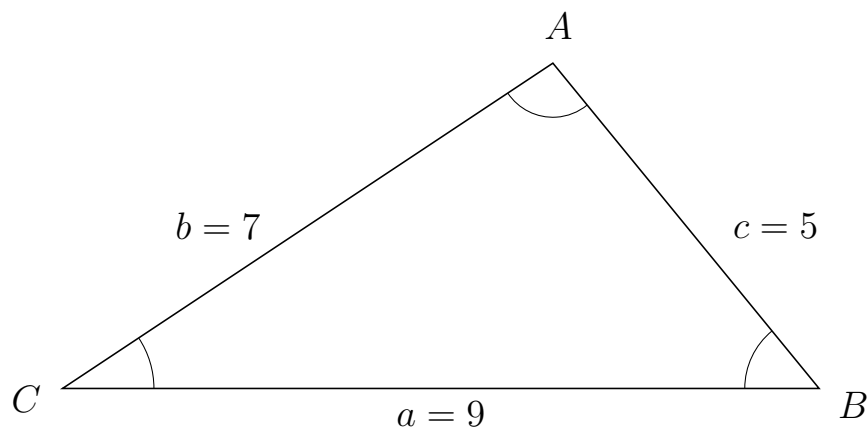
91 I trekant CBA er $c = 7$, $b = 8$ og $a = 2$.



a) Bestem vinkel B .

$B = 113.13$

92 I trekant CAB er $c = 5$, $a = 9$ og $b = 7$.



a) Bestem vinkel A .

$A = 95.74$

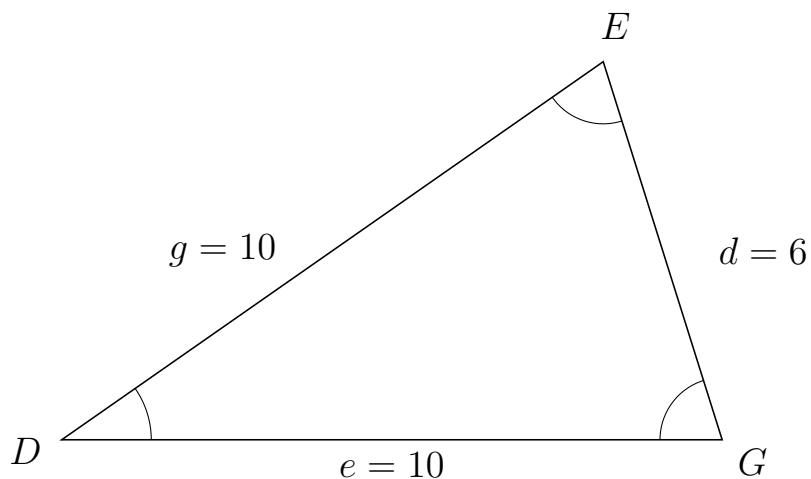


Trigonometri

Sider og vinkler abc

12. marts 2017

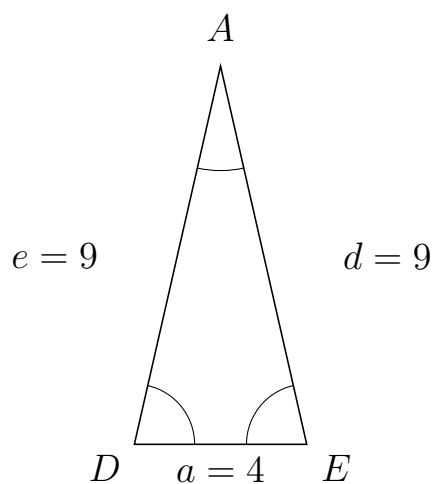
93 I trekant DEG er $d = 6$, $e = 10$ og $g = 10$.



a) Bestem vinkel E .


$E = 72.54$

94 I trekant DAE er $d = 9$, $a = 4$ og $e = 9$.



a) Bestem vinkel A .

$A = 25.68$

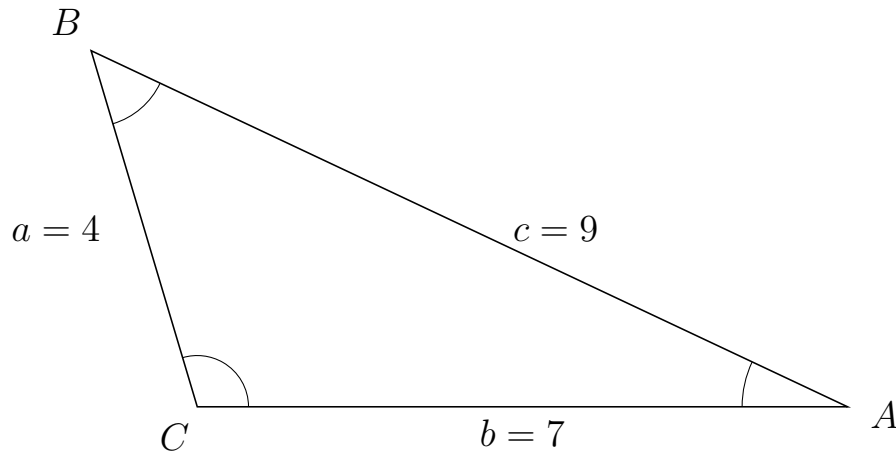


Trigonometri

Sider og vinkler abc

12. marts 2017

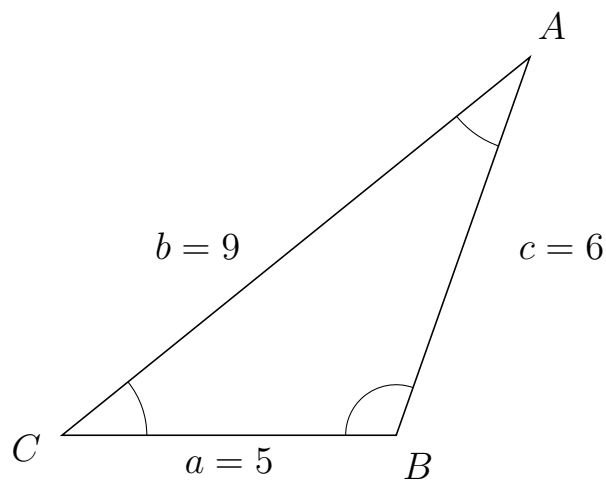
95 I trekant CBA er $c = 9$, $b = 7$ og $a = 4$.



a) Bestem vinkel B .

$B = 48.19$

96 I trekant CAB er $c = 6$, $a = 5$ og $b = 9$.



a) Bestem vinkel A .

$A = 31.59$



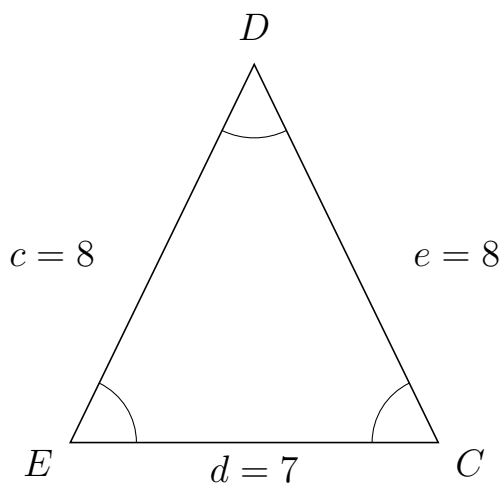
Trigonometri

Sider og vinkler abc

12. marts 2017



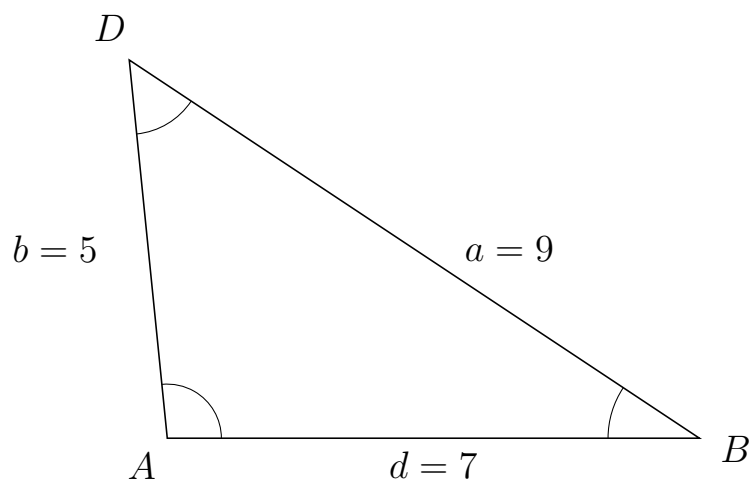
97 I trekant EDC er $e = 8$, $d = 7$ og $c = 8$.



a) Bestem vinkel D .

$D = 51.89$

98 I trekant ADB er $a = 9$, $d = 7$ og $b = 5$.



a) Bestem vinkel D .

$D = 50.7$



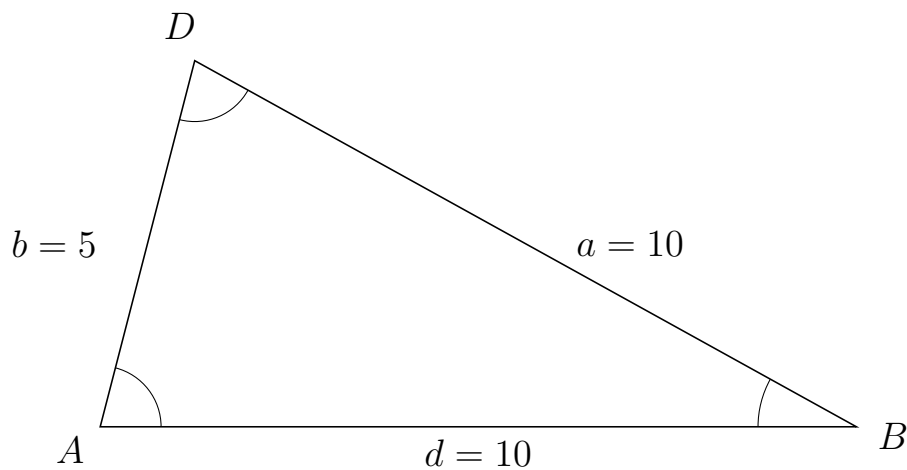
Trigonometri

Sider og vinkler abc

12. marts 2017



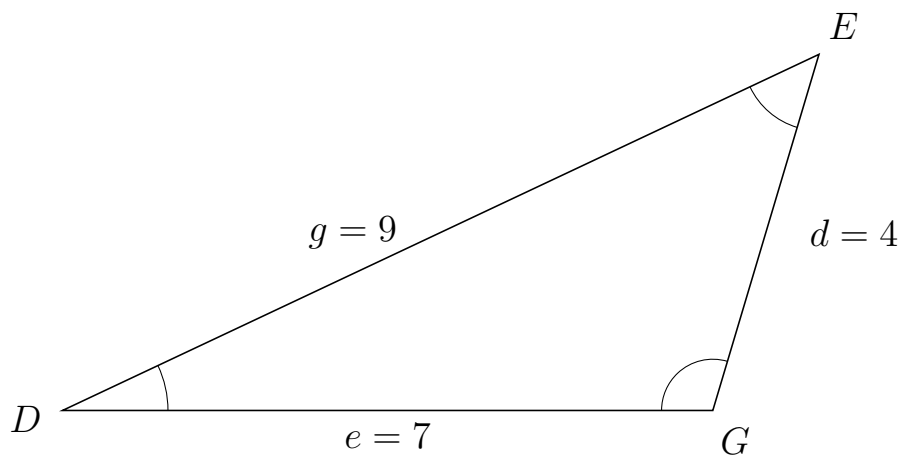
99 I trekant ADB er $a = 10$, $d = 10$ og $b = 5$.



a) Bestem vinkel D .

$D = 75.52$

100 I trekant DEG er $d = 4$, $e = 7$ og $g = 9$.



a) Bestem vinkel E .

$E = 48.19$

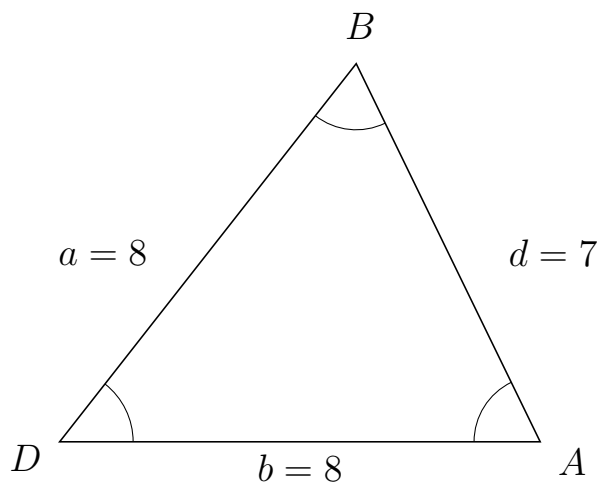


Trigonometri

Sider og vinkler abc

12. marts 2017

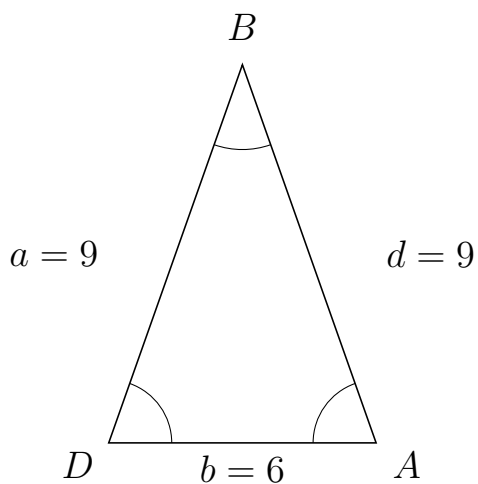
101 I trekant DBA er $d = 7$, $b = 8$ og $a = 8$.



a) Bestem vinkel B .

$B = 64.06$

102 I trekant DBA er $d = 9$, $b = 6$ og $a = 9$.



a) Bestem vinkel B .

$B = 38.94$



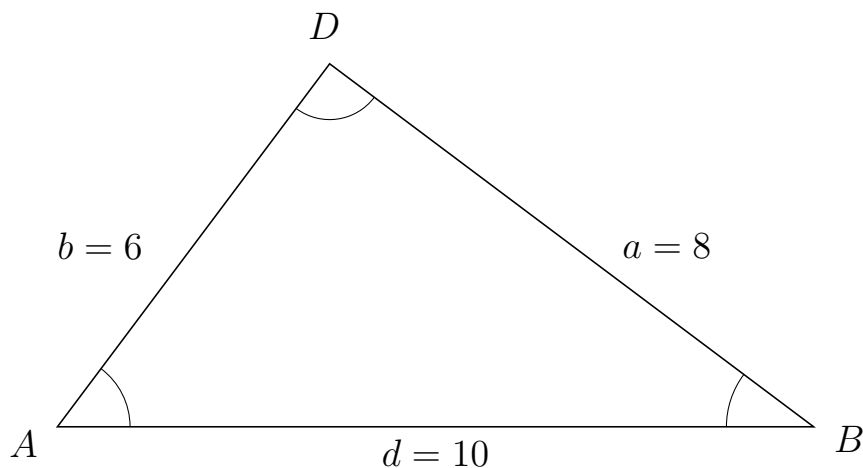
Trigonometri

Sider og vinkler abc

12. marts 2017



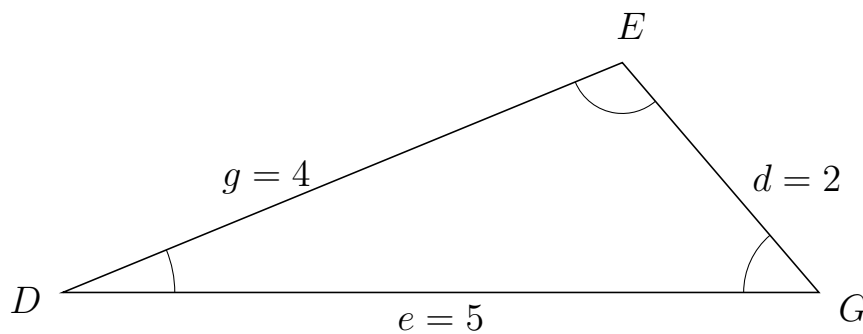
103 I trekant ADB er $a = 8$, $d = 10$ og $b = 6$.



a) Bestem vinkel D .


$D = 90$

104 I trekant DEG er $d = 2$, $e = 5$ og $g = 4$.



a) Bestem vinkel E .

$E = 108.21$

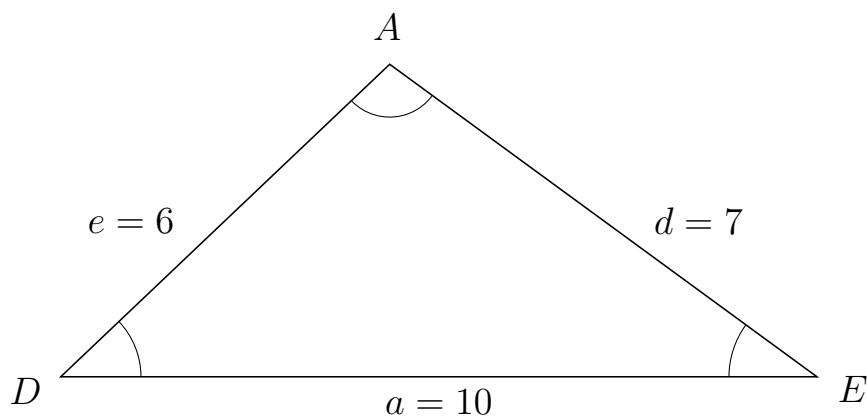


Trigonometri

Sider og vinkler abc

12. marts 2017

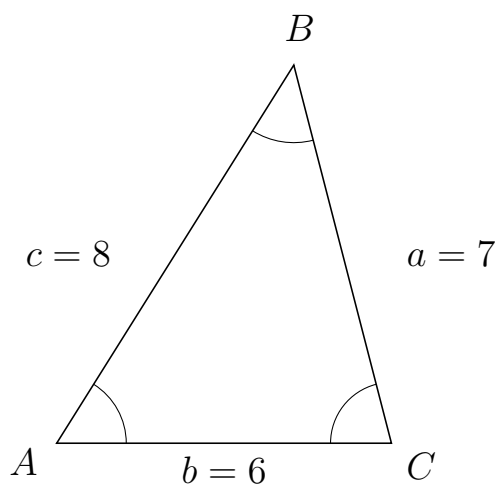
105 I trekant DAE er $d = 7$, $a = 10$ og $e = 6$.



a) Bestem vinkel A .

$A = 100.29$

106 I trekant ABC er $a = 7$, $b = 6$ og $c = 8$.



a) Bestem vinkel B .

$B = 46.57$



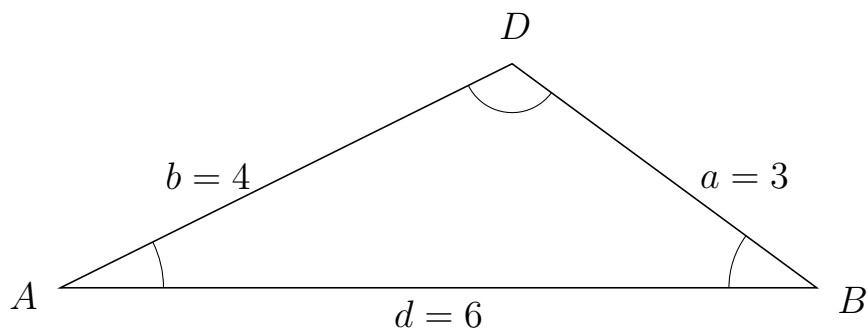
Trigonometri

Sider og vinkler abc

12. marts 2017



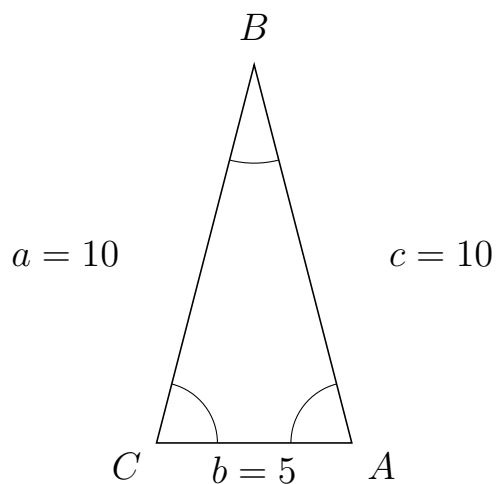
107 I trekant ADB er $a = 3$, $d = 6$ og $b = 4$.



a) Bestem vinkel D .

$D = 117.28$

108 I trekant CBA er $c = 10$, $b = 5$ og $a = 10$.



a) Bestem vinkel B .

$B = 28.96$



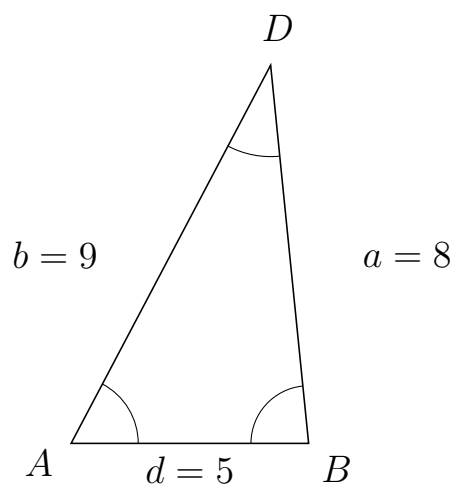
Trigonometri

Sider og vinkler abc

12. marts 2017



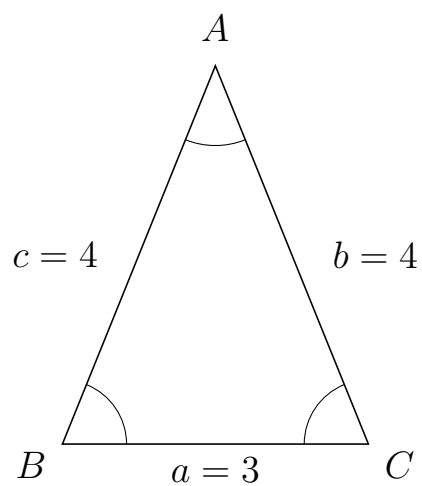
109 I trekant ADB er $a = 8$, $d = 5$ og $b = 9$.



a) Bestem vinkel D .

$D = 33.56$

110 I trekant BAC er $b = 4$, $a = 3$ og $c = 4$.



a) Bestem vinkel A .

$A = 44.05$



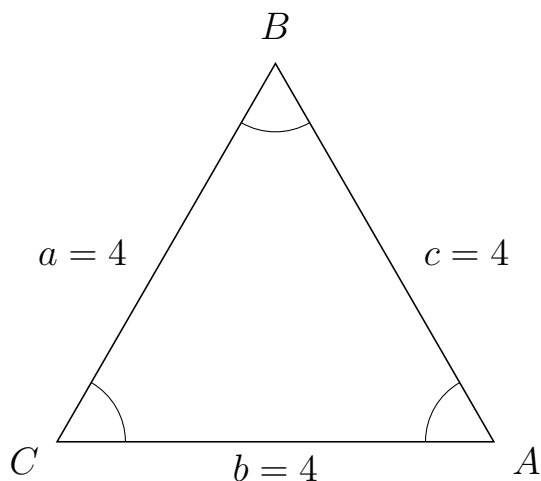
Trigonometri

Sider og vinkler abc

12. marts 2017



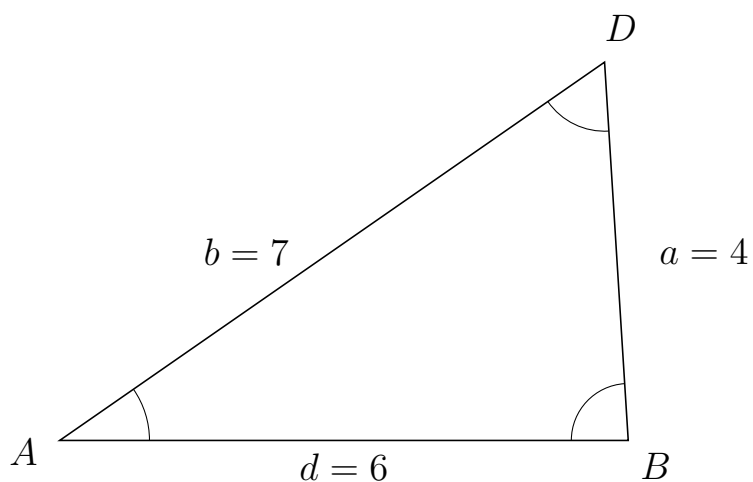
111 I trekant CBA er $c = 4$, $b = 4$ og $a = 4$.



a) Bestem vinkel B .

$B = 60$

112 I trekant ADB er $a = 4$, $d = 6$ og $b = 7$.



a) Bestem vinkel D .

$D = 58.81$



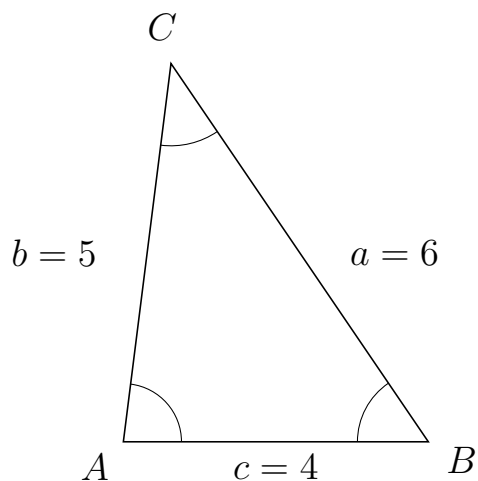
Trigonometri

Sider og vinkler abc

12. marts 2017



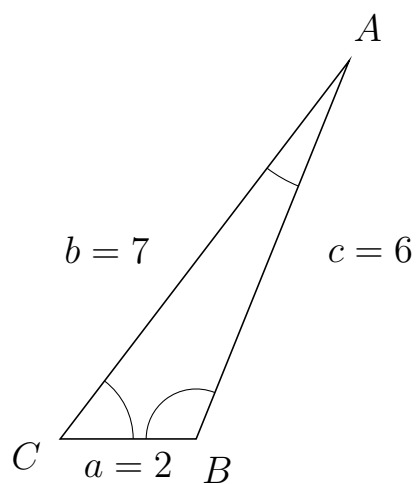
113 I trekant ACB er $a = 6$, $c = 4$ og $b = 5$.



a) Bestem vinkel C .

$C = 41.41$

114 I trekant CAB er $c = 6$, $a = 2$ og $b = 7$.



a) Bestem vinkel A .

$A = 15.36$



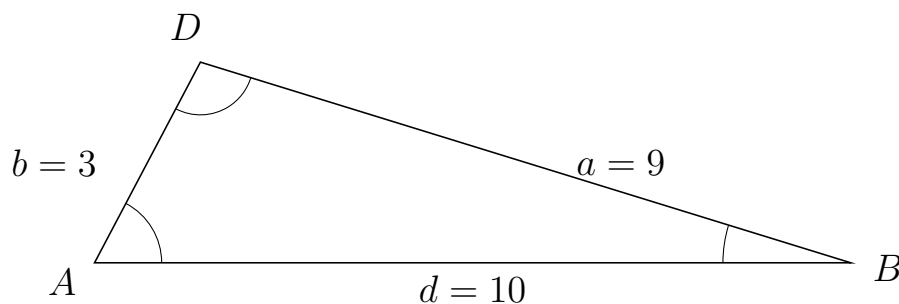
Trigonometri

Sider og vinkler abc

12. marts 2017



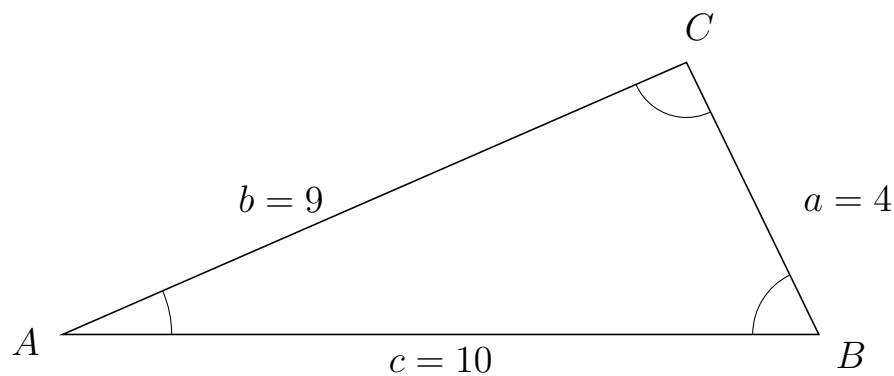
115 I trekant ADB er $a = 9$, $d = 10$ og $b = 3$.



a) Bestem vinkel D .

$D = 100.67$

116 I trekant ACB er $a = 4$, $c = 10$ og $b = 9$.



a) Bestem vinkel C .

$C = 92.39$



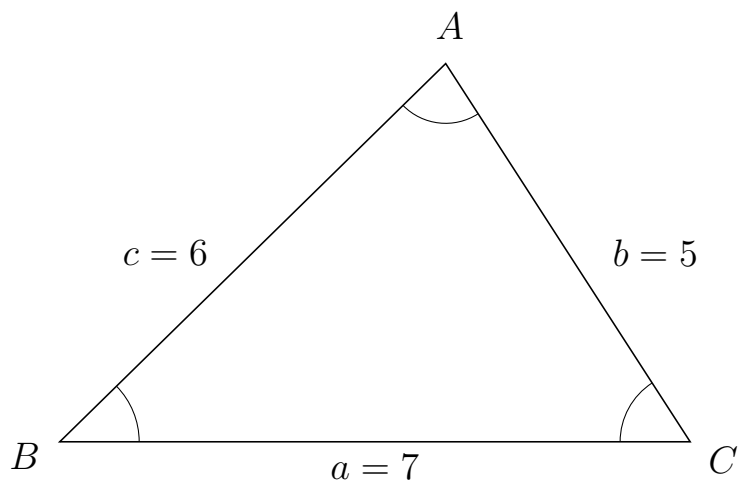
Trigonometri

Sider og vinkler abc

12. marts 2017



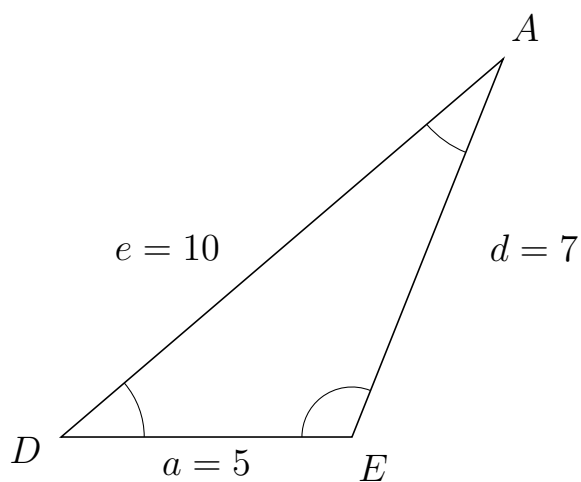
117 I trekant BAC er $b = 5$, $a = 7$ og $c = 6$.



a) Bestem vinkel A .

$A = 78.46$

118 I trekant DAE er $d = 7$, $a = 5$ og $e = 10$.



a) Bestem vinkel A .

$A = 27.66$



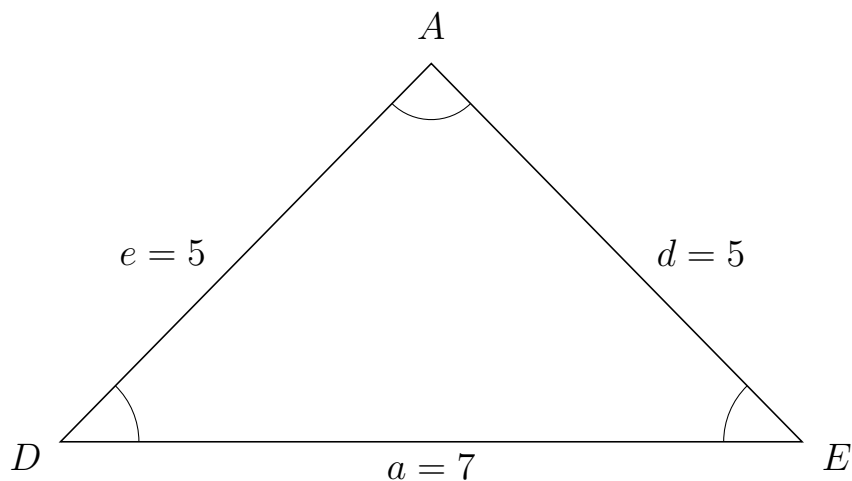
Trigonometri

Sider og vinkler abc

12. marts 2017



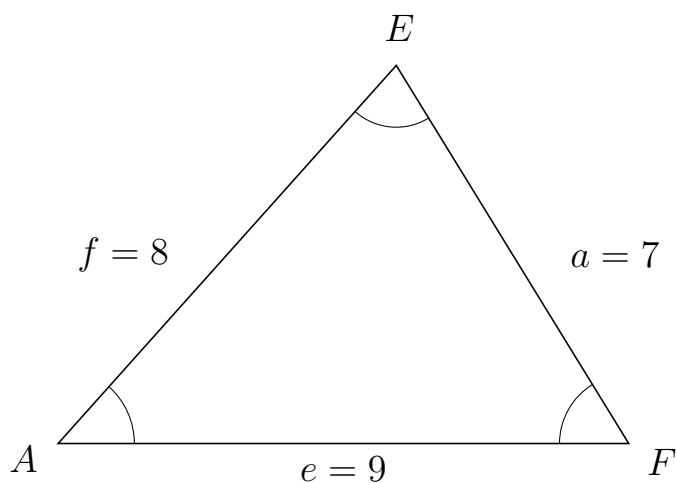
119 I trekant DAE er $d = 5$, $a = 7$ og $e = 5$.



a) Bestem vinkel A .

$A = 88.85$

120 I trekant AEF er $a = 7$, $e = 9$ og $f = 8$.



a) Bestem vinkel E .

$E = 73.4$



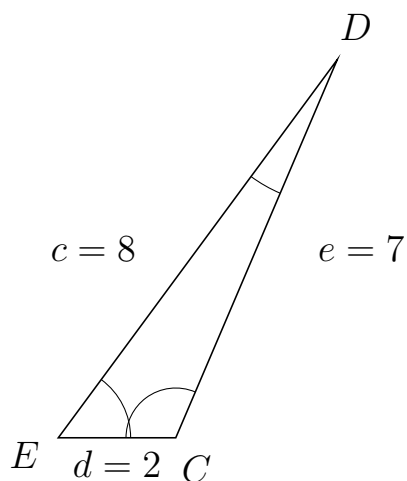
Trigonometri

Sider og vinkler abc

12. marts 2017



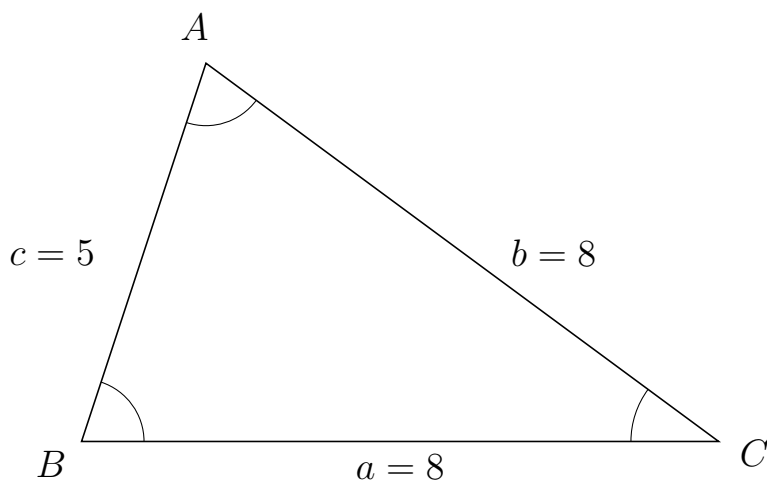
121 I trekant EDC er $e = 7$, $d = 2$ og $c = 8$.



a) Bestem vinkel D .

$D = 13.29$

122 I trekant BAC er $b = 8$, $a = 8$ og $c = 5$.



a) Bestem vinkel A .

$A = 71.79$



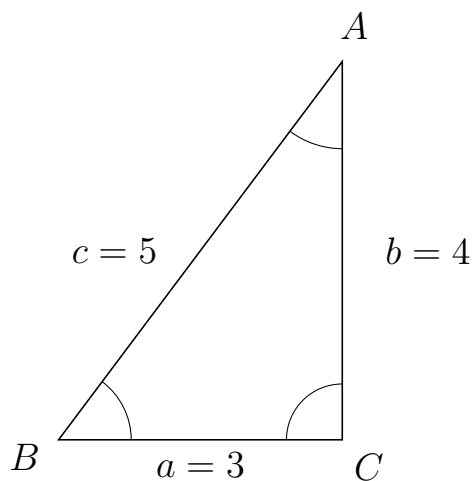
Trigonometri

Sider og vinkler abc

12. marts 2017



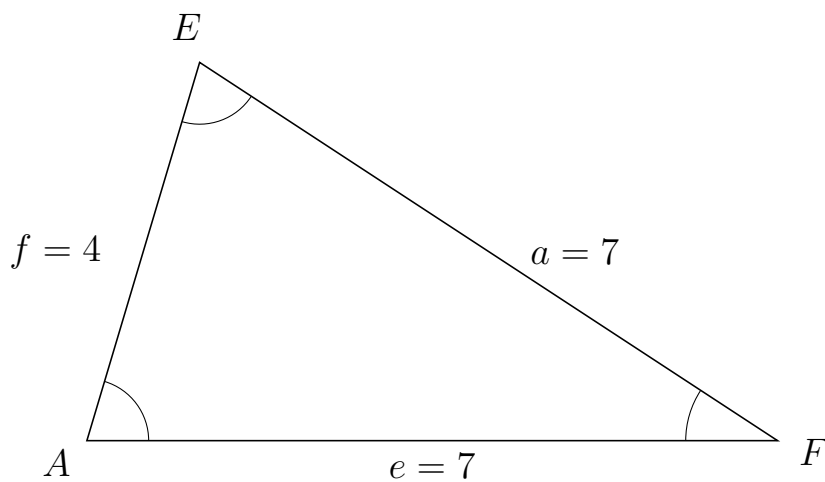
123 I trekant BAC er $b = 4$, $a = 3$ og $c = 5$.



a) Bestem vinkel A .


$A = 36.87$

124 I trekant AEF er $a = 7$, $e = 7$ og $f = 4$.



a) Bestem vinkel E .

$E = 73.4$



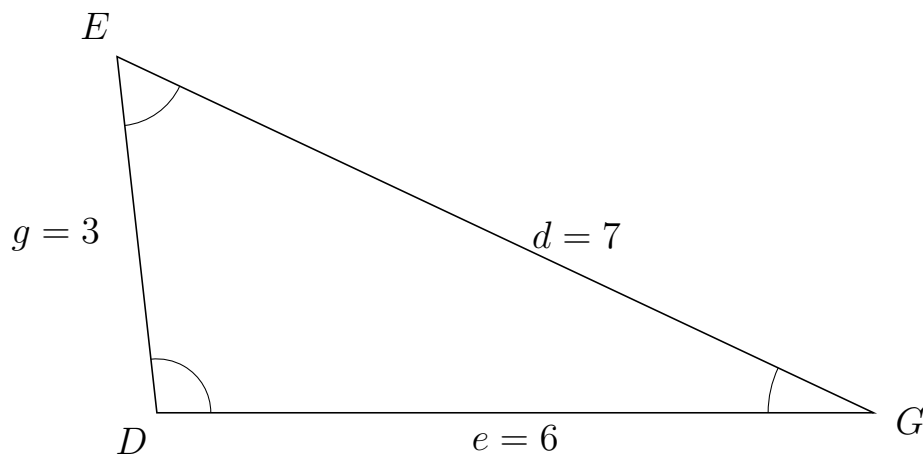
Trigonometri

Sider og vinkler abc

12. marts 2017



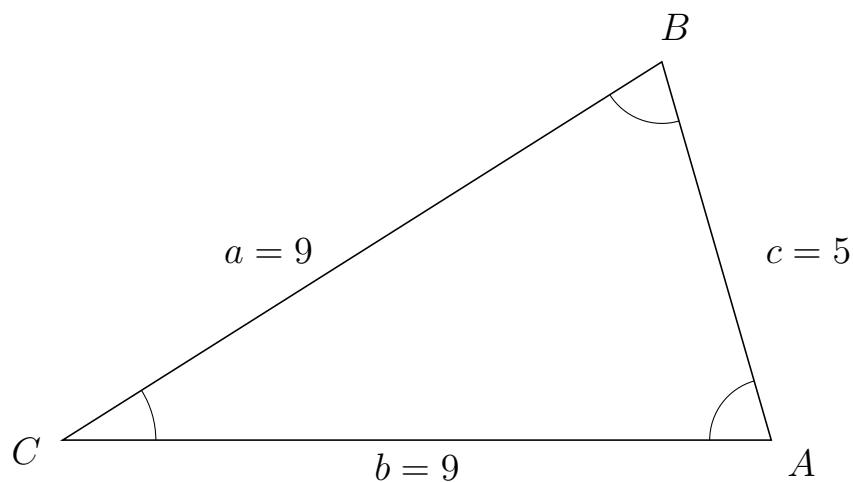
125 I trekant DEG er $d = 7$, $e = 6$ og $g = 3$.



a) Bestem vinkel E .

$E = 58.41$

126 I trekant CBA er $c = 5$, $b = 9$ og $a = 9$.



a) Bestem vinkel B .

$B = 73.87$



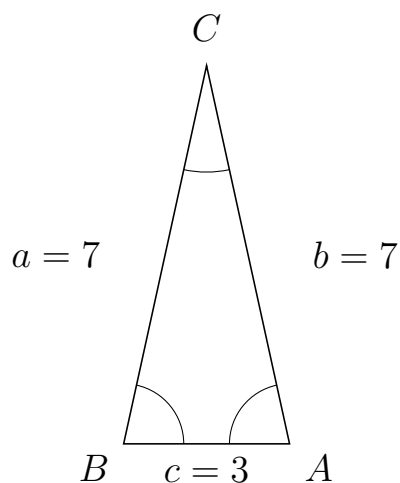
Trigonometri

Sider og vinkler abc

12. marts 2017



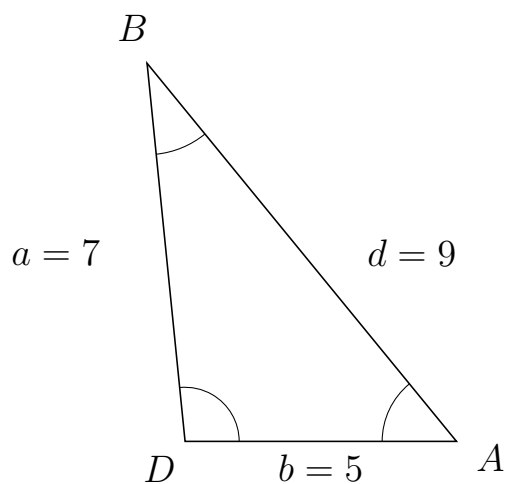
127 I trekant BCA er $b = 7$, $c = 3$ og $a = 7$.



a) Bestem vinkel C .

$C = 24.75$

128 I trekant DBA er $d = 9$, $b = 5$ og $a = 7$.



a) Bestem vinkel B .

$B = 33.56$

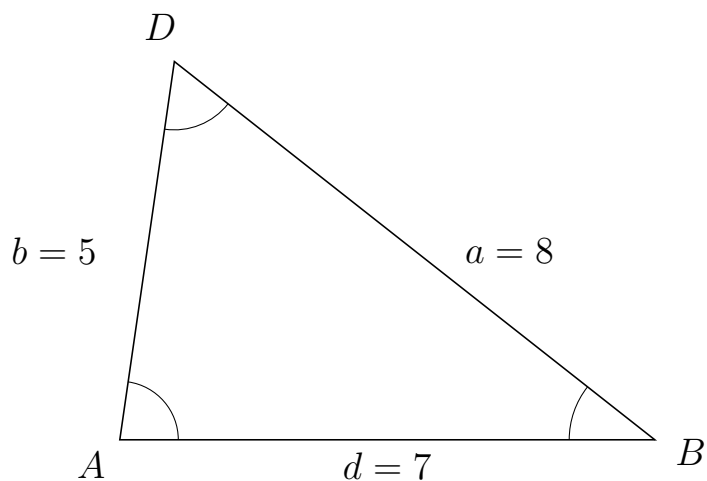


Trigonometri

Sider og vinkler abc

12. marts 2017

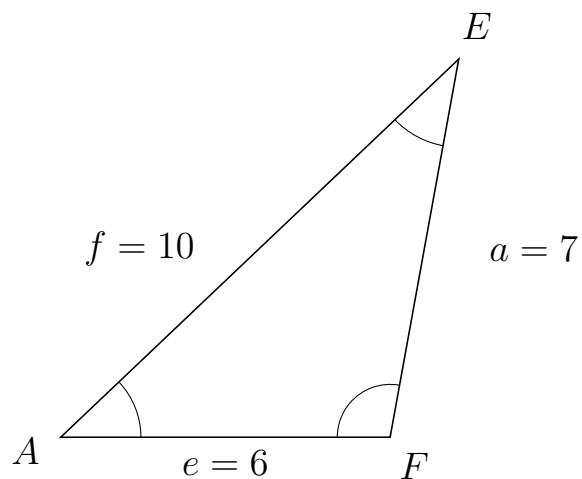
129 I trekant ADB er $a = 8$, $d = 7$ og $b = 5$.



a) Bestem vinkel D .

$D = 60$

130 I trekant AEF er $a = 7$, $e = 6$ og $f = 10$.



a) Bestem vinkel E .

$E = 36.18$



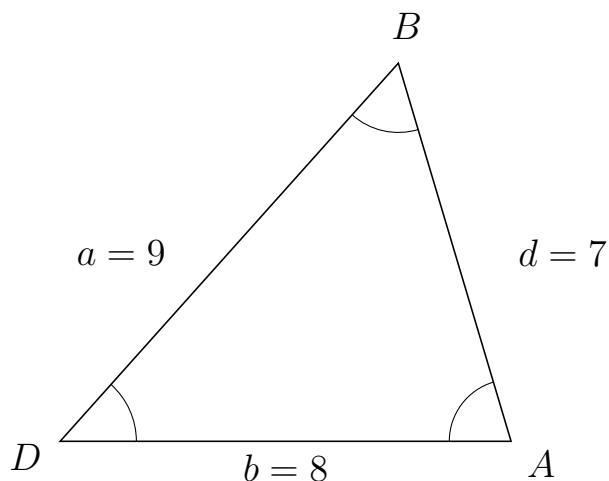
Trigonometri

Sider og vinkler abc

12. marts 2017



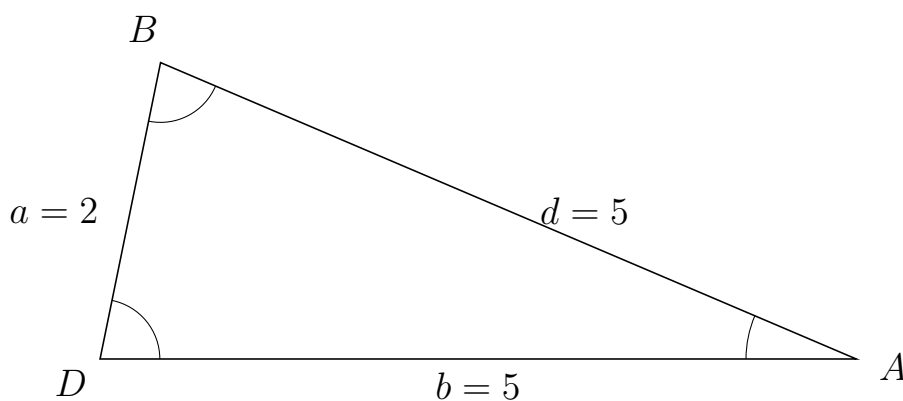
131 I trekant DBA er $d = 7$, $b = 8$ og $a = 9$.



a) Bestem vinkel B .

$B = 58.41$

132 I trekant DBA er $d = 5$, $b = 5$ og $a = 2$.



a) Bestem vinkel B .

$B = 78.46$



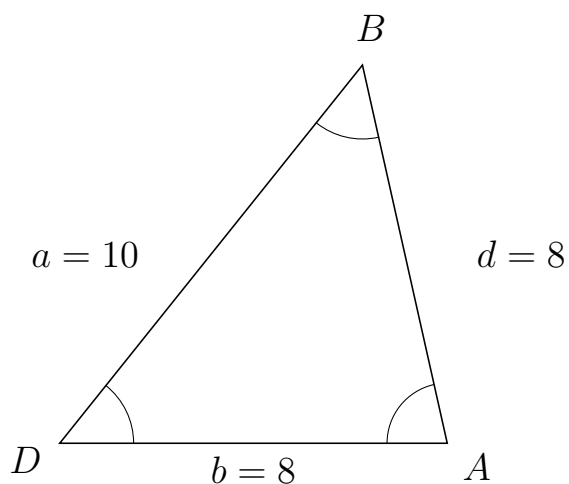
Trigonometri

Sider og vinkler abc

12. marts 2017



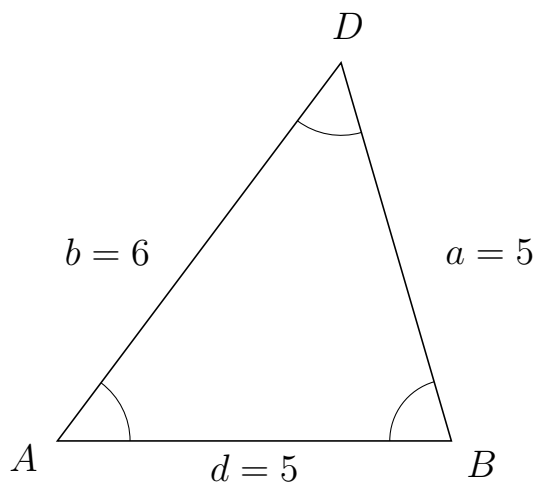
133 I trekant DBA er $d = 8$, $b = 8$ og $a = 10$.



a) Bestem vinkel B .

$B = 51.32$

134 I trekant ADB er $a = 5$, $d = 5$ og $b = 6$.



a) Bestem vinkel D .

$D = 53.13$

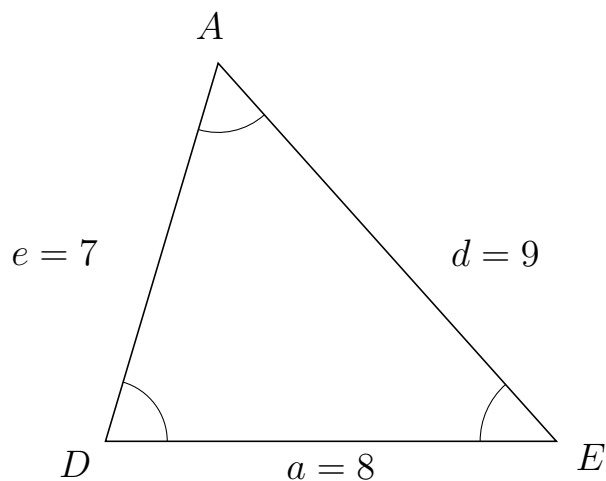


Trigonometri

Sider og vinkler abc

12. marts 2017

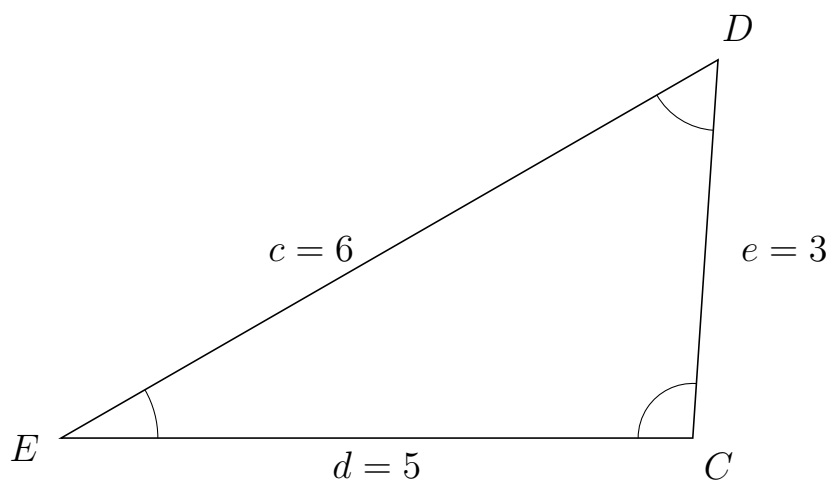
135 I trekant DAE er $d = 9$, $a = 8$ og $e = 7$.



a) Bestem vinkel A .


$A = 58.41$

136 I trekant EDC er $e = 3$, $d = 5$ og $c = 6$.



a) Bestem vinkel D .

$D = 56.25$



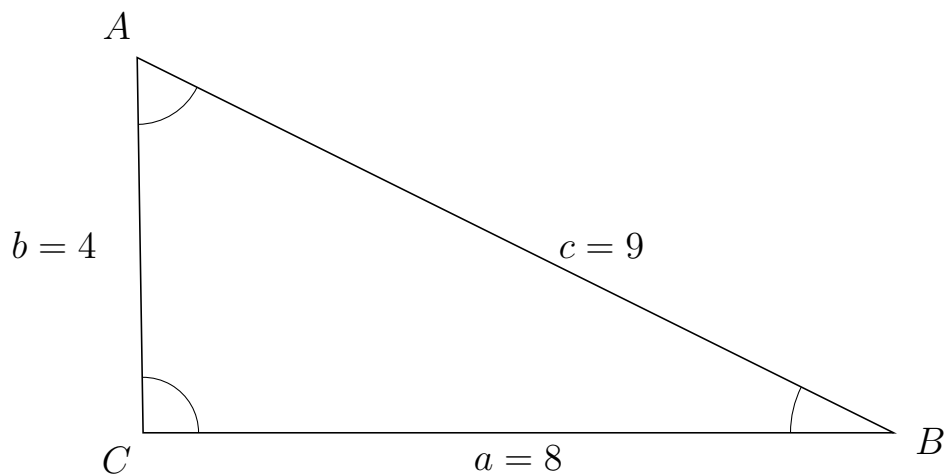
Trigonometri

Sider og vinkler abc

12. marts 2017



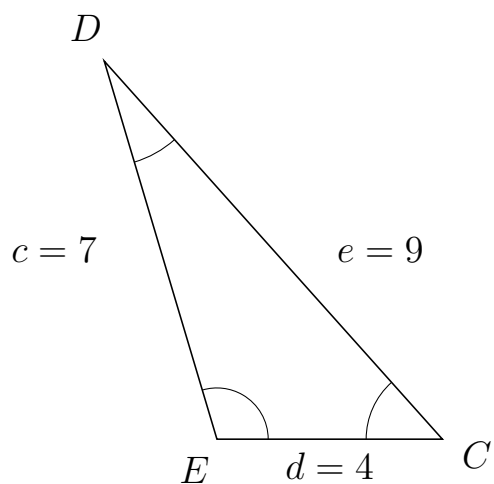
137 I trekant CAB er $c = 9$, $a = 8$ og $b = 4$.



a) Bestem vinkel A .

$A = 62.72$

138 I trekant EDC er $e = 9$, $d = 4$ og $c = 7$.



a) Bestem vinkel D .

$D = 25.21$



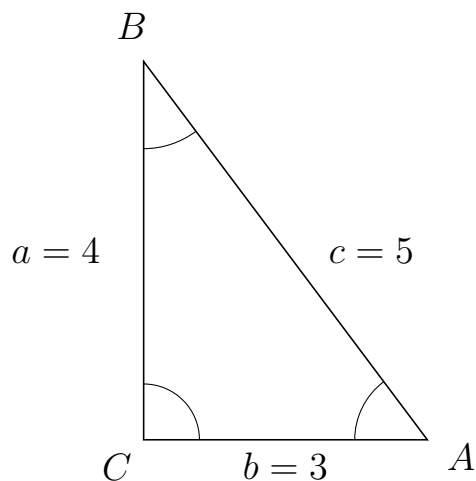
Trigonometri

Sider og vinkler abc

12. marts 2017



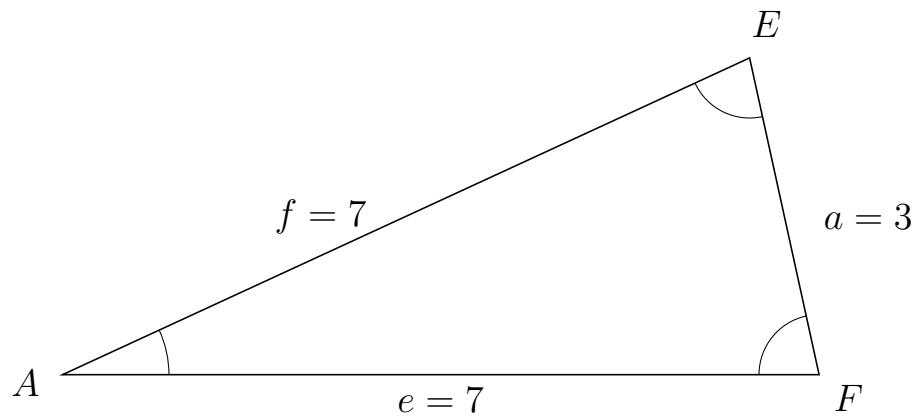
139 I trekant CBA er $c = 5$, $b = 3$ og $a = 4$.



a) Bestem vinkel B .

$B = 36.87$

140 I trekant AEF er $a = 3$, $e = 7$ og $f = 7$.



a) Bestem vinkel E .

$E = 77.63$



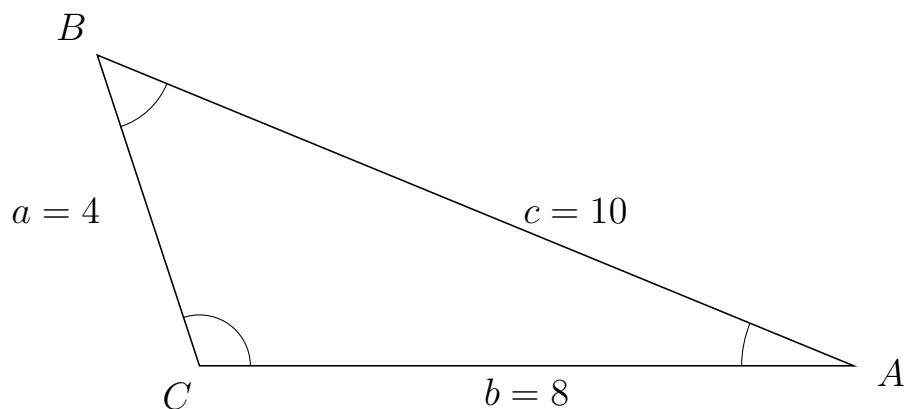
Trigonometri

Sider og vinkler abc

12. marts 2017



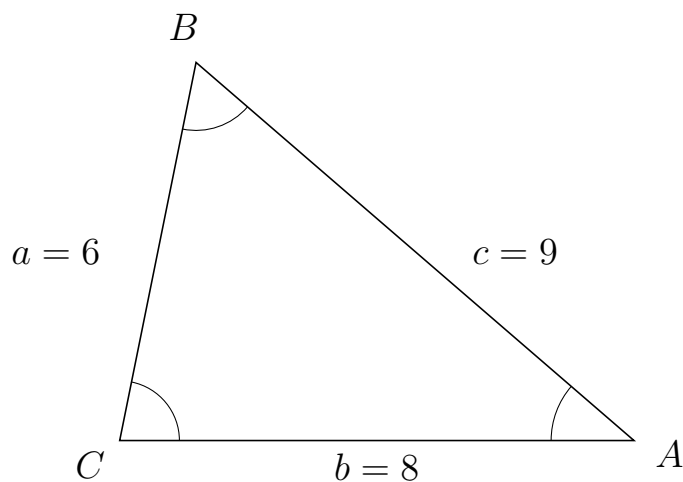
141 I trekant CBA er $c = 10$, $b = 8$ og $a = 4$.



a) Bestem vinkel B .

$B = 49.46$

142 I trekant CBA er $c = 9$, $b = 8$ og $a = 6$.



a) Bestem vinkel B .

$B = 60.61$

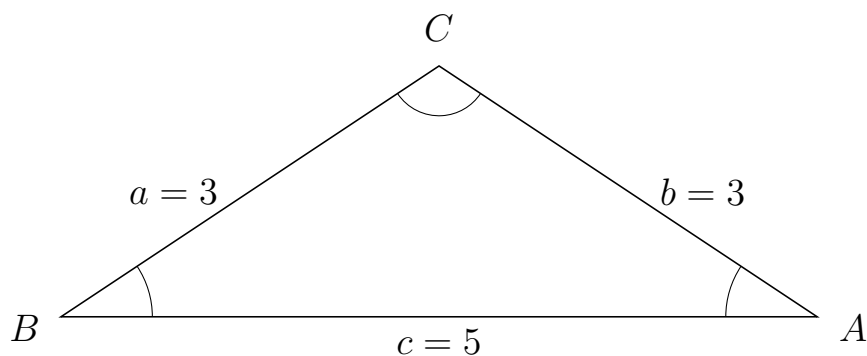


Trigonometri

Sider og vinkler abc

12. marts 2017

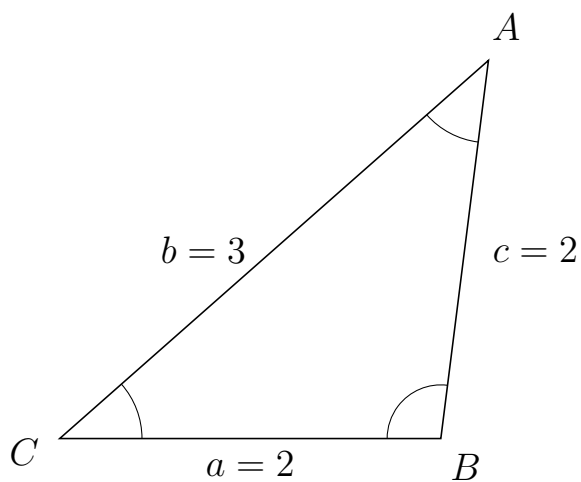
143 I trekant BCA er $b = 3$, $c = 5$ og $a = 3$.



a) Bestem vinkel C .

$C = 112.89$

144 I trekant CAB er $c = 2$, $a = 2$ og $b = 3$.



a) Bestem vinkel A .

$A = 41.41$



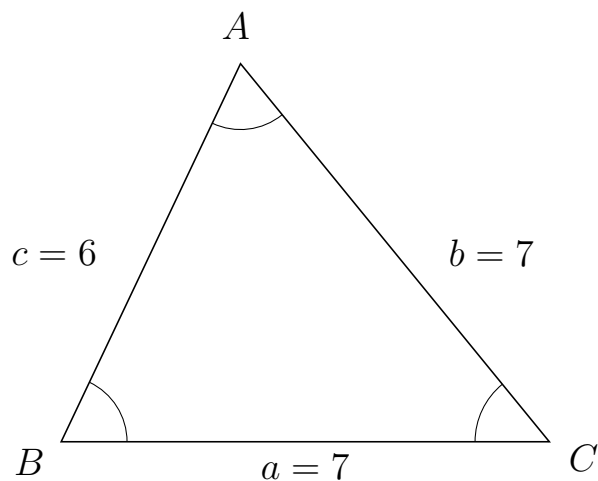
Trigonometri

Sider og vinkler abc

12. marts 2017



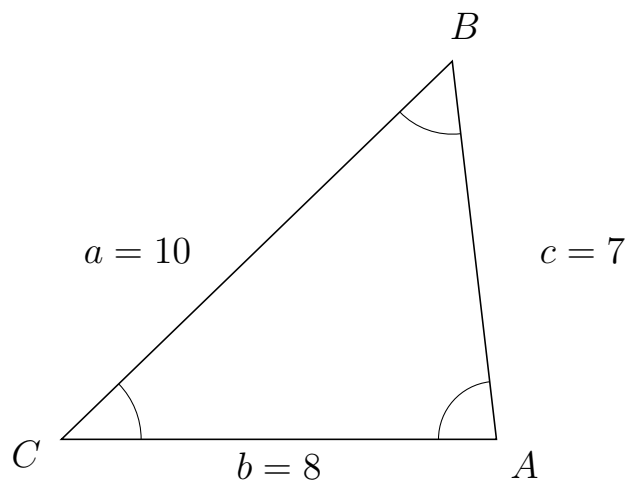
145 I trekant BAC er $b = 7$, $a = 7$ og $c = 6$.



a) Bestem vinkel A .

$A = 64.62$

146 I trekant CBA er $c = 7$, $b = 8$ og $a = 10$.



a) Bestem vinkel B .

$B = 52.62$



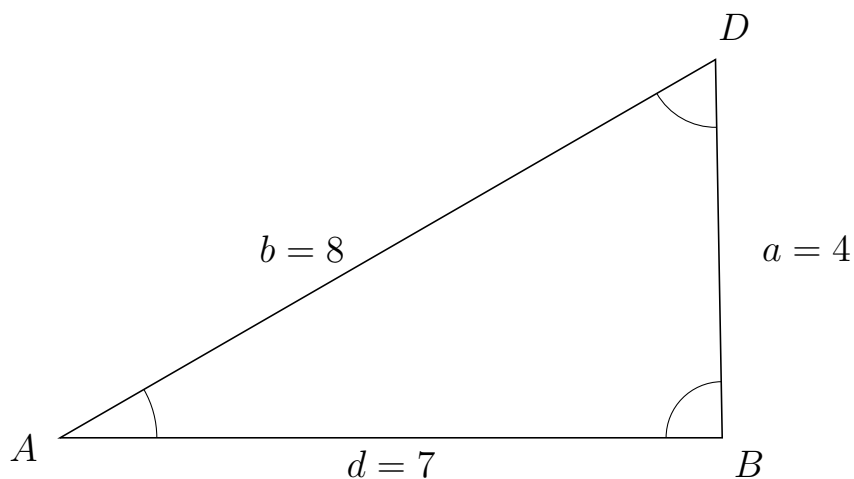
Trigonometri

Sider og vinkler abc

12. marts 2017



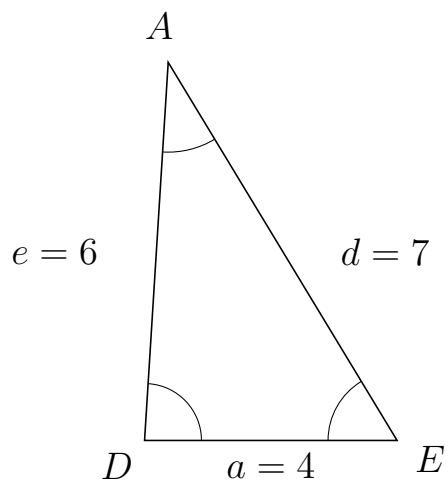
147 I trekant ADB er $a = 4$, $d = 7$ og $b = 8$.



a) Bestem vinkel D .

$D = 61.03$

148 I trekant DAE er $d = 7$, $a = 4$ og $e = 6$.



a) Bestem vinkel A .

$A = 34.77$



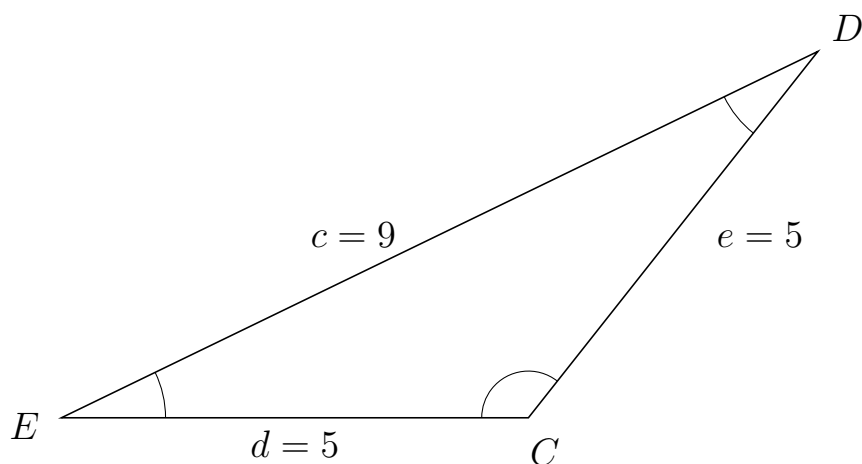
Trigonometri

Sider og vinkler abc

12. marts 2017



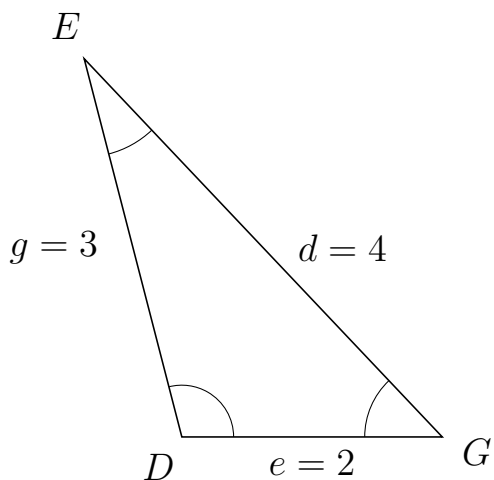
149 I trekant EDC er $e = 5$, $d = 5$ og $c = 9$.



a) Bestem vinkel D .

$D = 25.84$

150 I trekant DEG er $d = 4$, $e = 2$ og $g = 3$.



a) Bestem vinkel E .

$E = 28.96$

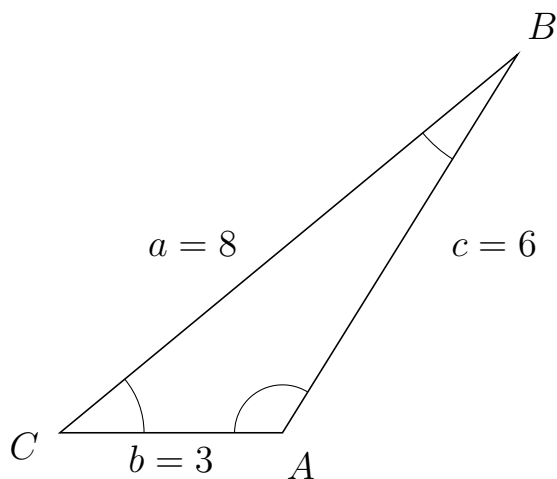


Trigonometri

Sider og vinkler abc

12. marts 2017

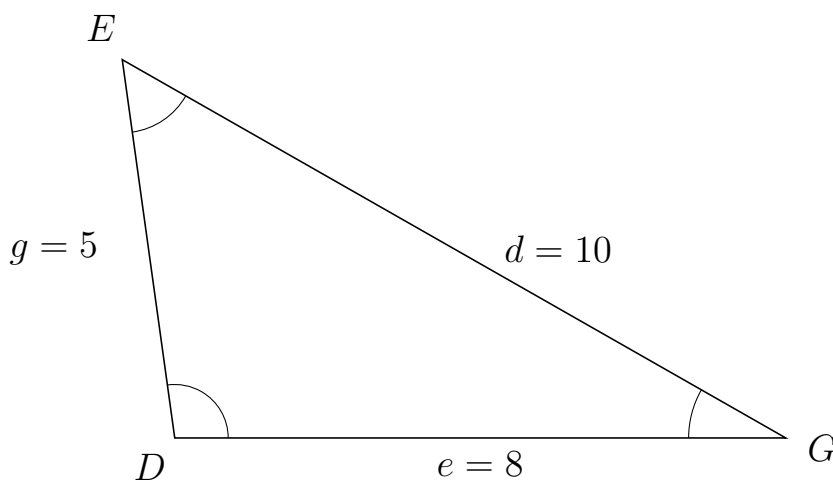
151 I trekant CBA er $c = 6$, $b = 3$ og $a = 8$.



a) Bestem vinkel B .

$B = 18.57$

152 I trekant DEG er $d = 10$, $e = 8$ og $g = 5$.



a) Bestem vinkel E .

$E = 52.41$

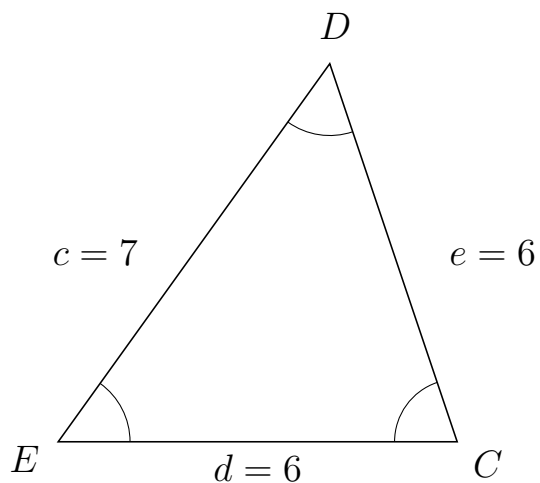


Trigonometri

Sider og vinkler abc

12. marts 2017

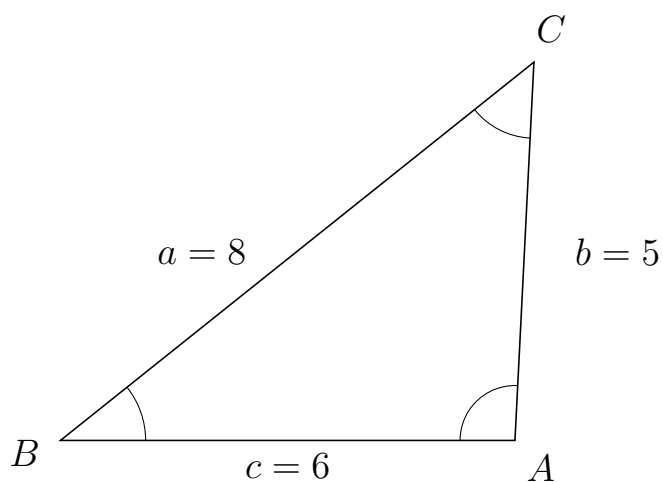
153 I trekant EDC er $e = 6$, $d = 6$ og $c = 7$.



a) Bestem vinkel D .

$D = 54.31$

154 I trekant BCA er $b = 5$, $c = 6$ og $a = 8$.



a) Bestem vinkel C .

$C = 48.51$

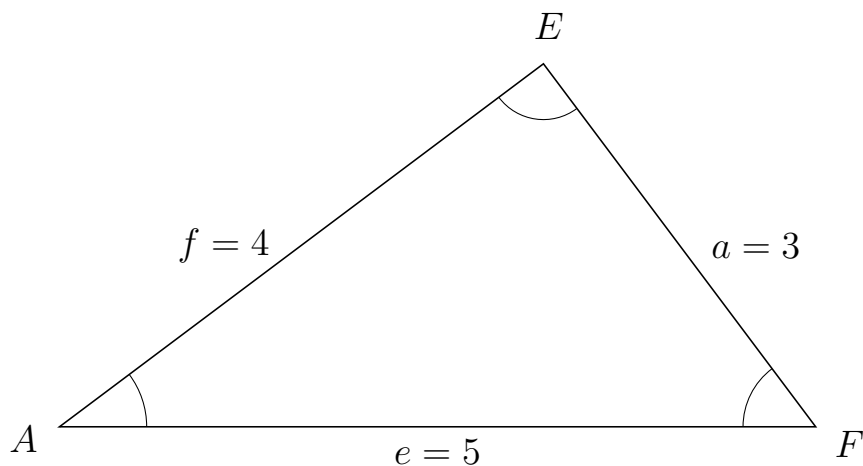


Trigonometri

Sider og vinkler abc

12. marts 2017

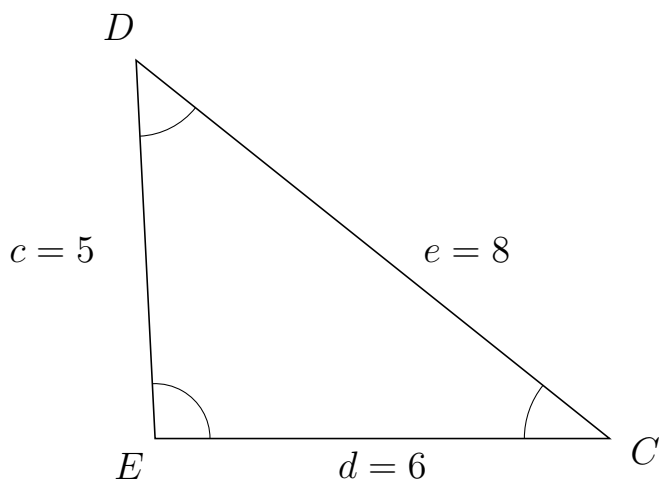
155 I trekant AEF er $a = 3$, $e = 5$ og $f = 4$.



a) Bestem vinkel E .

$E = 90$

156 I trekant EDC er $e = 8$, $d = 6$ og $c = 5$.



a) Bestem vinkel D .

$D = 48.51$



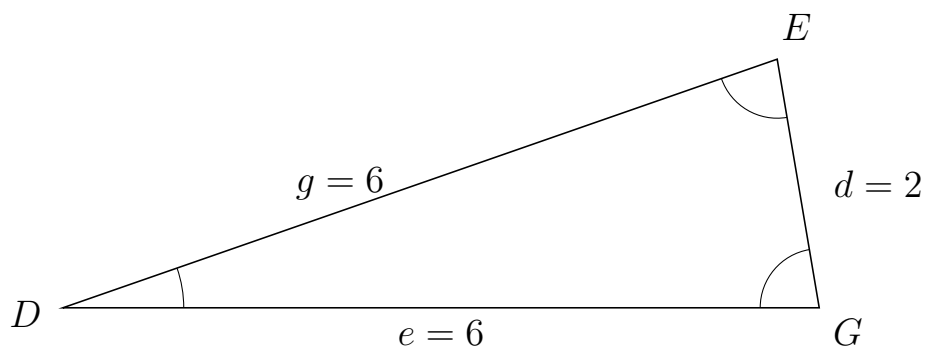
Trigonometri

Sider og vinkler abc

12. marts 2017



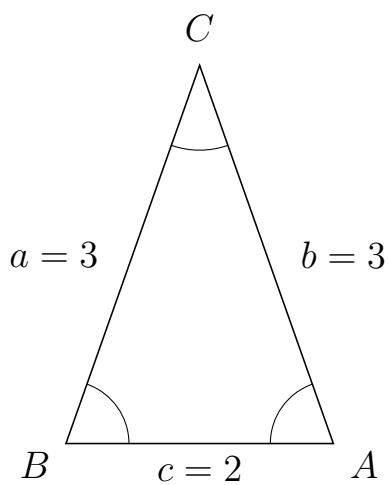
157 I trekant DEG er $d = 2$, $e = 6$ og $g = 6$.



a) Bestem vinkel E .

$E = 80.41$

158 I trekant BCA er $b = 3$, $c = 2$ og $a = 3$.



a) Bestem vinkel C .

$C = 38.94$

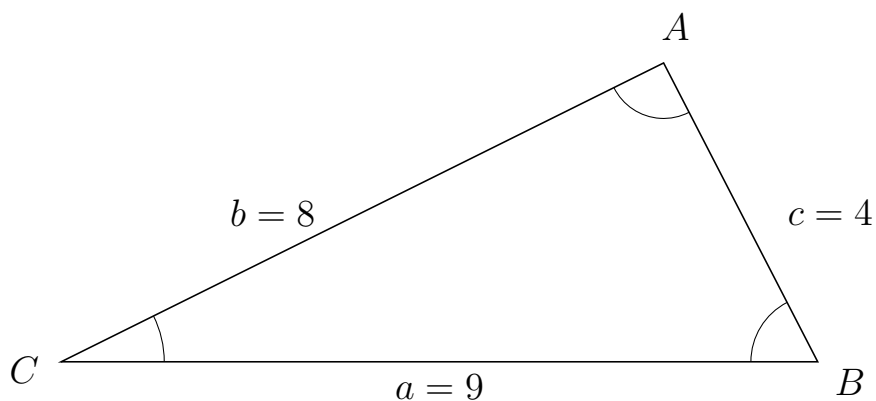


Trigonometri

Sider og vinkler abc

12. marts 2017

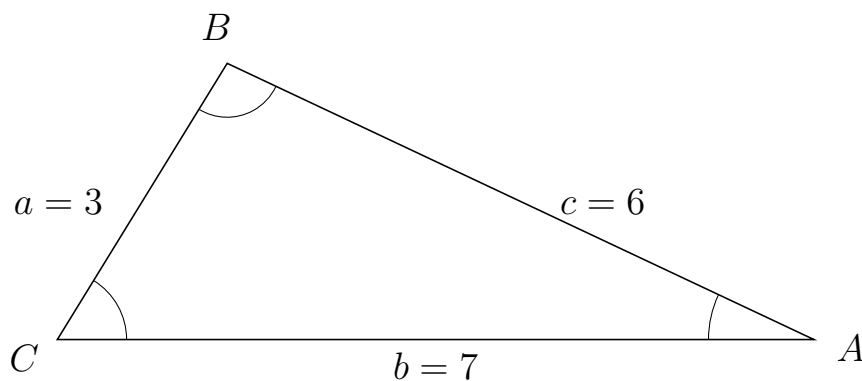
159 I trekant CAB er $c = 4$, $a = 9$ og $b = 8$.



a) Bestem vinkel A .

$A = 90.9$

160 I trekant CBA er $c = 6$, $b = 7$ og $a = 3$.



a) Bestem vinkel B .

$B = 96.38$



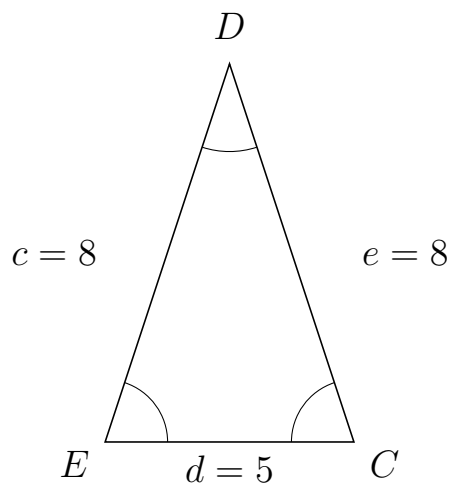
Trigonometri

Sider og vinkler abc

12. marts 2017



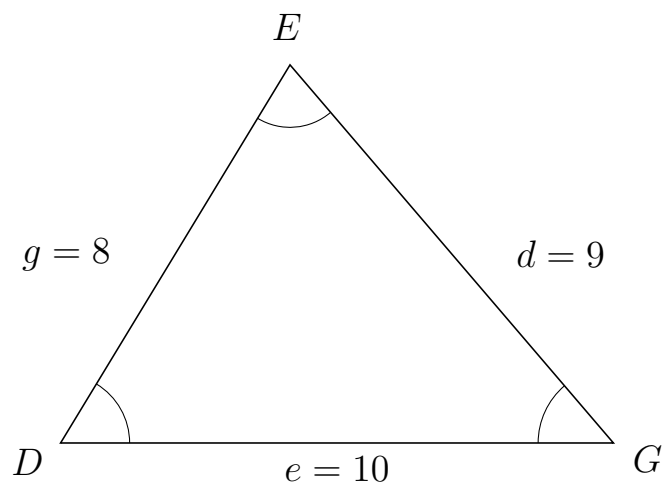
161 I trekant EDC er $e = 8$, $d = 5$ og $c = 8$.



a) Bestem vinkel D .

$D = 36.42$

162 I trekant DEG er $d = 9$, $e = 10$ og $g = 8$.



a) Bestem vinkel E .

$E = 71.79$



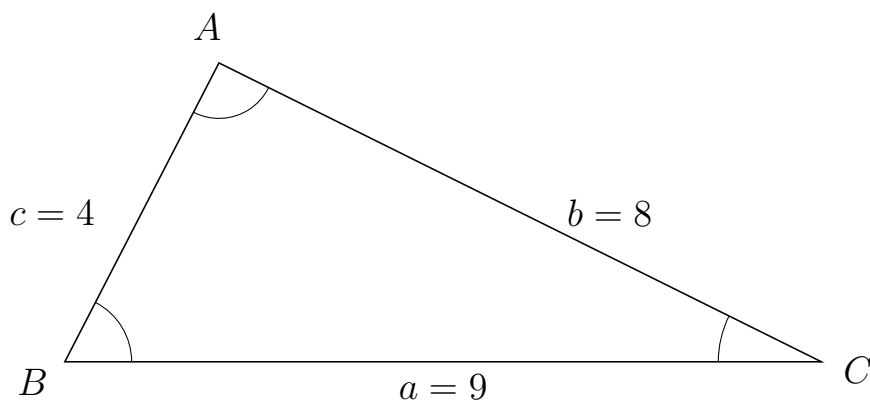
Trigonometri

Sider og vinkler abc

12. marts 2017



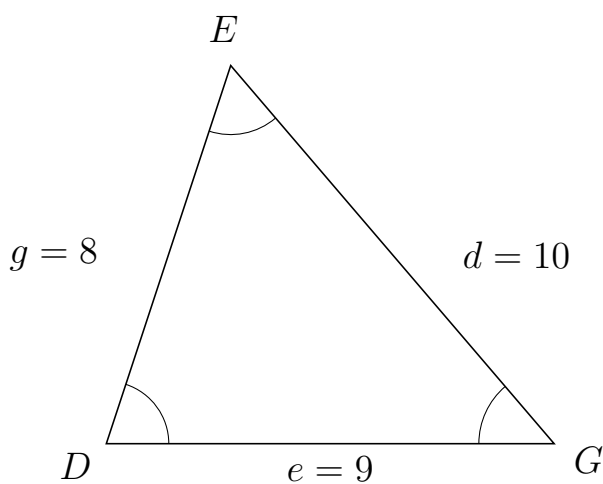
163 I trekant BAC er $b = 8$, $a = 9$ og $c = 4$.



a) Bestem vinkel A .

$A = 90.9$

164 I trekant DEG er $d = 10$, $e = 9$ og $g = 8$.



a) Bestem vinkel E .

$E = 58.75$

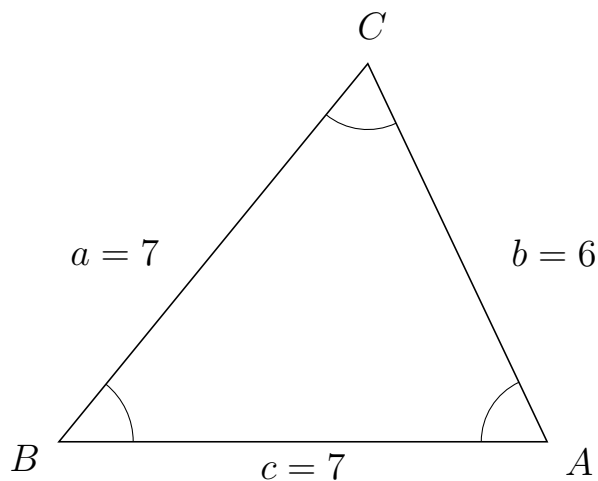


Trigonometri

Sider og vinkler abc

12. marts 2017

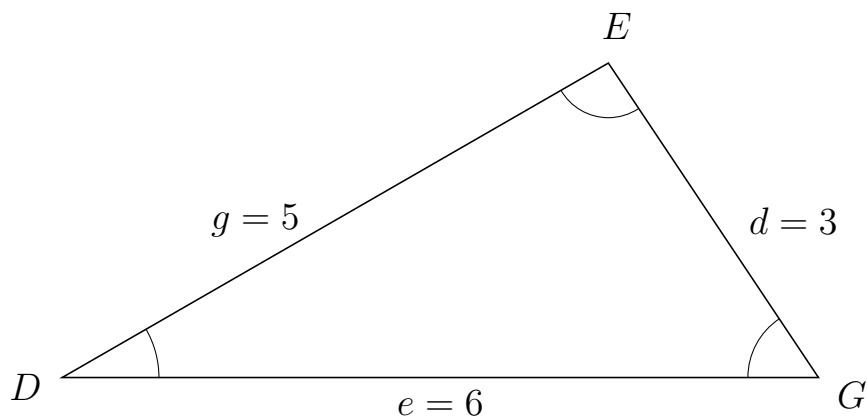
165 I trekant BCA er $b = 6$, $c = 7$ og $a = 7$.



a) Bestem vinkel C .

$C = 64.62$

166 I trekant DEG er $d = 3$, $e = 6$ og $g = 5$.



a) Bestem vinkel E .

$E = 93.82$

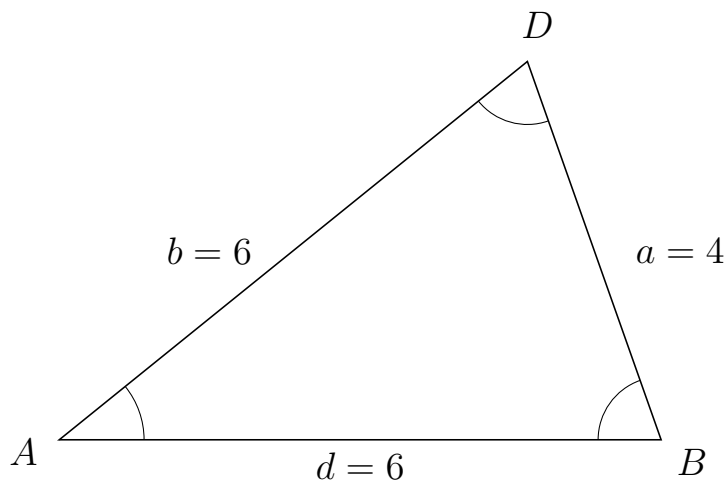


Trigonometri

Sider og vinkler abc

12. marts 2017

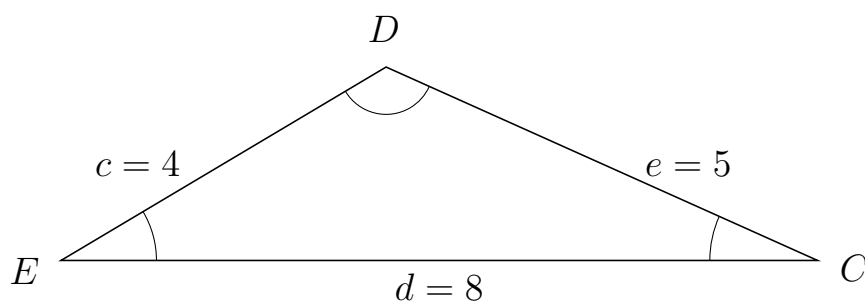
167 I trekant ADB er $a = 4$, $d = 6$ og $b = 6$.



a) Bestem vinkel D .


$D = 70.53$

168 I trekant EDC er $e = 5$, $d = 8$ og $c = 4$.



a) Bestem vinkel D .

$D = 125.1$

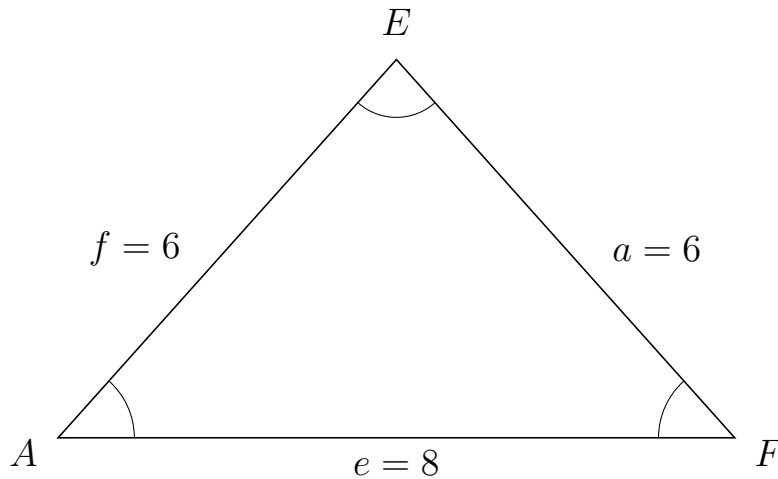


Trigonometri

Sider og vinkler abc

12. marts 2017

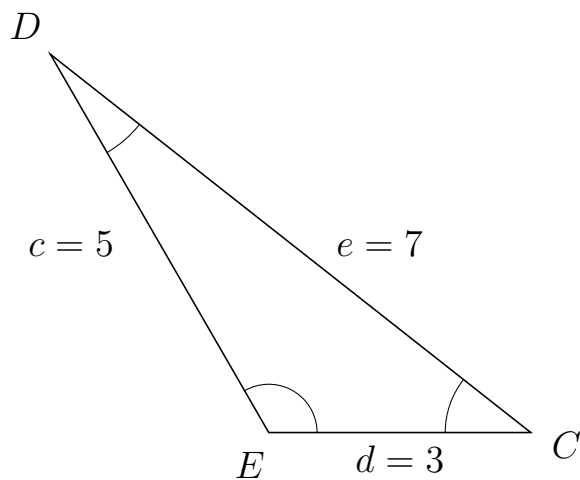
169 I trekant AEF er $a = 6$, $e = 8$ og $f = 6$.



a) Bestem vinkel E .

$E = 83.62$

170 I trekant EDC er $e = 7$, $d = 3$ og $c = 5$.



a) Bestem vinkel D .

$D = 21.79$



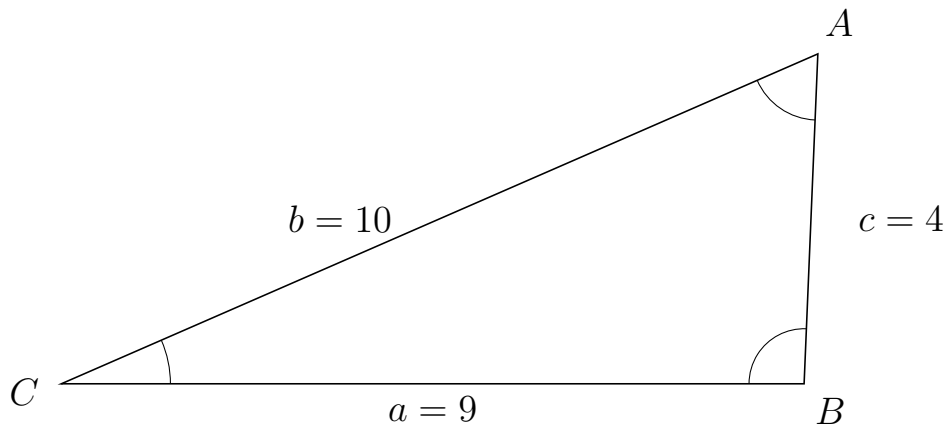
Trigonometri

Sider og vinkler abc

12. marts 2017



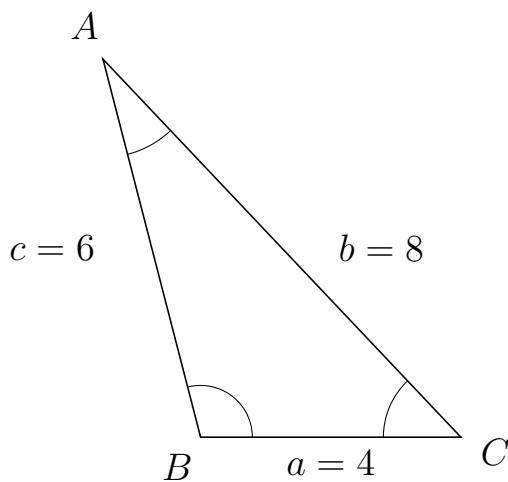
171 I trekant CAB er $c = 4$, $a = 9$ og $b = 10$.



a) Bestem vinkel A .


$A = 64.06$

172 I trekant BAC er $b = 8$, $a = 4$ og $c = 6$.



a) Bestem vinkel A .

$A = 28.96$



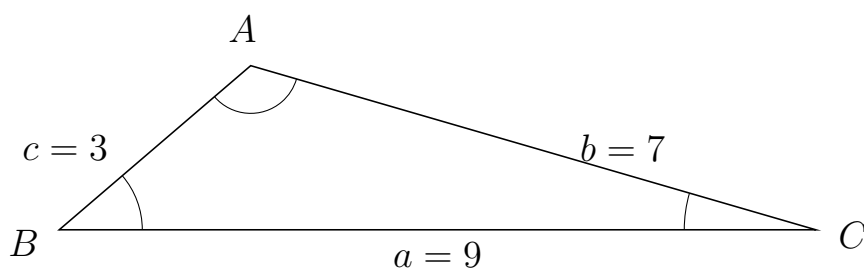
Trigonometri

Sider og vinkler abc

12. marts 2017



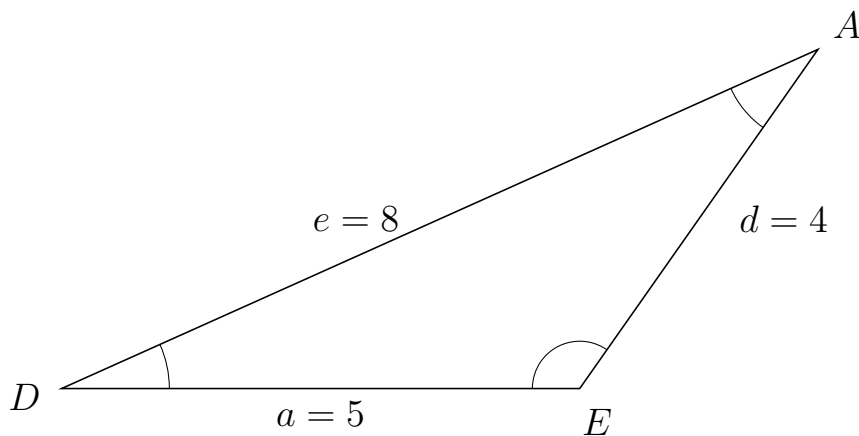
173 I trekant BAC er $b = 7$, $a = 9$ og $c = 3$.



a) Bestem vinkel A .

$A = 123.2$

174 I trekant DAE er $d = 4$, $a = 5$ og $e = 8$.



a) Bestem vinkel A .

$A = 30.75$



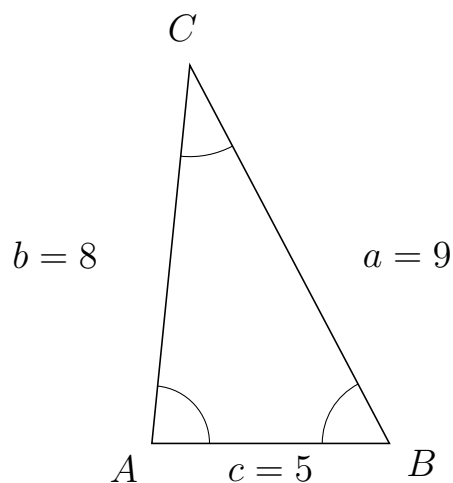
Trigonometri

Sider og vinkler abc

12. marts 2017



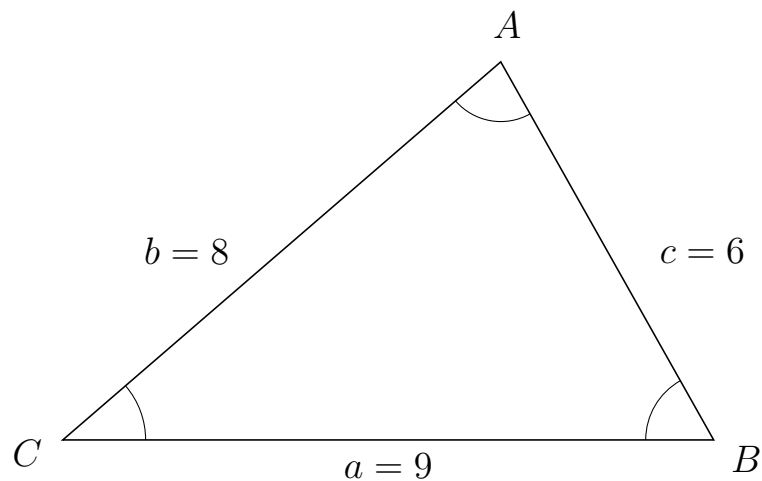
175 I trekant ACB er $a = 9$, $c = 5$ og $b = 8$.



a) Bestem vinkel C .

$C = 33.56$

176 I trekant CAB er $c = 6$, $a = 9$ og $b = 8$.



a) Bestem vinkel A .

$A = 78.58$



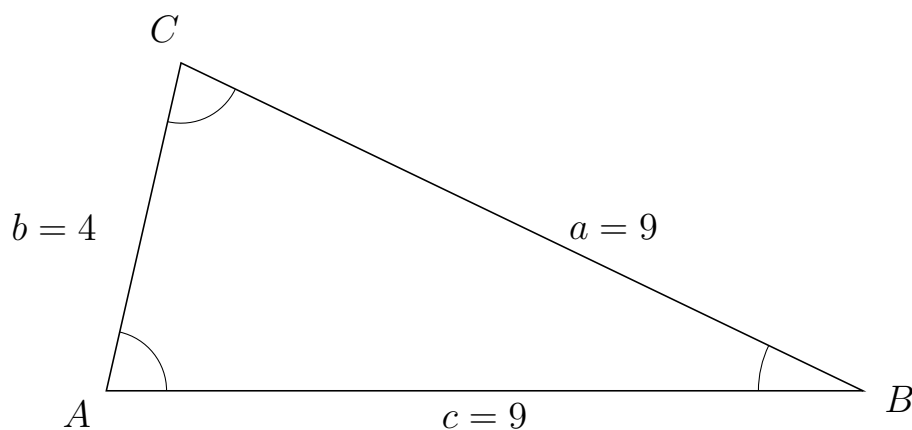
Trigonometri

Sider og vinkler abc

12. marts 2017



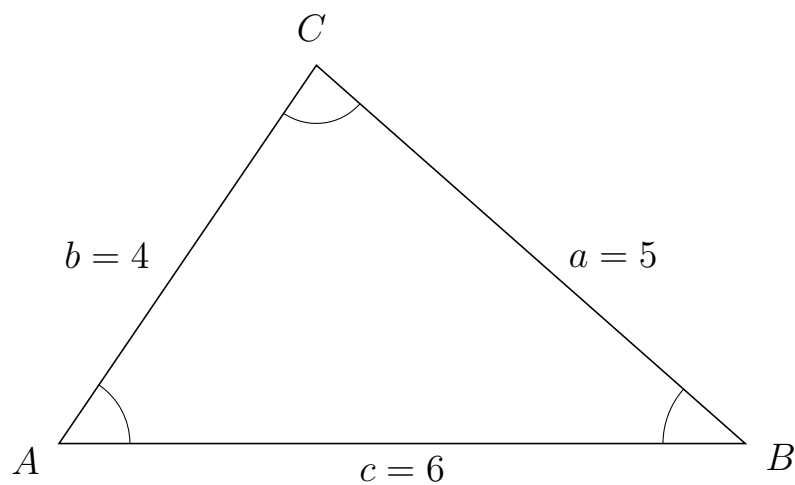
177 I trekant ACB er $a = 9$, $c = 9$ og $b = 4$.



a) Bestem vinkel C .

$C = 77.16$

178 I trekant ACB er $a = 5$, $c = 6$ og $b = 4$.



a) Bestem vinkel C .

$C = 82.82$



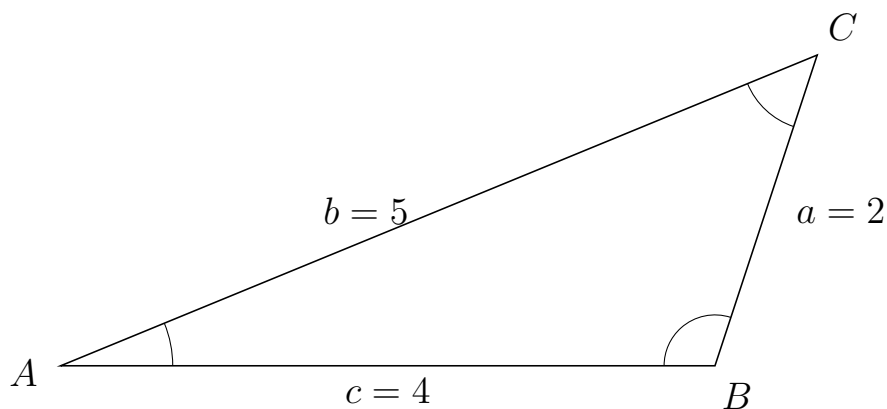
Trigonometri

Sider og vinkler abc

12. marts 2017



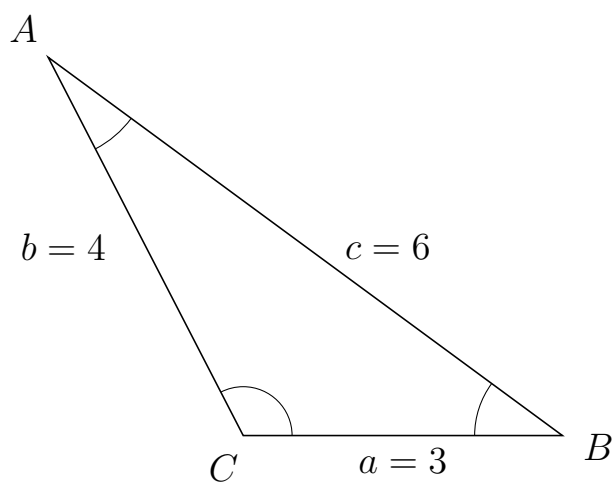
179 I trekant ACB er $a = 2$, $c = 4$ og $b = 5$.



a) Bestem vinkel C .


$C = 49.46$

180 I trekant CAB er $c = 6$, $a = 3$ og $b = 4$.



a) Bestem vinkel A .

$A = 26.38$

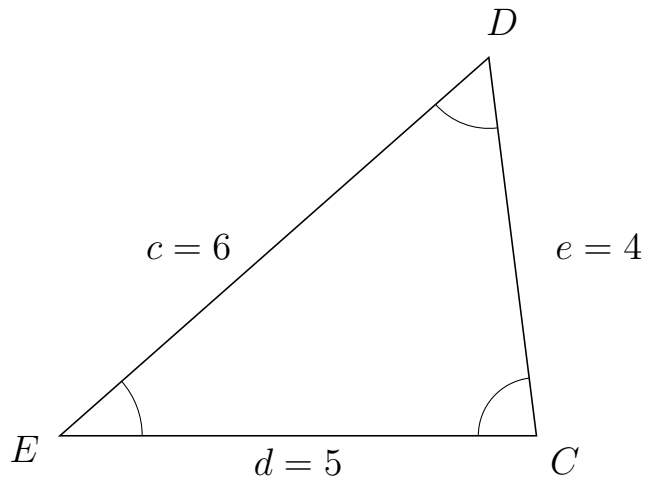


Trigonometri

Sider og vinkler abc

12. marts 2017

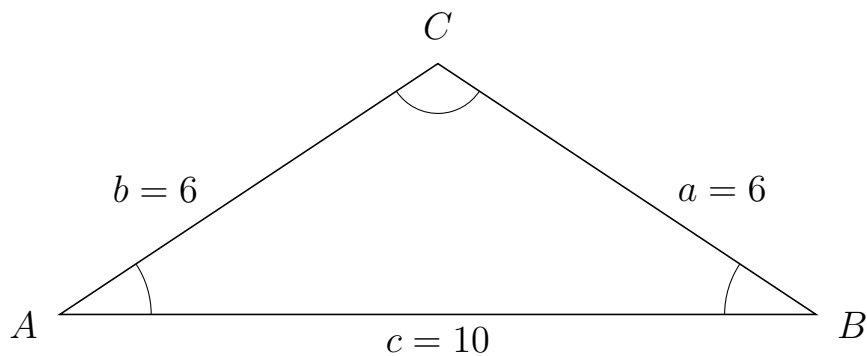
181 I trekant EDC er $e = 4$, $d = 5$ og $c = 6$.



a) Bestem vinkel D .

$D = 55.77$

182 I trekant ACB er $a = 6$, $c = 10$ og $b = 6$.



a) Bestem vinkel C .

$C = 112.89$



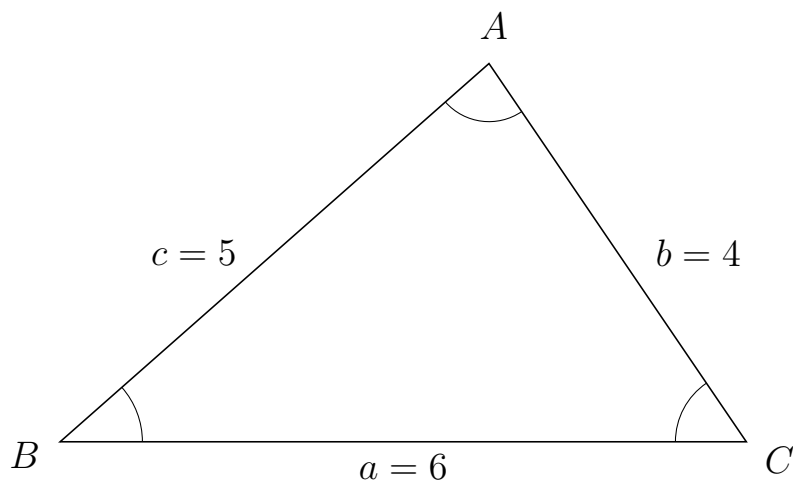
Trigonometri

Sider og vinkler abc

12. marts 2017



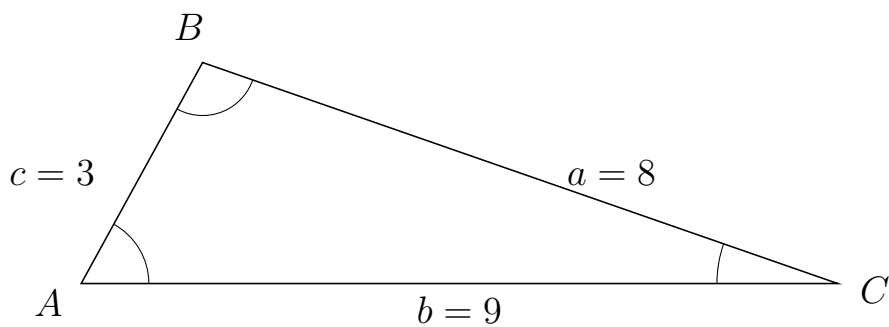
183 I trekant BAC er $b = 4$, $a = 6$ og $c = 5$.



a) Bestem vinkel A .


$A = 82.82$

184 I trekant ABC er $a = 8$, $b = 9$ og $c = 3$.



a) Bestem vinkel B .

$B = 99.59$



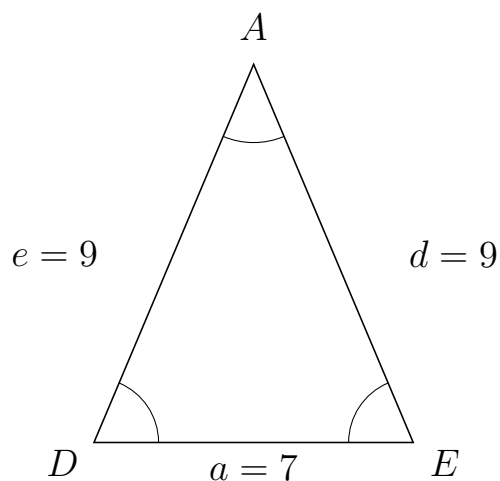
Trigonometri

Sider og vinkler abc

12. marts 2017



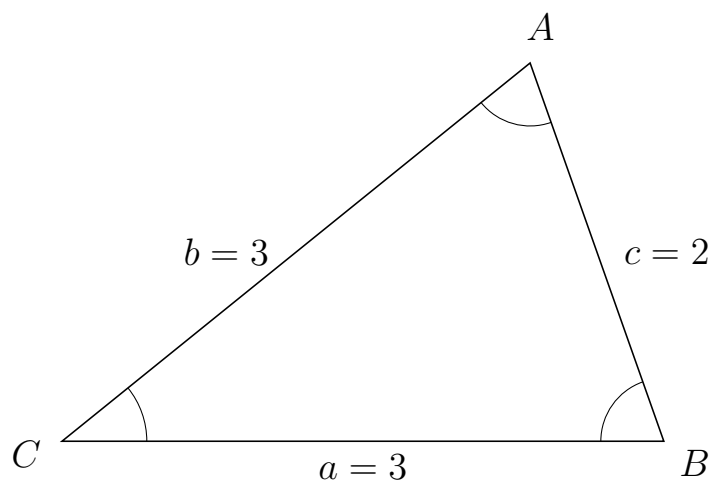
185 I trekant DAE er $d = 9$, $a = 7$ og $e = 9$.



a) Bestem vinkel A .

$A = 45.77$

186 I trekant CAB er $c = 2$, $a = 3$ og $b = 3$.



a) Bestem vinkel A .

$A = 70.53$

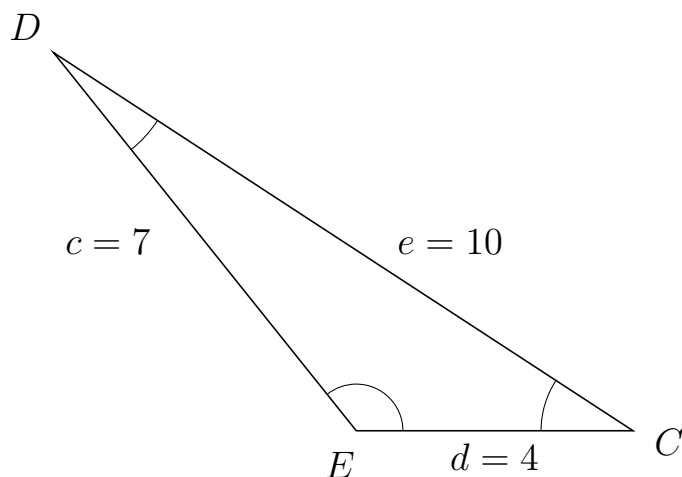


Trigonometri

Sider og vinkler abc

12. marts 2017

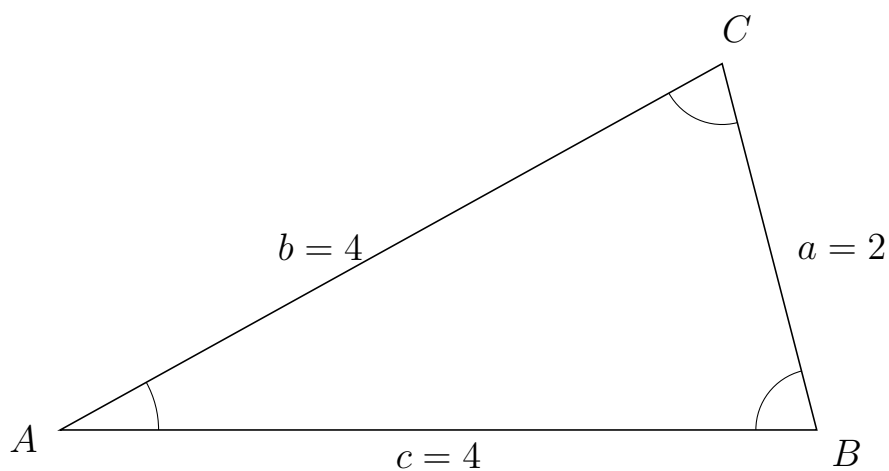
187 I trekant EDC er $e = 10$, $d = 4$ og $c = 7$.



a) Bestem vinkel D .

$D = 18.19$

188 I trekant ACB er $a = 2$, $c = 4$ og $b = 4$.



a) Bestem vinkel C .

$C = 75.52$



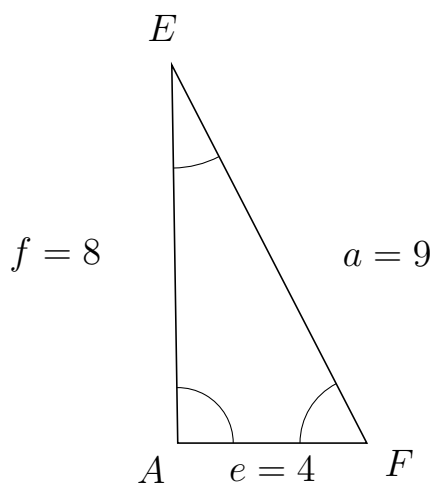
Trigonometri

Sider og vinkler abc

12. marts 2017



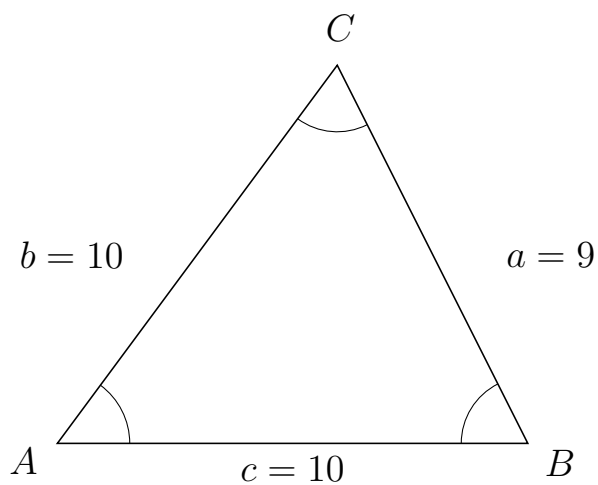
189 I trekant AEF er $a = 9$, $e = 4$ og $f = 8$.



a) Bestem vinkel E .

$E = 26.38$

190 I trekant ACB er $a = 9$, $c = 10$ og $b = 10$.



a) Bestem vinkel C .

$C = 63.26$

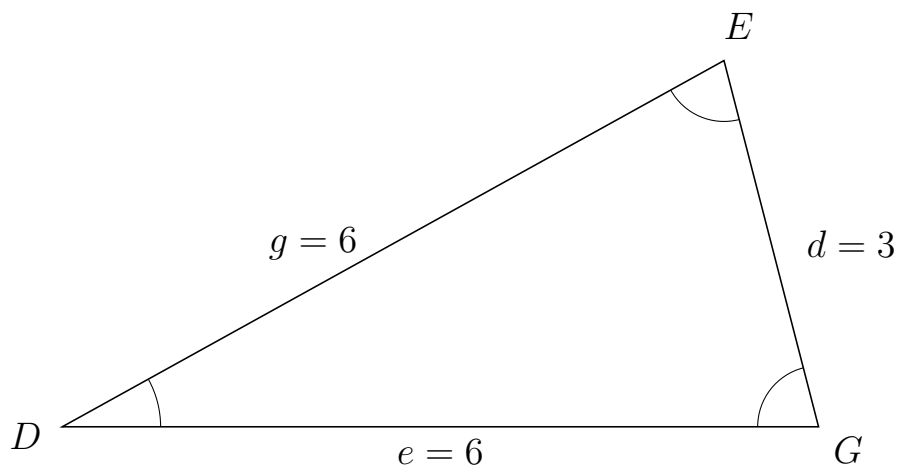


Trigonometri

Sider og vinkler abc

12. marts 2017

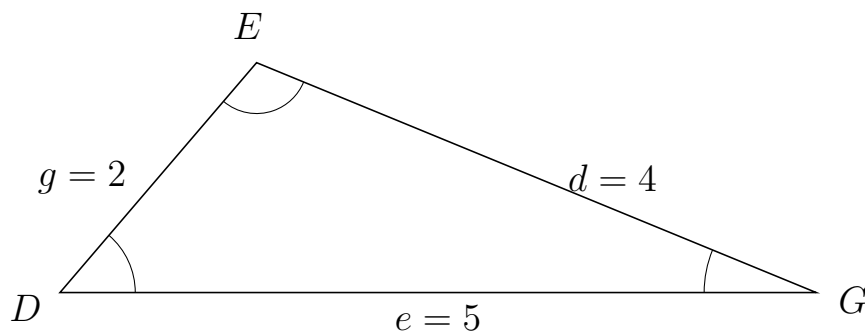
191 I trekant DEG er $d = 3$, $e = 6$ og $g = 6$.



a) Bestem vinkel E .

$E = 75.52$

192 I trekant DEG er $d = 4$, $e = 5$ og $g = 2$.



a) Bestem vinkel E .

$E = 108.21$



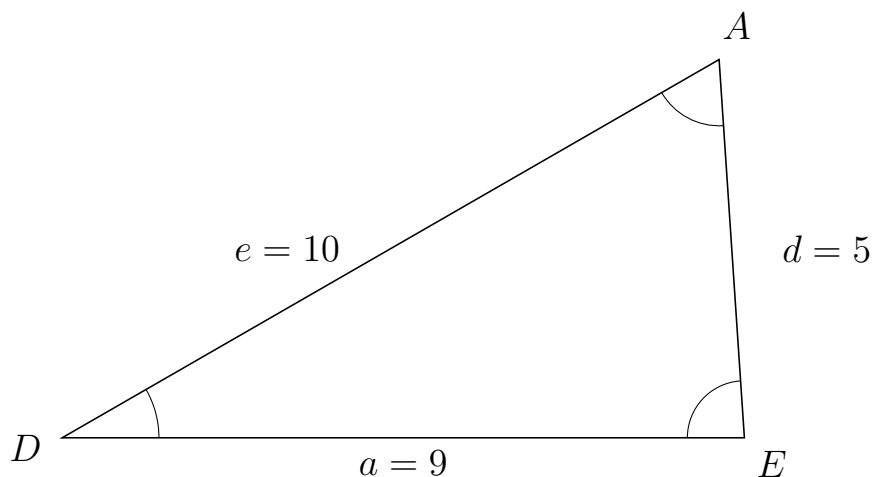
Trigonometri

Sider og vinkler abc

12. marts 2017



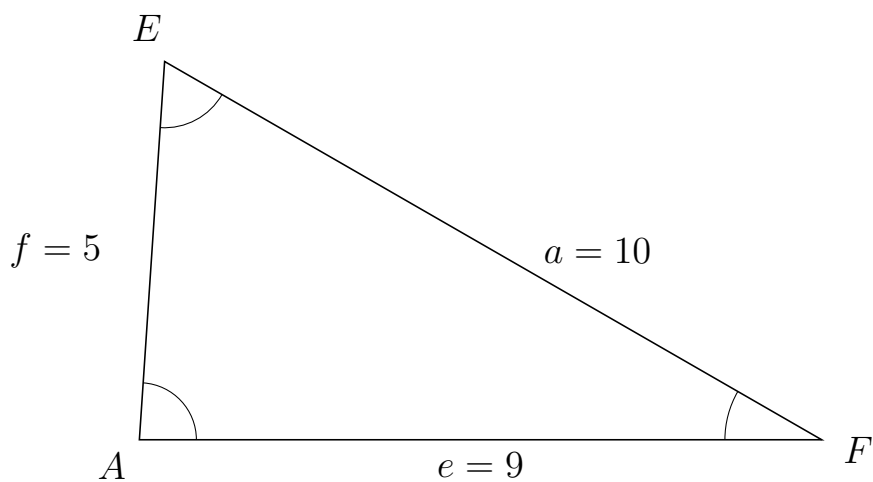
193 I trekant DAE er $d = 5$, $a = 9$ og $e = 10$.



a) Bestem vinkel A .

$A = 63.9$

194 I trekant AEF er $a = 10$, $e = 9$ og $f = 5$.



a) Bestem vinkel E .

$E = 63.9$

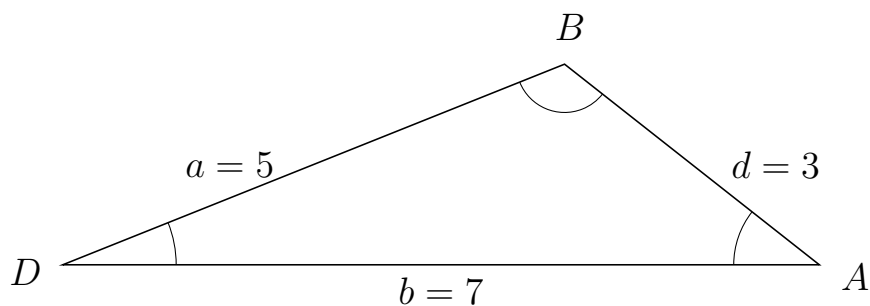


Trigonometri

Sider og vinkler abc

12. marts 2017

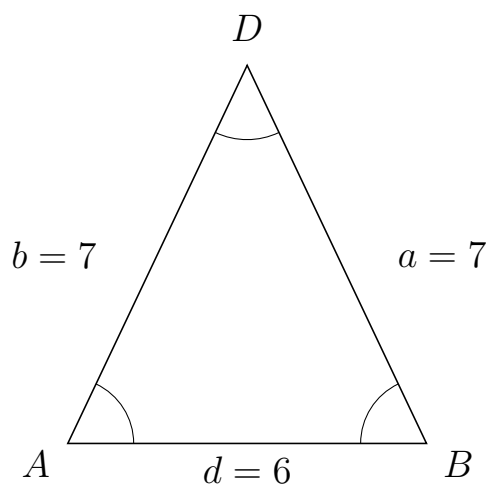
195 I trekant DBA er $d = 3$, $b = 7$ og $a = 5$.



a) Bestem vinkel B .

$B = 120$

196 I trekant ADB er $a = 7$, $d = 6$ og $b = 7$.



a) Bestem vinkel D .

$D = 50.75$

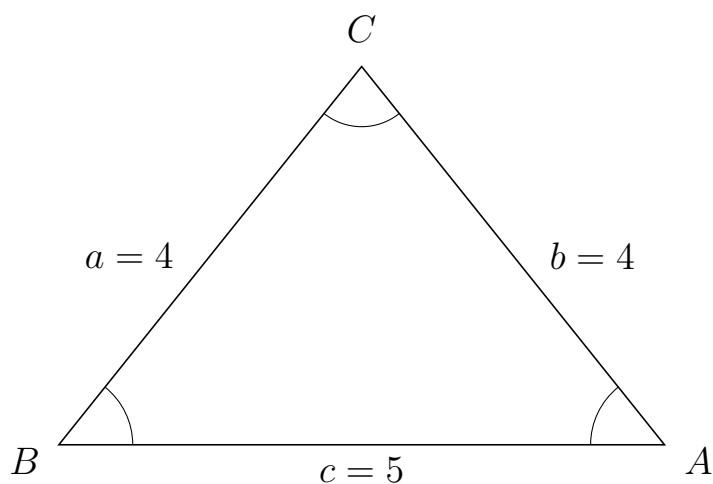


Trigonometri

Sider og vinkler abc

12. marts 2017

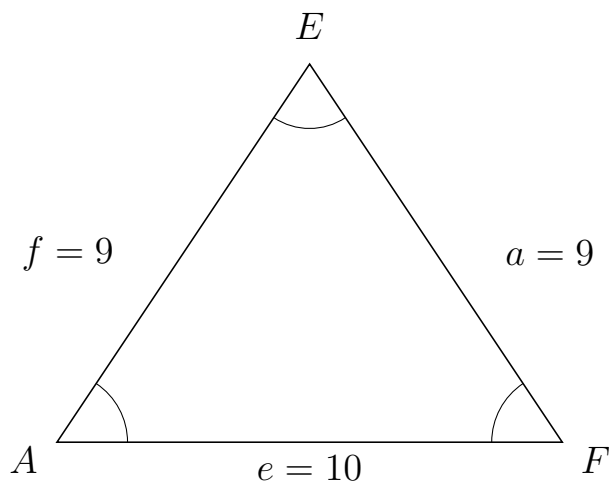
197 I trekant BCA er $b = 4$, $c = 5$ og $a = 4$.



a) Bestem vinkel C .

$C = 77.36$

198 I trekant AEF er $a = 9$, $e = 10$ og $f = 9$.



a) Bestem vinkel E .

$E = 67.5$



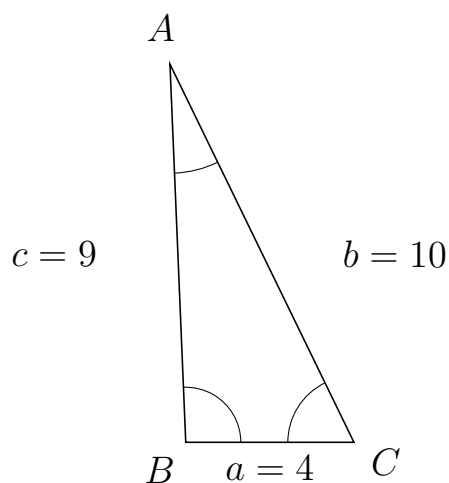
Trigonometri

Sider og vinkler abc

12. marts 2017



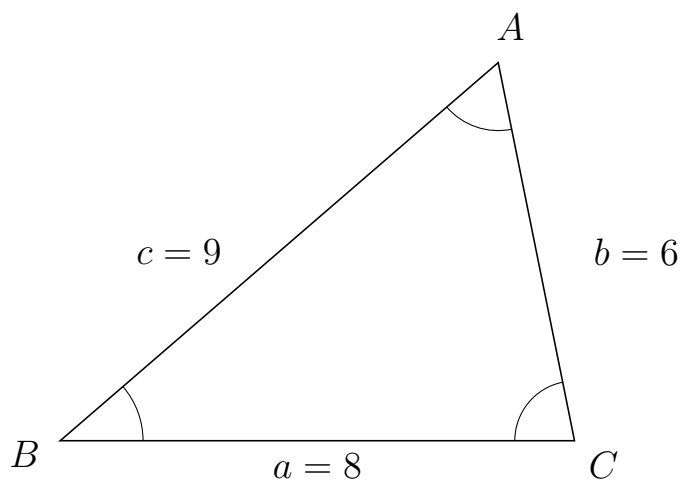
199 I trekant BAC er $b = 10$, $a = 4$ og $c = 9$.



a) Bestem vinkel A .

$A = 23.56$

200 I trekant BAC er $b = 6$, $a = 8$ og $c = 9$.



a) Bestem vinkel A .

$A = 60.61$

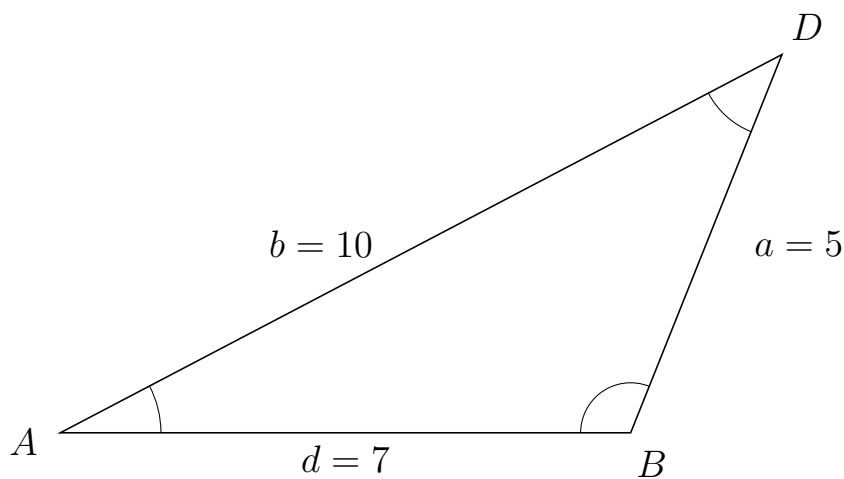


Trigonometri

Sider og vinkler abc

12. marts 2017

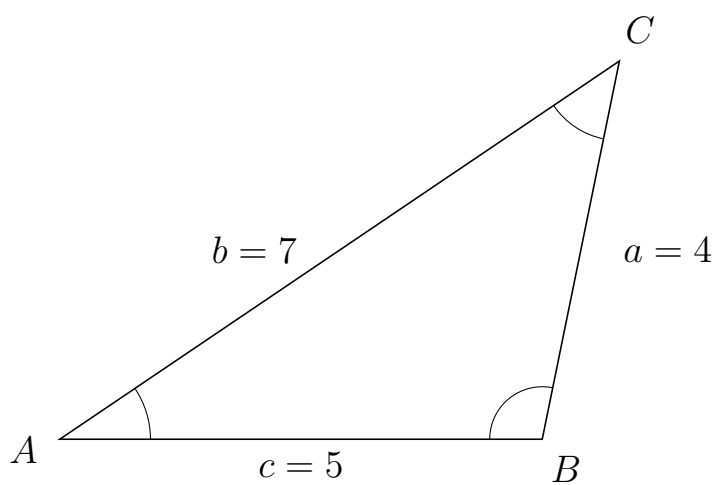
201 I trekant ADB er $a = 5$, $d = 7$ og $b = 10$.



a) Bestem vinkel D .

$D = 40.54$

202 I trekant ACB er $a = 4$, $c = 5$ og $b = 7$.



a) Bestem vinkel C .

$C = 44.42$

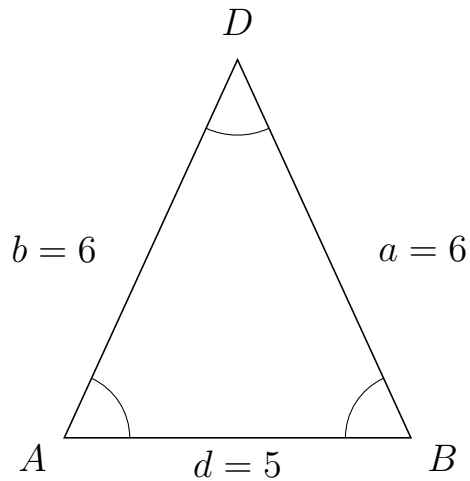


Trigonometri

Sider og vinkler abc

12. marts 2017

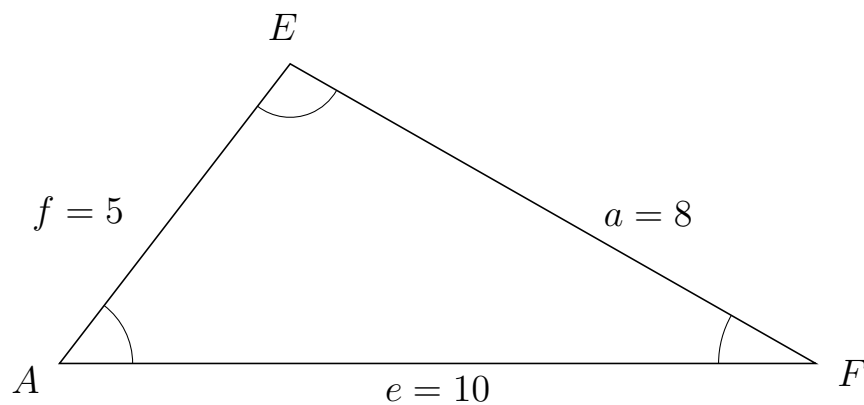
203 I trekant ADB er $a = 6$, $d = 5$ og $b = 6$.



a) Bestem vinkel D .

$D = 49.25$

204 I trekant AEF er $a = 8$, $e = 10$ og $f = 5$.



a) Bestem vinkel E .

$E = 97.9$



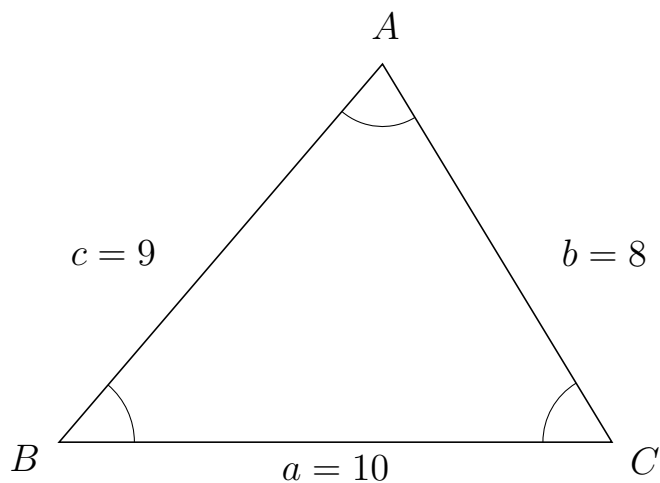
Trigonometri

Sider og vinkler abc

12. marts 2017



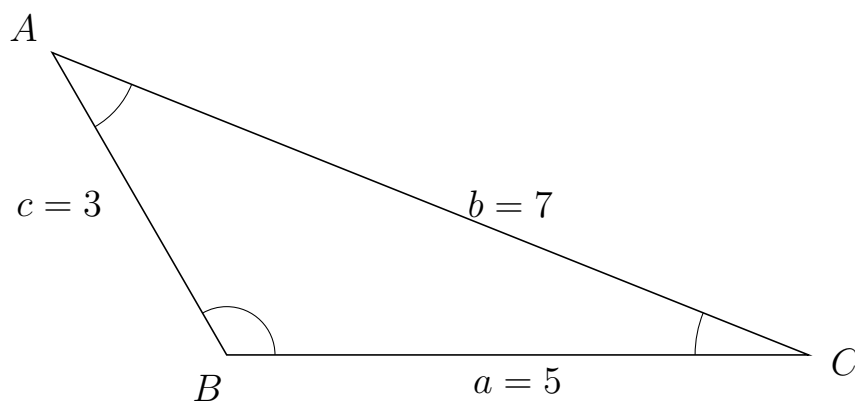
205 I trekant BAC er $b = 8$, $a = 10$ og $c = 9$.



a) Bestem vinkel A .


$A = 71.79$

206 I trekant BAC er $b = 7$, $a = 5$ og $c = 3$.



a) Bestem vinkel A .

$A = 38.21$

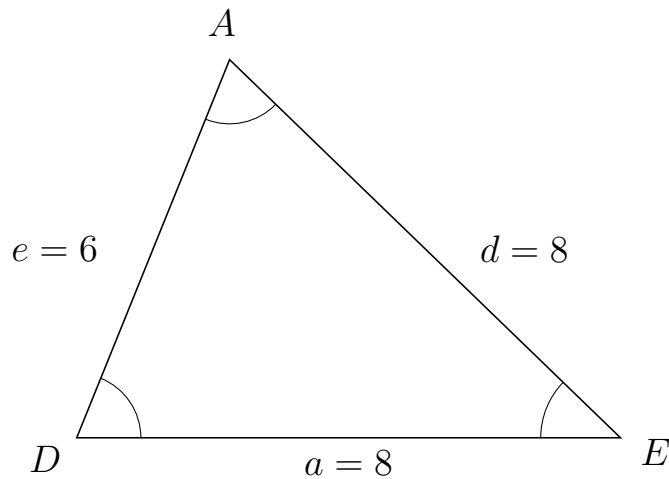


Trigonometri

Sider og vinkler abc

12. marts 2017

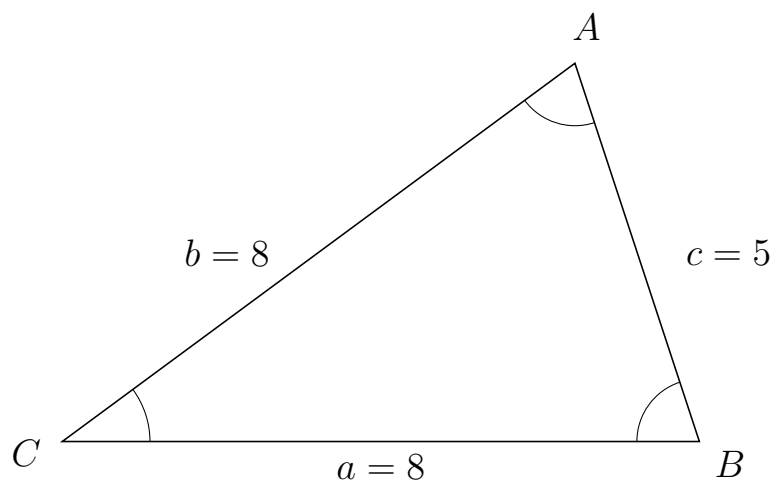
207 I trekant DAE er $d = 8$, $a = 8$ og $e = 6$.



a) Bestem vinkel A .

$A = 67.98$

208 I trekant CAB er $c = 5$, $a = 8$ og $b = 8$.



a) Bestem vinkel A .

$A = 71.79$



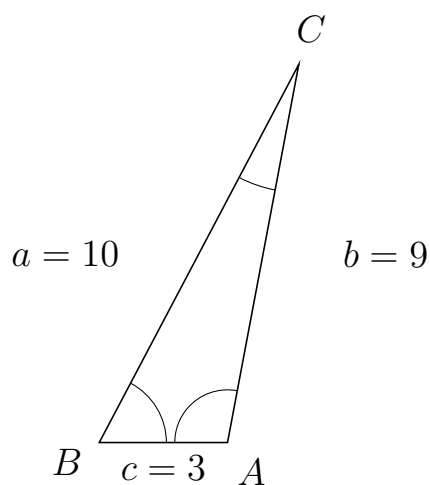
Trigonometri

Sider og vinkler abc

12. marts 2017



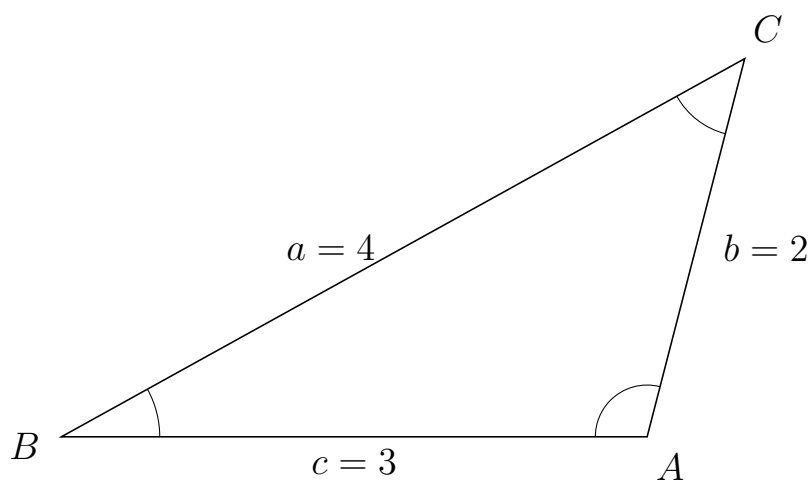
209 I trekant BCA er $b = 9$, $c = 3$ og $a = 10$.



a) Bestem vinkel C .

$C = 17.15$

210 I trekant BCA er $b = 2$, $c = 3$ og $a = 4$.



a) Bestem vinkel C .

$C = 46.57$

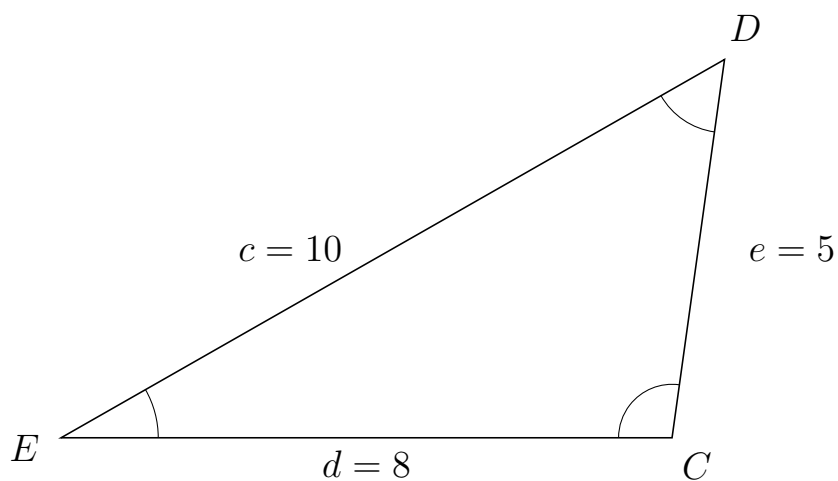


Trigonometri

Sider og vinkler abc

12. marts 2017

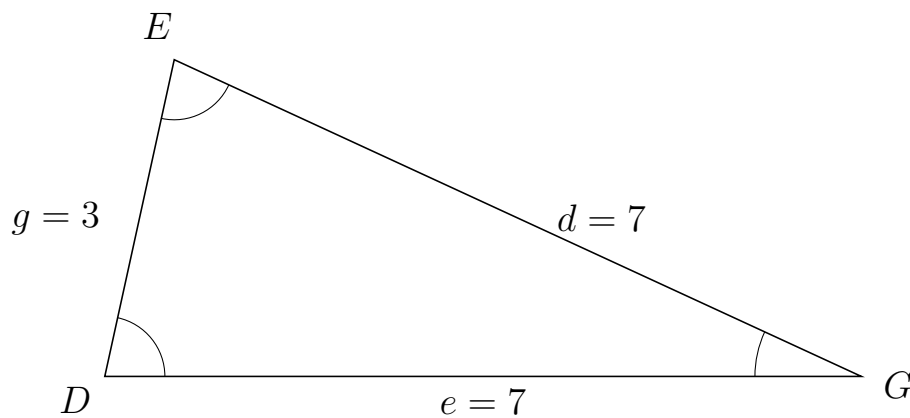
211 I trekant EDC er $e = 5$, $d = 8$ og $c = 10$.



a) Bestem vinkel D .


$D = 52.41$

212 I trekant DEG er $d = 7$, $e = 7$ og $g = 3$.



a) Bestem vinkel E .

$E = 77.63$



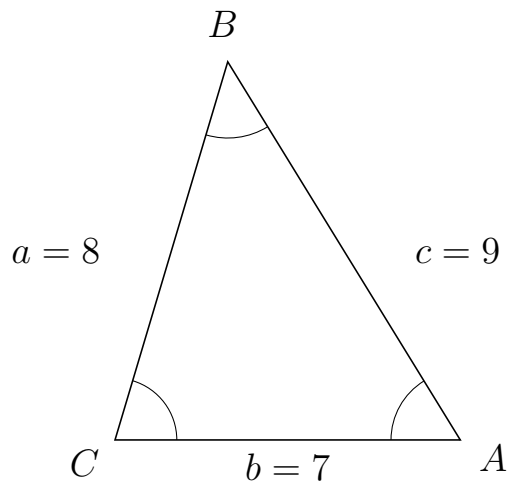
Trigonometri

Sider og vinkler abc

12. marts 2017



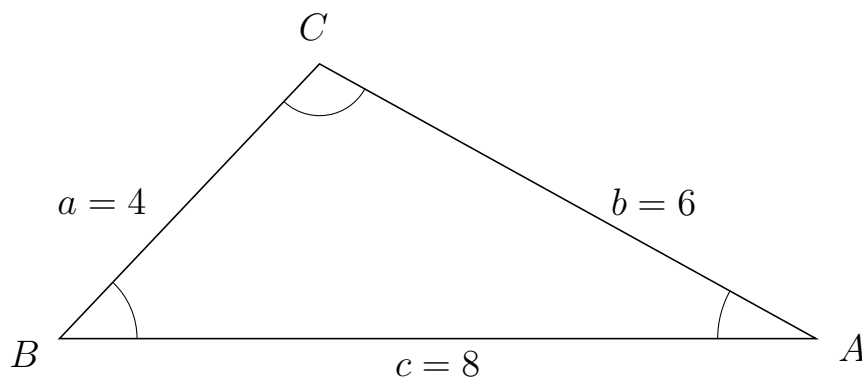
213 I trekant CBA er $c = 9$, $b = 7$ og $a = 8$.



a) Bestem vinkel B .

$B = 48.19$

214 I trekant BCA er $b = 6$, $c = 8$ og $a = 4$.



a) Bestem vinkel C .

$C = 104.48$

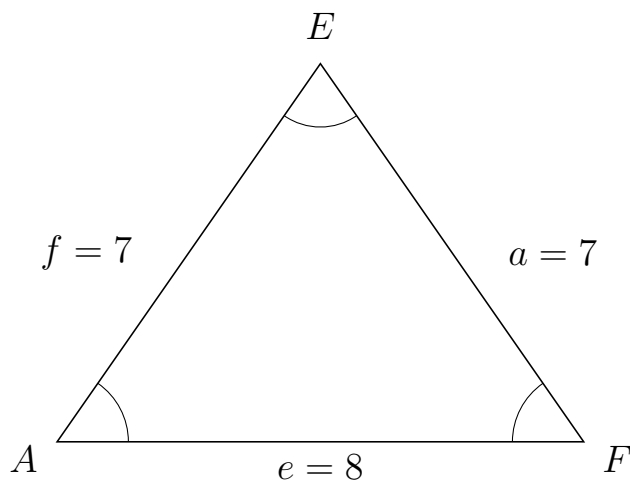


Trigonometri

Sider og vinkler abc

12. marts 2017

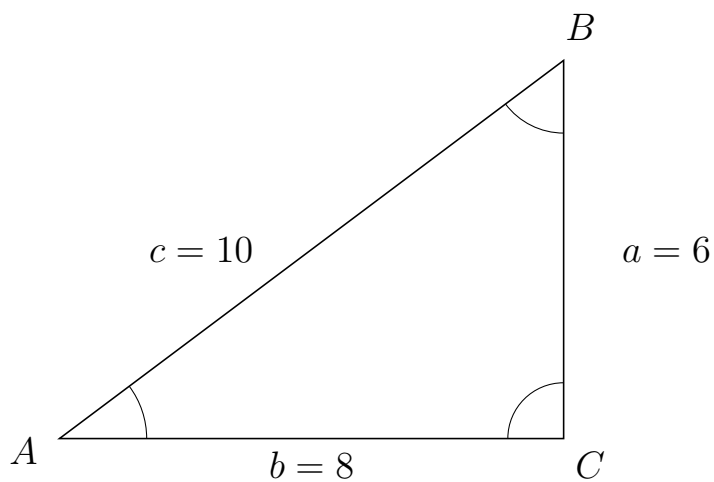
215 I trekant AEF er $a = 7$, $e = 8$ og $f = 7$.



a) Bestem vinkel E .

$E = 69.7$

216 I trekant ABC er $a = 6$, $b = 8$ og $c = 10$.



a) Bestem vinkel B .

$B = 53.13$

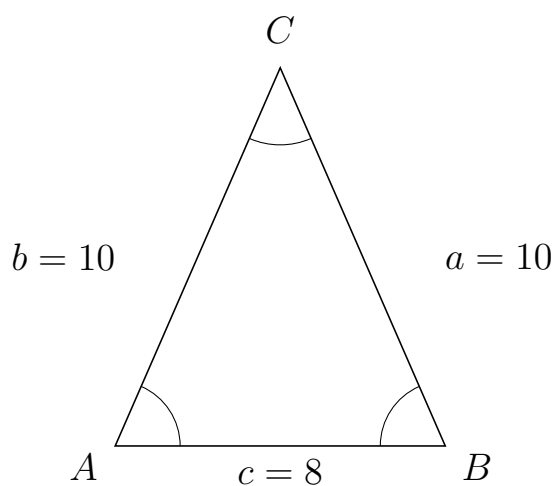


Trigonometri

Sider og vinkler abc

12. marts 2017

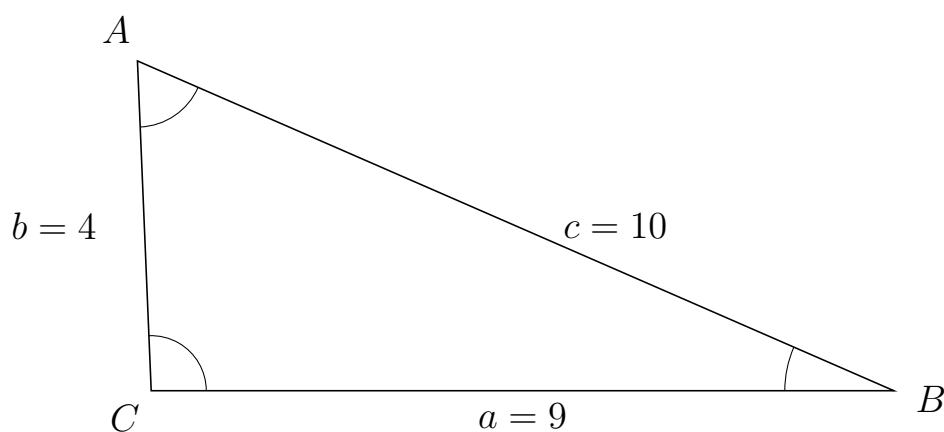
217 I trekant ACB er $a = 10$, $c = 8$ og $b = 10$.



a) Bestem vinkel C .

$C = 47.16$

218 I trekant CAB er $c = 10$, $a = 9$ og $b = 4$.



a) Bestem vinkel A .

$A = 64.06$

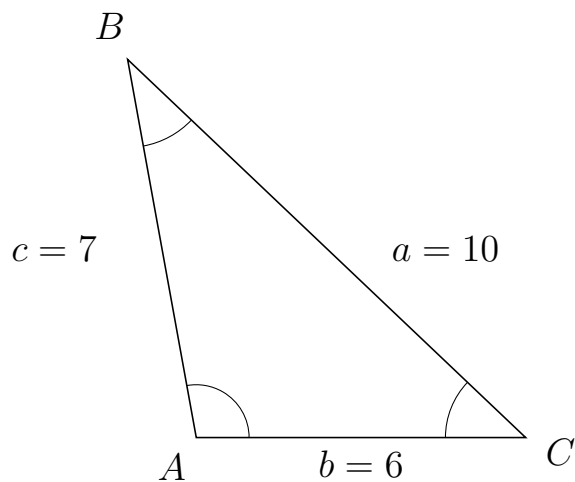


Trigonometri

Sider og vinkler abc

12. marts 2017

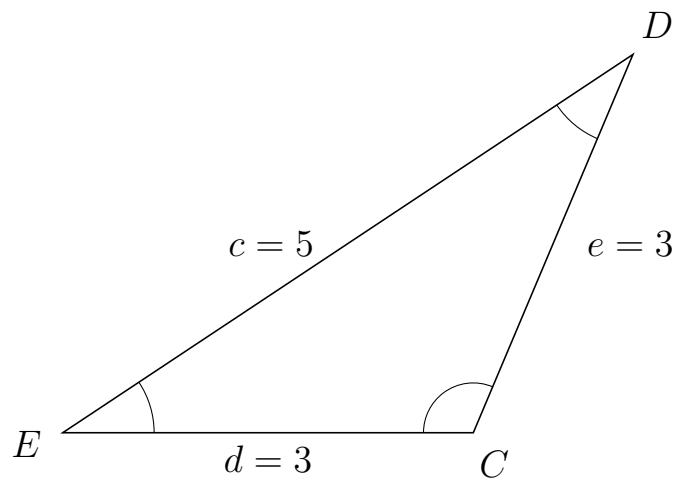
219 I trekant ABC er $a = 10$, $b = 6$ og $c = 7$.



a) Bestem vinkel B .

$B = 36.18$

220 I trekant EDC er $e = 3$, $d = 3$ og $c = 5$.



a) Bestem vinkel D .

$D = 33.56$



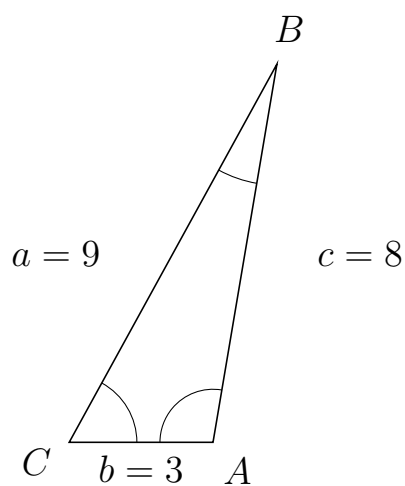
Trigonometri

Sider og vinkler abc

12. marts 2017



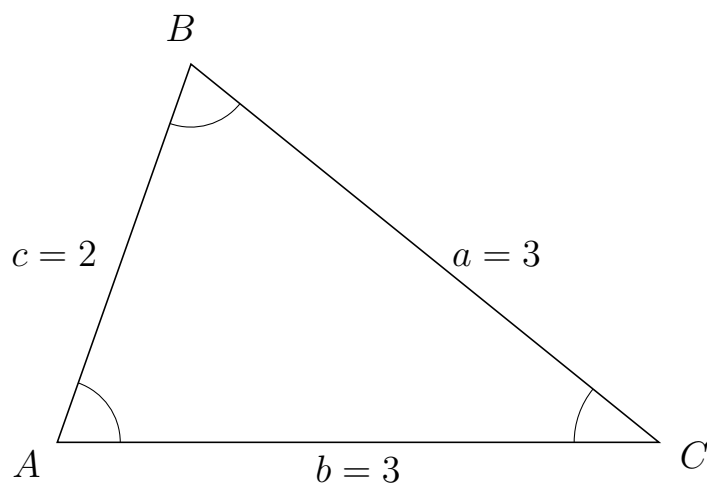
221 I trekant CBA er $c = 8$, $b = 3$ og $a = 9$.



a) Bestem vinkel B .

$B = 19.19$

222 I trekant ABC er $a = 3$, $b = 3$ og $c = 2$.



a) Bestem vinkel B .

$B = 70.53$

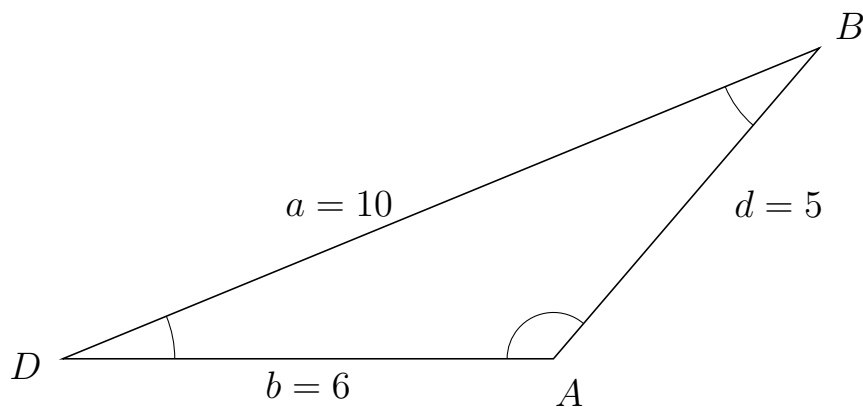


Trigonometri

Sider og vinkler abc

12. marts 2017

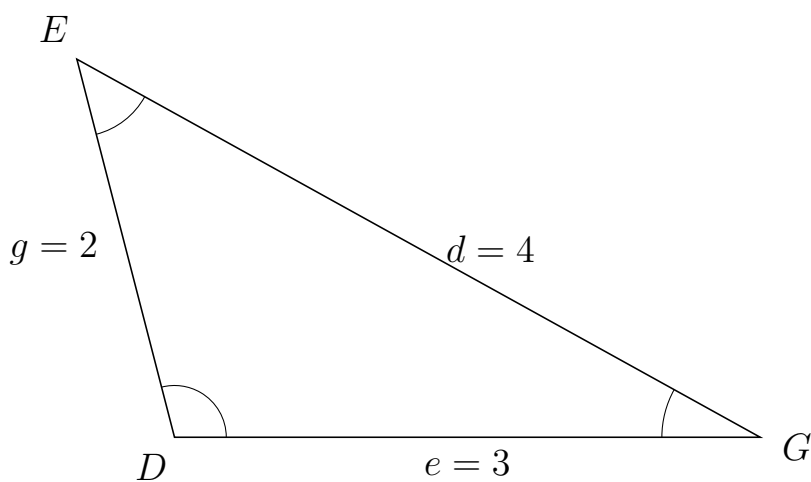
223 I trekant DBA er $d = 5$, $b = 6$ og $a = 10$.



a) Bestem vinkel B .

$B = 27.13$

224 I trekant DEG er $d = 4$, $e = 3$ og $g = 2$.



a) Bestem vinkel E .

$E = 46.57$

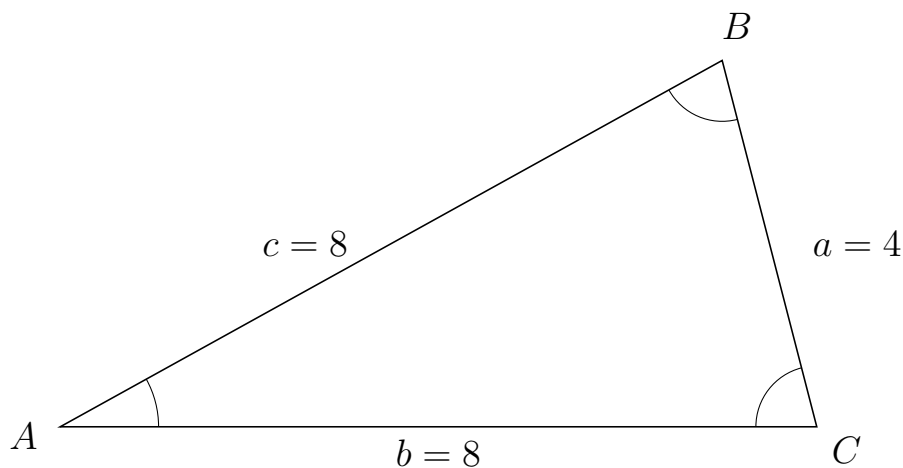


Trigonometri

Sider og vinkler abc

12. marts 2017

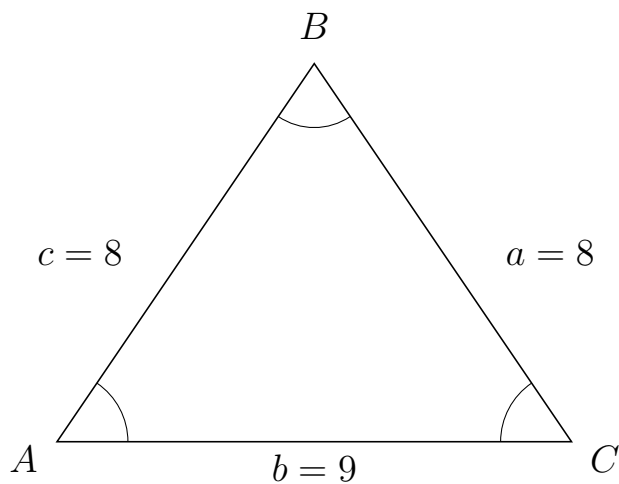
225 I trekant ABC er $a = 4$, $b = 8$ og $c = 8$.



a) Bestem vinkel B .


$B = 75.52$

226 I trekant ABC er $a = 8$, $b = 9$ og $c = 8$.



a) Bestem vinkel B .

$B = 68.46$

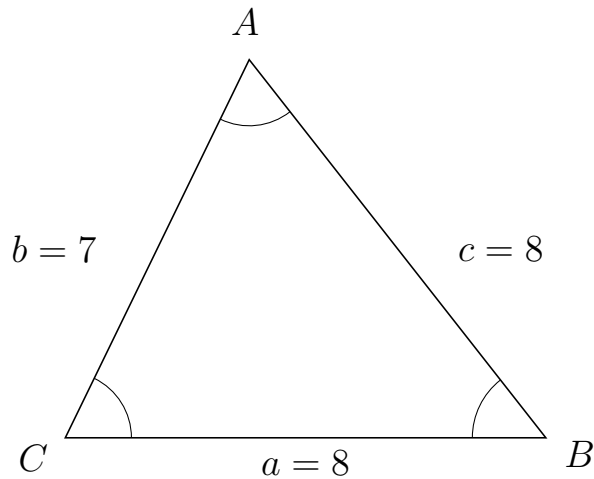


Trigonometri

Sider og vinkler abc

12. marts 2017

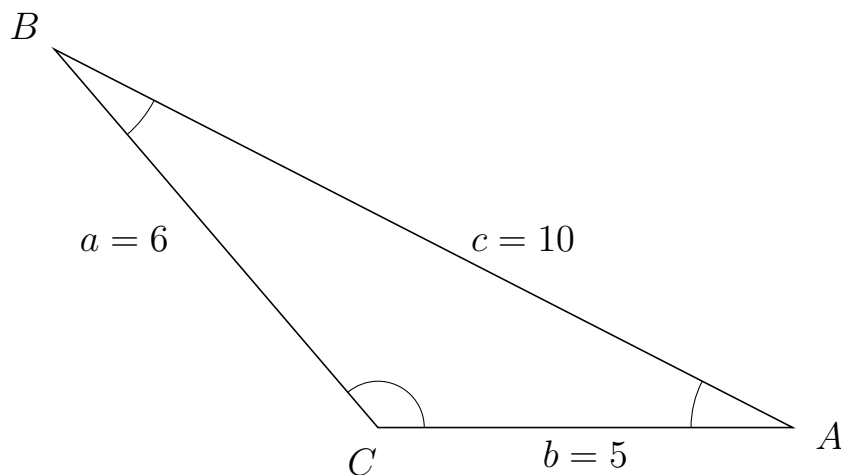
227 I trekant CAB er $c = 8$, $a = 8$ og $b = 7$.



a) Bestem vinkel A .

$A = 64.06$

228 I trekant CBA er $c = 10$, $b = 5$ og $a = 6$.



a) Bestem vinkel B .

$B = 22.33$



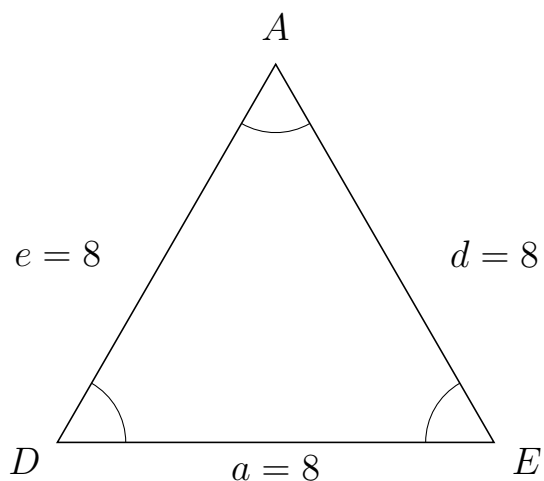
Trigonometri

Sider og vinkler abc

12. marts 2017



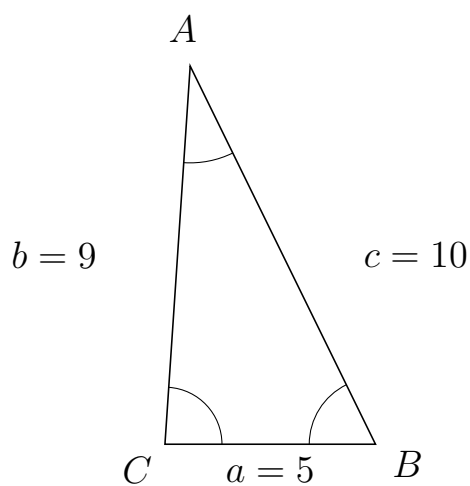
229 I trekant DAE er $d = 8$, $a = 8$ og $e = 8$.



a) Bestem vinkel A .

$A = 60$

230 I trekant CAB er $c = 10$, $a = 5$ og $b = 9$.



a) Bestem vinkel A .

$A = 29.93$

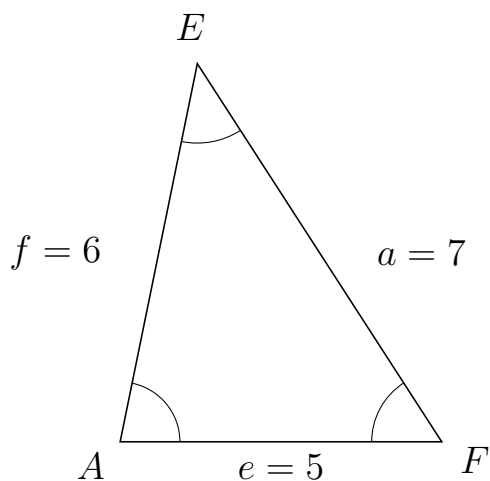


Trigonometri

Sider og vinkler abc

12. marts 2017

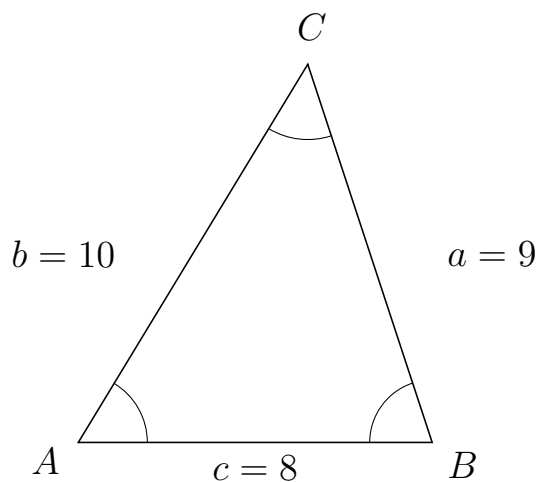
231 I trekant AEF er $a = 7$, $e = 5$ og $f = 6$.



a) Bestem vinkel E .


$E = 44.42$

232 I trekant ACB er $a = 9$, $c = 8$ og $b = 10$.



a) Bestem vinkel C .

$C = 49.46$



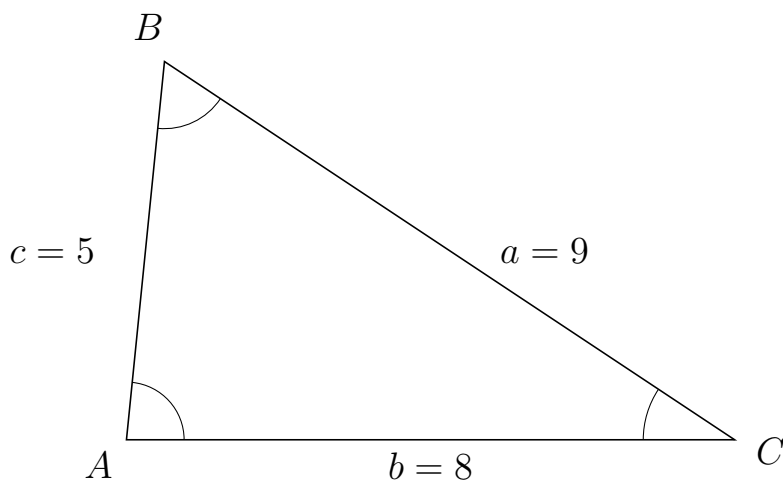
Trigonometri

Sider og vinkler abc

12. marts 2017



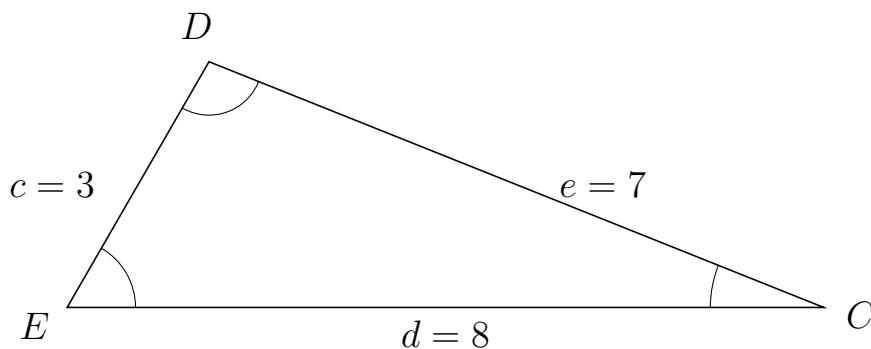
233 I trekant ABC er $a = 9$, $b = 8$ og $c = 5$.



a) Bestem vinkel B .

$B = 62.18$

234 I trekant EDC er $e = 7$, $d = 8$ og $c = 3$.



a) Bestem vinkel D .

$D = 98.21$

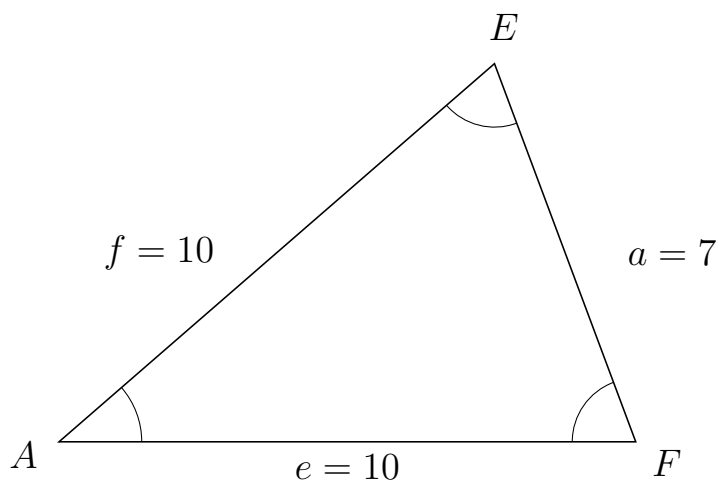


Trigonometri

Sider og vinkler abc

12. marts 2017

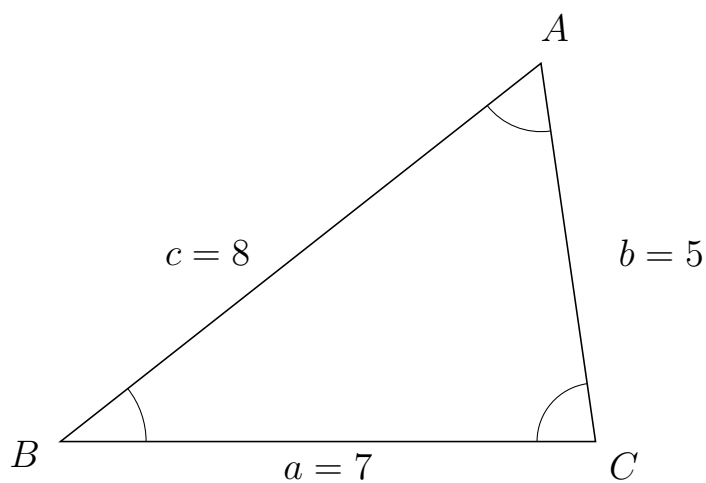
235 I trekant AEF er $a = 7$, $e = 10$ og $f = 10$.



a) Bestem vinkel E .


$E = 69.51$

236 I trekant BAC er $b = 5$, $a = 7$ og $c = 8$.



a) Bestem vinkel A .

$A = 60$

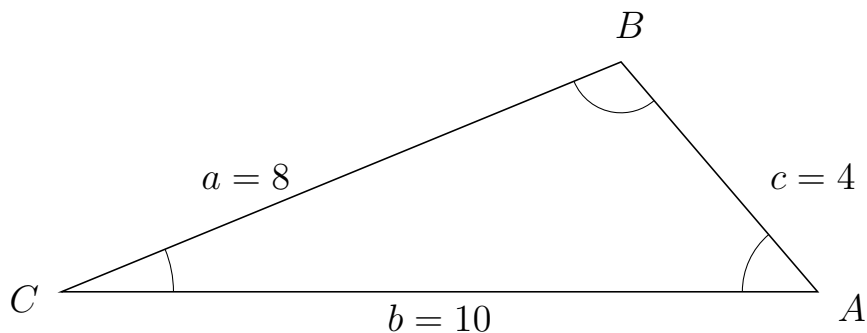


Trigonometri

Sider og vinkler abc

12. marts 2017

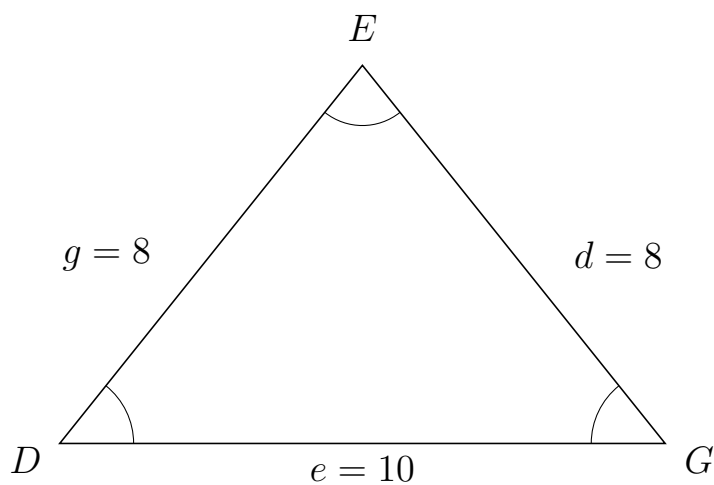
237 I trekant CBA er $c = 4$, $b = 10$ og $a = 8$.



a) Bestem vinkel B .

$B = 108.21$

238 I trekant DEG er $d = 8$, $e = 10$ og $g = 8$.



a) Bestem vinkel E .

$E = 77.36$

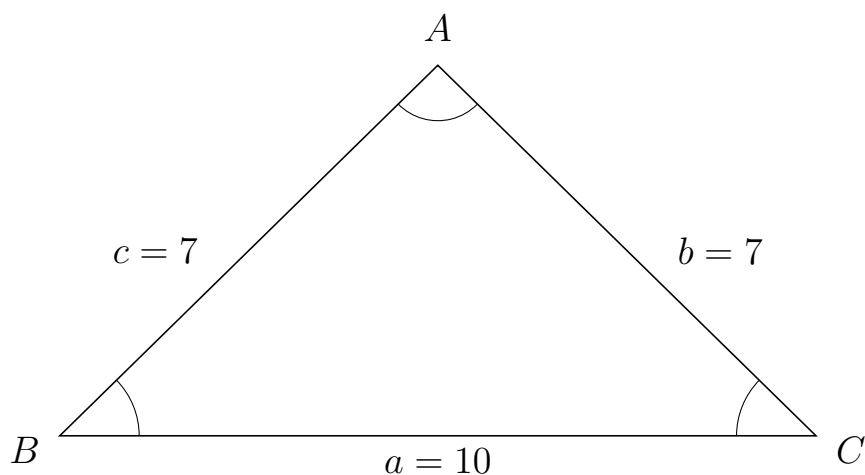


Trigonometri

Sider og vinkler abc

12. marts 2017

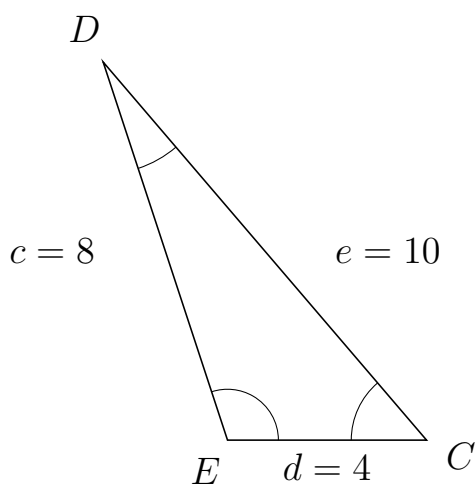
239 I trekant BAC er $b = 7$, $a = 10$ og $c = 7$.



a) Bestem vinkel A .

$A = 91.17$

240 I trekant EDC er $e = 10$, $d = 4$ og $c = 8$.



a) Bestem vinkel D .

$D = 22.33$

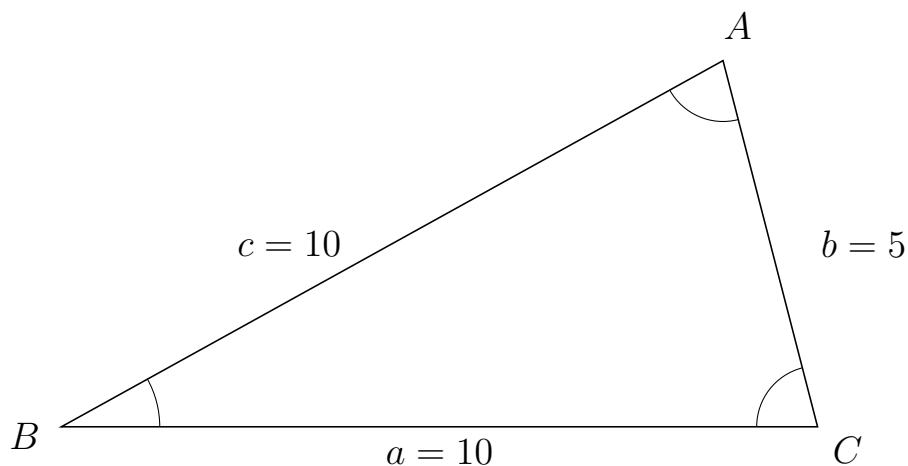


Trigonometri

Sider og vinkler abc

12. marts 2017

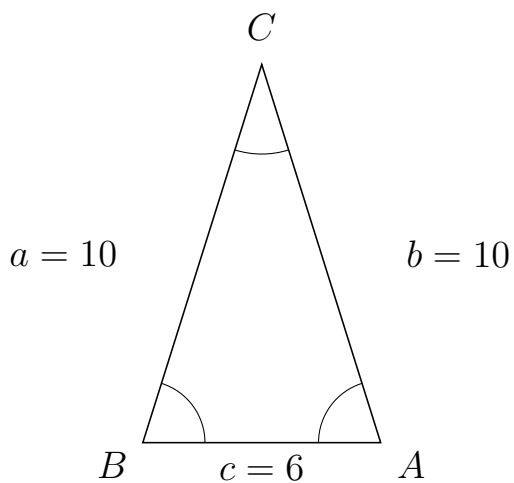
241 I trekant BAC er $b = 5$, $a = 10$ og $c = 10$.



a) Bestem vinkel A .

$A = 75.52$

242 I trekant BCA er $b = 10$, $c = 6$ og $a = 10$.



a) Bestem vinkel C .

$C = 34.92$

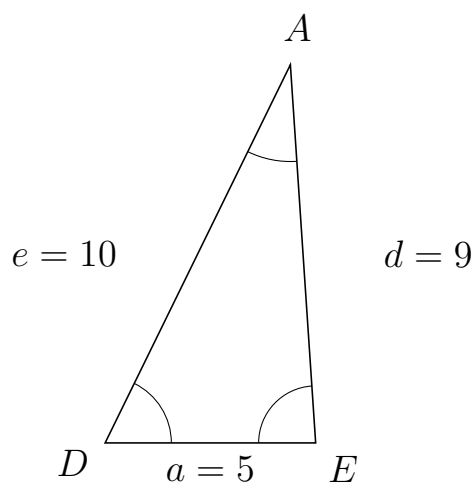


Trigonometri

Sider og vinkler abc

12. marts 2017

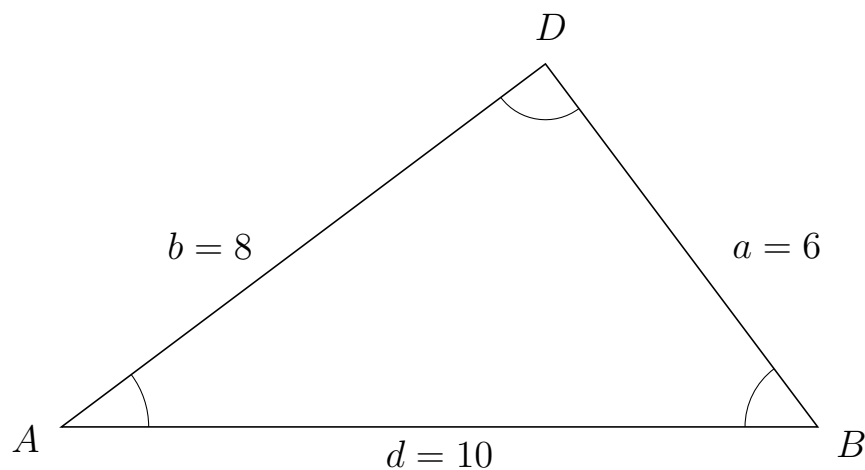
243 I trekant DAE er $d = 9$, $a = 5$ og $e = 10$.



a) Bestem vinkel A .

$A = 29.93$

244 I trekant ADB er $a = 6$, $d = 10$ og $b = 8$.



a) Bestem vinkel D .

$D = 90$

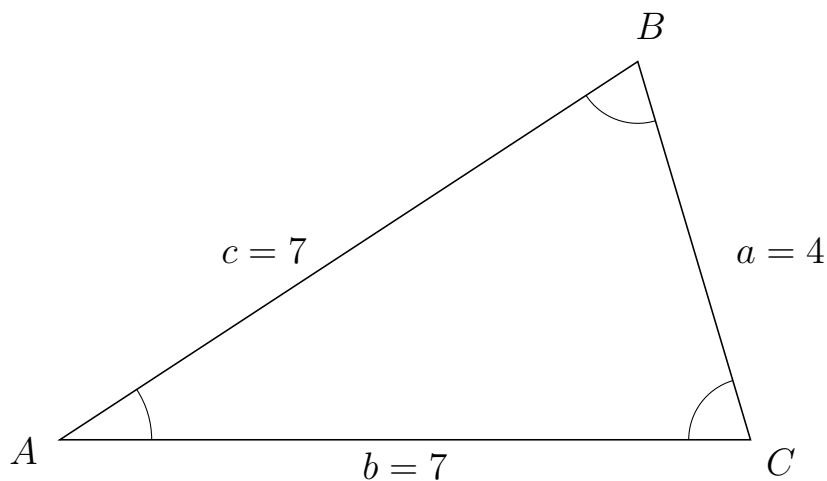


Trigonometri

Sider og vinkler abc

12. marts 2017

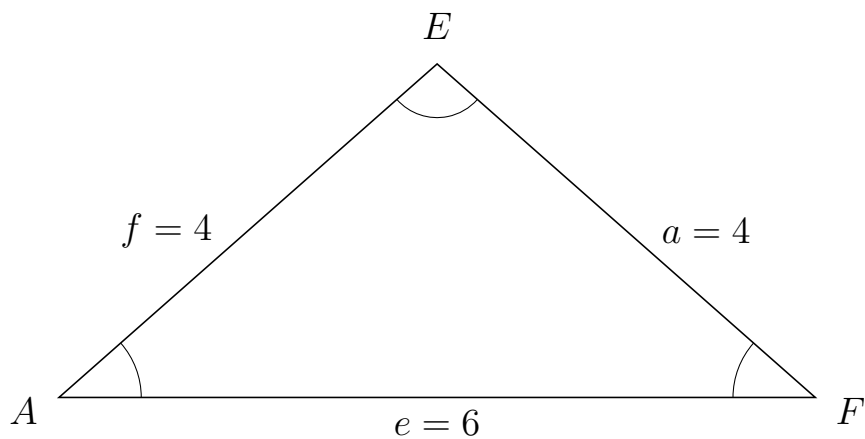
245 I trekant ABC er $a = 4$, $b = 7$ og $c = 7$.



a) Bestem vinkel B .

$B = 73.4$

246 I trekant AEF er $a = 4$, $e = 6$ og $f = 4$.



a) Bestem vinkel E .

$E = 97.18$

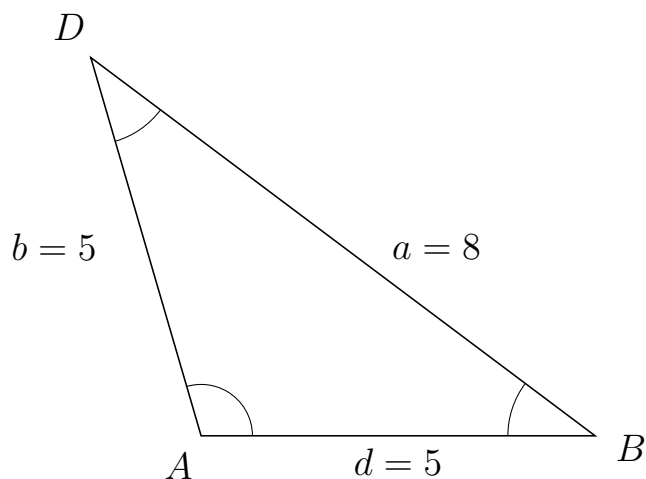


Trigonometri

Sider og vinkler abc

12. marts 2017

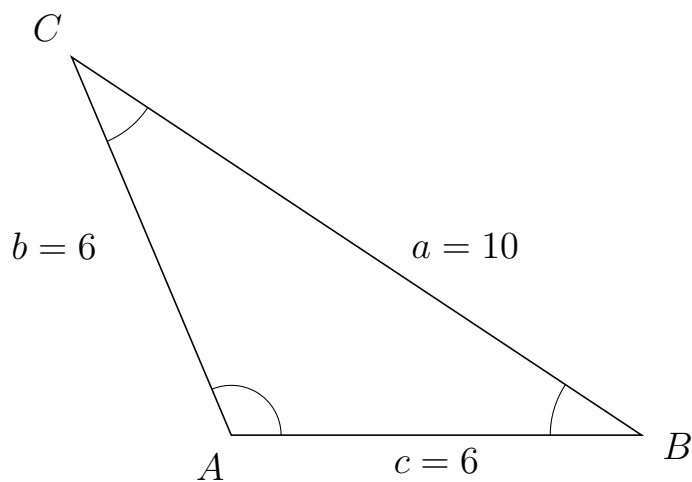
247 I trekant ADB er $a = 8$, $d = 5$ og $b = 5$.



a) Bestem vinkel D .


$D = 36.87$

248 I trekant ACB er $a = 10$, $c = 6$ og $b = 6$.



a) Bestem vinkel C .

$C = 33.56$



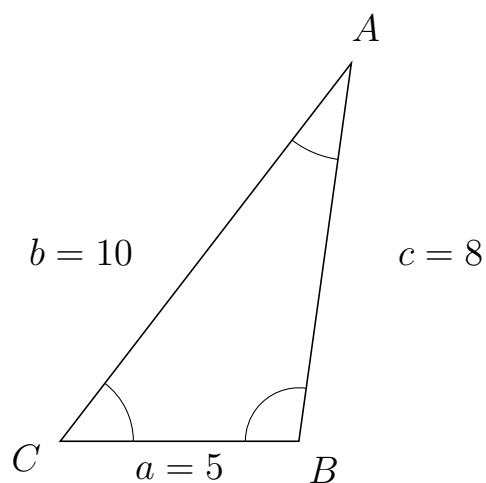
Trigonometri

Sider og vinkler abc

12. marts 2017



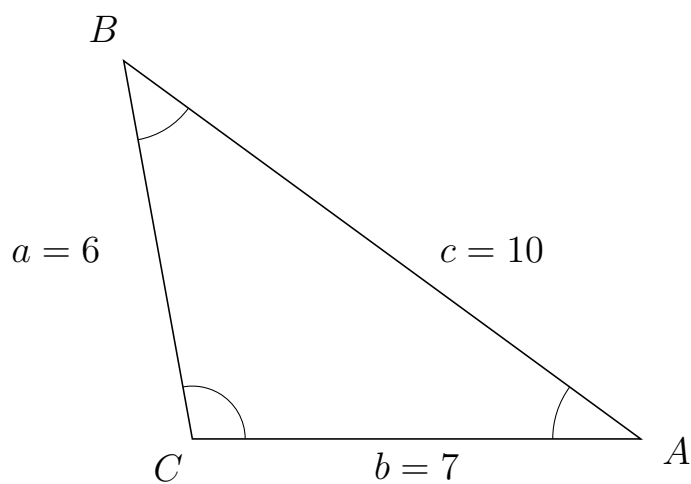
249 I trekant CAB er $c = 8$, $a = 5$ og $b = 10$.



a) Bestem vinkel A .

$A = 29.69$

250 I trekant CBA er $c = 10$, $b = 7$ og $a = 6$.



a) Bestem vinkel B .

$B = 43.53$



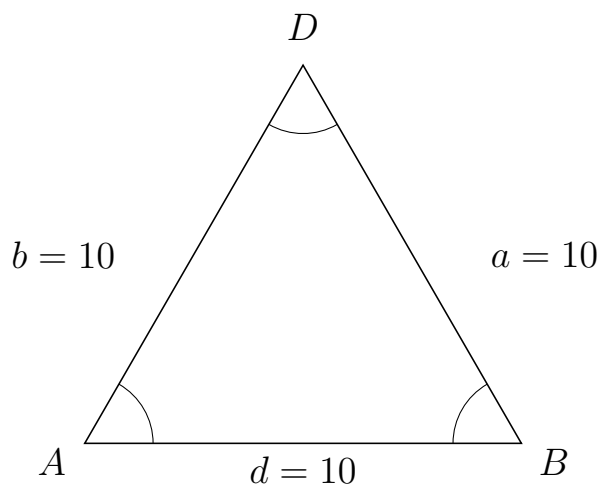
Trigonometri

Sider og vinkler abc

12. marts 2017



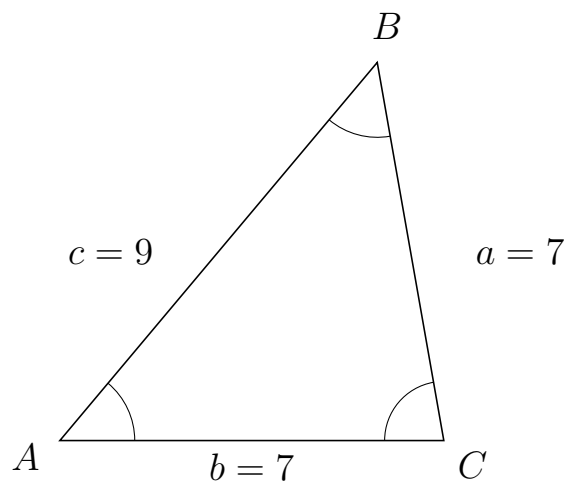
251 I trekant ADB er $a = 10$, $d = 10$ og $b = 10$.



a) Bestem vinkel D .

$D = 60$

252 I trekant ABC er $a = 7$, $b = 7$ og $c = 9$.



a) Bestem vinkel B .

$B = 49.99$



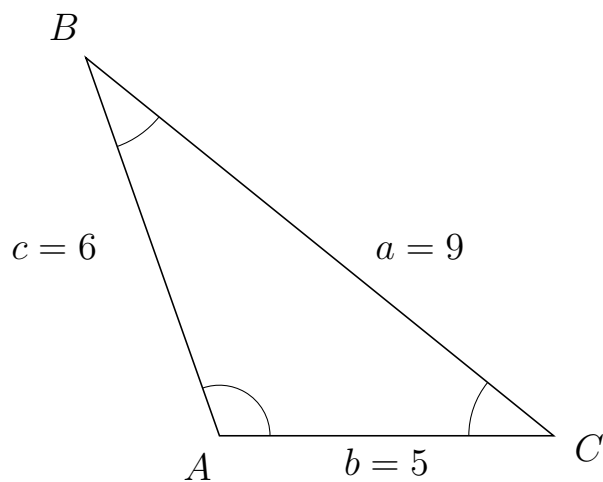
Trigonometri

Sider og vinkler abc

12. marts 2017



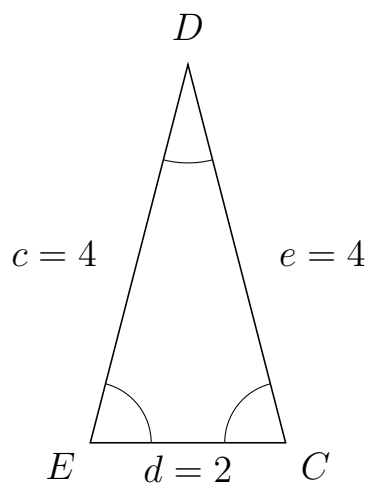
253 I trekant ABC er $a = 9$, $b = 5$ og $c = 6$.



a) Bestem vinkel B .

$B = 31.59$

254 I trekant EDC er $e = 4$, $d = 2$ og $c = 4$.



a) Bestem vinkel D .

$D = 28.96$

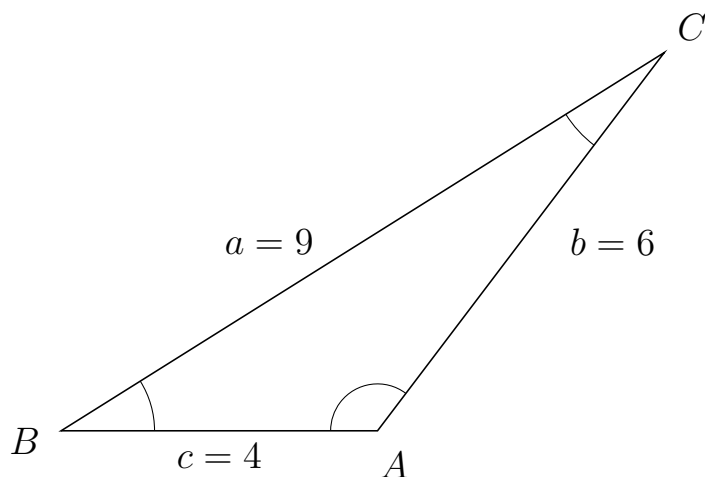


Trigonometri

Sider og vinkler abc

12. marts 2017

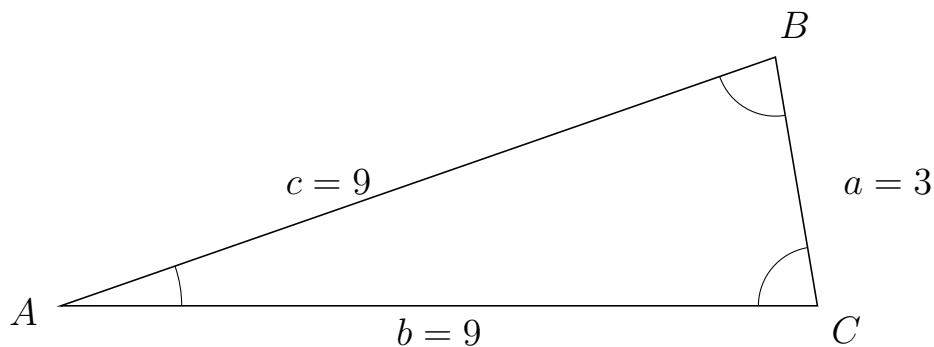
255 I trekant BCA er $b = 6$, $c = 4$ og $a = 9$.



a) Bestem vinkel C .

$C = 20.74$

256 I trekant ABC er $a = 3$, $b = 9$ og $c = 9$.



a) Bestem vinkel B .

$B = 80.41$



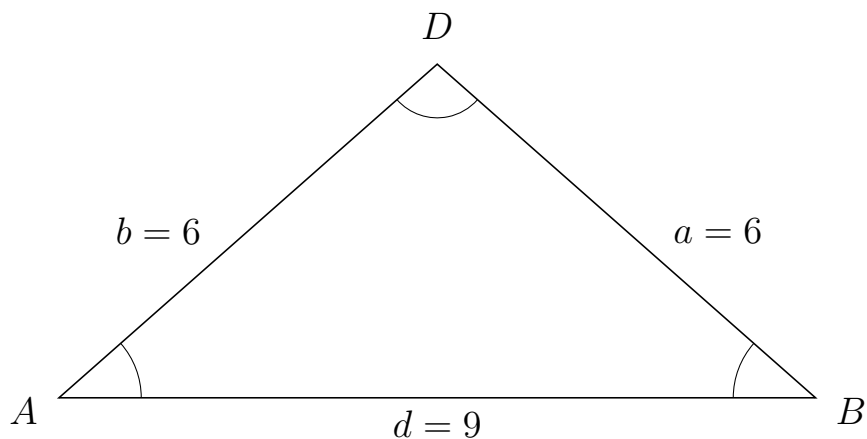
Trigonometri

Sider og vinkler abc

12. marts 2017



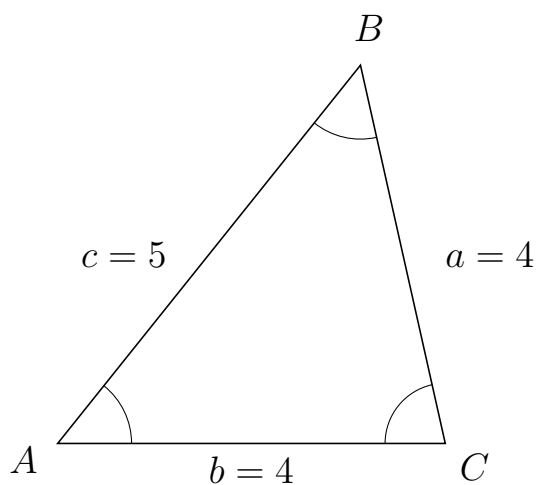
257 I trekant ADB er $a = 6$, $d = 9$ og $b = 6$.



a) Bestem vinkel D .

$D = 97.18$

258 I trekant ABC er $a = 4$, $b = 4$ og $c = 5$.



a) Bestem vinkel B .

$B = 51.32$



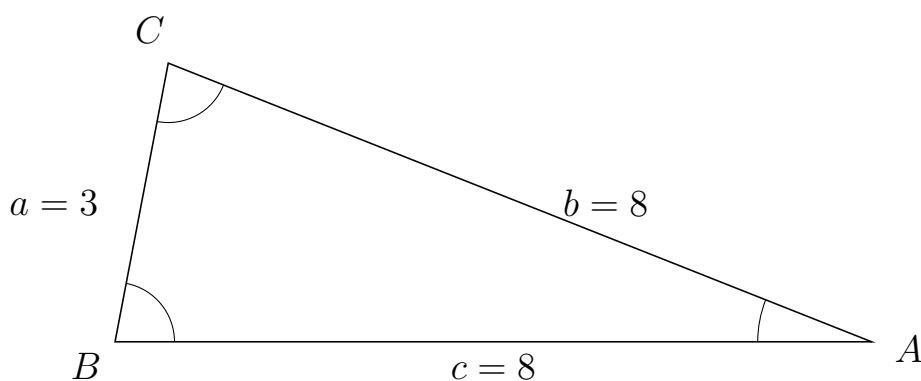
Trigonometri

Sider og vinkler abc

12. marts 2017



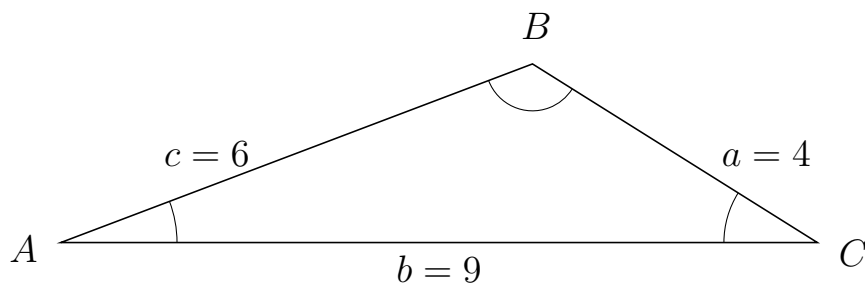
259 I trekant BCA er $b = 8$, $c = 8$ og $a = 3$.



a) Bestem vinkel C .

$C = 79.19$

260 I trekant ABC er $a = 4$, $b = 9$ og $c = 6$.



a) Bestem vinkel B .

$B = 127.17$

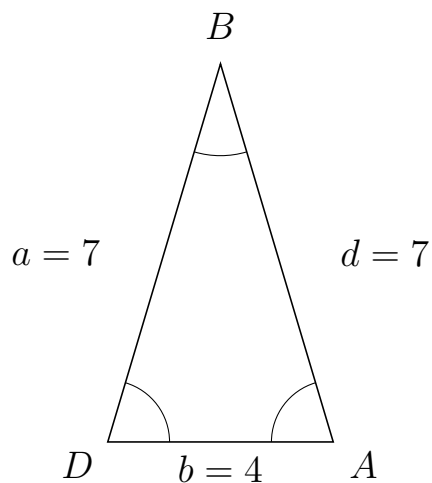


Trigonometri

Sider og vinkler abc

12. marts 2017

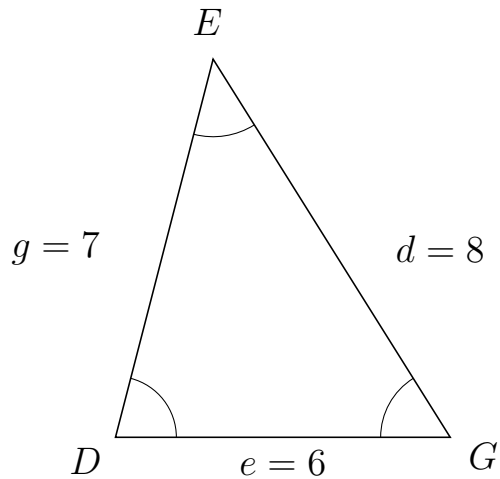
261 I trekant DBA er $d = 7$, $b = 4$ og $a = 7$.



a) Bestem vinkel B .

$B = 33.2$

262 I trekant DEG er $d = 8$, $e = 6$ og $g = 7$.



a) Bestem vinkel E .

$E = 46.57$



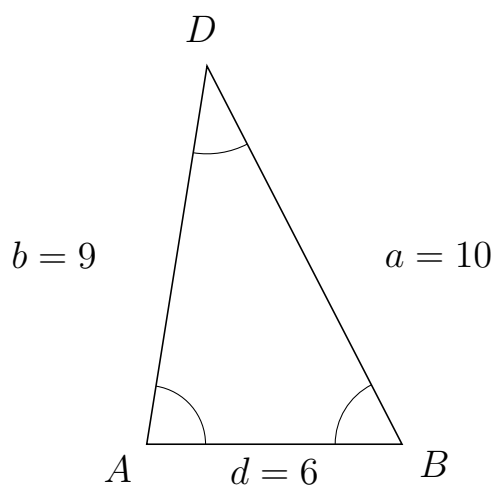
Trigonometri

Sider og vinkler abc

12. marts 2017



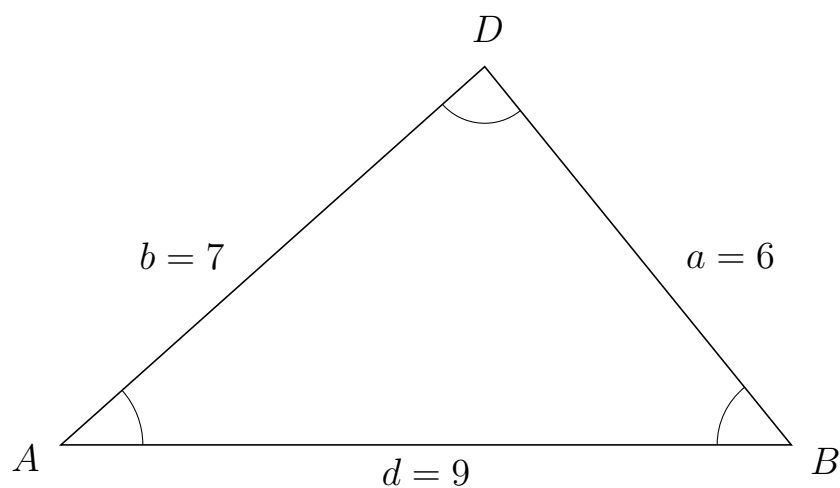
263 I trekant ADB er $a = 10$, $d = 6$ og $b = 9$.



a) Bestem vinkel D .


$D = 36.34$

264 I trekant ADB er $a = 6$, $d = 9$ og $b = 7$.



a) Bestem vinkel D .

$D = 87.27$

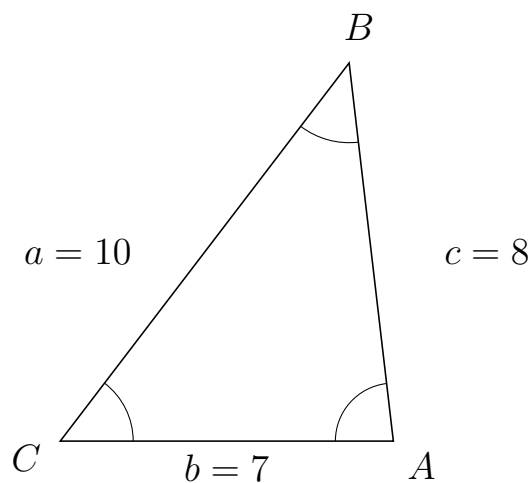


Trigonometri

Sider og vinkler abc

12. marts 2017

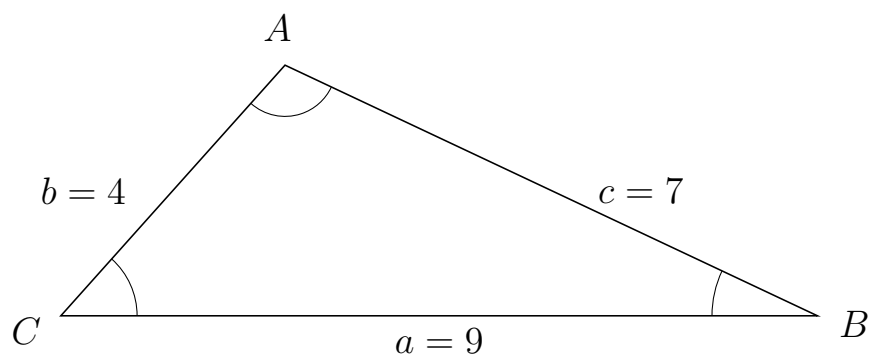
265 I trekant CBA er $c = 8$, $b = 7$ og $a = 10$.



a) Bestem vinkel B .

$B = 44.05$

266 I trekant CAB er $c = 7$, $a = 9$ og $b = 4$.



a) Bestem vinkel A .

$A = 106.6$



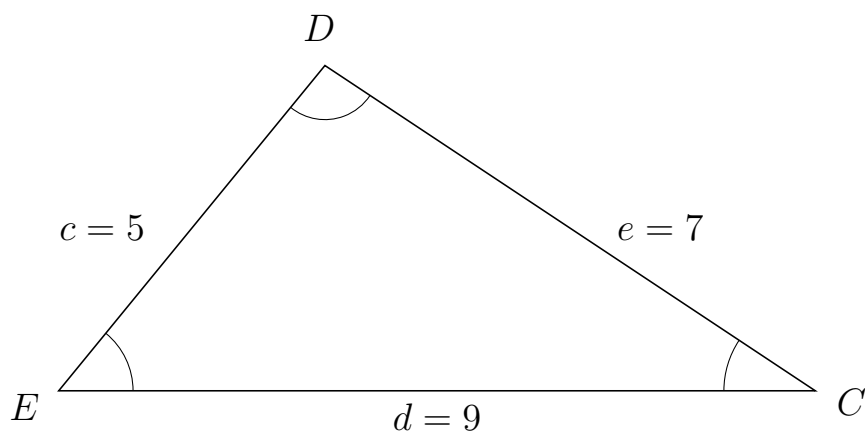
Trigonometri

Sider og vinkler abc

12. marts 2017



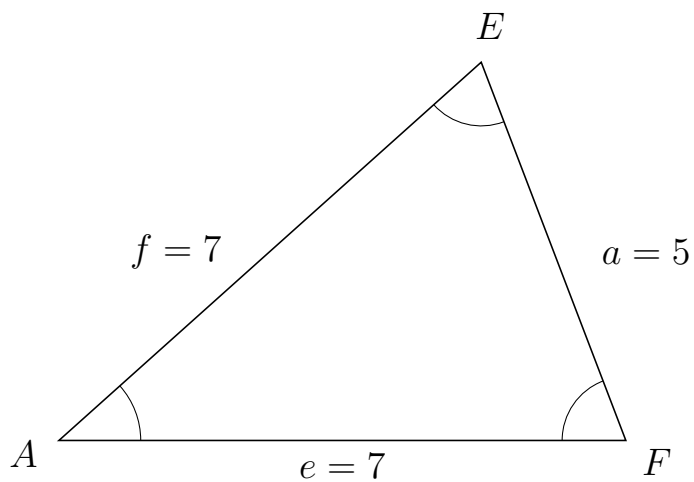
267 I trekant EDC er $e = 7$, $d = 9$ og $c = 5$.



a) Bestem vinkel D .

$D = 95.74$

268 I trekant AEF er $a = 5$, $e = 7$ og $f = 7$.



a) Bestem vinkel E .

$E = 69.08$

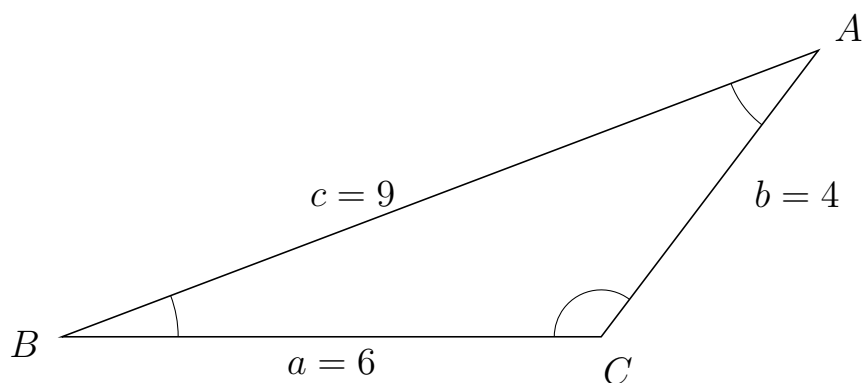


Trigonometri

Sider og vinkler abc

12. marts 2017

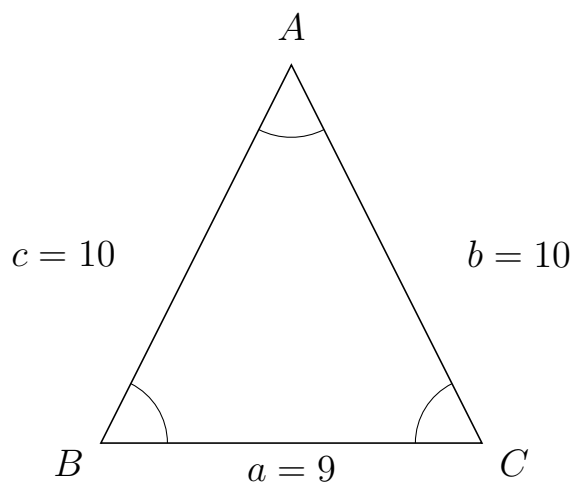
269 I trekant BAC er $b = 4$, $a = 6$ og $c = 9$.



a) Bestem vinkel A .

$A = 32.09$

270 I trekant BAC er $b = 10$, $a = 9$ og $c = 10$.



a) Bestem vinkel A .

$A = 53.49$

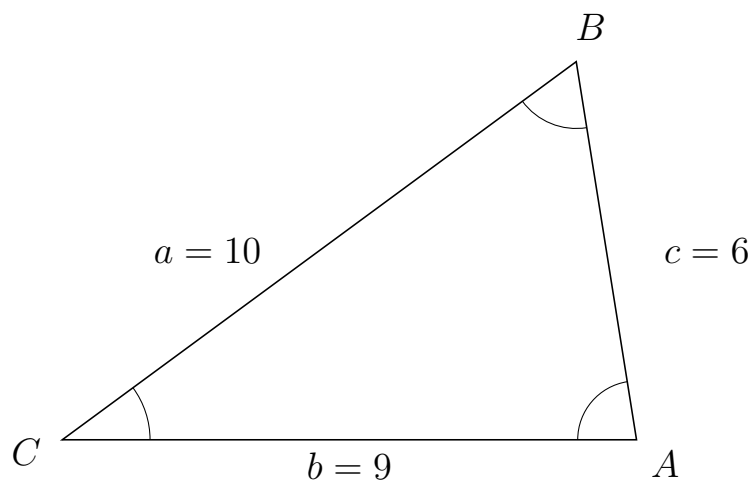


Trigonometri

Sider og vinkler abc

12. marts 2017

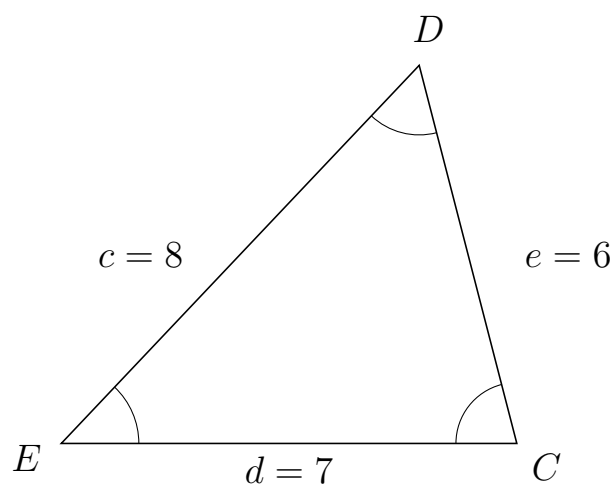
271 I trekant CBA er $c = 6$, $b = 9$ og $a = 10$.



a) Bestem vinkel B .

$B = 62.72$

272 I trekant EDC er $e = 6$, $d = 7$ og $c = 8$.



a) Bestem vinkel D .

$D = 57.91$

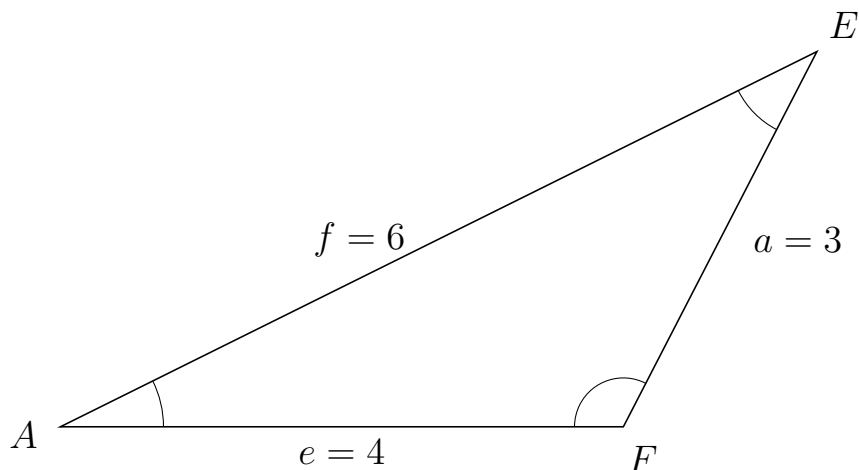


Trigonometri

Sider og vinkler abc

12. marts 2017

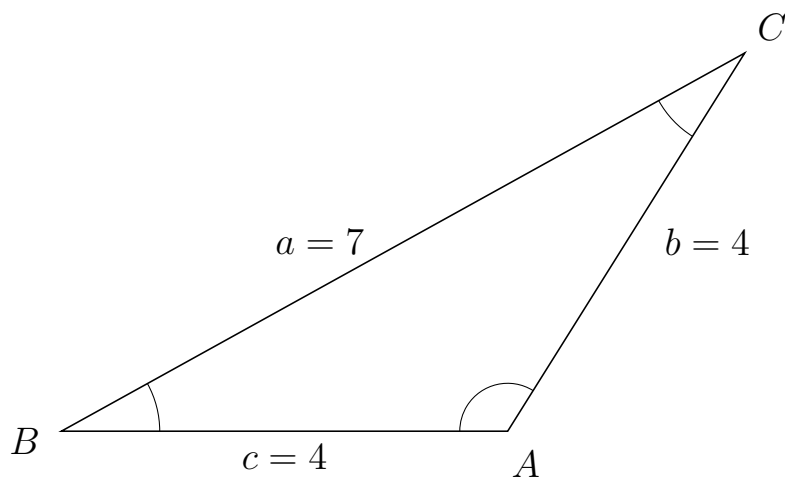
273 I trekant AEF er $a = 3$, $e = 4$ og $f = 6$.



a) Bestem vinkel E .

$E = 36.34$

274 I trekant BCA er $b = 4$, $c = 4$ og $a = 7$.



a) Bestem vinkel C .

$C = 28.96$



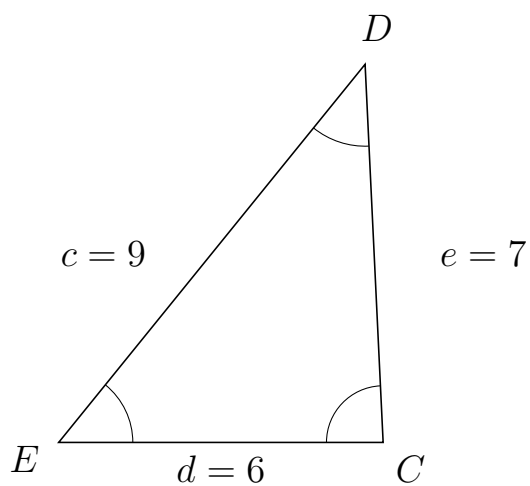
Trigonometri

Sider og vinkler abc

12. marts 2017



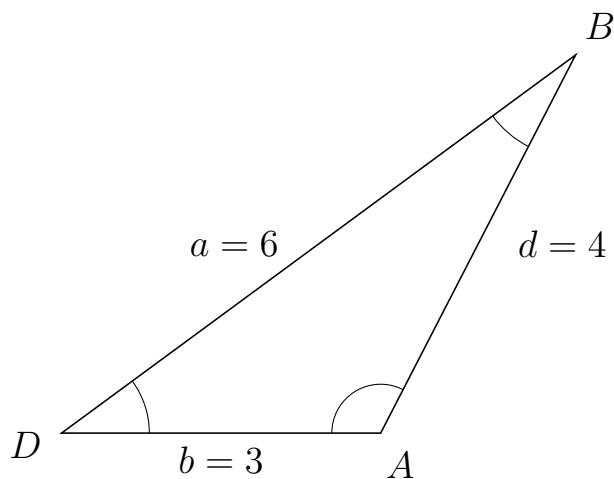
275 I trekant EDC er $e = 7$, $d = 6$ og $c = 9$.



a) Bestem vinkel D .

$D = 41.75$

276 I trekant DBA er $d = 4$, $b = 3$ og $a = 6$.



a) Bestem vinkel B .

$B = 26.38$

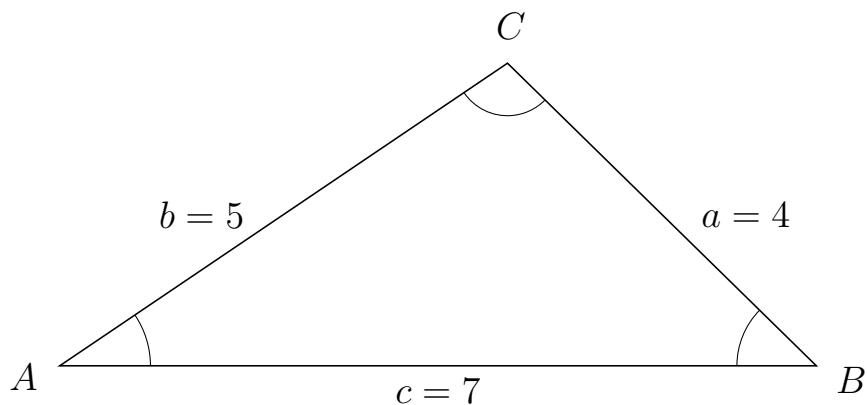


Trigonometri

Sider og vinkler abc

12. marts 2017

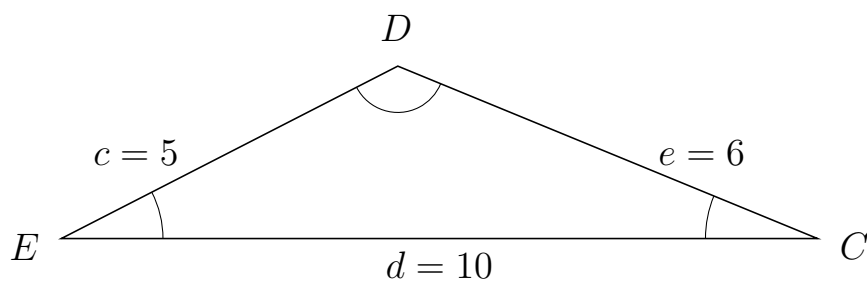
277 I trekant ACB er $a = 4$, $c = 7$ og $b = 5$.



a) Bestem vinkel C .

$C = 101.54$

278 I trekant EDC er $e = 6$, $d = 10$ og $c = 5$.



a) Bestem vinkel D .

$D = 130.54$

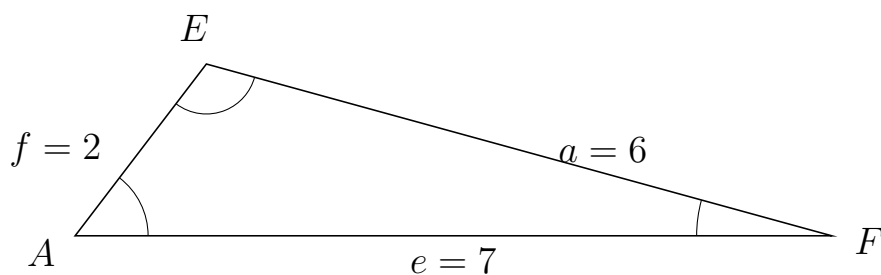


Trigonometri

Sider og vinkler abc

12. marts 2017

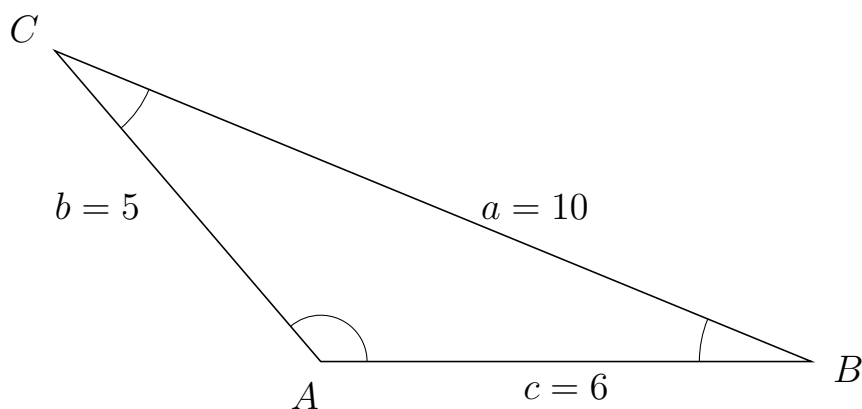
279 I trekant AEF er $a = 6$, $e = 7$ og $f = 2$.



a) Bestem vinkel E .

$E = 112.02$

280 I trekant ACB er $a = 10$, $c = 6$ og $b = 5$.



a) Bestem vinkel C .

$C = 27.13$



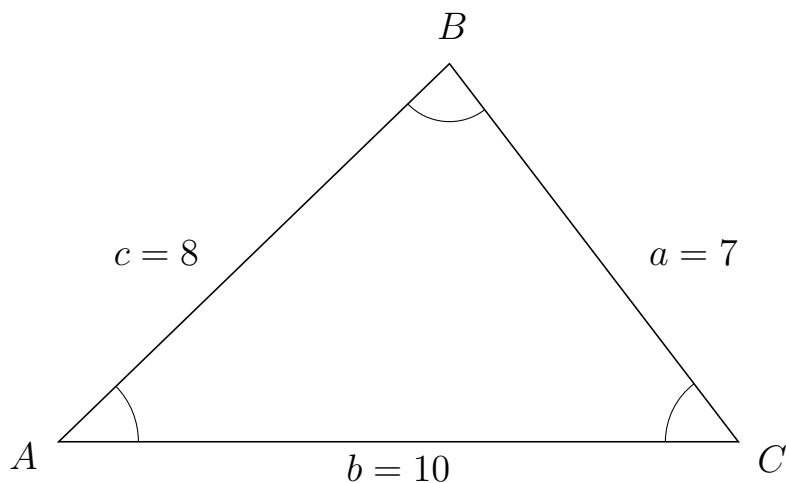
Trigonometri

Sider og vinkler abc

12. marts 2017



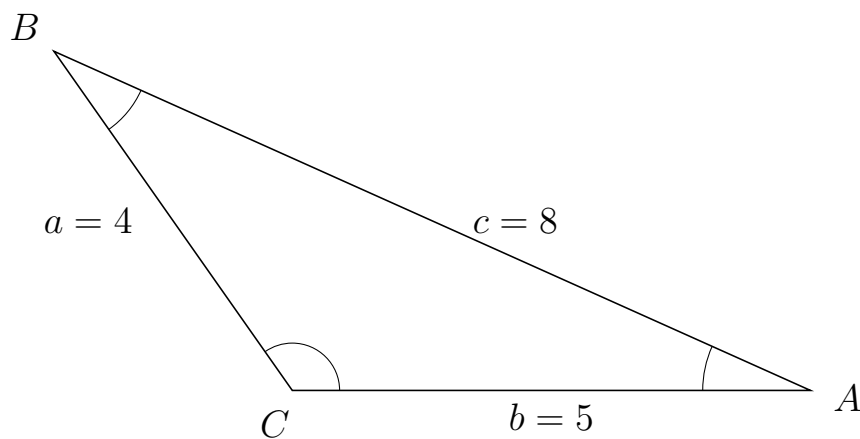
281 I trekant ABC er $a = 7$, $b = 10$ og $c = 8$.



a) Bestem vinkel B .

$B = 83.33$

282 I trekant CBA er $c = 8$, $b = 5$ og $a = 4$.



a) Bestem vinkel B .

$B = 30.75$

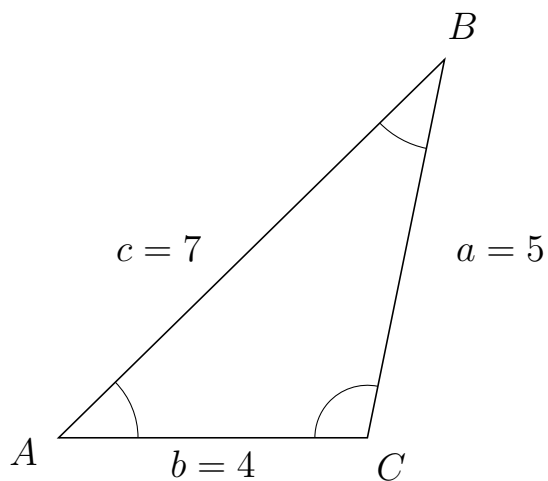


Trigonometri

Sider og vinkler abc

12. marts 2017

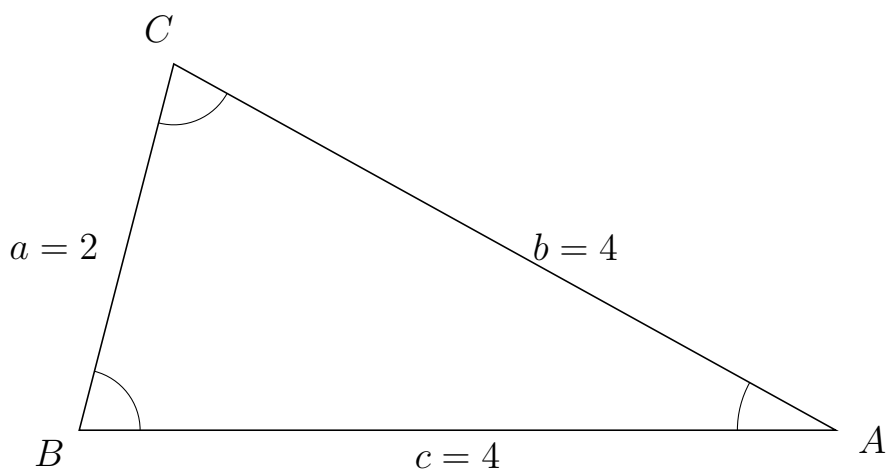
283 I trekant ABC er $a = 5$, $b = 4$ og $c = 7$.



a) Bestem vinkel B .

$B = 34.05$

284 I trekant BCA er $b = 4$, $c = 4$ og $a = 2$.



a) Bestem vinkel C .

$C = 75.52$

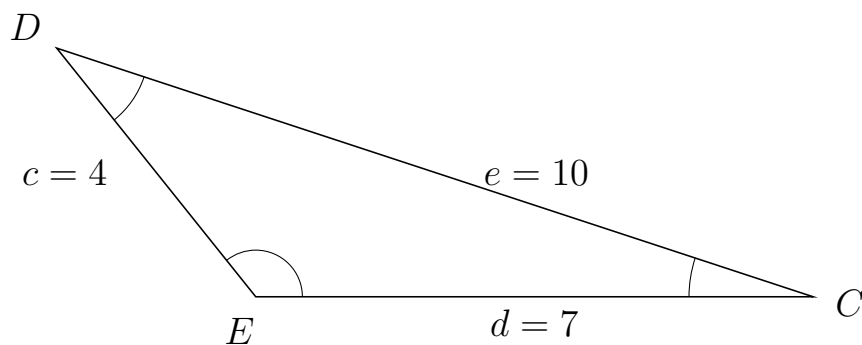


Trigonometri

Sider og vinkler abc

12. marts 2017

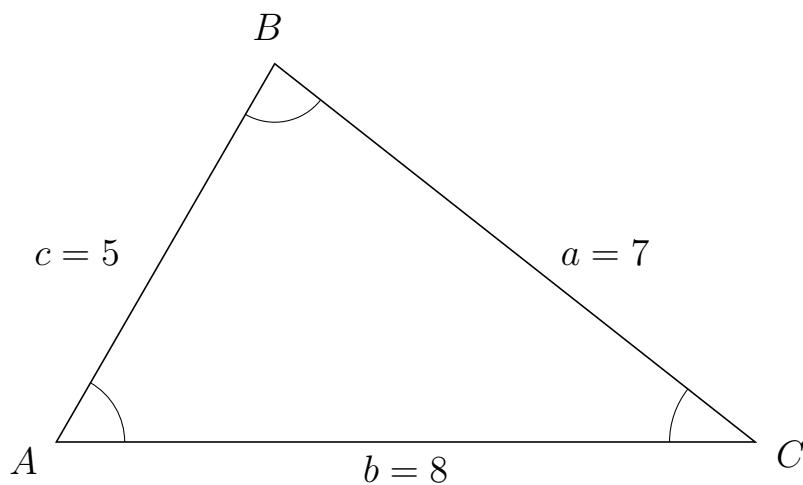
285 I trekant EDC er $e = 10$, $d = 7$ og $c = 4$.



a) Bestem vinkel D .

$D = 33.12$

286 I trekant ABC er $a = 7$, $b = 8$ og $c = 5$.



a) Bestem vinkel B .

$B = 81.79$

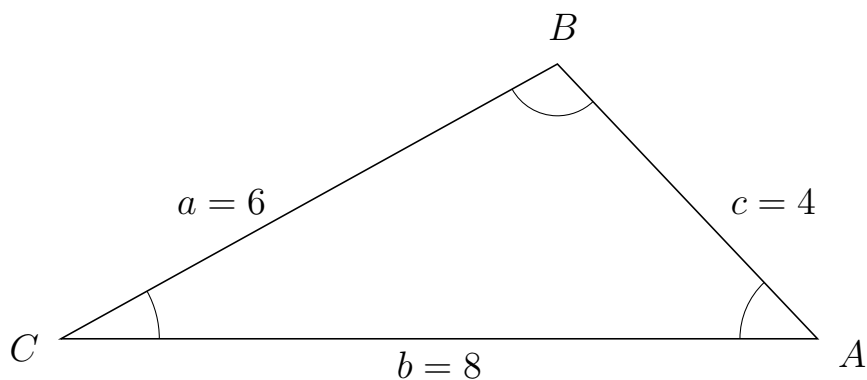


Trigonometri

Sider og vinkler abc

12. marts 2017

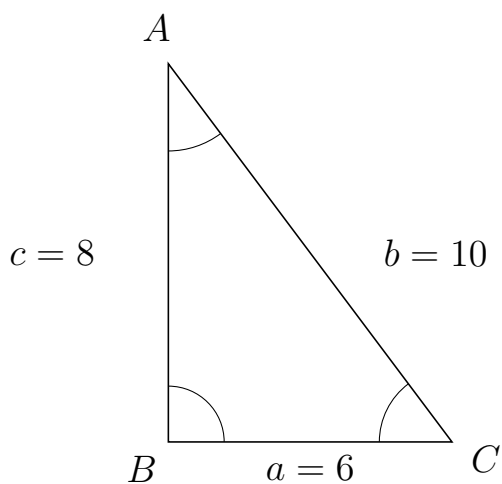
287 I trekant CBA er $c = 4$, $b = 8$ og $a = 6$.



a) Bestem vinkel B .

$B = 104.48$

288 I trekant BAC er $b = 10$, $a = 6$ og $c = 8$.



a) Bestem vinkel A .

$A = 36.87$



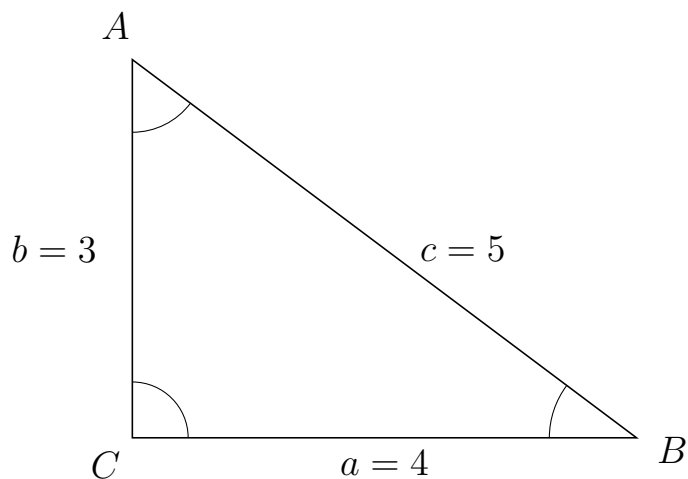
Trigonometri

Sider og vinkler abc

12. marts 2017



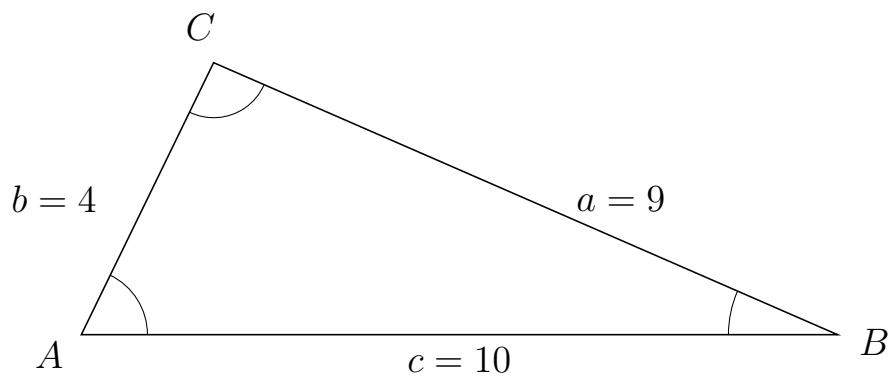
289 I trekant CAB er $c = 5$, $a = 4$ og $b = 3$.



a) Bestem vinkel A .

$A = 53.13$

290 I trekant ACB er $a = 9$, $c = 10$ og $b = 4$.



a) Bestem vinkel C .

$C = 92.39$

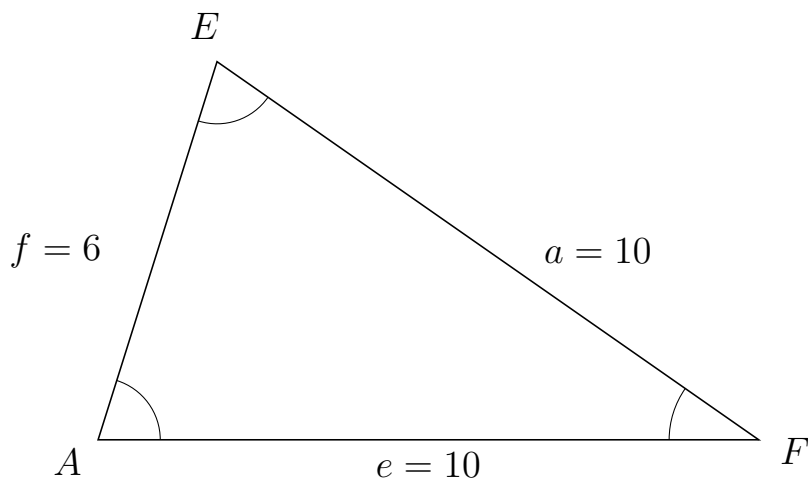


Trigonometri

Sider og vinkler abc

12. marts 2017

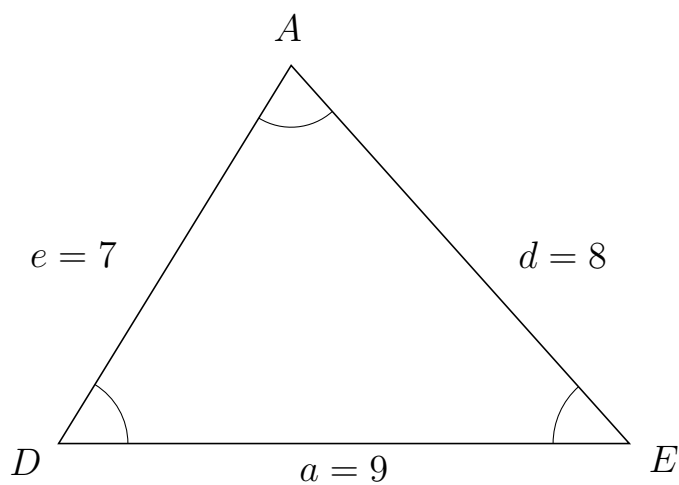
291 I trekant AEF er $a = 10$, $e = 10$ og $f = 6$.



a) Bestem vinkel E .

$E = 72.54$

292 I trekant DAE er $d = 8$, $a = 9$ og $e = 7$.



a) Bestem vinkel A .

$A = 73.4$

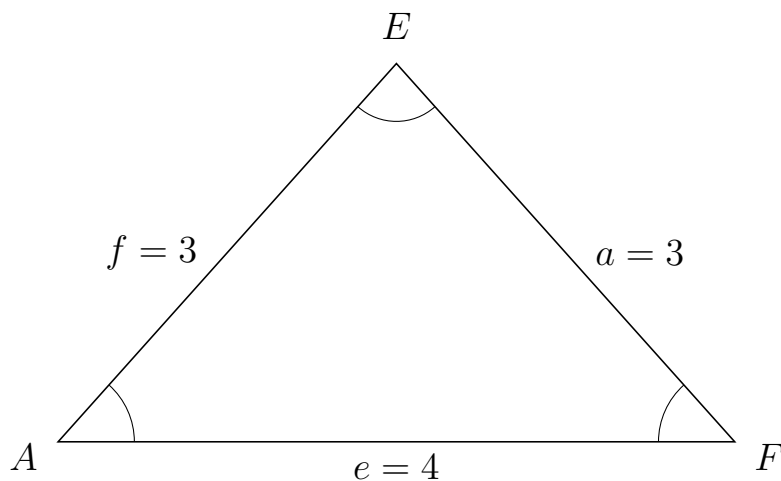


Trigonometri

Sider og vinkler abc

12. marts 2017

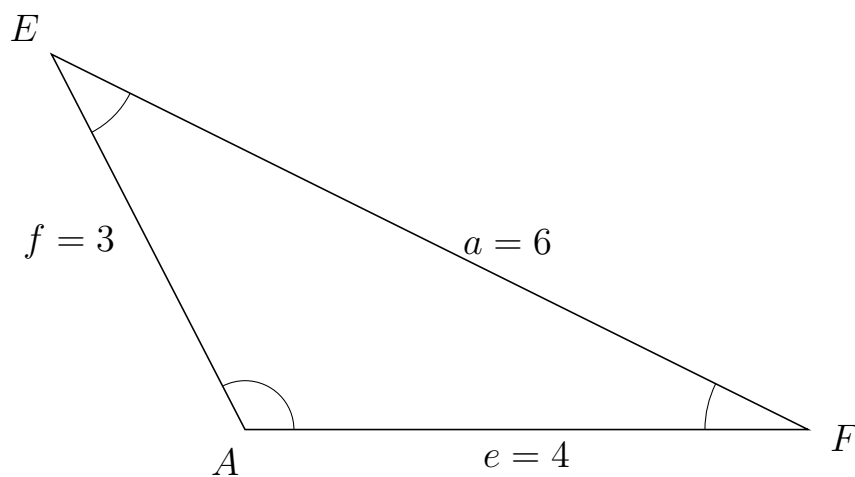
293 I trekant AEF er $a = 3$, $e = 4$ og $f = 3$.



a) Bestem vinkel E .

$E = 83.62$

294 I trekant AEF er $a = 6$, $e = 4$ og $f = 3$.



a) Bestem vinkel E .

$E = 36.34$



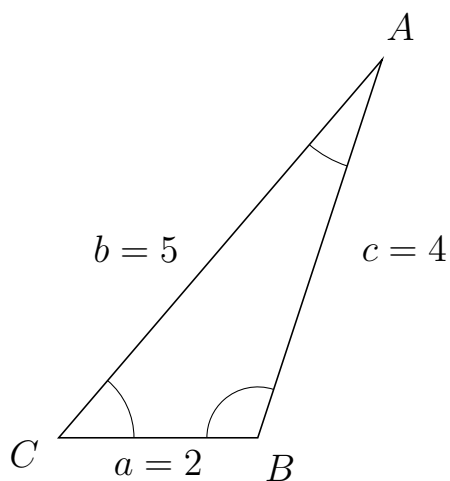
Trigonometri

Sider og vinkler abc

12. marts 2017



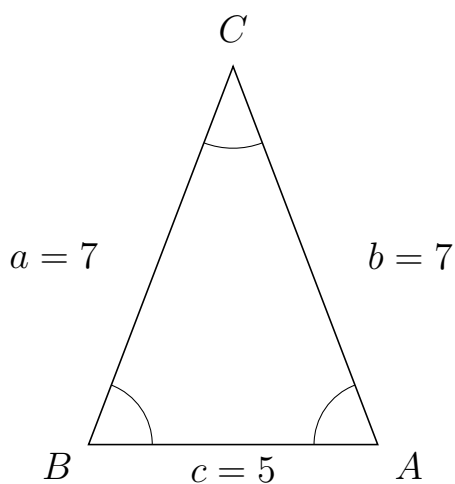
295 I trekant CAB er $c = 4$, $a = 2$ og $b = 5$.



a) Bestem vinkel A .


$A = 22.33$

296 I trekant BCA er $b = 7$, $c = 5$ og $a = 7$.



a) Bestem vinkel C .

$C = 41.85$

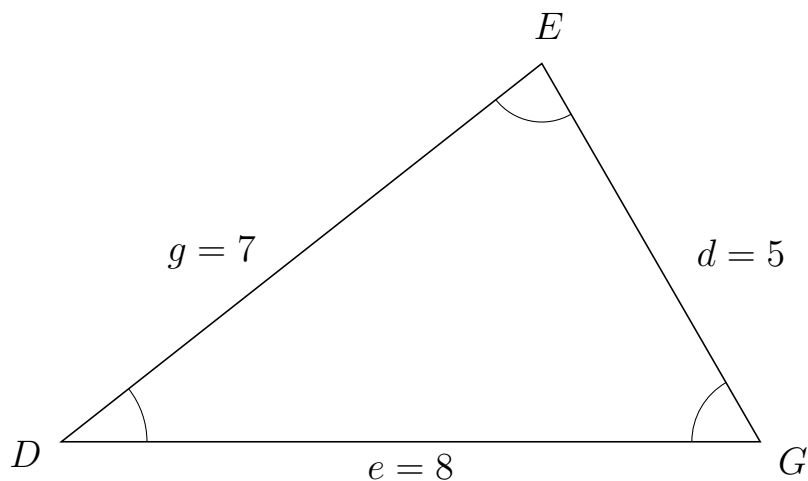


Trigonometri

Sider og vinkler abc

12. marts 2017

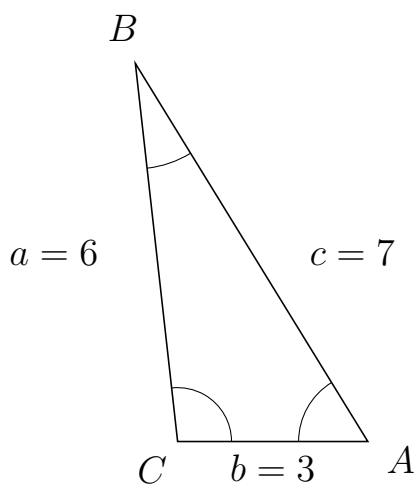
297 I trekant DEG er $d = 5$, $e = 8$ og $g = 7$.



a) Bestem vinkel E .

$E = 81.79$

298 I trekant CBA er $c = 7$, $b = 3$ og $a = 6$.



a) Bestem vinkel B .

$B = 25.21$



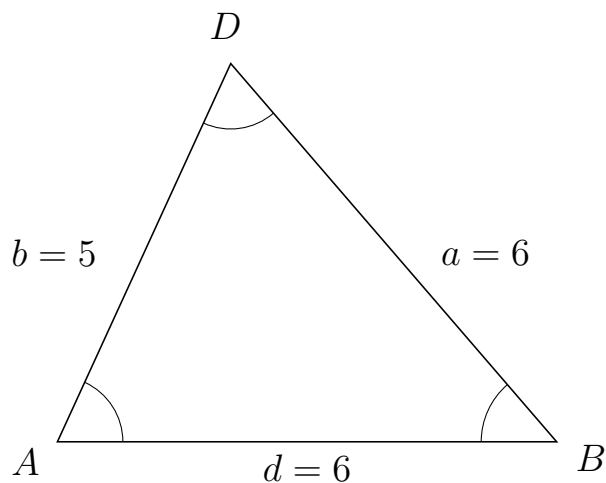
Trigonometri

Sider og vinkler abc

12. marts 2017



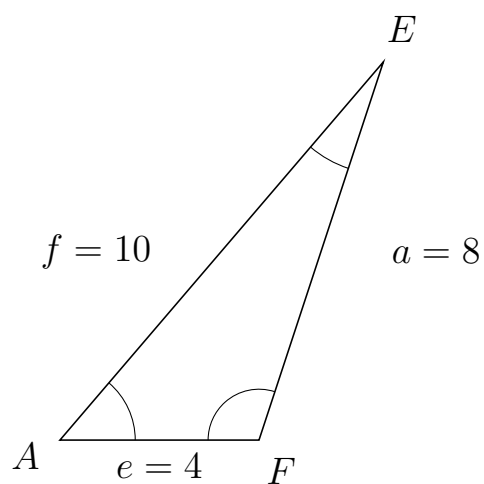
299 I trekant ADB er $a = 6$, $d = 6$ og $b = 5$.



a) Bestem vinkel D .

$D = 65.38$

300 I trekant AEF er $a = 8$, $e = 4$ og $f = 10$.



a) Bestem vinkel E .

$E = 22.33$



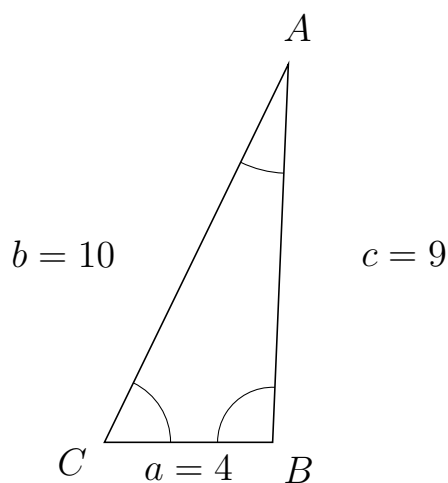
Trigonometri

Sider og vinkler abc

12. marts 2017



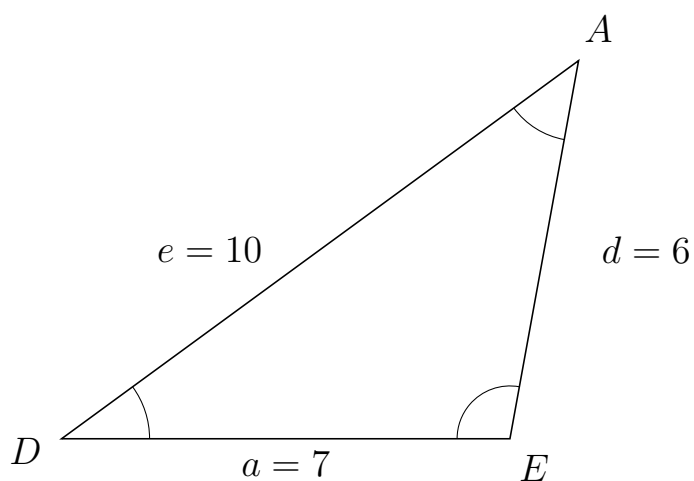
301 I trekant CAB er $c = 9$, $a = 4$ og $b = 10$.



a) Bestem vinkel A .


$A = 23.56$

302 I trekant DAE er $d = 6$, $a = 7$ og $e = 10$.



a) Bestem vinkel A .

$A = 43.53$

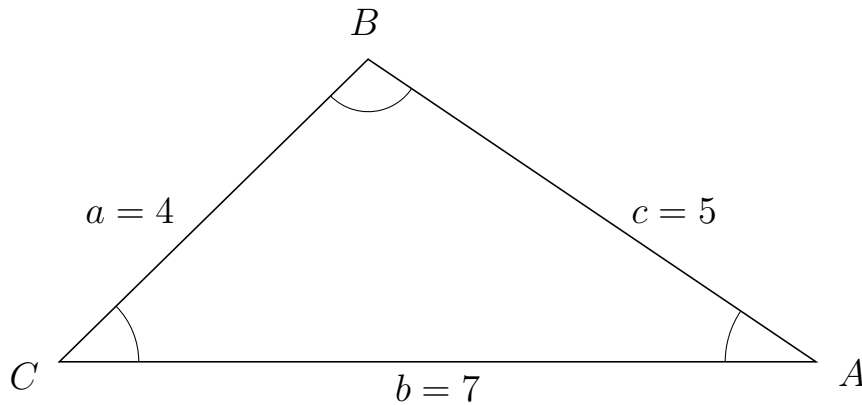


Trigonometri

Sider og vinkler abc

12. marts 2017

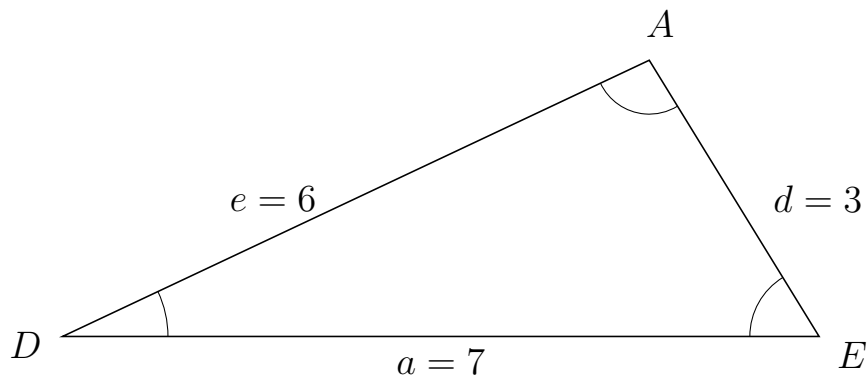
303 I trekant CBA er $c = 5$, $b = 7$ og $a = 4$.



a) Bestem vinkel B .

$B = 101.54$

304 I trekant DAE er $d = 3$, $a = 7$ og $e = 6$.



a) Bestem vinkel A .

$A = 96.38$



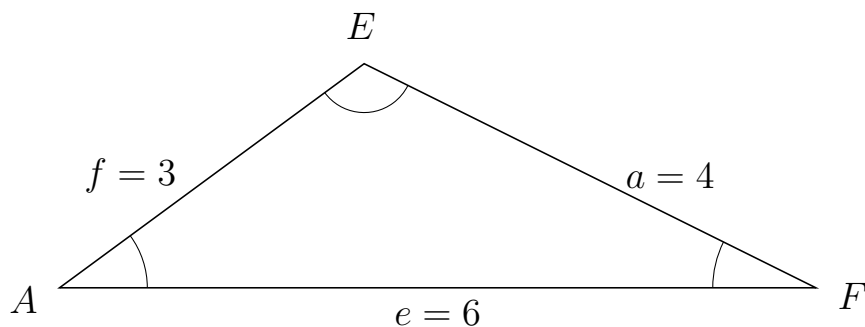
Trigonometri

Sider og vinkler abc

12. marts 2017



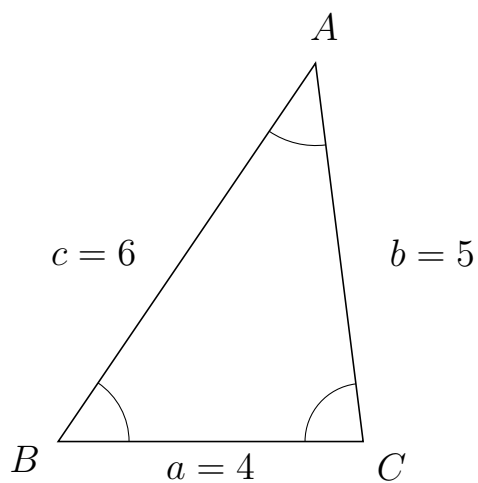
305 I trekant AEF er $a = 4$, $e = 6$ og $f = 3$.



a) Bestem vinkel E .

$E = 117.28$

306 I trekant BAC er $b = 5$, $a = 4$ og $c = 6$.



a) Bestem vinkel A .

$A = 41.41$



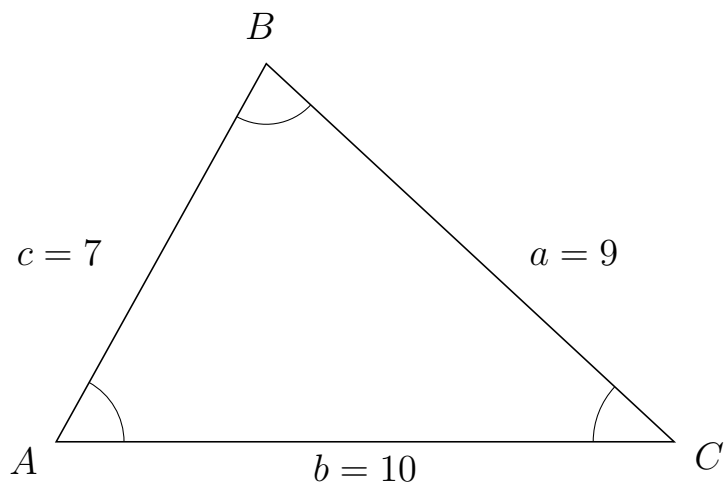
Trigonometri

Sider og vinkler abc

12. marts 2017



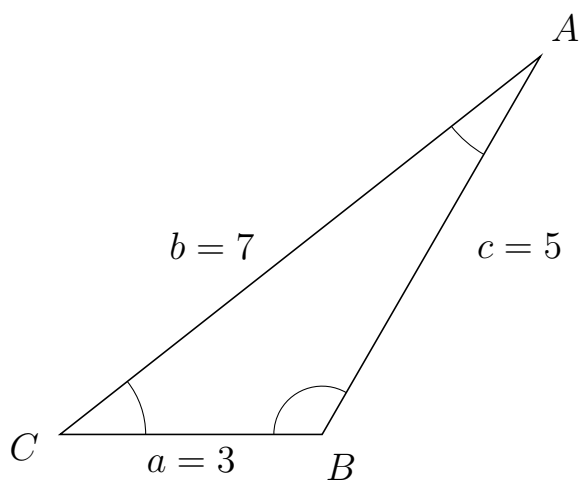
307 I trekant ABC er $a = 9$, $b = 10$ og $c = 7$.



a) Bestem vinkel B .

$B = 76.23$

308 I trekant CAB er $c = 5$, $a = 3$ og $b = 7$.



a) Bestem vinkel A .

$A = 21.79$

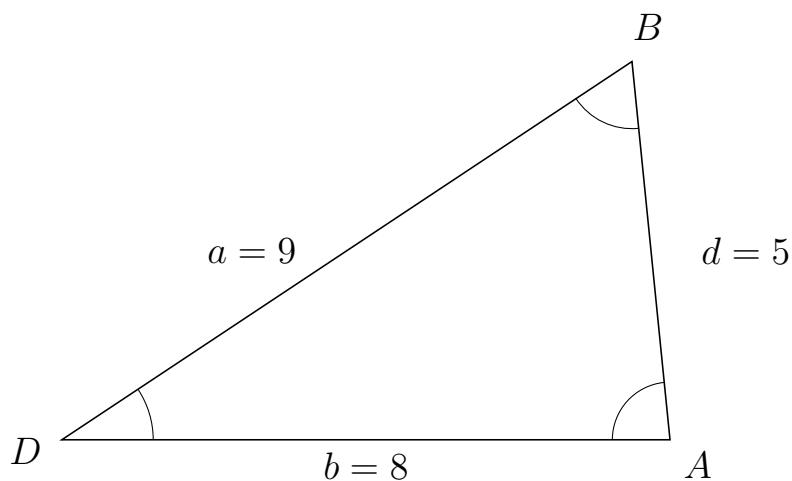


Trigonometri

Sider og vinkler abc

12. marts 2017

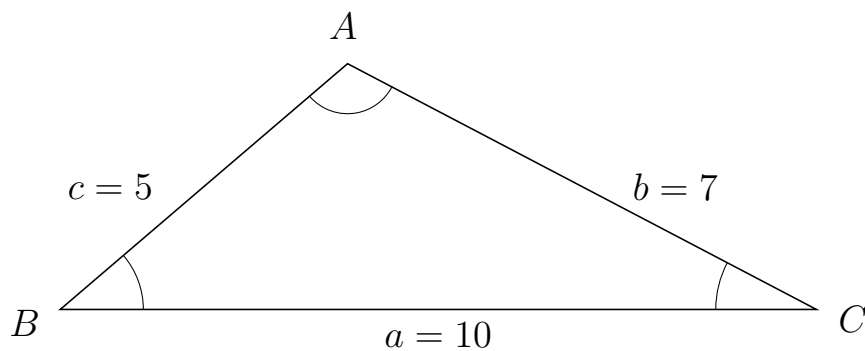
309 I trekant DBA er $d = 5$, $b = 8$ og $a = 9$.



a) Bestem vinkel B .

$B = 62.18$

310 I trekant BAC er $b = 7$, $a = 10$ og $c = 5$.



a) Bestem vinkel A .

$A = 111.8$

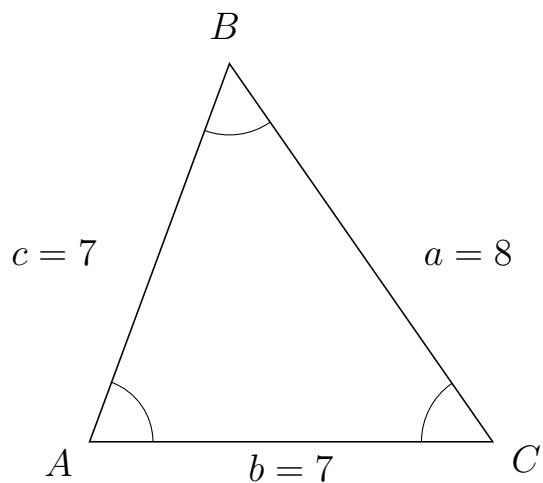


Trigonometri

Sider og vinkler abc

12. marts 2017

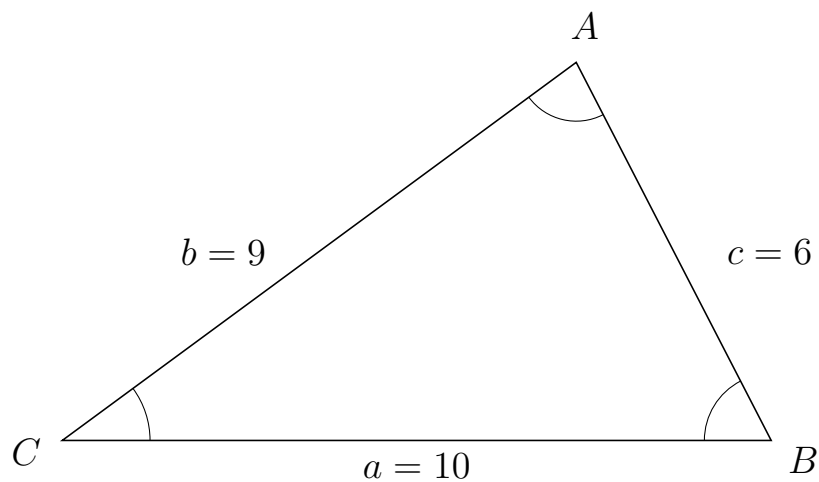
311 I trekant ABC er $a = 8$, $b = 7$ og $c = 7$.



a) Bestem vinkel B .

$B = 55.15$

312 I trekant CAB er $c = 6$, $a = 10$ og $b = 9$.



a) Bestem vinkel A .

$A = 80.94$



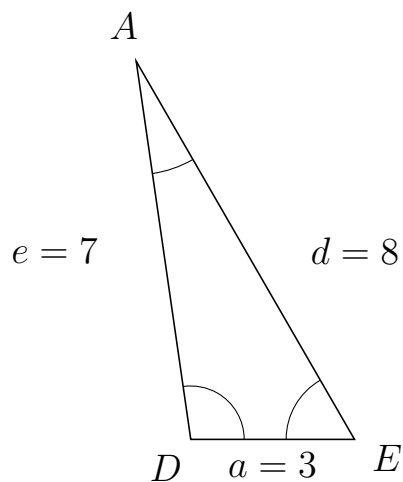
Trigonometri

Sider og vinkler abc

12. marts 2017



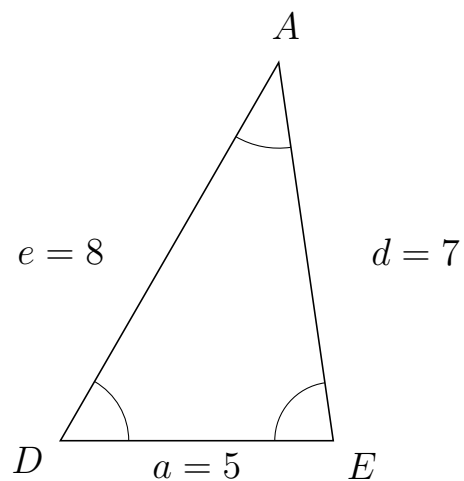
313 I trekant DAE er $d = 8$, $a = 3$ og $e = 7$.



a) Bestem vinkel A .

$A = 21.79$

314 I trekant DAE er $d = 7$, $a = 5$ og $e = 8$.



a) Bestem vinkel A .

$A = 38.21$



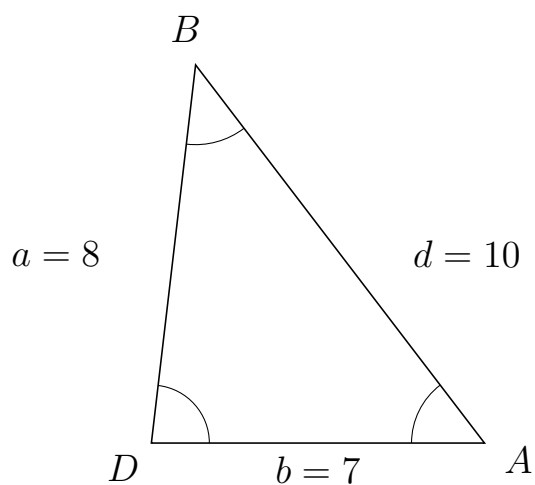
Trigonometri

Sider og vinkler abc

12. marts 2017



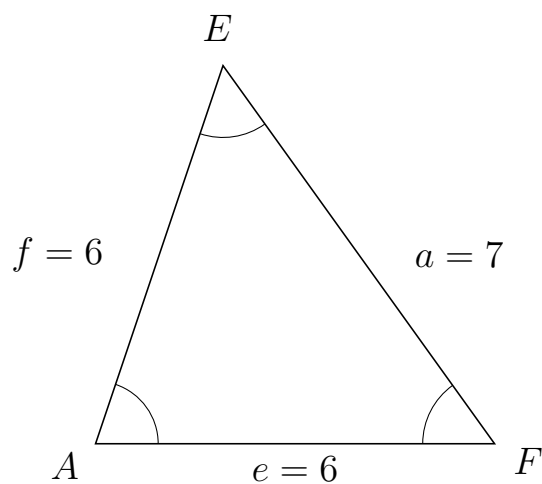
315 I trekant DBA er $d = 10$, $b = 7$ og $a = 8$.



a) Bestem vinkel B .


$B = 44.05$

316 I trekant AEF er $a = 7$, $e = 6$ og $f = 6$.



a) Bestem vinkel E .

$E = 54.31$



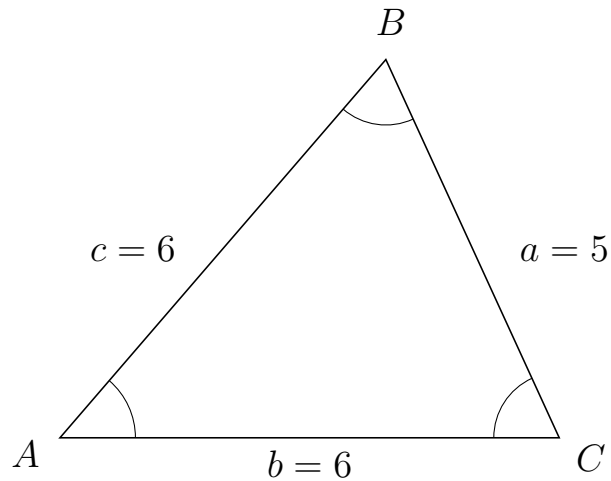
Trigonometri

Sider og vinkler abc

12. marts 2017



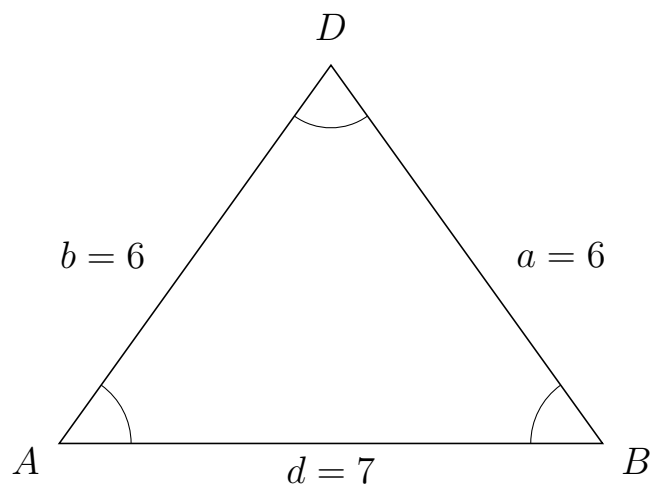
317 I trekant ABC er $a = 5$, $b = 6$ og $c = 6$.



a) Bestem vinkel B .

$B = 65.38$

318 I trekant ADB er $a = 6$, $d = 7$ og $b = 6$.



a) Bestem vinkel D .

$D = 71.37$



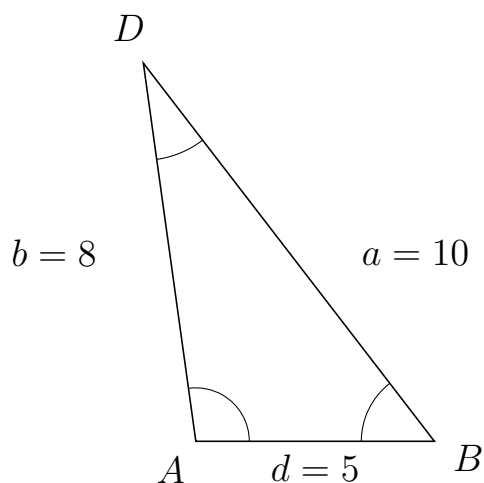
Trigonometri

Sider og vinkler abc

12. marts 2017



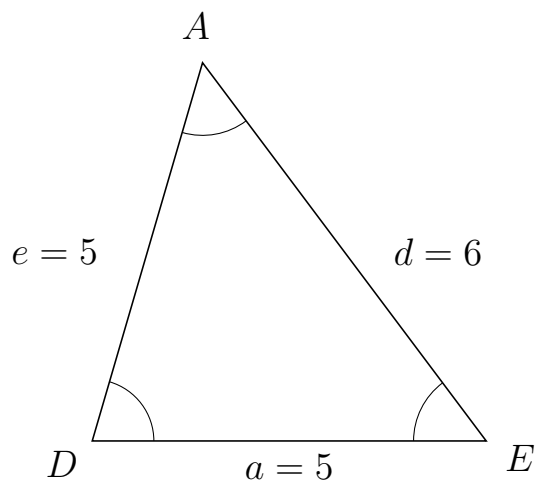
319 I trekant ADB er $a = 10$, $d = 5$ og $b = 8$.



a) Bestem vinkel D .

$D = 29.69$

320 I trekant DAE er $d = 6$, $a = 5$ og $e = 5$.



a) Bestem vinkel A .

$A = 53.13$



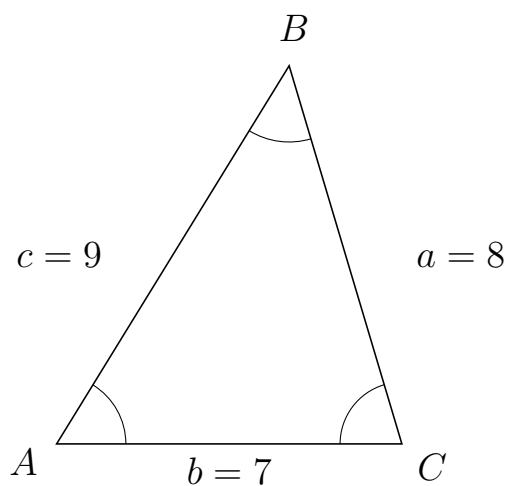
Trigonometri

Sider og vinkler abc

12. marts 2017



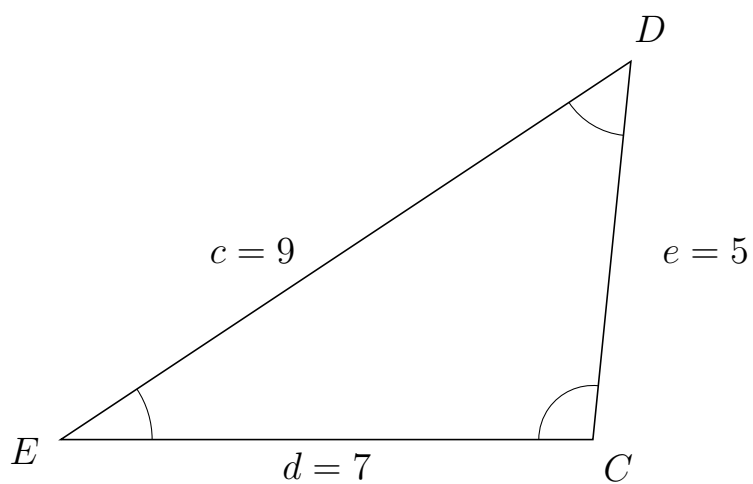
321 I trekant ABC er $a = 8$, $b = 7$ og $c = 9$.



a) Bestem vinkel B .

$B = 48.19$

322 I trekant EDC er $e = 5$, $d = 7$ og $c = 9$.



a) Bestem vinkel D .

$D = 50.7$

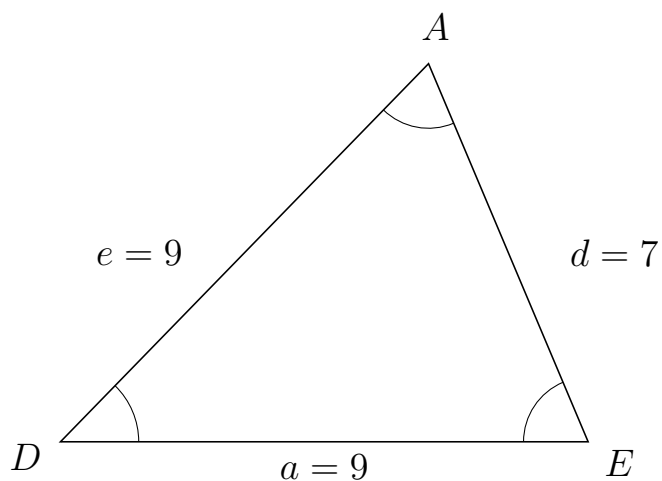


Trigonometri

Sider og vinkler abc

12. marts 2017

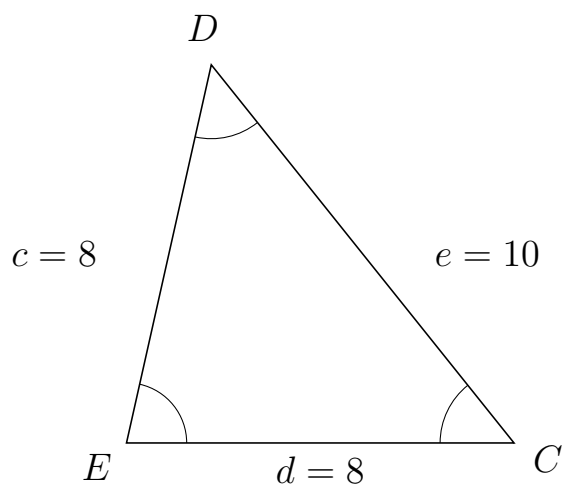
323 I trekant DAE er $d = 7$, $a = 9$ og $e = 9$.



a) Bestem vinkel A .

$A = 67.11$

324 I trekant EDC er $e = 10$, $d = 8$ og $c = 8$.



a) Bestem vinkel D .

$D = 51.32$



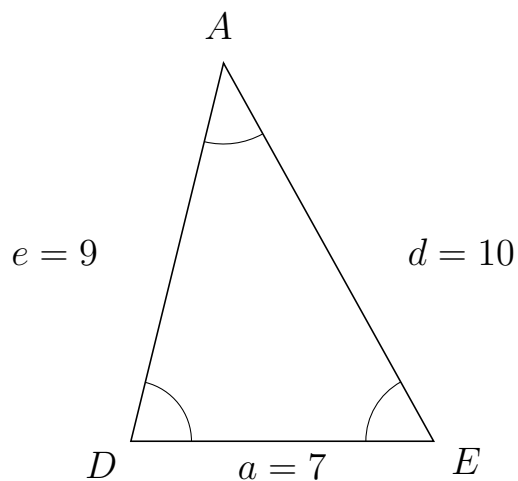
Trigonometri

Sider og vinkler abc

12. marts 2017



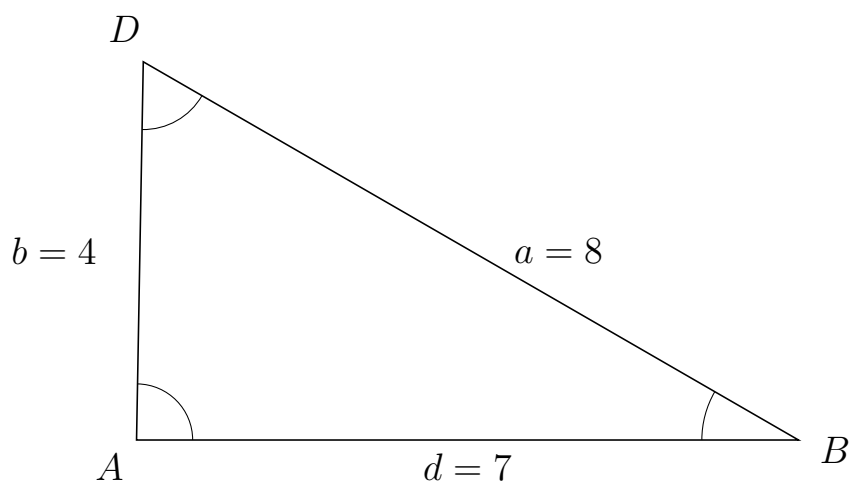
325 I trekant DAE er $d = 10$, $a = 7$ og $e = 9$.



a) Bestem vinkel A .

$A = 42.83$

326 I trekant ADB er $a = 8$, $d = 7$ og $b = 4$.



a) Bestem vinkel D .

$D = 61.03$



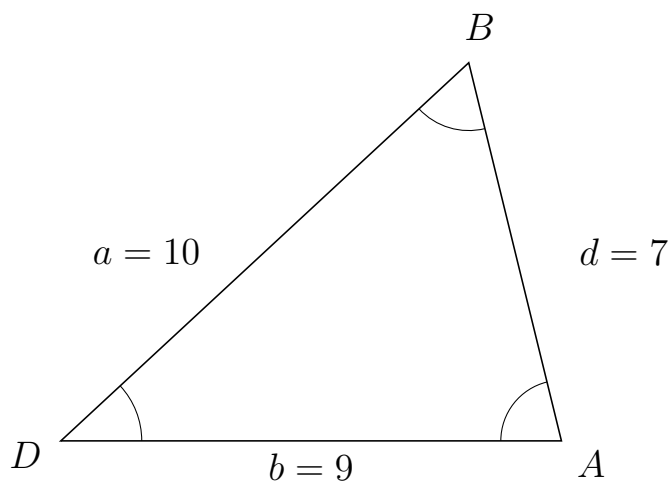
Trigonometri

Sider og vinkler abc

12. marts 2017



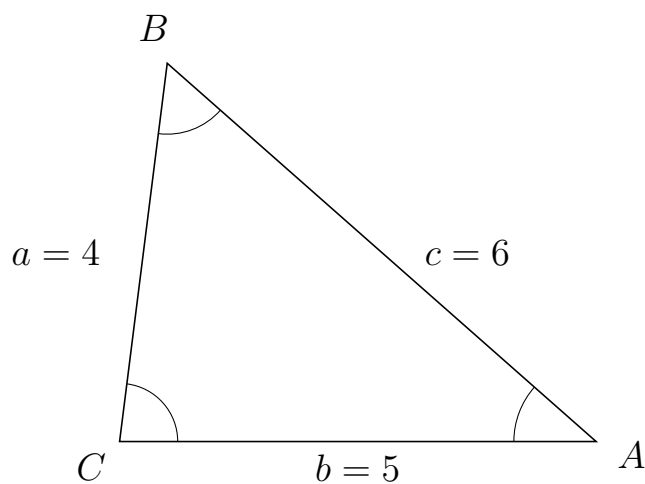
327 I trekant DBA er $d = 7$, $b = 9$ og $a = 10$.



a) Bestem vinkel B .

$B = 60.94$

328 I trekant CBA er $c = 6$, $b = 5$ og $a = 4$.



a) Bestem vinkel B .

$B = 55.77$



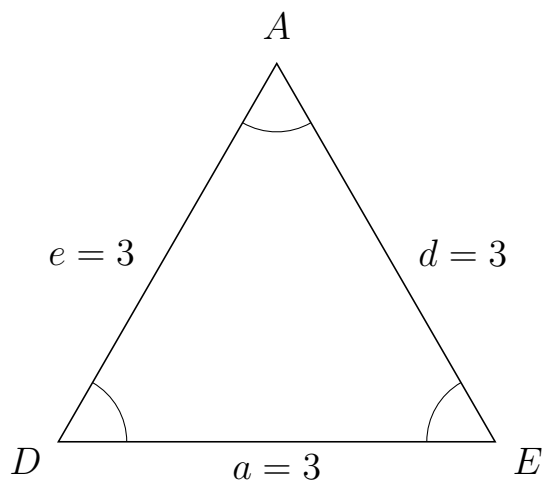
Trigonometri

Sider og vinkler abc

12. marts 2017



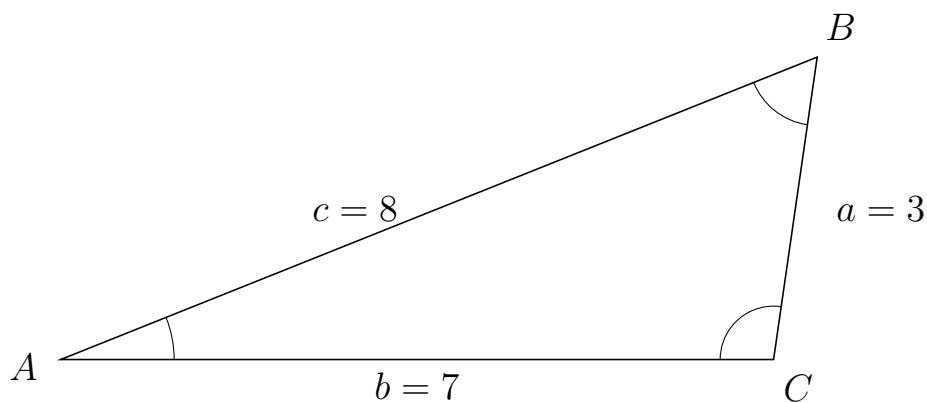
329 I trekant DAE er $d = 3$, $a = 3$ og $e = 3$.



a) Bestem vinkel A .

$A = 60$

330 I trekant ABC er $a = 3$, $b = 7$ og $c = 8$.



a) Bestem vinkel B .

$B = 60$

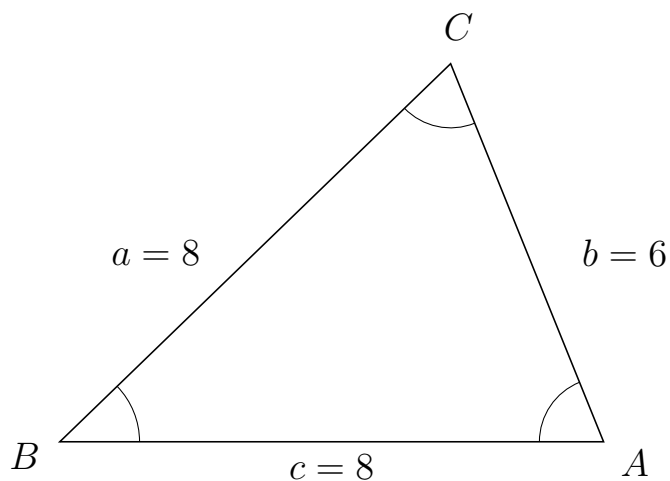


Trigonometri

Sider og vinkler abc

12. marts 2017

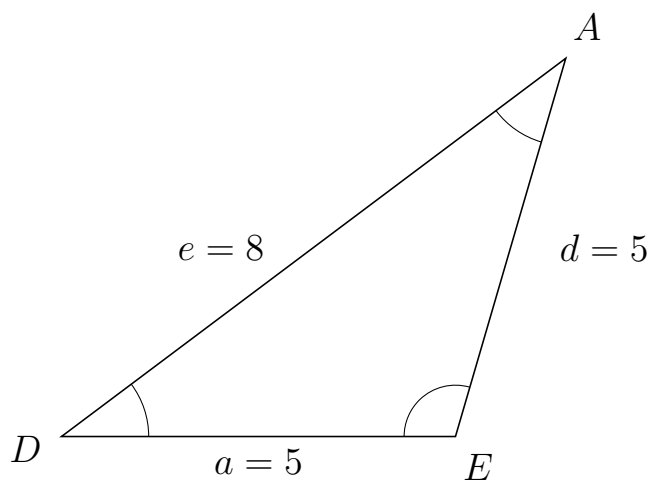
331 I trekant BCA er $b = 6$, $c = 8$ og $a = 8$.



a) Bestem vinkel C .


$C = 67.98$

332 I trekant DAE er $d = 5$, $a = 5$ og $e = 8$.



a) Bestem vinkel A .

$A = 36.87$

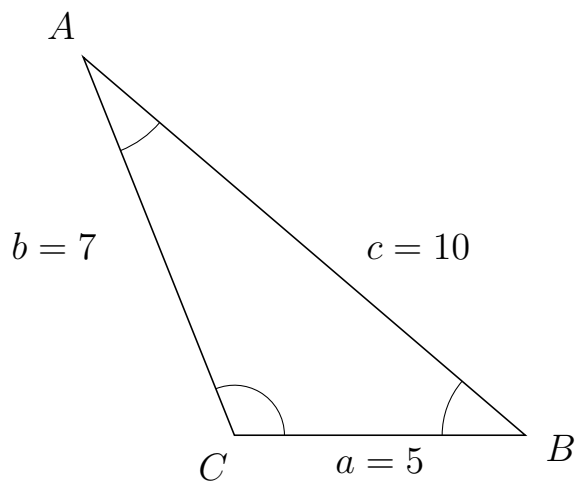


Trigonometri

Sider og vinkler abc

12. marts 2017

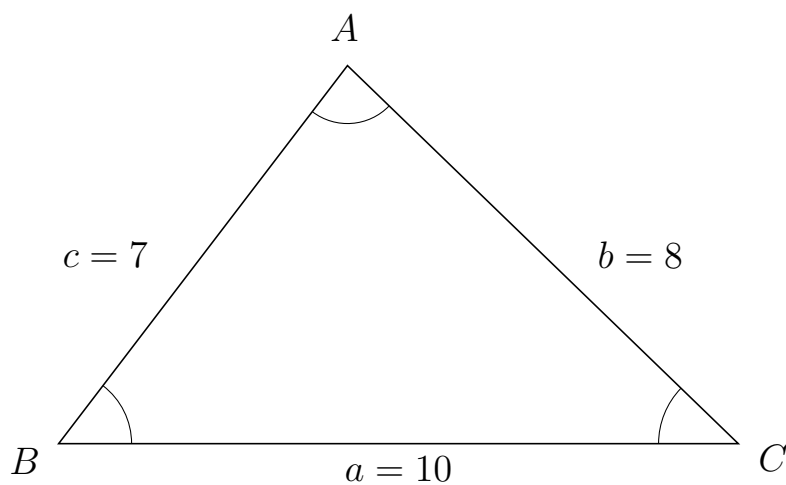
333 I trekant CAB er $c = 10$, $a = 5$ og $b = 7$.



a) Bestem vinkel A .

$A = 27.66$

334 I trekant BAC er $b = 8$, $a = 10$ og $c = 7$.



a) Bestem vinkel A .

$A = 83.33$

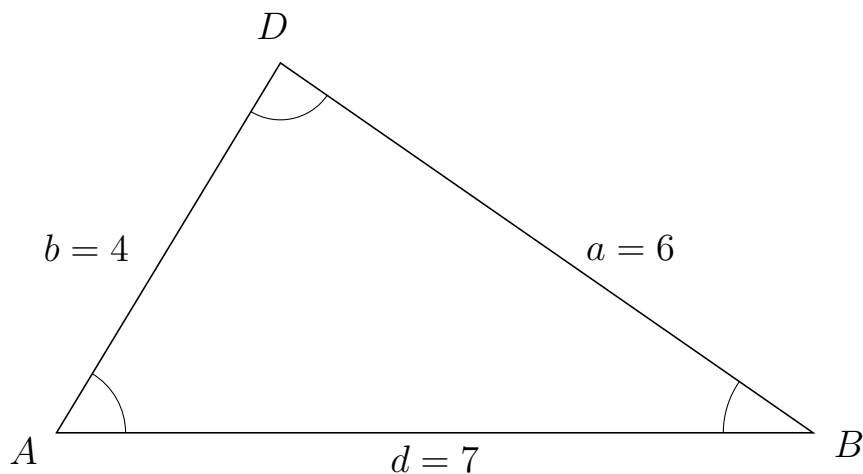


Trigonometri

Sider og vinkler abc

12. marts 2017

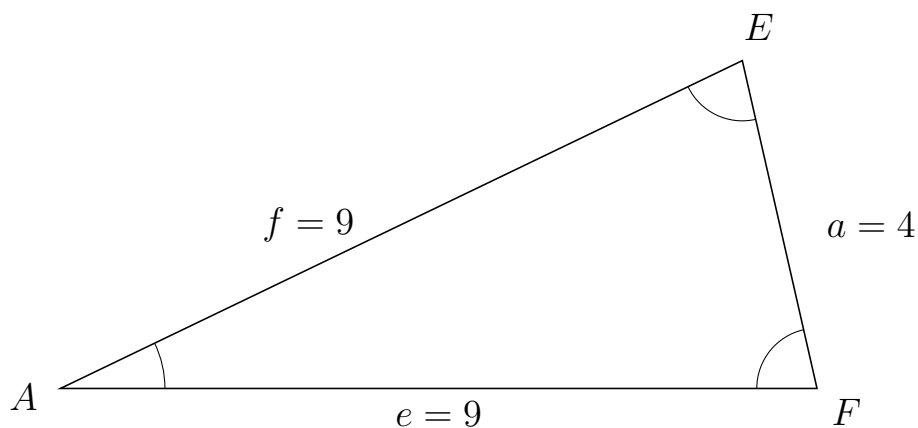
335 I trekant ADB er $a = 6$, $d = 7$ og $b = 4$.



a) Bestem vinkel D .

$D = 86.42$

336 I trekant AEF er $a = 4$, $e = 9$ og $f = 9$.



a) Bestem vinkel E .

$E = 77.16$

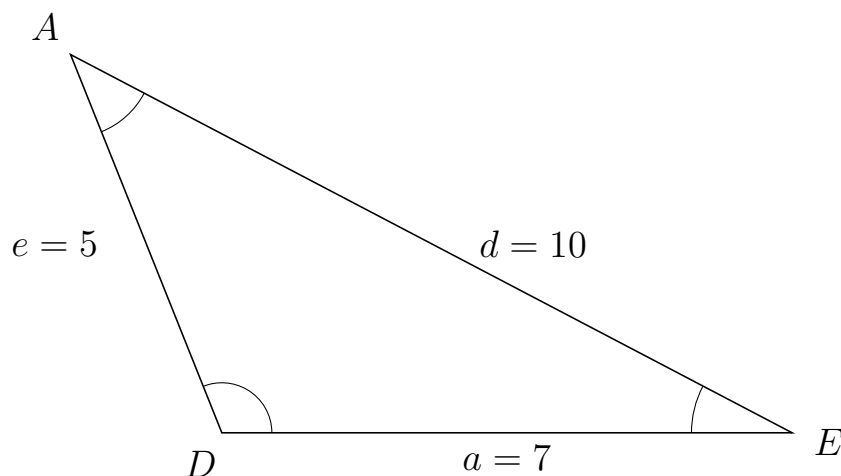


Trigonometri

Sider og vinkler abc

12. marts 2017

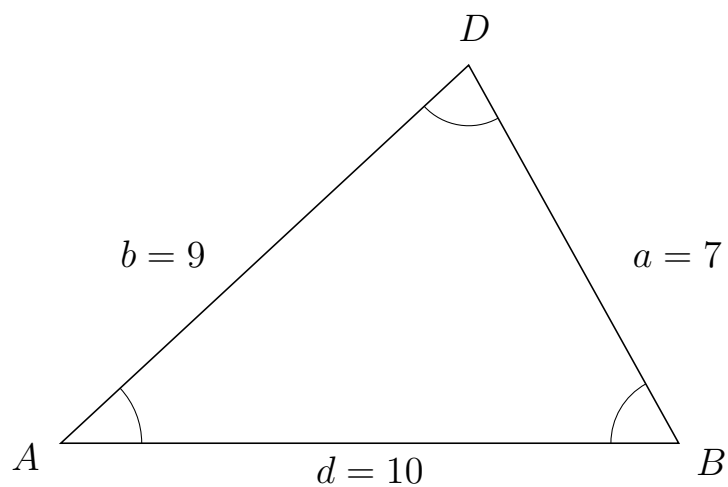
337 I trekant DAE er $d = 10$, $a = 7$ og $e = 5$.



a) Bestem vinkel A .

$A = 40.54$

338 I trekant ADB er $a = 7$, $d = 10$ og $b = 9$.



a) Bestem vinkel D .

$D = 76.23$

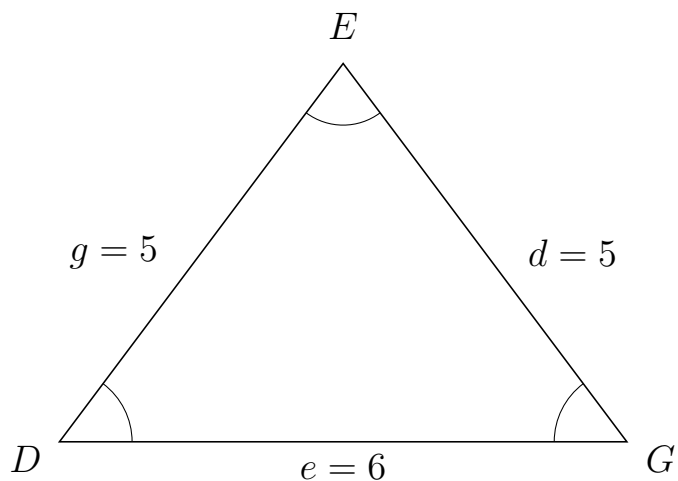


Trigonometri

Sider og vinkler abc

12. marts 2017

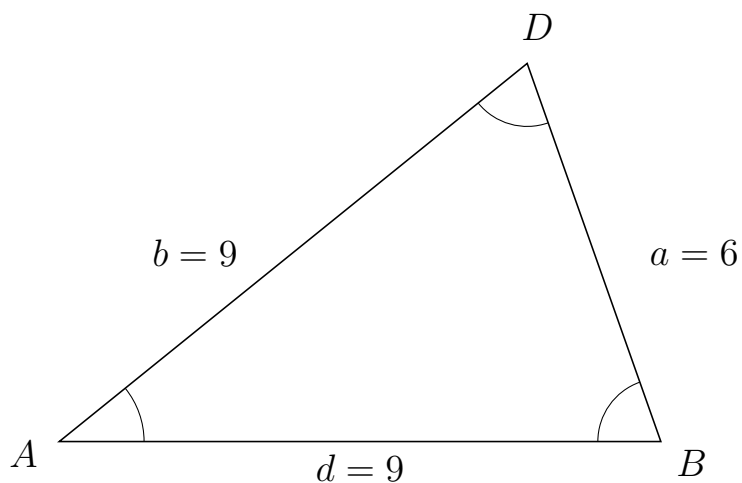
339 I trekant DEG er $d = 5$, $e = 6$ og $g = 5$.



a) Bestem vinkel E .


$E = 73.74$

340 I trekant ADB er $a = 6$, $d = 9$ og $b = 9$.



a) Bestem vinkel D .

$D = 70.53$

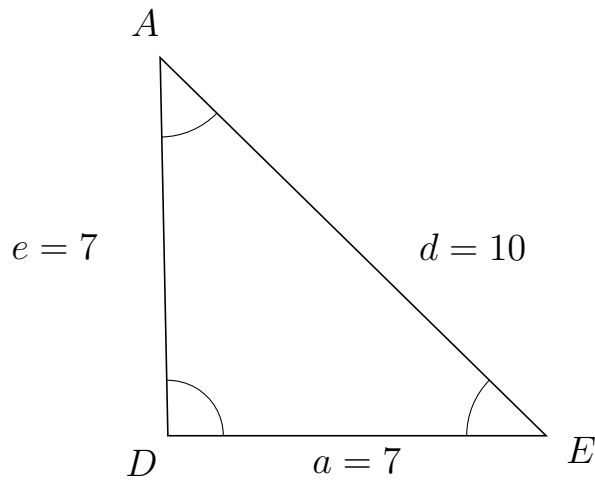


Trigonometri

Sider og vinkler abc

12. marts 2017

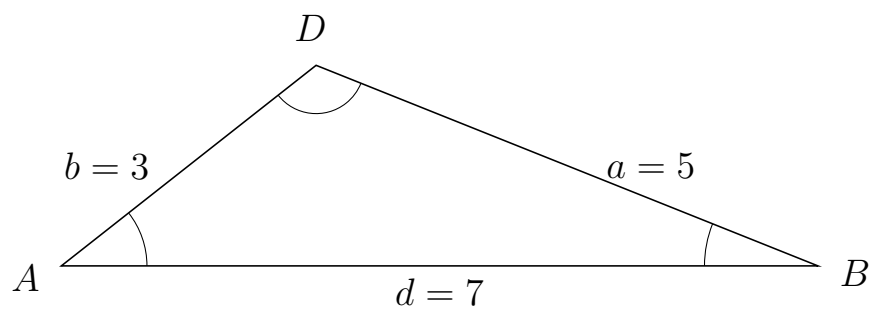
341 I trekant DAE er $d = 10$, $a = 7$ og $e = 7$.



a) Bestem vinkel A .

$A = 44.42$

342 I trekant ADB er $a = 5$, $d = 7$ og $b = 3$.



a) Bestem vinkel D .

$D = 120$



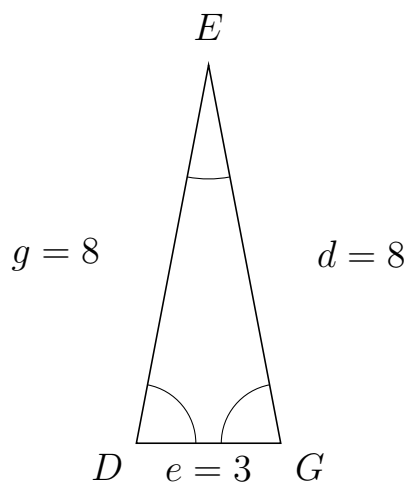
Trigonometri

Sider og vinkler abc

12. marts 2017



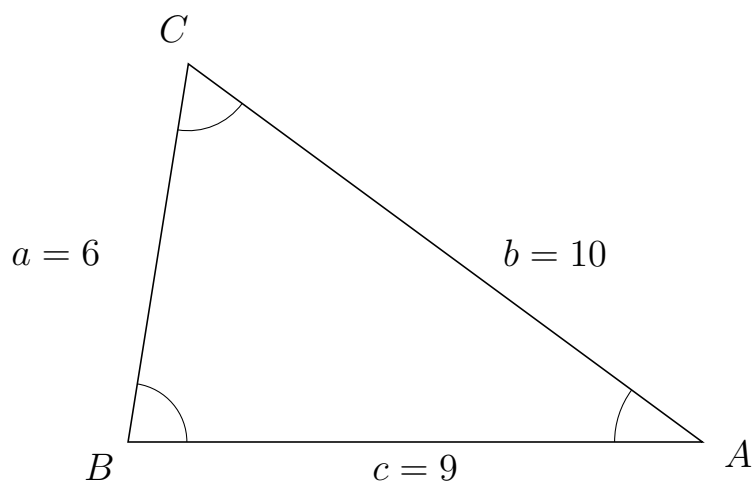
343 I trekant DEG er $d = 8$, $e = 3$ og $g = 8$.



a) Bestem vinkel E .


$E = 21.61$

344 I trekant BCA er $b = 10$, $c = 9$ og $a = 6$.



a) Bestem vinkel C .

$C = 62.72$



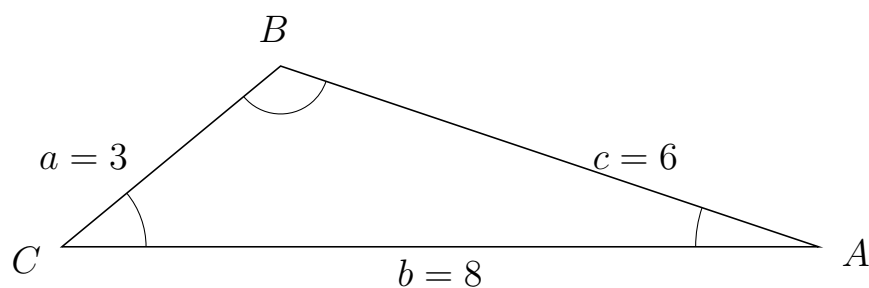
Trigonometri

Sider og vinkler abc

12. marts 2017



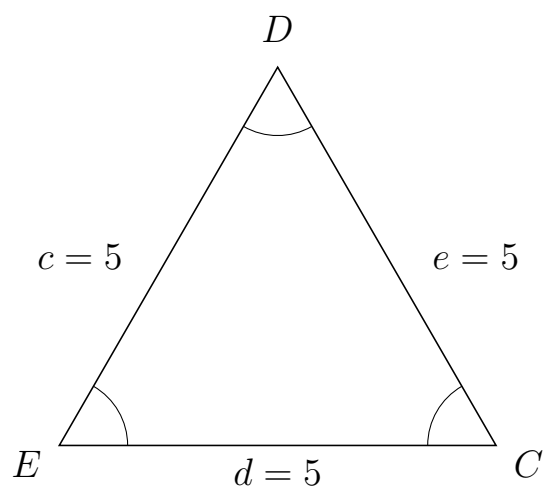
345 I trekant CBA er $c = 6$, $b = 8$ og $a = 3$.



a) Bestem vinkel B .

$B = 121.86$

346 I trekant EDC er $e = 5$, $d = 5$ og $c = 5$.



a) Bestem vinkel D .

$D = 60$

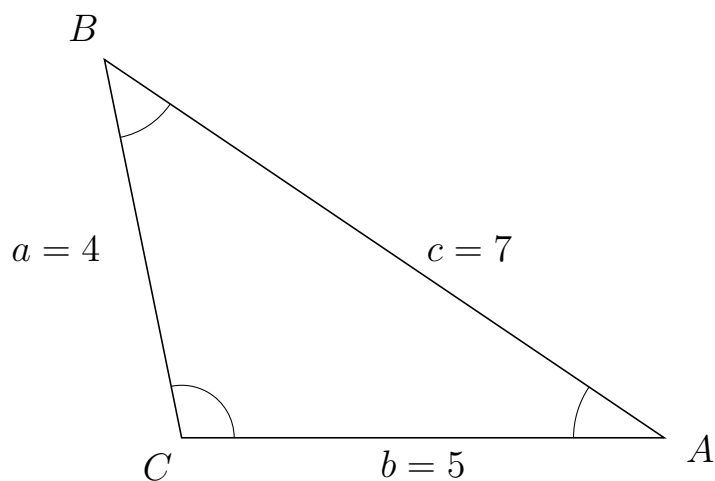


Trigonometri

Sider og vinkler abc

12. marts 2017

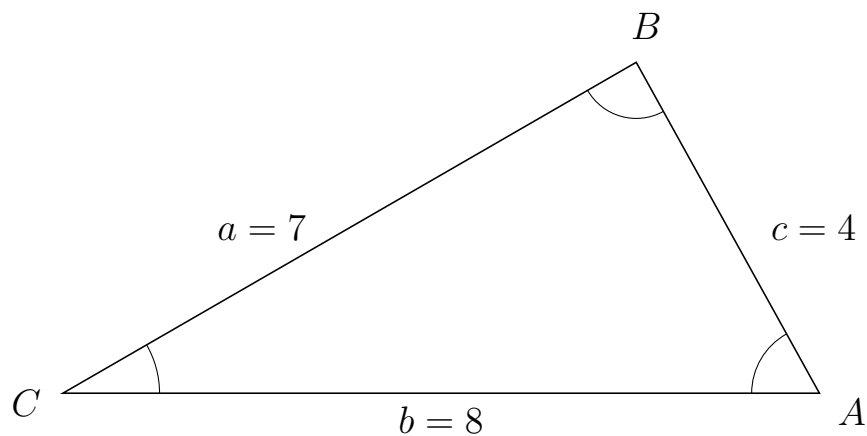
347 I trekant CBA er $c = 7$, $b = 5$ og $a = 4$.



a) Bestem vinkel B .


$B = 44.42$

348 I trekant CBA er $c = 4$, $b = 8$ og $a = 7$.



a) Bestem vinkel B .

$B = 88.98$



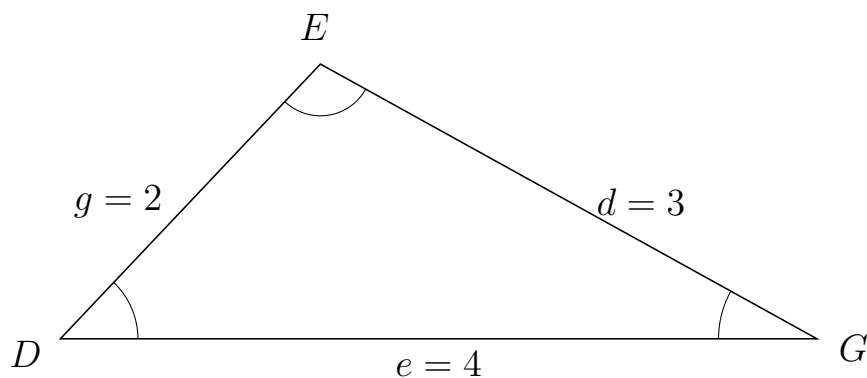
Trigonometri

Sider og vinkler abc

12. marts 2017



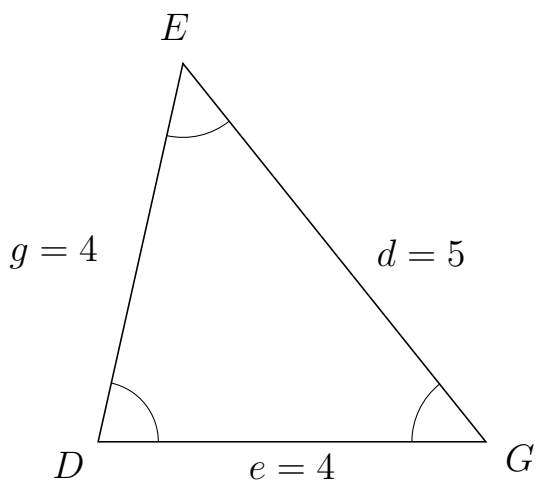
349 I trekant DEG er $d = 3$, $e = 4$ og $g = 2$.



a) Bestem vinkel E .

$E = 104.48$

350 I trekant DEG er $d = 5$, $e = 4$ og $g = 4$.



a) Bestem vinkel E .

$E = 51.32$



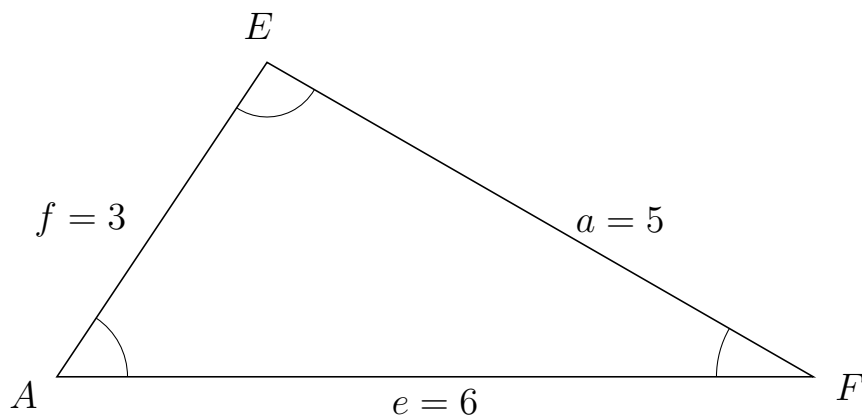
Trigonometri

Sider og vinkler abc

12. marts 2017



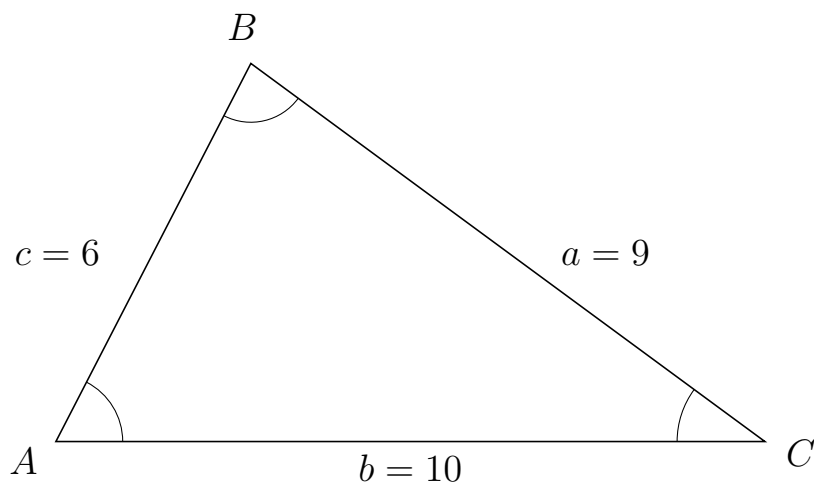
351 I trekant AEF er $a = 5$, $e = 6$ og $f = 3$.



a) Bestem vinkel E .

$E = 93.82$

352 I trekant ABC er $a = 9$, $b = 10$ og $c = 6$.



a) Bestem vinkel B .

$B = 80.94$

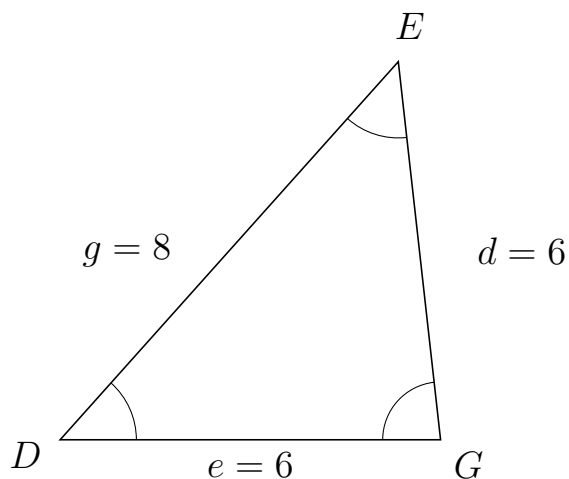


Trigonometri

Sider og vinkler abc

12. marts 2017

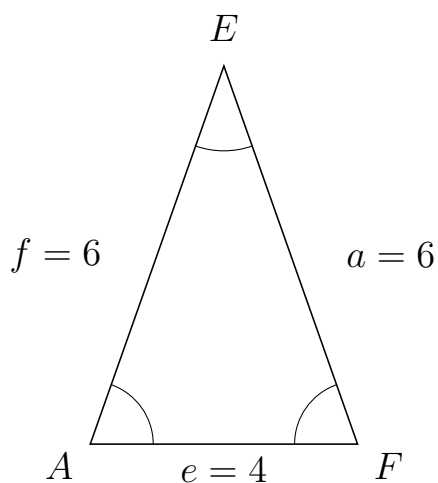
353 I trekant DEG er $d = 6$, $e = 6$ og $g = 8$.



a) Bestem vinkel E .

$E = 48.19$

354 I trekant AEF er $a = 6$, $e = 4$ og $f = 6$.



a) Bestem vinkel E .

$E = 38.94$

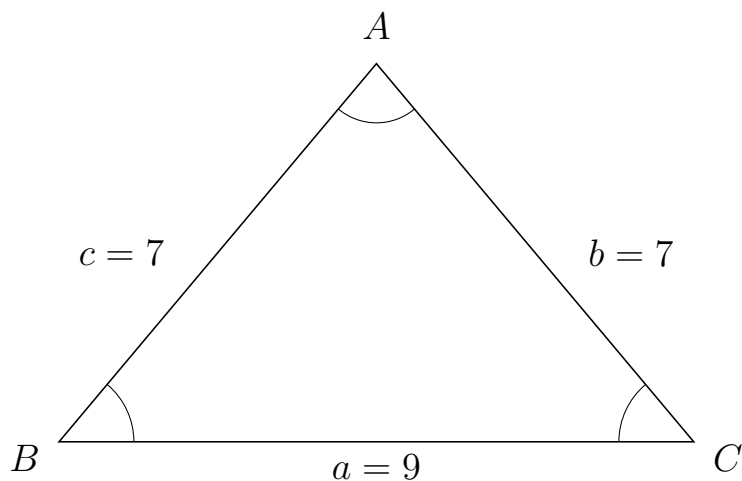


Trigonometri

Sider og vinkler abc

12. marts 2017

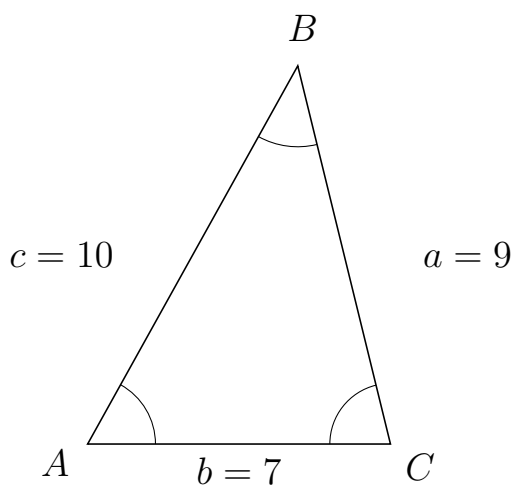
355 I trekant BAC er $b = 7$, $a = 9$ og $c = 7$.



a) Bestem vinkel A .

$A = 80.01$

356 I trekant ABC er $a = 9$, $b = 7$ og $c = 10$.



a) Bestem vinkel B .

$B = 42.83$



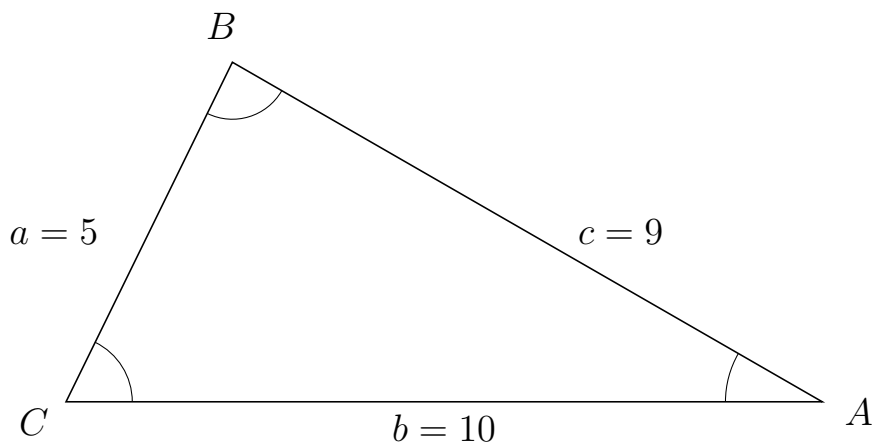
Trigonometri

Sider og vinkler abc

12. marts 2017



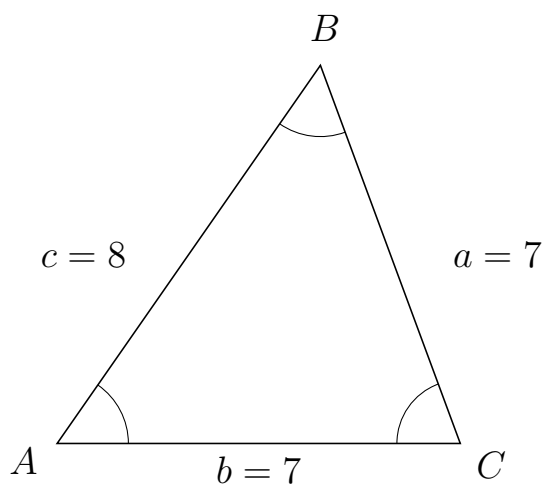
357 I trekant CBA er $c = 9$, $b = 10$ og $a = 5$.



a) Bestem vinkel B .

$B = 86.18$

358 I trekant ABC er $a = 7$, $b = 7$ og $c = 8$.



a) Bestem vinkel B .

$B = 55.15$

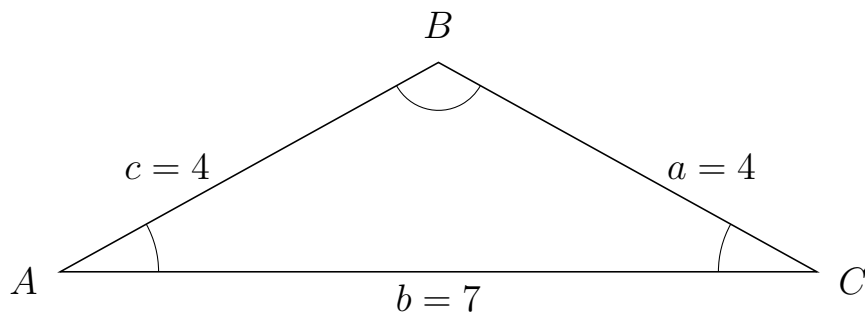


Trigonometri

Sider og vinkler abc

12. marts 2017

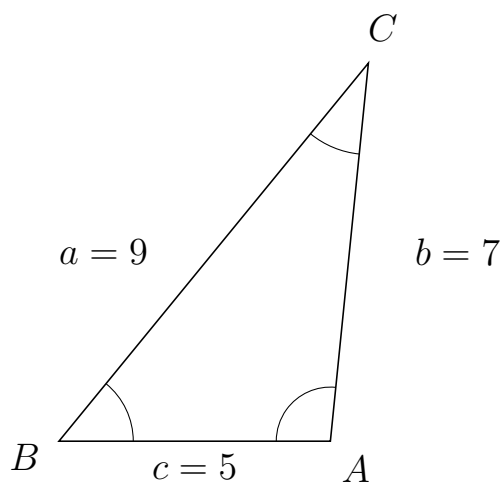
359 I trekant ABC er $a = 4$, $b = 7$ og $c = 4$.



a) Bestem vinkel B .


$B = 122.09$

360 I trekant BCA er $b = 7$, $c = 5$ og $a = 9$.



a) Bestem vinkel C .

$C = 33.56$

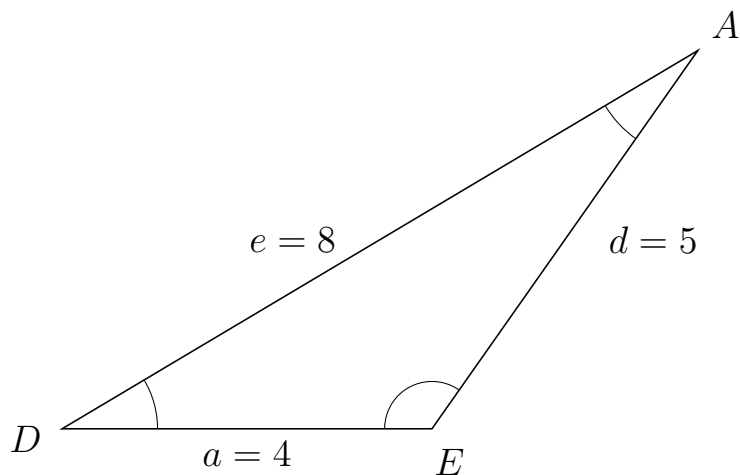


Trigonometri

Sider og vinkler abc

12. marts 2017

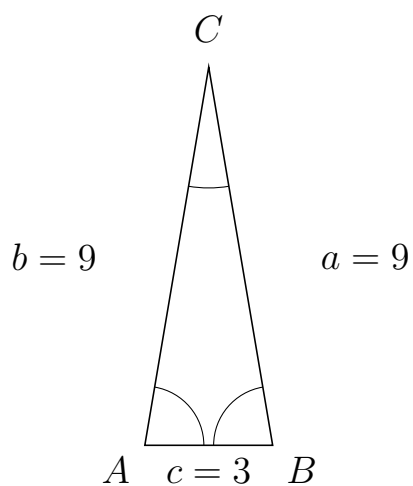
361 I trekant DAE er $d = 5$, $a = 4$ og $e = 8$.



a) Bestem vinkel A .

$A = 24.15$

362 I trekant ACB er $a = 9$, $c = 3$ og $b = 9$.



a) Bestem vinkel C .

$C = 19.19$

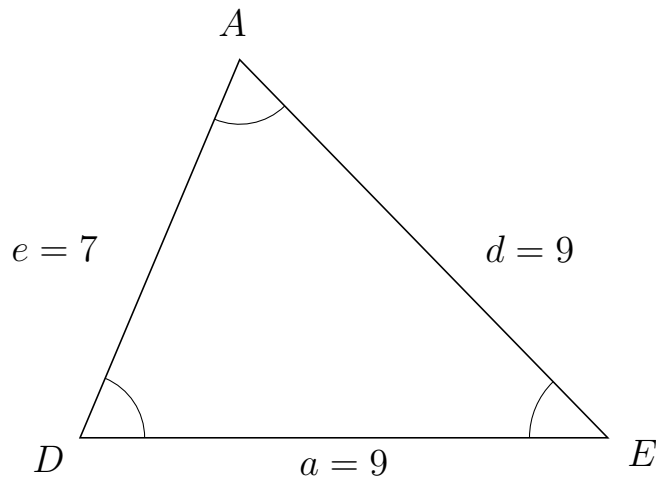


Trigonometri

Sider og vinkler abc

12. marts 2017

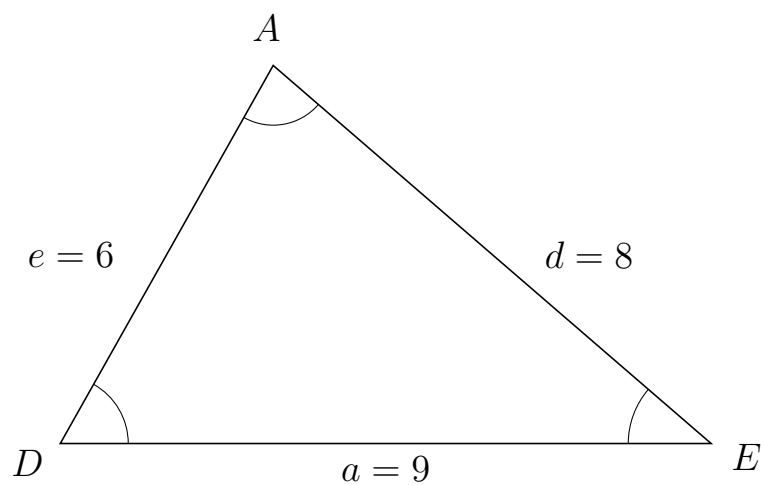
363 I trekant DAE er $d = 9$, $a = 9$ og $e = 7$.



a) Bestem vinkel A .


$A = 67.11$

364 I trekant DAE er $d = 8$, $a = 9$ og $e = 6$.



a) Bestem vinkel A .

$A = 78.58$



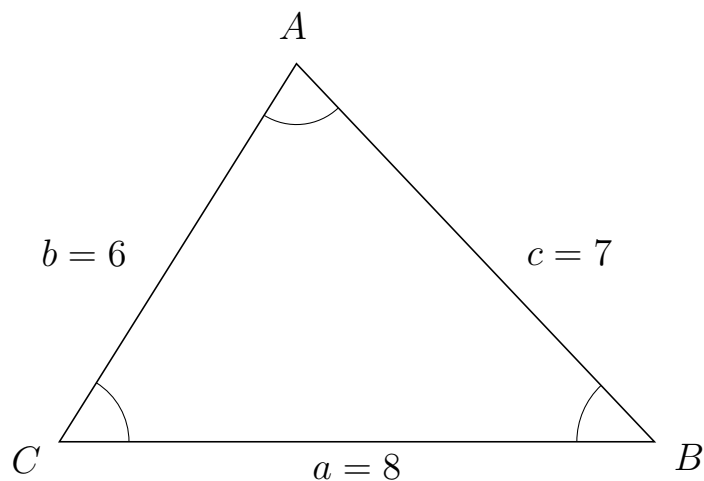
Trigonometri

Sider og vinkler abc

12. marts 2017



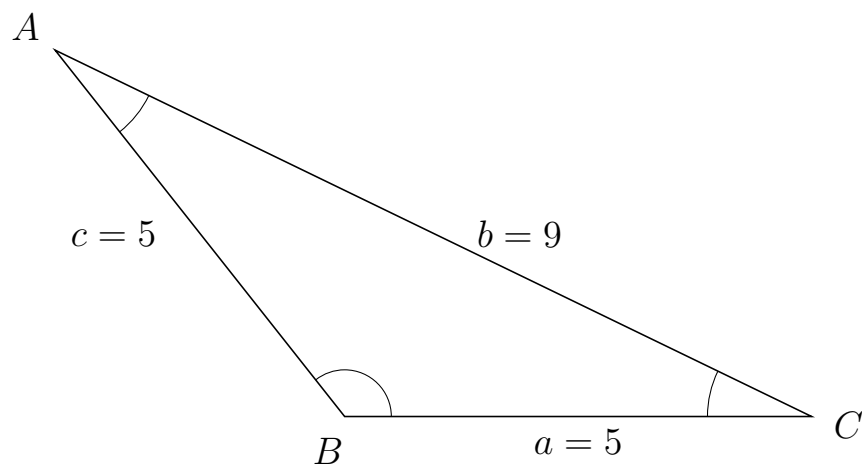
365 I trekant CAB er $c = 7$, $a = 8$ og $b = 6$.



a) Bestem vinkel A .

$A = 75.52$

366 I trekant BAC er $b = 9$, $a = 5$ og $c = 5$.



a) Bestem vinkel A .

$A = 25.84$

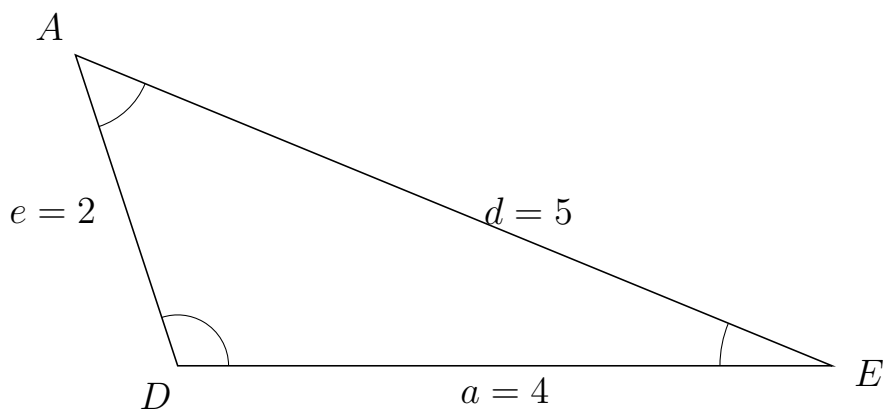


Trigonometri

Sider og vinkler abc

12. marts 2017

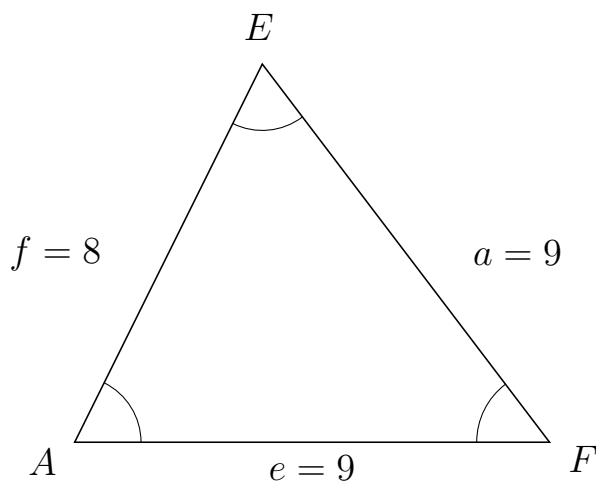
367 I trekant DAE er $d = 5$, $a = 4$ og $e = 2$.



a) Bestem vinkel A .

$A = 49.46$

368 I trekant AEF er $a = 9$, $e = 9$ og $f = 8$.



a) Bestem vinkel E .

$E = 63.61$



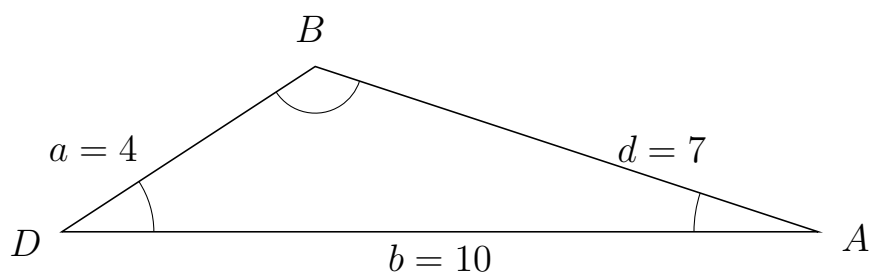
Trigonometri

Sider og vinkler abc

12. marts 2017



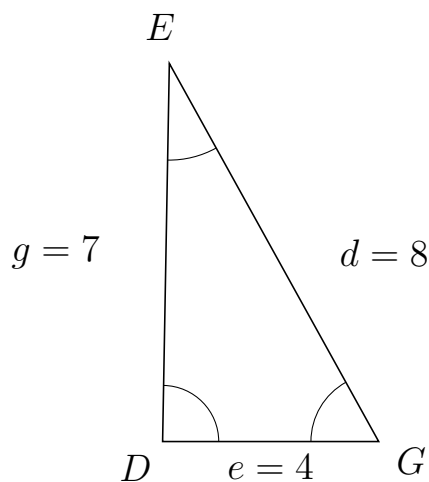
369 I trekant DBA er $d = 7$, $b = 10$ og $a = 4$.



a) Bestem vinkel B .

$B = 128.68$

370 I trekant DEG er $d = 8$, $e = 4$ og $g = 7$.



a) Bestem vinkel E .

$E = 29.99$



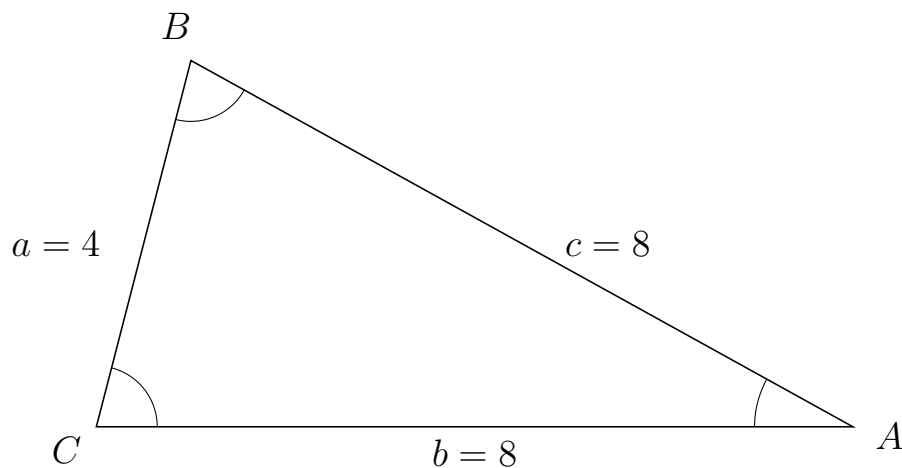
Trigonometri

Sider og vinkler abc

12. marts 2017



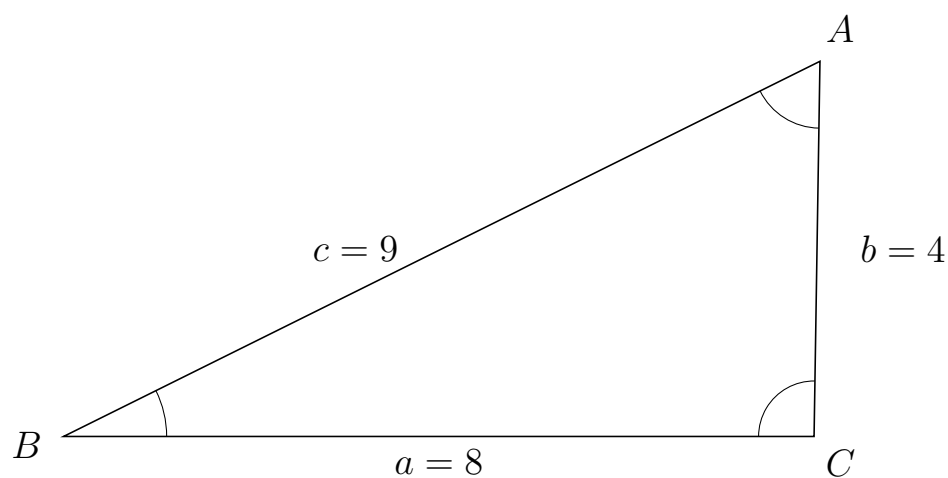
371 I trekant CBA er $c = 8$, $b = 8$ og $a = 4$.



a) Bestem vinkel B .

$B = 75.52$

372 I trekant BAC er $b = 4$, $a = 8$ og $c = 9$.



a) Bestem vinkel A .

$A = 62.72$



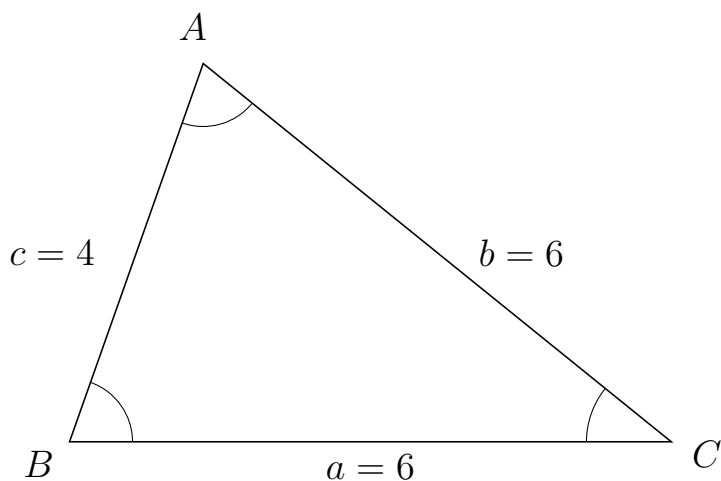
Trigonometri

Sider og vinkler abc

12. marts 2017



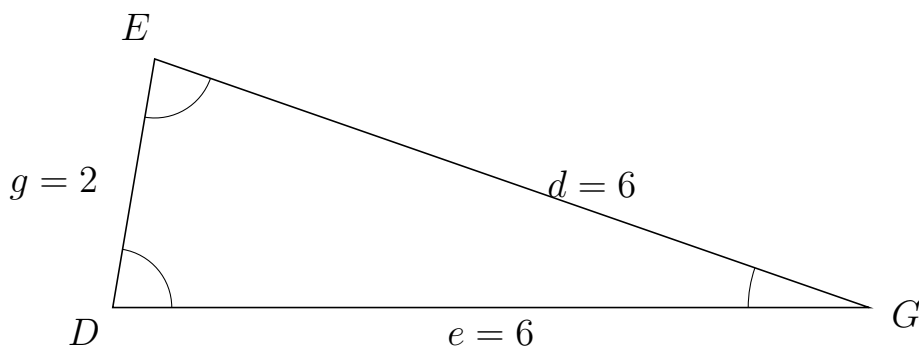
373 I trekant BAC er $b = 6$, $a = 6$ og $c = 4$.



a) Bestem vinkel A .


$A = 70.53$

374 I trekant DEG er $d = 6$, $e = 6$ og $g = 2$.



a) Bestem vinkel E .

$E = 80.41$

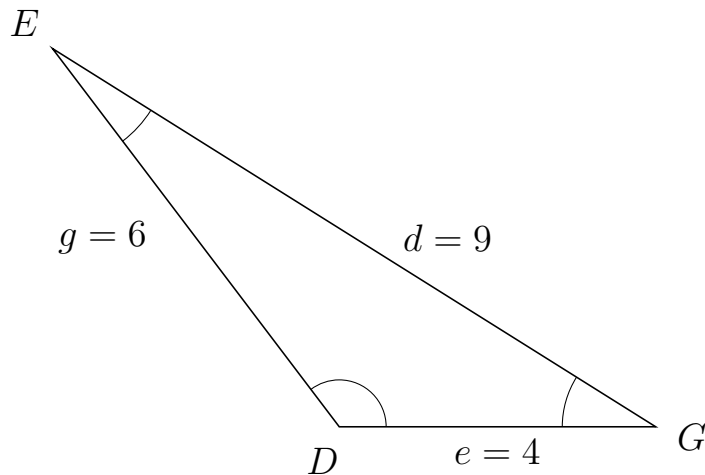


Trigonometri

Sider og vinkler abc

12. marts 2017

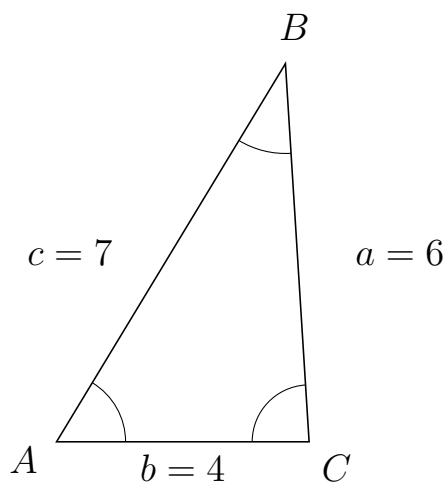
375 I trekant DEG er $d = 9$, $e = 4$ og $g = 6$.



a) Bestem vinkel E .


$E = 20.74$

376 I trekant ABC er $a = 6$, $b = 4$ og $c = 7$.



a) Bestem vinkel B .

$B = 34.77$

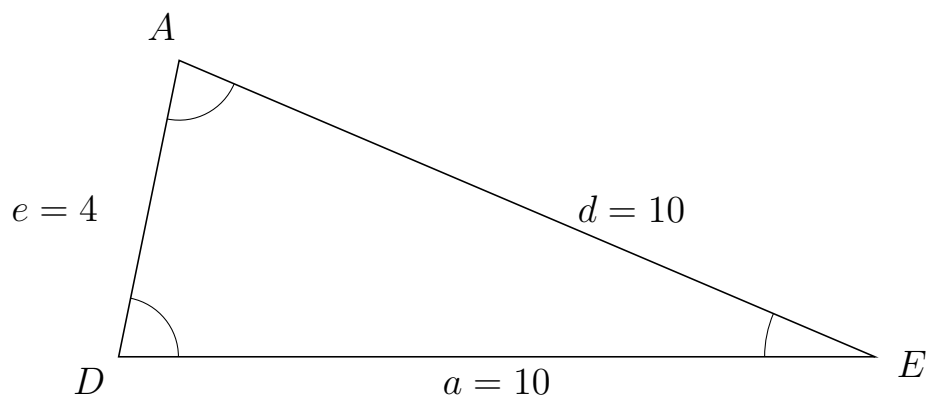


Trigonometri

Sider og vinkler abc

12. marts 2017

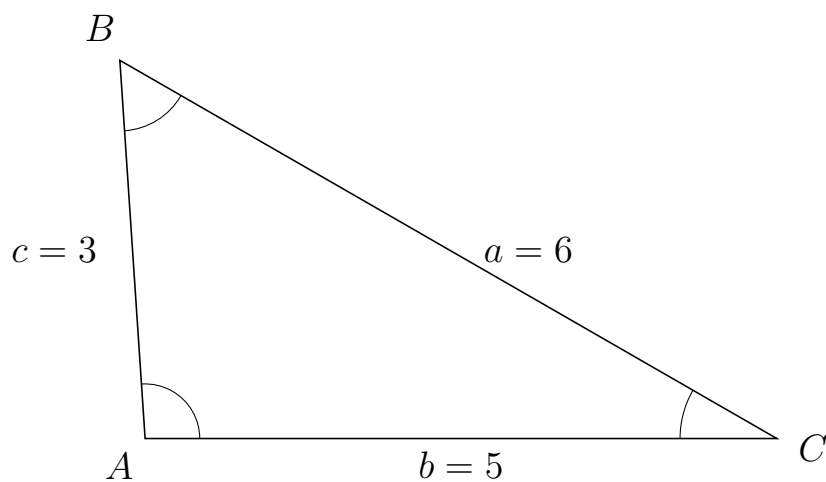
377 I trekant DAE er $d = 10$, $a = 10$ og $e = 4$.



a) Bestem vinkel A .

$A = 78.46$

378 I trekant ABC er $a = 6$, $b = 5$ og $c = 3$.



a) Bestem vinkel B .

$B = 56.25$

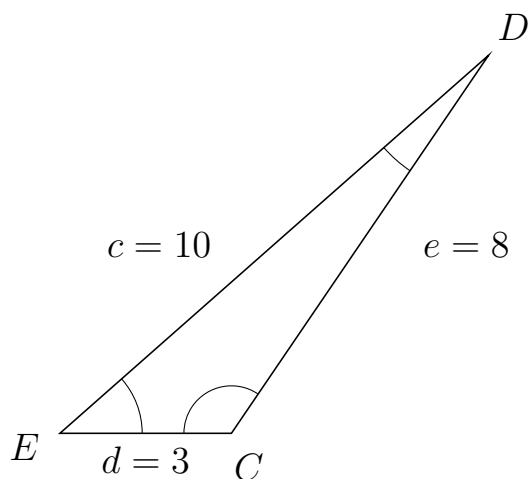


Trigonometri

Sider og vinkler abc

12. marts 2017

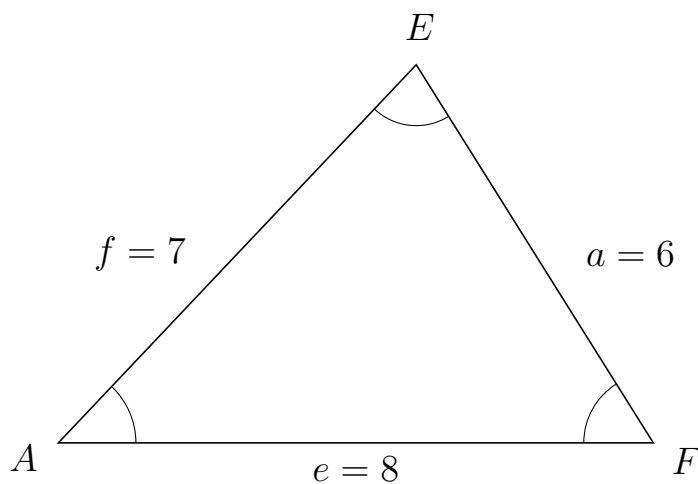
379 I trekant EDC er $e = 8$, $d = 3$ og $c = 10$.



a) Bestem vinkel D .

$D = 14.36$

380 I trekant AEF er $a = 6$, $e = 8$ og $f = 7$.



a) Bestem vinkel E .

$E = 75.52$



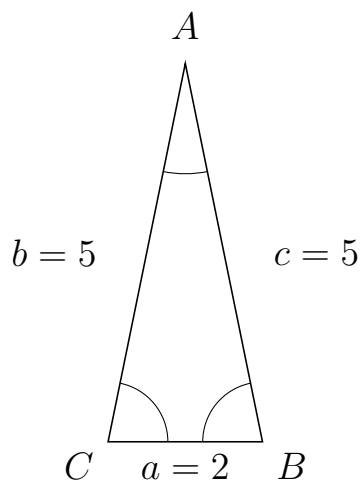
Trigonometri

Sider og vinkler abc

12. marts 2017



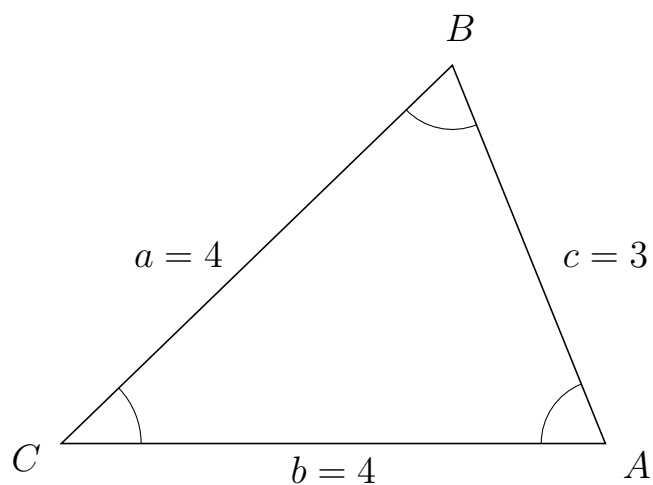
381 I trekant CAB er $c = 5$, $a = 2$ og $b = 5$.



a) Bestem vinkel A .


$A = 23.07$

382 I trekant CBA er $c = 3$, $b = 4$ og $a = 4$.



a) Bestem vinkel B .

$B = 67.98$



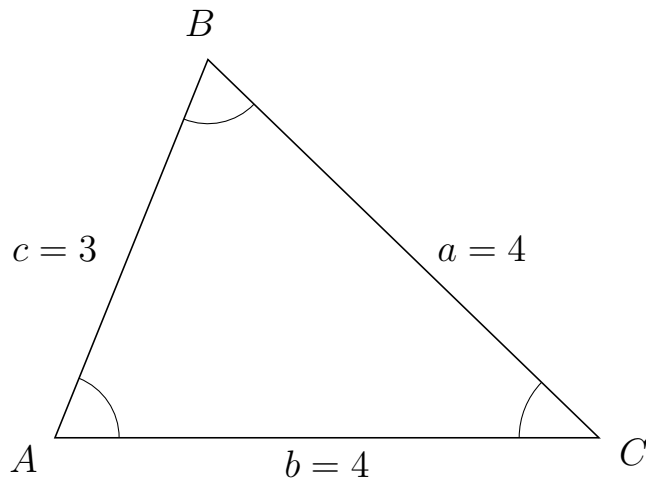
Trigonometri

Sider og vinkler abc

12. marts 2017



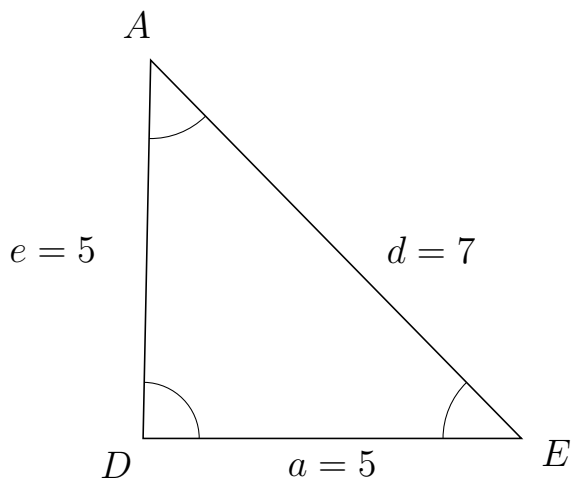
383 I trekant ABC er $a = 4$, $b = 4$ og $c = 3$.



a) Bestem vinkel B .

$B = 67.98$

384 I trekant DAE er $d = 7$, $a = 5$ og $e = 5$.



a) Bestem vinkel A .

$A = 45.57$



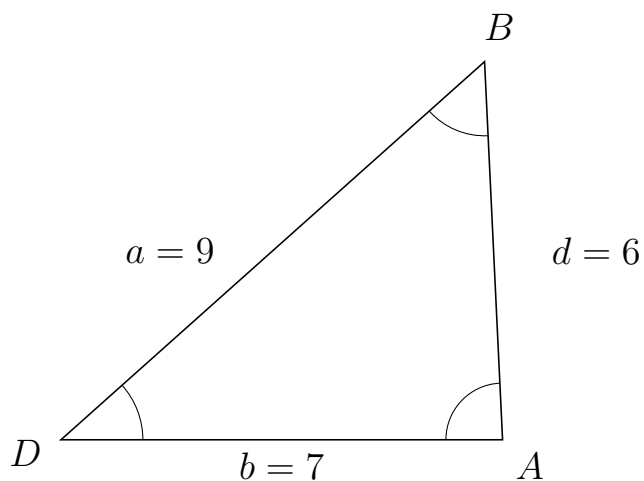
Trigonometri

Sider og vinkler abc

12. marts 2017



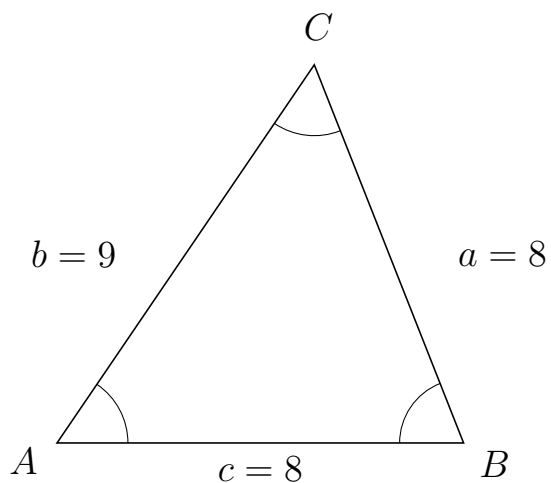
385 I trekant DBA er $d = 6$, $b = 7$ og $a = 9$.



a) Bestem vinkel B .

$B = 50.98$

386 I trekant ACB er $a = 8$, $c = 8$ og $b = 9$.



a) Bestem vinkel C .

$C = 55.77$

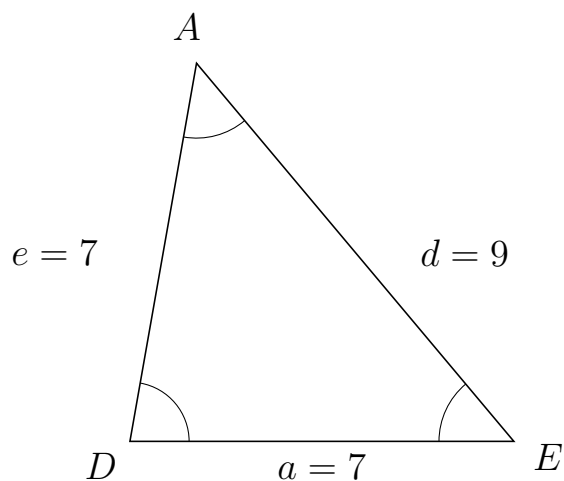


Trigonometri

Sider og vinkler abc

12. marts 2017

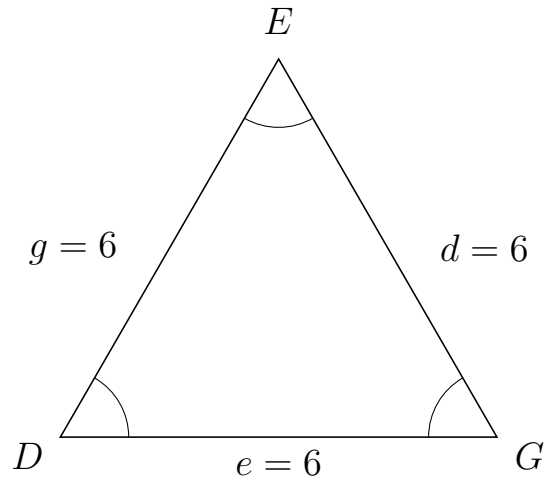
387 I trekant DAE er $d = 9$, $a = 7$ og $e = 7$.



a) Bestem vinkel A .

$A = 49.99$

388 I trekant DEG er $d = 6$, $e = 6$ og $g = 6$.



a) Bestem vinkel E .

$E = 60$



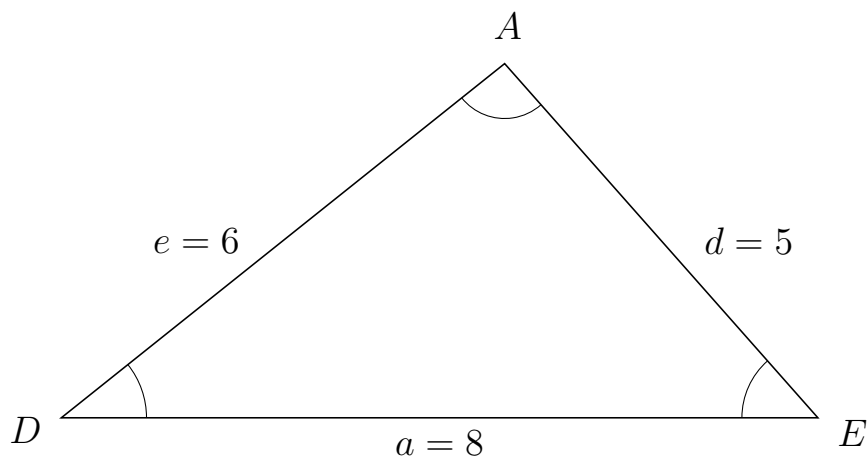
Trigonometri

Sider og vinkler abc

12. marts 2017



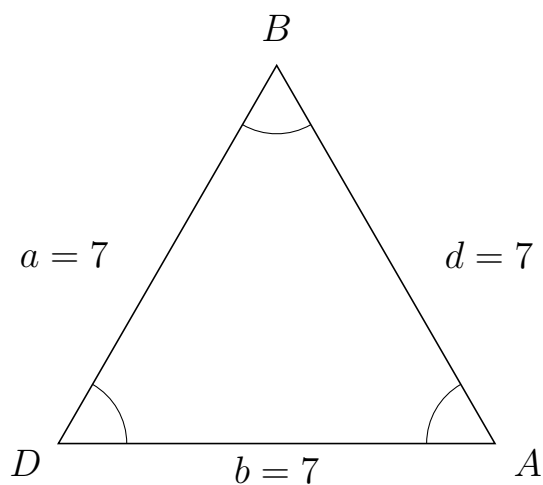
389 I trekant DAE er $d = 5$, $a = 8$ og $e = 6$.



a) Bestem vinkel A .

$A = 92.87$

390 I trekant DBA er $d = 7$, $b = 7$ og $a = 7$.



a) Bestem vinkel B .

$B = 60$

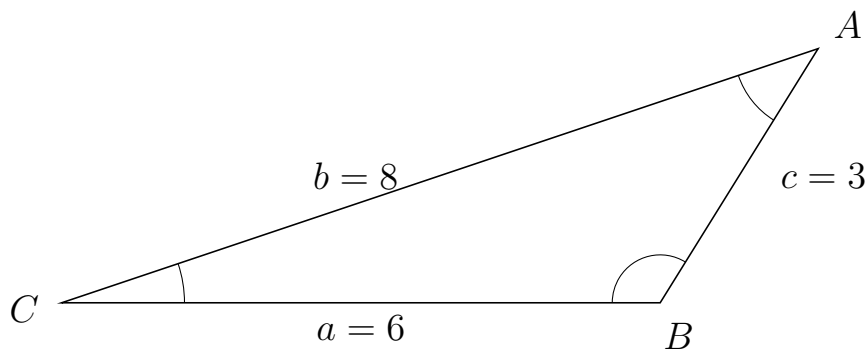


Trigonometri

Sider og vinkler abc

12. marts 2017

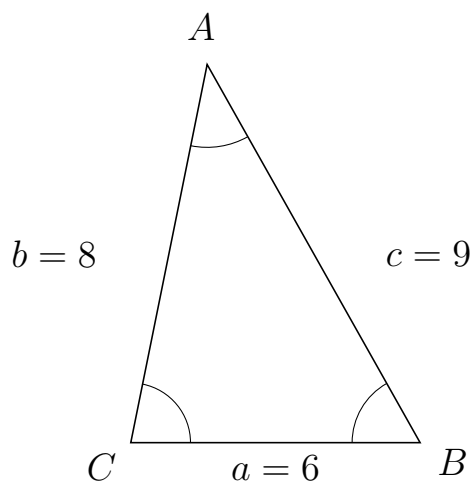
391 I trekant CAB er $c = 3$, $a = 6$ og $b = 8$.



a) Bestem vinkel A .

$A = 39.57$

392 I trekant CAB er $c = 9$, $a = 6$ og $b = 8$.



a) Bestem vinkel A .

$A = 40.8$

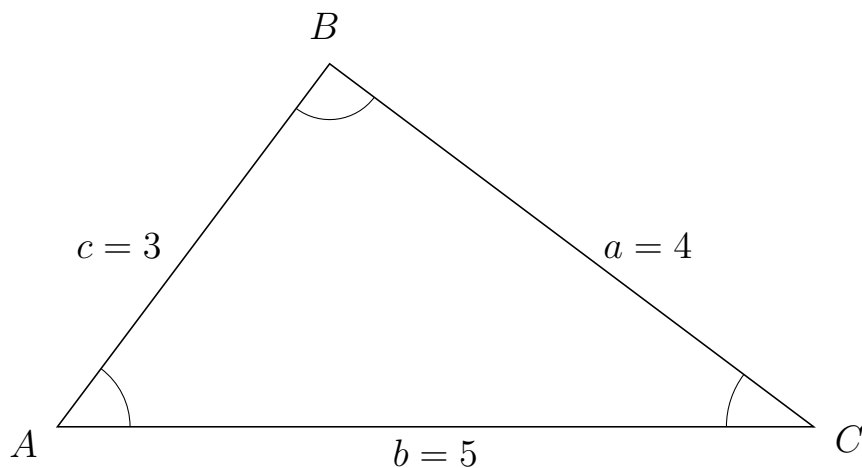


Trigonometri

Sider og vinkler abc

12. marts 2017

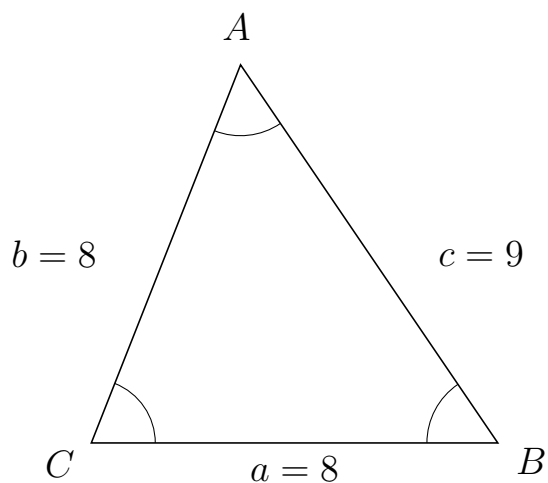
393 I trekant ABC er $a = 4$, $b = 5$ og $c = 3$.



a) Bestem vinkel B .

$B = 90$

394 I trekant CAB er $c = 9$, $a = 8$ og $b = 8$.



a) Bestem vinkel A .

$A = 55.77$



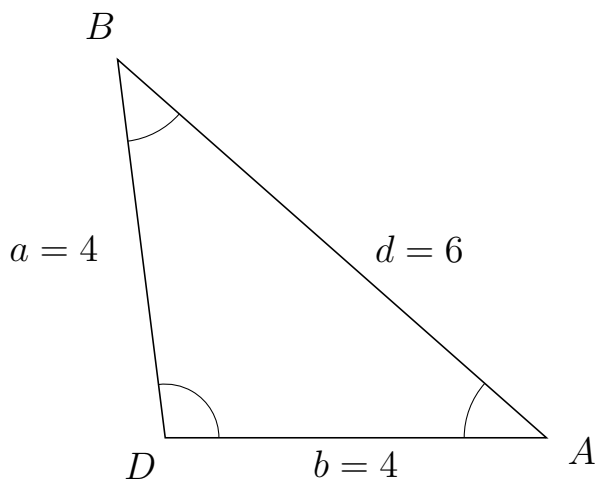
Trigonometri

Sider og vinkler abc

12. marts 2017



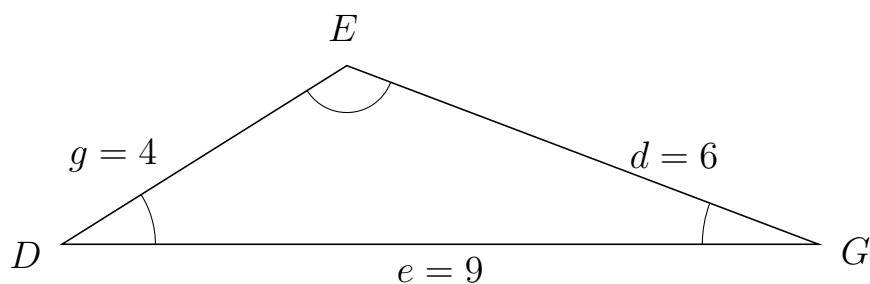
395 I trekant DBA er $d = 6$, $b = 4$ og $a = 4$.



a) Bestem vinkel B .


$B = 41.41$

396 I trekant DEG er $d = 6$, $e = 9$ og $g = 4$.



a) Bestem vinkel E .

$E = 127.17$

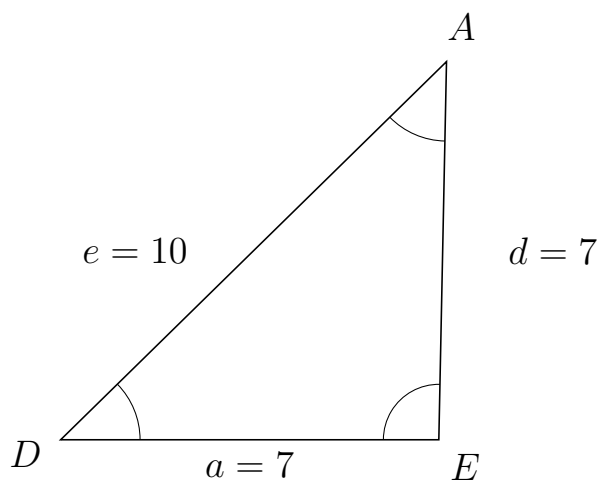


Trigonometri

Sider og vinkler abc

12. marts 2017

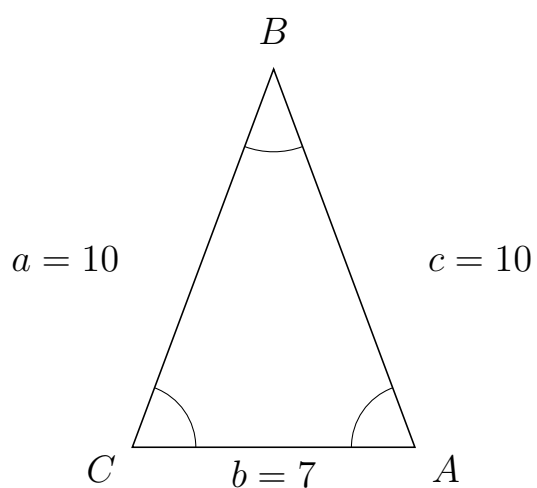
397 I trekant DAE er $d = 7$, $a = 7$ og $e = 10$.



a) Bestem vinkel A .

$A = 44.42$

398 I trekant CBA er $c = 10$, $b = 7$ og $a = 10$.



a) Bestem vinkel B .

$B = 40.97$



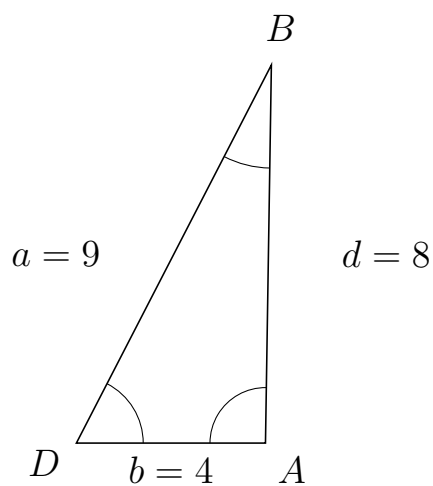
Trigonometri

Sider og vinkler abc

12. marts 2017



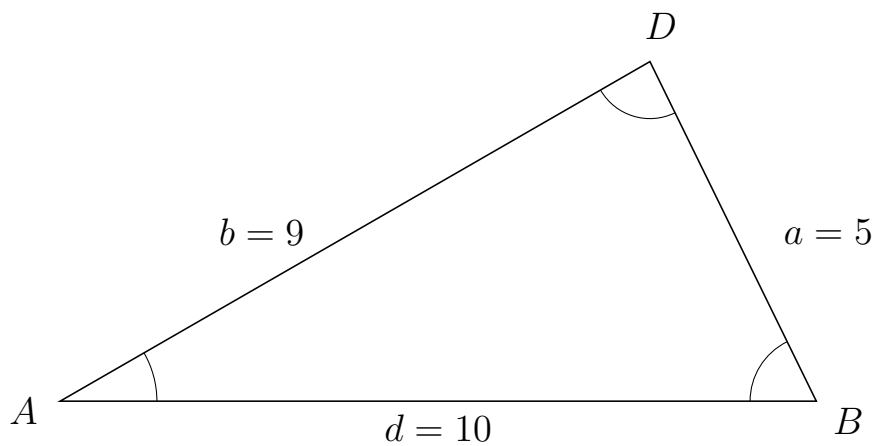
399 I trekant DBA er $d = 8$, $b = 4$ og $a = 9$.



a) Bestem vinkel B .

$B = 26.38$

400 I trekant ADB er $a = 5$, $d = 10$ og $b = 9$.



a) Bestem vinkel D .

$D = 86.18$



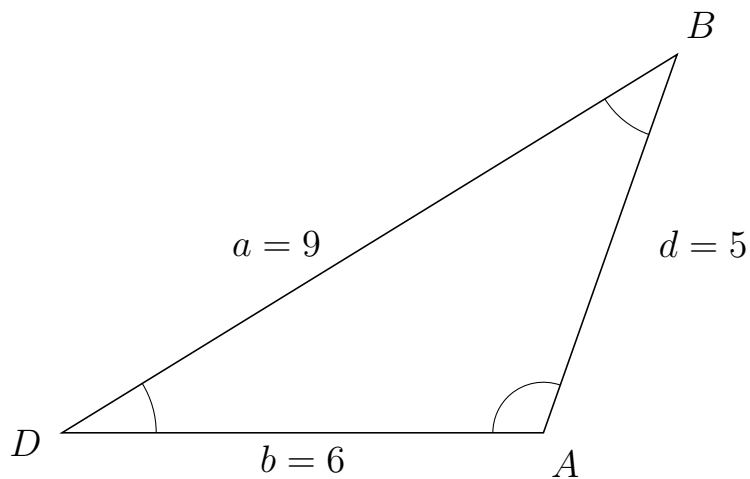
Trigonometri

Sider og vinkler abc

12. marts 2017



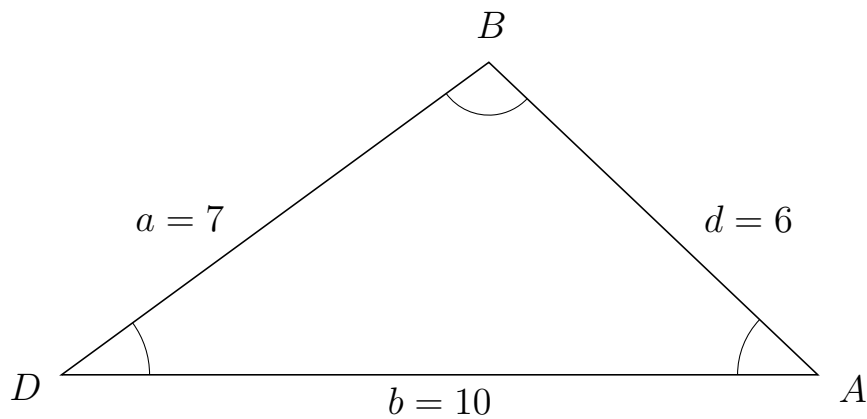
401 I trekant DBA er $d = 5$, $b = 6$ og $a = 9$.



a) Bestem vinkel B .

$B = 38.94$

402 I trekant DBA er $d = 6$, $b = 10$ og $a = 7$.



a) Bestem vinkel B .

$B = 100.29$



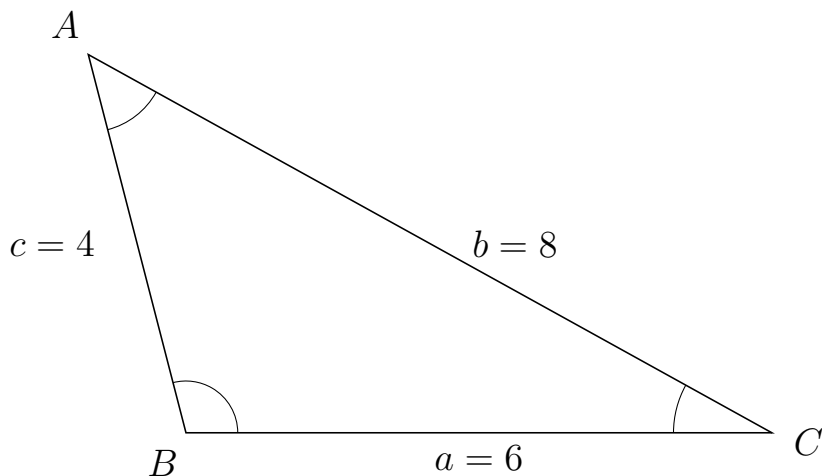
Trigonometri

Sider og vinkler abc

12. marts 2017



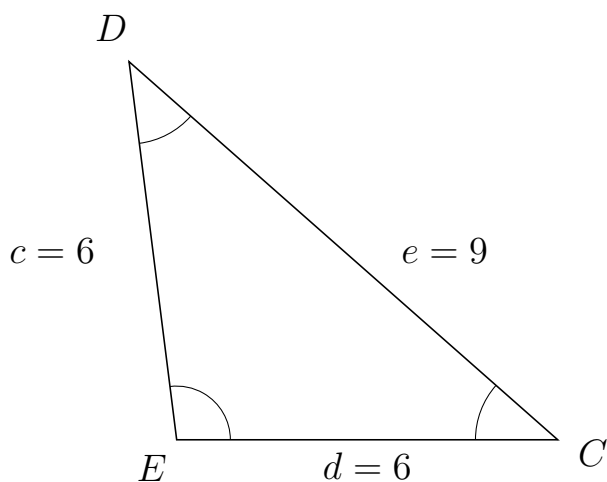
403 I trekant BAC er $b = 8$, $a = 6$ og $c = 4$.



a) Bestem vinkel A .

$A = 46.57$

404 I trekant EDC er $e = 9$, $d = 6$ og $c = 6$.



a) Bestem vinkel D .

$D = 41.41$



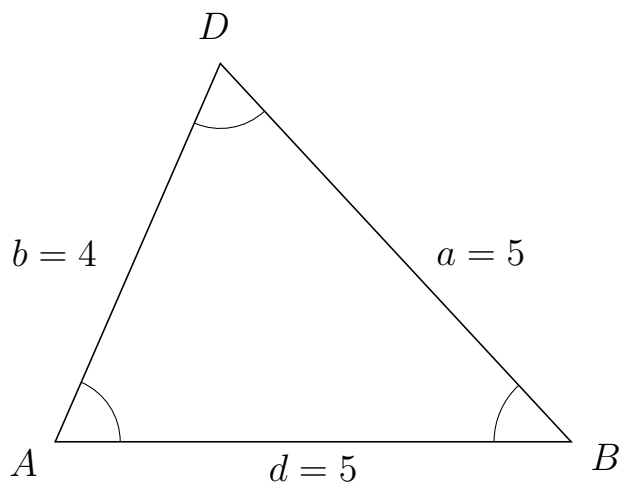
Trigonometri

Sider og vinkler abc

12. marts 2017



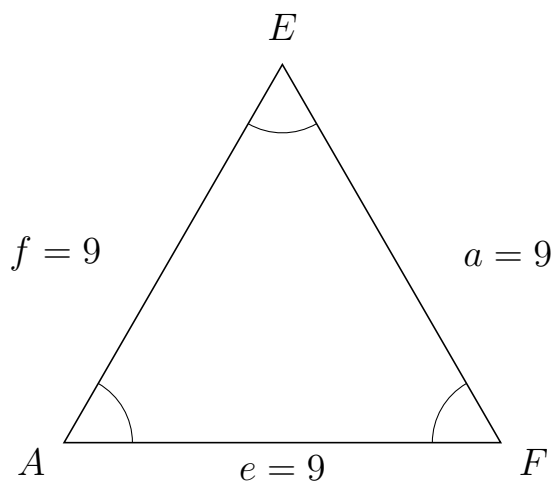
405 I trekant ADB er $a = 5$, $d = 5$ og $b = 4$.



a) Bestem vinkel D .

$D = 66.42$

406 I trekant AEF er $a = 9$, $e = 9$ og $f = 9$.



a) Bestem vinkel E .

$E = 60$

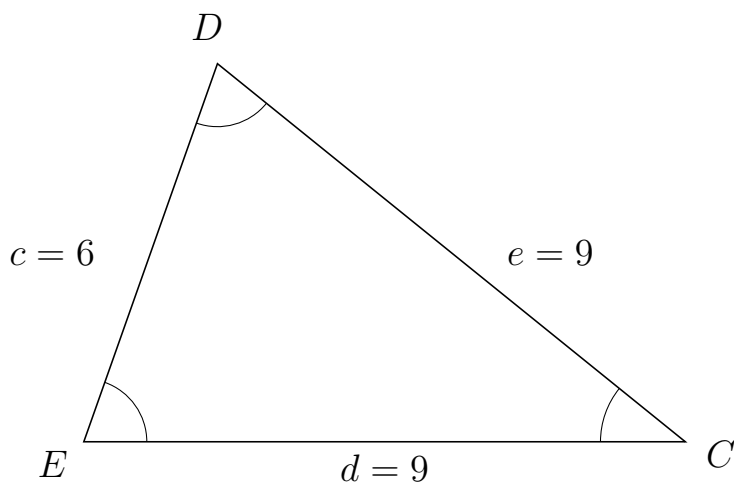


Trigonometri

Sider og vinkler abc

12. marts 2017

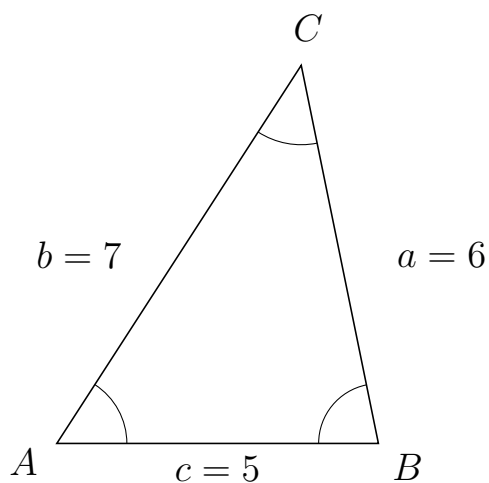
407 I trekant EDC er $e = 9$, $d = 9$ og $c = 6$.



a) Bestem vinkel D .


$D = 70.53$

408 I trekant ACB er $a = 6$, $c = 5$ og $b = 7$.



a) Bestem vinkel C .

$C = 44.42$

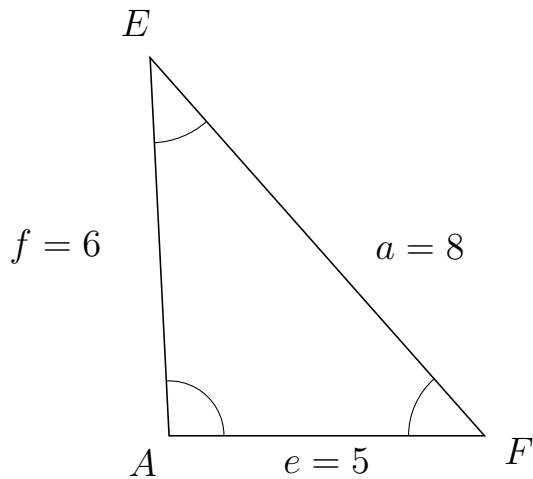


Trigonometri

Sider og vinkler abc

12. marts 2017

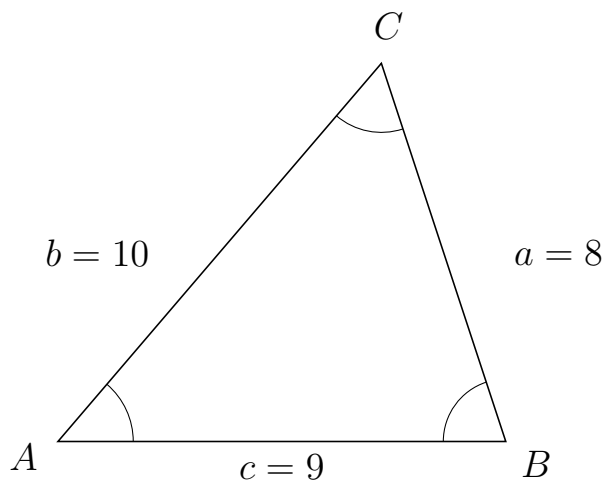
409 I trekant AEF er $a = 8$, $e = 5$ og $f = 6$.



a) Bestem vinkel E .

$E = 38.62$

410 I trekant ACB er $a = 8$, $c = 9$ og $b = 10$.



a) Bestem vinkel C .

$C = 58.75$



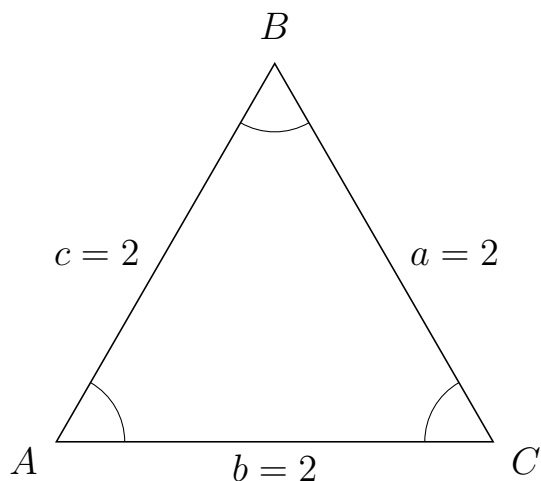
Trigonometri

Sider og vinkler abc

12. marts 2017



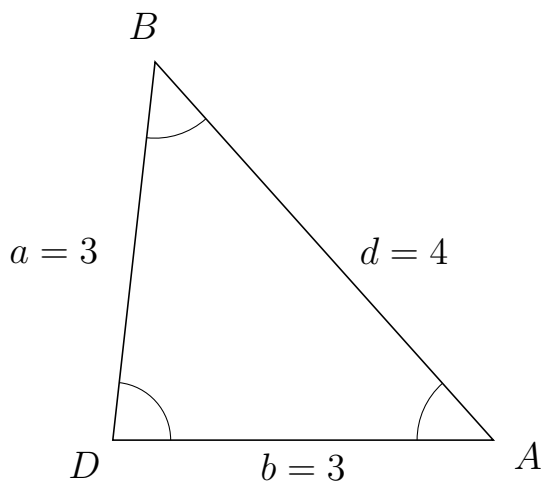
411 I trekant ABC er $a = 2$, $b = 2$ og $c = 2$.



a) Bestem vinkel B .


$B = 60$

412 I trekant DBA er $d = 4$, $b = 3$ og $a = 3$.



a) Bestem vinkel B .

$B = 48.19$



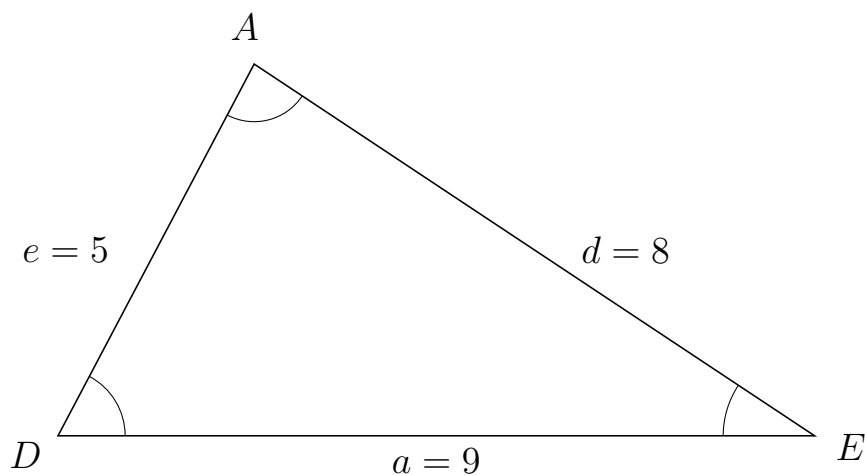
Trigonometri

Sider og vinkler abc

12. marts 2017



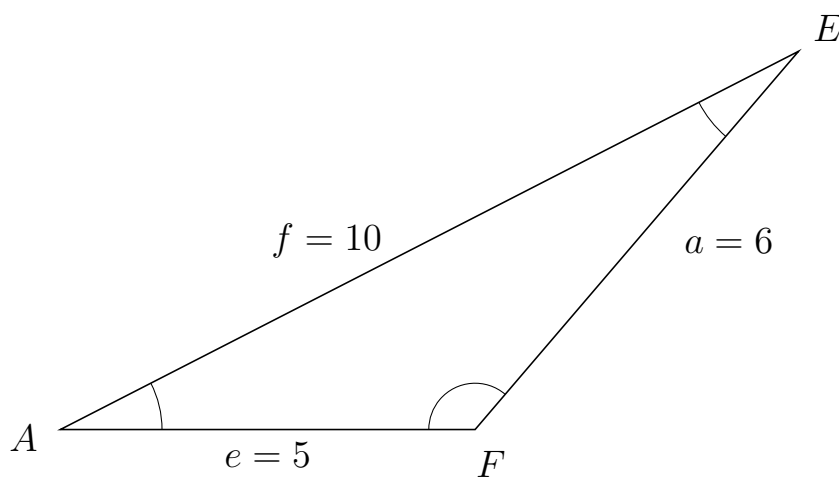
413 I trekant DAE er $d = 8$, $a = 9$ og $e = 5$.



a) Bestem vinkel A .

$A = 84.26$

414 I trekant AEF er $a = 6$, $e = 5$ og $f = 10$.



a) Bestem vinkel E .

$E = 22.33$



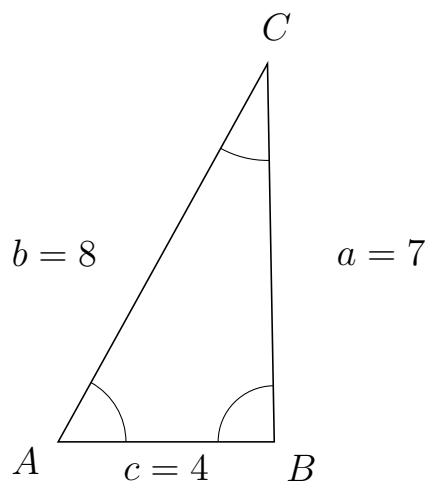
Trigonometri

Sider og vinkler abc

12. marts 2017



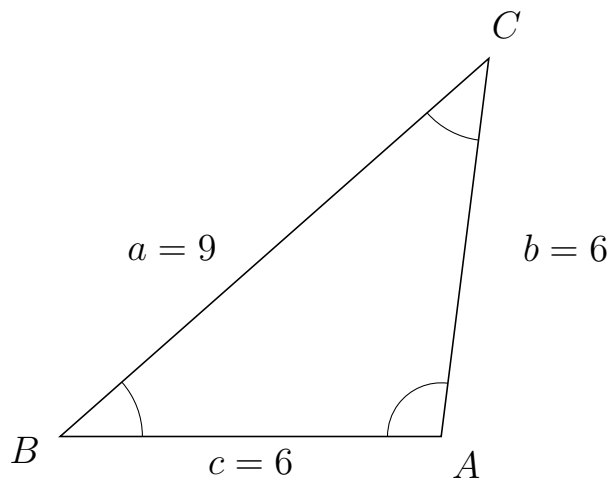
415 I trekant ACB er $a = 7$, $c = 4$ og $b = 8$.



a) Bestem vinkel C .

$C = 29.99$

416 I trekant BCA er $b = 6$, $c = 6$ og $a = 9$.



a) Bestem vinkel C .

$C = 41.41$

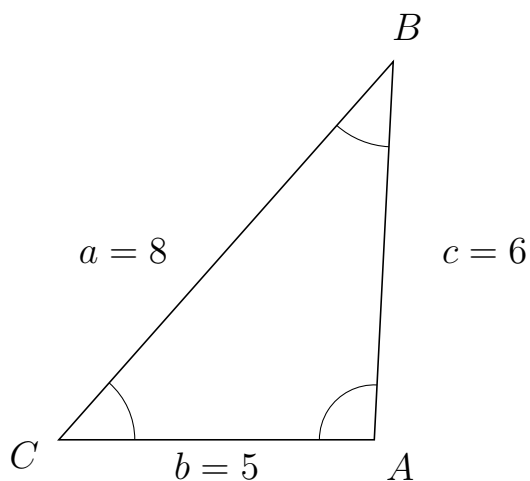


Trigonometri

Sider og vinkler abc

12. marts 2017

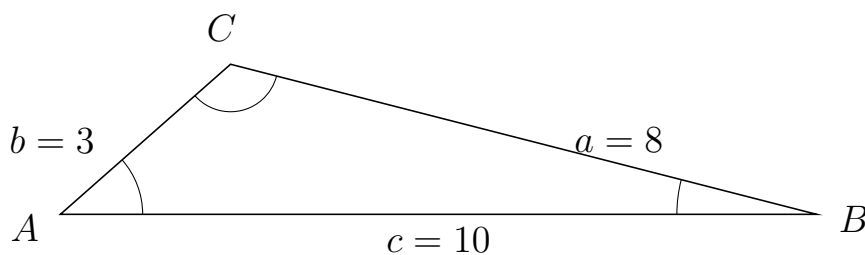
417 I trekant CBA er $c = 6$, $b = 5$ og $a = 8$.



a) Bestem vinkel B .

$B = 38.62$

418 I trekant ACB er $a = 8$, $c = 10$ og $b = 3$.



a) Bestem vinkel C .

$C = 124.23$

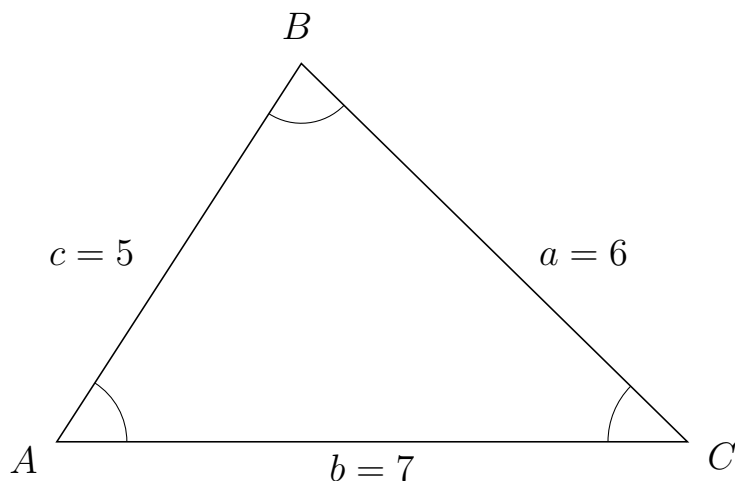


Trigonometri

Sider og vinkler abc

12. marts 2017

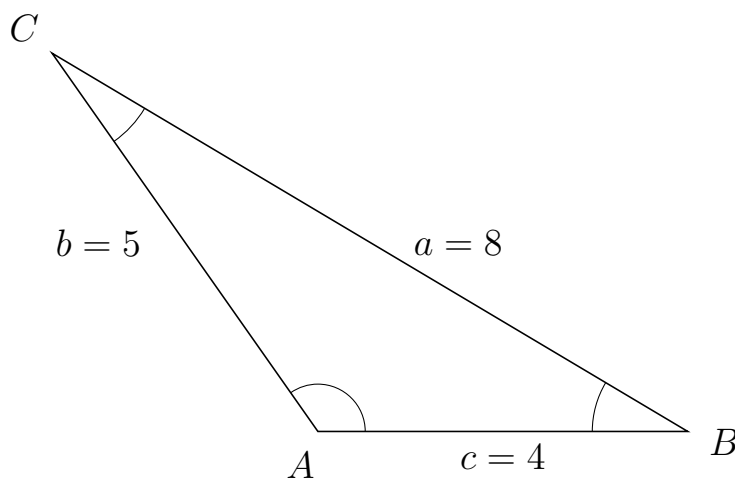
419 I trekant ABC er $a = 6$, $b = 7$ og $c = 5$.



a) Bestem vinkel B .

$B = 78.46$

420 I trekant ACB er $a = 8$, $c = 4$ og $b = 5$.



a) Bestem vinkel C .

$C = 24.15$

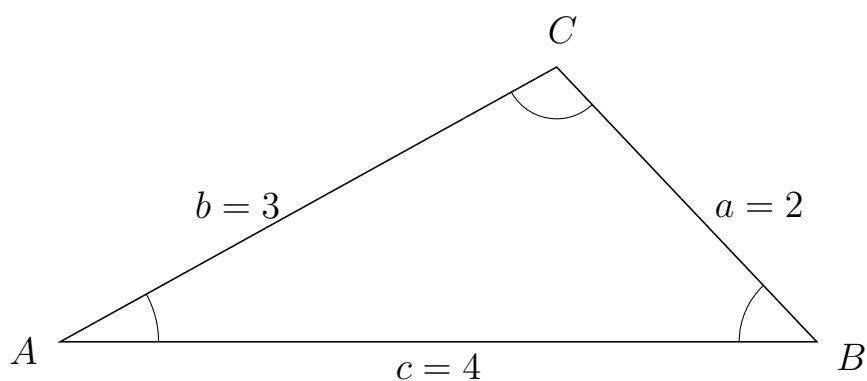


Trigonometri

Sider og vinkler abc

12. marts 2017

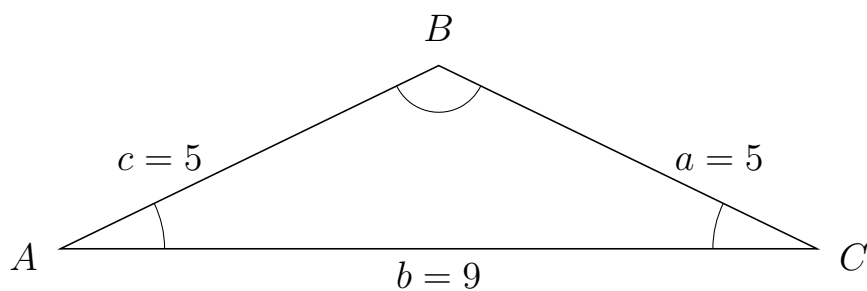
421 I trekant ACB er $a = 2$, $c = 4$ og $b = 3$.



a) Bestem vinkel C .


$C = 104.48$

422 I trekant ABC er $a = 5$, $b = 9$ og $c = 5$.



a) Bestem vinkel B .

$B = 128.32$



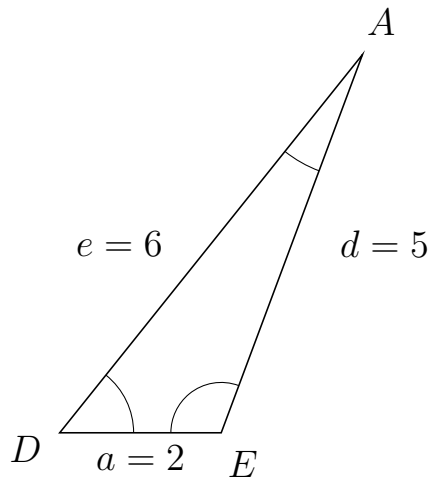
Trigonometri

Sider og vinkler abc

12. marts 2017



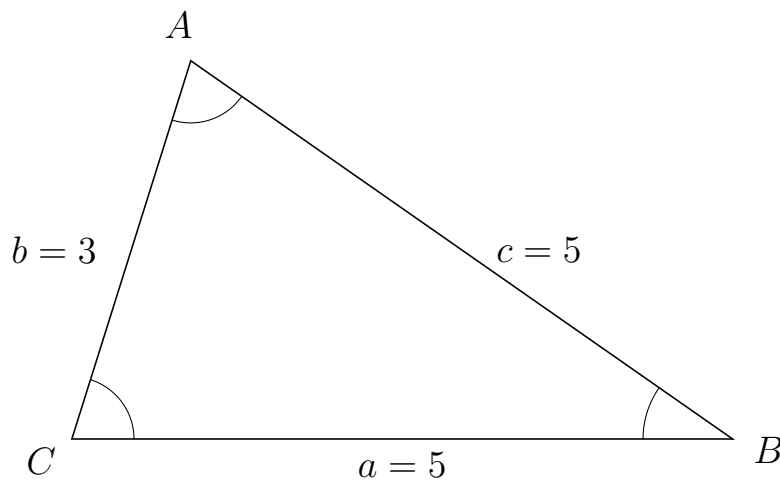
423 I trekant DAE er $d = 5$, $a = 2$ og $e = 6$.



a) Bestem vinkel A .

$A = 18.19$

424 I trekant CAB er $c = 5$, $a = 5$ og $b = 3$.



a) Bestem vinkel A .

$A = 72.54$